



Code 0012020

# THE TIMER NATIONAL SERIES

## MONITORING LEARNERS' PROGRESS

Grade 4 - 2020

### MATHEMATICS ACTIVITIES

NAME.....

Learner's Number:

Gender Boy

Girl


County name ..... County code

Sub county name ..... Sub county code

School name ..... School code

The grid below is to be filled by the teacher after marking the learner's work

	Level 1	Level 2	Level 3	Level 4
Numbers 1-15				
Measurement 16-23				
Geometry 24-25				

11. Multiply:  
  
 \_\_\_\_\_ X \_\_\_\_\_ = \_\_\_\_\_

12. Fill in the gap in the multiplication table

x	2	3
2	4	6
3	6	9
4	8	—

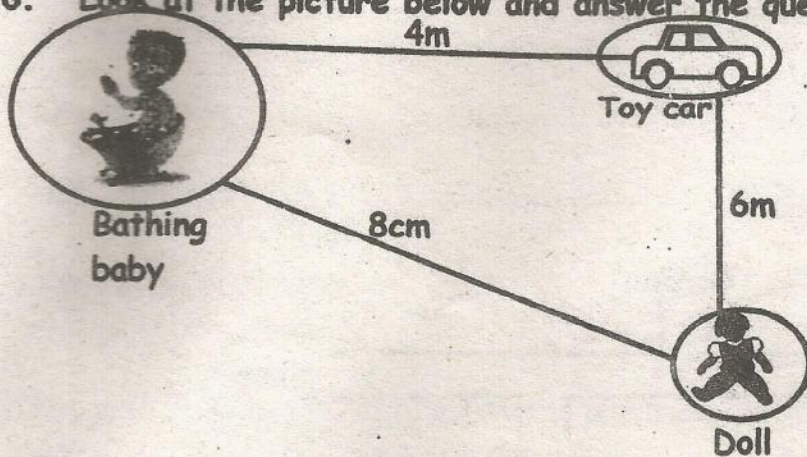
13. Use repeated subtraction to work out:  
 $20 \div 4 = \underline{\hspace{2cm}}$

14. If I share 24 sweets among 8 babies, how many sweets will each baby get?

15. There are 12 cows. Each cow has 4 legs. How many legs do they have altogether?


Measurements

16. Look at the picture below and answer the question that follows



What is the length from the baby to the doll? \_\_\_\_\_

17. Add 15m to 7m = \_\_\_\_\_ m



18. Add the mass of apples and mangoes. \_\_\_\_\_

## Numbers

What is the position of these pictures?



1.



2.



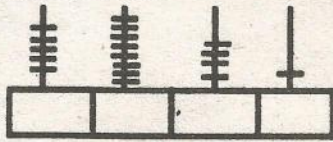
First

Second


Fill in the place value

3. Four thousands eight hundreds six tens two ones = \_\_\_\_\_

4. Fill in the abacus



5. Colour using crayon  $\frac{1}{4}$



6.  $562 + 34 =$  \_\_\_\_\_

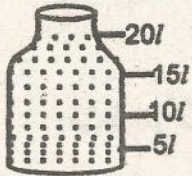
7. 
$$\begin{array}{r} 475 \\ +18 \\ \hline \end{array}$$

8. My uncle has 352 black goats and 186 white goats. How many goats does he have all together?

Fill in the missing numbers in question 9 and 10

9.  $35 - \square = 15$

10. 
$$\begin{array}{ccccccc} | & | & | & | & | \\ \hline 368 & 365 & 362 & \underline{\quad} & 356 \end{array}$$



19. How much water does the jerry can hold? \_\_\_\_\_

20. A bus took 6 hours 45 min to travel from Isiolo to Nairobi. It then took 3 hours 10 min back to Isiolo. How long did the journey take?

21. What is the time?



\_\_\_\_\_ past \_\_\_\_\_

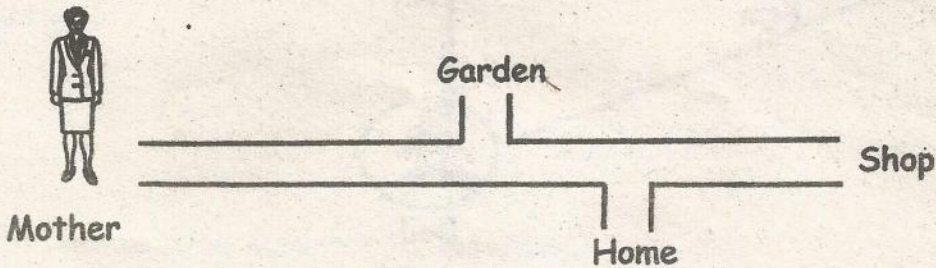
22. Add these notes

100 + 500 = \_\_\_\_\_

23. During Christmas, my friend bought me a book at sh 320 and a school bag at sh 150. How much money did my friend spend?

Geometry

24. Look at the picture below



If the mother is going home which side will she turn? \_\_\_\_\_

25. Complete the pattern below using these shapes -Circle, Square, Triangle



\_\_\_\_\_