

# STEGA ASSESSMENT TEST

## COMPETENCY BASED CURRICULUM



### GRADE 2 2020

## MATHEMATICAL ACTIVITIES

NAME : \_\_\_\_\_

GENDER: Boy  Girl

SCHOOL NAME: \_\_\_\_\_

The teacher to fill the grid below after marking the learner's work.

Strand	Numbers	Measurement	Geometry
Question numbers	1 - 15	16 - 23	24 - 25
No of questions correct			
Performance Level			



**Write the next numbers**

1. 30, 40, 50, \_\_\_\_\_, \_\_\_\_\_, 80

2. Circle the greater number

58

85

3. Order from least to the greatest

15, 8, 10, 24 \_\_\_\_\_

4. Draw the correct number of circles

8


**Write the missing numbers**

5.  $13 = \underline{\hspace{1cm}}$  tens  $\underline{\hspace{1cm}}$  ones

6. 2 tens 4 ones = \_\_\_\_\_

7.  $\begin{array}{r} 30 \\ + 30 \\ \hline \end{array}$

$\begin{array}{r} 30 \\ + 30 \\ \hline \end{array}$

8.  $26 + 3 = \underline{\hspace{2cm}}$

9.  $\begin{array}{r} 6 \\ + 10 \\ \hline \end{array}$

$\begin{array}{r} 6 \\ + 10 \\ \hline \end{array}$

10.  $4 + \square = 9$



11.  $\square + 6 = 10$

12. 
$$\begin{array}{r} 45 \\ - 3 \\ \hline \end{array}$$

13.  $12 - 6 = \underline{\hspace{2cm}}$

14.  $8 - \square = 5$

15.  $50 - 30 = \underline{\hspace{2cm}}$

16. Complete

One week has                      days.

17. Which one holds more?

Cup




Bucket



18. Which one is heavier?                     

Table



Glass


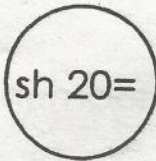


19. Circle the longest line.

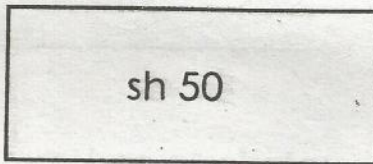
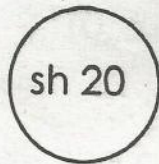




20. We come to school in the \_\_\_\_\_  
(evening, morning, night)

21.  +  = \_\_\_\_\_ shillings

22. Which one is a coin? \_\_\_\_\_



23. A triangle has \_\_\_\_\_ corners.

24. Write the next pattern.



25. There are \_\_\_\_\_ circles in the picture.

