




COMPETENCY BASED CURRICULUM
GRADE 3 MIDTERM I 2020 ASSESSMENT
MATHEMATICS ACTIVITIES

NAME : _____ DATE: _____

I. Fill in the gaps in words



Write in short.

6. Sixth _____

7. Seventh. _____

8. Eighteenth. _____

9. Nineteenth. _____

Complete the number sentence.

10. 101, _____, 103, _____, _____, 106.

11. 200, _____, 203, _____, _____, 206.

12. 425, 430, _____, _____, _____, 450.

13. 802, 804, _____, _____, _____, 812

Write the following in words.

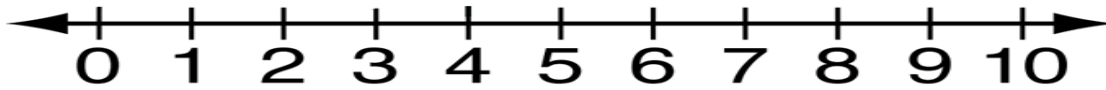
14. 82 _____

15. 209 _____

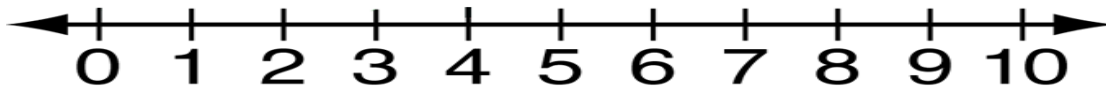
16. 499 _____

17. 908 _____

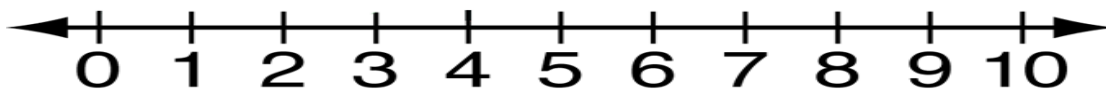
18. Skip by one from 3 to the right 4 times.



19. Skip by 3 from 0 to the right 3 times.

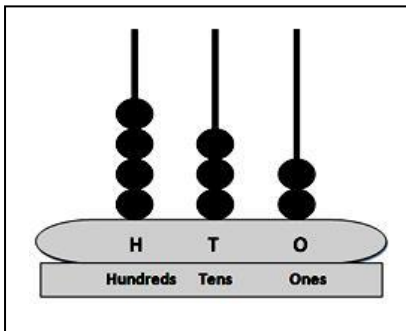


20. Skip by 2 from 8 to the left 4 times.



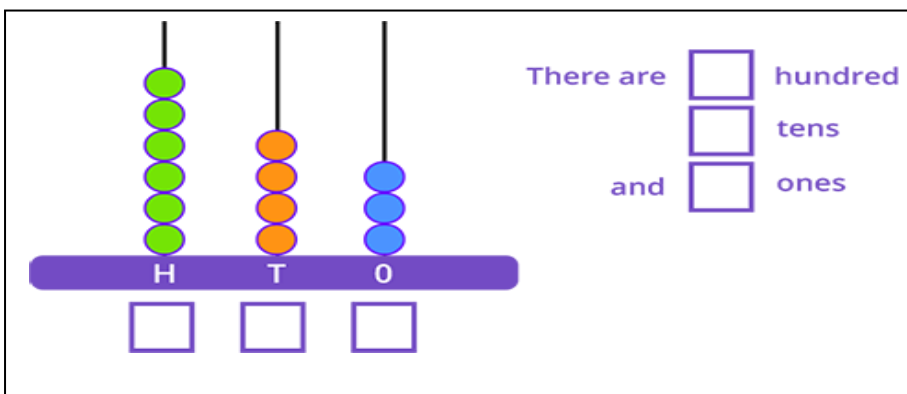
Write the number represented.

21.



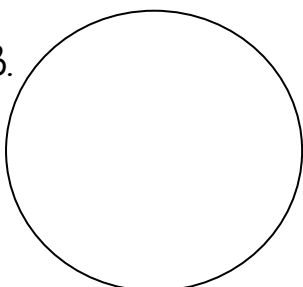
----- Hundreds, ----- tens ----- ones = -----

22.




Shade the half of these shapes.

23.



24.



25.

