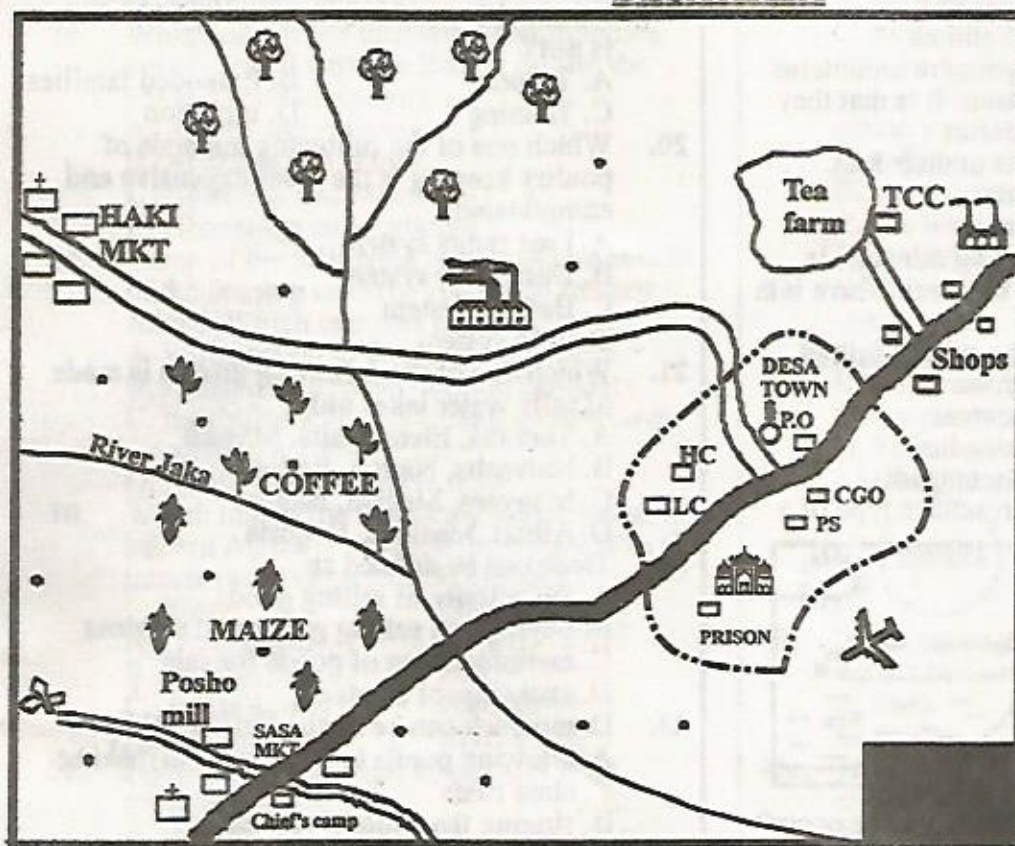


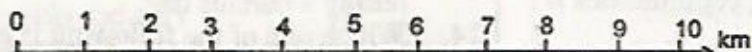
### DESA AREA



### KEY

	Tarmac road
	Murrum road
	Forest
	Huts
	Mosque
	Sand pit
	River and bridge
	Permanent buildings
	Post office
	MKT Market
	Sawmill
	TCC Tea collection centre
	PS Police station
	Tea factory
	LC Law courts
	Air field
	HC Health centre
	Church
	Town boundary
	CGO County Government Offices

SCALE:



Study the map of Desa area and answer questions 1 to 7

- What is the direction of Haki market from the air field?  
A. South East                      B. North East  
C. South West                      D. North west
- Traders at Sasa market get their trade licences from the  
A. police station  
B. county government offices  
C. law courts  
D. chief's camp
- The type of soil found in the northern part of Desa area is likely to be  
A. red volcanic soil              B. sand soil  
C. black cotton soil              D. alluvial soil
- The most widespread form of transport in Desa area is  
A. air transport                      B. road transport  
C. water transport                      D. railway transport
- Which one of the following shows that there is administration of justice in Desa town? The presence of a  
A. prison  
B. County government office  
C. Law court  
D. Police station
- Which one of the following economic activities is **not** carried out in Desa area?  
A. Agriculture  
B. Mining  
C. Trading  
D. Fishing
- The main religion of the people of Desa area is  
A. Christianity  
B. Hinduism  
C. Islam  
D. African traditional Religion



8. Which one of the following statements is not true about longitudes?
- They begin from the north pole to south pole.
  - They are also called meridians.
  - They are parallel to each other.
  - They are measured up to  $180^\circ$  to the East and also to the west.

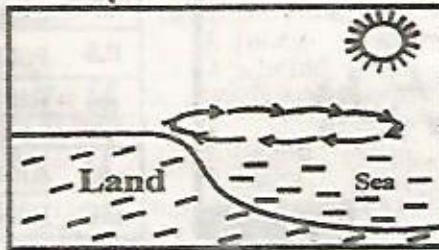
9. The main language group living in South Sudan are the
- Bantus
  - Nilotes
  - Cushites
  - Semites

10. The Ruwenzori and Kipengere mountains have one thing in common. It is that they
- are located on boundaries.
  - have mineral deposits at their foot.
  - are examples of horsts.
  - are extinct volcanoes.

11. Which one of the following minerals is wrongly matched with the area where it is mined?

Mineral	Area where mined
A. Limestone	Kimwarer
B. Salt	Ngomeni
C. Diatomite	Kariandusi
D. Soda ash	Lake magadi

12. The diagram below represents a type of a breeze



At what time does the above breeze occur?

- In the evening
  - At night
  - At dawn
  - Day time
13. Which one of the following communities is the odd one out?

- Wadawida
- Pokomo
- Abakuria
- Agiriama

14. The type of climate experienced where cloves, sugarcane and coconuts grow is
- cool and dry
  - hot and wet
  - hot and dry
  - cool and wet

15. The head of a ward is known as

- a councillor
- people's representative
- member of the county assembly
- a sub-county commissioner

16. In which one of the following sections of a river are ox-bow lakes formed?

- Senile stage
- Source
- Youthful stage
- Mouth

17. Below are characteristics of a certain type of vegetation

- It is evergreen.
- There are giant indigenous trees
- Trees grow to a height of 40 metres and above
- The trees form a canopy

The type of vegetation described above is

- mangrove forests
- woodland savannah
- mountain vegetation
- equatorial vegetation

18. Which one of the following was the title given to traditional Nandi rulers in the past?

- Nabongo
- Orkoiyot
- Ntemi
- Oloibon

19. Three of the following are aspects of our culture that need to be preserved. Which one is not?

- Taboos
- Extended families
- Tattooing
- initiation

20. Which one of the following methods of poultry keeping is the most expensive and complicated?

- Free range system
- Deep litter system
- Battery system
- Fold system

21. Which one of the following groups is made of salty water lakes only?

- Turkana, Elementaita, Magadi
- Naivasha, Natron, Bogoria
- Manyara, Magadi, Nakuru
- Albert, Masinga, Bogoria

22. Trade can be defined as

- the activity of selling goods
- buying and selling goods and services
- manufacturing of goods for sale
- exchange of services

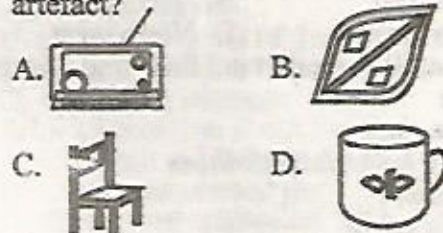
23. Democracy can be applied in school by
- allowing pupils to participate in making class rules

- singing the national anthem
- awarding active pupils in class
- choosing one class to entertain guests during a parents day.

24. Which one of the following is an early form of communication?

- Letter writing
- Use of trumpets
- Screaming
- Use of land line telephones

25. Which one of the following is a cultural artefact?



26. Below are statements about a prominent traditional leader in Kenya

- Administered oaths to people.
- Was a prophetess.
- Organised people to prevent grabbing of their land by the British.
- Was arrested and deported to Gusii land.



- The leader described above was
- Masaku
  - Waiyaki wa Hinga
  - Mekatilili wa menza
  - Koitalel arap Samoei
- The main tourist attraction along the coast of Kenya is
    - sandy beaches
    - historical monuments
    - marine wildlife
    - traditional dancers
  - Which one of the following communities collaborated with the British during the colonial rule in Kenya?
    - Ameru and Agirima
    - Abakusu and Nandi
    - Agiriama and Maasai
    - Abawanga and Agikuyu
  - Three of the following were positive results of the coming of early visitors to eastern Africa. Which one was not?
    - Introduction of formal education
    - Erosion of African cultural practices
    - Establishment of permanent settlement along the coast
    - Abolishment of slave trade.

- Which one of the following major towns in eastern Africa is correctly matched with the international organisation it hosts?

Town	Organisation
A. Daresalaam	UN HABITAT
B. Nairobi	EAC
C. Addis Ababa	AMREF
D. Arusha	EALA

- Publishing books and magazines is an example of
  - manufacturing industry
  - processing industry
  - service industry
  - assembly industry

*Use the map of Eastern Africa below to answer questions 32 to 35*



- The main language group that lives in the shaded area marked N is
  - Cushites
  - Nilotes
  - Bantus
  - Semites
- The river marked O is
  - Galana
  - Shibeli
  - Katonga
  - Juba

- The national park marked P is
  - Maasai Mara National Reserve
  - Dodori National Reserve
  - Ruma National Park
  - Amboseli National park
- The town marked Q is
  - Dodoma
  - Iringa
  - Arusha
  - Tabora
- The practice of growing flowers is referred to as
  - agriculture
  - vigiculture
  - floriculture
  - horticulture
- You have witnessed a matatu overturning as you go home from school. The immediate action you should take is to
  - call the police to arrest the driver.
  - start screaming.
  - run home and inform your parents.
  - assist passers-by to rescue the victims.
- Which one of the following was not a characteristic of shifting cultivation?
  - Farmers only grew crops for the family
  - Land was left bare for some time
  - Crop rotation was practised
  - Farming activities were done manually
- The road sign shown below means
  - no entry
  - no overtaking
  - no parking
  - roundabout closed



- Block mountains are formed as a result of weak cracks on the earth's crust known as
  - lines
  - escarpments
  - faults
  - compression forces
- The floating vegetation on river Nile at Bahr-el-Ghazal is known as
  - riverine
  - sudd
  - water hyacinth
  - reeds
- The main contribution of sugarcane to the economy of Sudan is that it has led to
  - the country being self reliant in sugar supply.
  - creation of job opportunity.
  - establishment of related industries.
  - the earning of foreign exchange for the country.
- The climate of Eastern African is influenced by all the following factors except
  - longitudes
  - relief
  - latitudes
  - prevailing winds
- The independent Electoral and Boundary Commission (IEBC) is composed of a maximum of
  - five commissioners
  - seven commissioners
  - twenty commissioners
  - ten commissioners
- Who among the following people is an ex-officio member of the National Assembly?
  - The president
  - The chief justice
  - The attorney General
  - The speaker



46. Which one of the following is not a form of child abuse?  
 A. Child cleaning the family car  
 B. Child trafficking  
 C. Children doing household chores  
 D. Bullying
47. Which one of the following weather measuring instruments is used for measuring the speed of wind?  
 A. Windsock  
 B. Barometer  
 C. Windvane  
 D. Anemometer
48. Which one of the following climatic regions of eastern Africa has double maxima rainfall pattern?  
 A. Tropical climatic region  
 B. Coastal tropical climatic region  
 C. Equatorial climatic region  
 D. Semi-desert climatic region
49. Which one of the following reasons best explains why functions of a clan are limited in modern society?  
 A. Clans are no longer recognised  
 B. Clan members live in different parts of the country  
 C. The cost of living is very high  
 D. Moral values have been eroded
50. Large coffee plantations in Kenya are found in all the following places except  
 A. Kitui  
 B. Thika  
 C. Kiambu  
 D. Nakuru
51. The national flag of Kenya is important because  
 A. it has beautiful colours  
 B. it is found in all government offices  
 C. it unites Kenyans  
 D. our freedom fighters fought for it
52. Which one of the following is not a requirement for voters in Kenya?  
 A. One must register with the IEBC.  
 B. One must produce the national identity card on the polling day.  
 C. One must be living in the constituency where he or she intends to vote.  
 D. One must vote at the polling station where he or she registered.
53. The Konza - Magadi branch of the Kenyan Uganda railway was constructed mainly in order to  
 A. link up Kenya and Uganda.  
 B. promote fast development of the Konza city.  
 C. transport livestock to the coast for export.  
 D. transport soda ash to the port of Mombasa.
54. The chairperson of the Independent Electoral and Boundaries Commission (IEBC) in Kenya is  
 A. Ezra Chiloba  
 B. Wafula Chebukati  
 C. Abdi Guliye  
 D. Baya Mola
55. Which one of the following arms of the government makes and amends laws in Kenya?  
 A. The Legislature  
 B. The Constitution  
 C. The Judiciary  
 D. The Executive
56. The total number of nominated members of parliament in the National Assembly is  
 A. 12  
 B. 350  
 C. 47  
 D. 290
57. The practice of giving favours in job opportunities to people from someones community is referred to as  
 A. corruption  
 B. tribalism  
 C. nepotism  
 D. patriotism
58. Which one of the following is an example of direct democracy?  
 A. Appointment of a class monitor by the class teacher.  
 B. Citizens participating in a referendum.  
 C. Games captain choosing members of a football team.  
 D. Class teacher choosing a pupil to clean up the teachers table.
59. According to the constitution of Kenya, a person may apply for the national identity card after attaining the age of  
 A. 20 years  
 B. 30 years  
 C. 18 years  
 D. 35 years
60. One of the duties of the county assembly in Kenya is to  
 A. collect taxes from traders  
 B. reinforce county by-laws  
 C. issue trade licences to business people  
 D. make laws for the county

#### CHRISTIAN RELIGIOUS EDUCATION

61. Which one of the following is a reason why God put Adam and Eve in the Garden of Eden?  
 A. To protect them from the serpent  
 B. To punish them for their disobedience  
 C. So that they could take care of it  
 D. So that they could pick leaves to cover their nakedness
62. What was the main reason why God called Abraham?  
 A. To give him land.  
 B. To bring blessings to the world.  
 C. To give him many children.  
 D. To make him famous.
63. Where did Moses flee to after killing the Egyptian?  
 A. Juddah  
 B. Ur  
 C. Mizpah  
 D. Midian
64. The stone tablet on which laws of God were written was to be carried in a special box called?  
 A. Tent  
 B. Ark  
 C. Tabernacle  
 D. Synagogue
65. \_\_\_\_\_ is the ability to notice something after thinking carefully.  
 A. Judgement  
 B. Reconciliation  
 C. Discernment  
 D. Co-operation
66. Gideon had a large army but the spirit of God helped him to win the battle using \_\_\_\_\_ soldiers.  
 A. 300  
 B. 3000  
 C. 30000  
 D. 3200
67. Who among the following was appointed king of Israel while still a young baby?  
 A. Saul  
 B. Rehoboam  
 C. David  
 D. Jeremiah



68. Ahab's wife was called  
 A. Jezreel                      B. Jezebel  
 C. Rebeccah                    D. Michelle
69. When Naaman the Synten attacked Israel, he took \_\_\_\_\_ to work for his wife.  
 (2 Kings 5:2)  
 A. a young girl                      B. a young boy  
 C. a woman                          D. a young man
70. The birth of Jesus Christ was prophesied by prophet?  
 A. Jeremiah                      B. Isaiah  
 C. Elijah                            D. Ezekiel
71. King Herod wanted to know the place baby Jesus was born in order to go and  
 A. worship Him                      B. give him gifts  
 C. meet His parents                  D. kill him
72. On the night Jesus was born angels appeared to  
 A. the wisemen                      B. the pharisees  
 C. the shepherds                    D. the sadduces
73. In which town did Jesus grow up?  
 A. Nazareth                        B. Capernaum  
 C. Bethlehem                        D. Jerusalem
74. Jesus and His parents lived as refugees in  
 A. Nazareth                        B. Egypt  
 C. Jerusalem                        D. Bethlehem
75. Which one of the following parables of Jesus teaches about treating neighbours well. The parable of the  
 A. rich fool                          B. sower  
 C. sheep                                D. good samaritan
76. "Do this in memory of me" Luke 22:18 Jesus said those words during  
 A. ascension                        B. the last supper  
 C. resurrection                      D. baptism
77. Jesus healed the man who had been born blind to show that  
 A. sin causes blindness  
 B. He is the light of the world  
 C. blindness can be cured by washing  
 D. He is jealous
78. Judas was replaced by  
 A. Matthias                        B. Barnabus  
 C. Stephen                          D. Nicodemus
79. Who among the following authored the book of Acts?  
 A. Paul                                B. Peter  
 C. Luke                                D. Matthew
80. \_\_\_\_\_ said that faith without actions is dead.  
 A. Paul                                B. James  
 C. Peter                                D. Solomon
81. \_\_\_\_\_ were put in jail at Phillipi for preaching about Jesus Christ  
 A. John and Peter                    B. Paul and Titus  
 C. Peter and Andrew                D. Paul and Silas
82. Who among the following disciples of Jesus baptized the Ethiopian Eunuch?  
 A. Paul                                B. Peter  
 C. Philip                              D. John
83. The children in African traditional communities were mainly taught to have  
 A. humility                          B. obedience  
 C. tolerance                        D. courage
84. Our ancestors served the clan in the following ways except  
 A. making sure that various families lived together in peace.  
 B. teaching the young the ways of life of the community like farming, fishing or taking care of animals.  
 C. encouraging marriage through which the family name could be continued.  
 D. helping young men to learn how to raid and steal safely.
85. Martin, a standard six pupil who comes from a rich family, despises other members of the class. As a Christian, the best advice you would give him is that he should be  
 A. trustworthy                      B. brave  
 C. humble                            D. a peace maker
86. People who have run away from their countries are called  
 A. strangers                        B. refugees  
 C. aliens                              D. tourists
87. Which of the following is not a result of misuse of sex?  
 A. Unwanted pregnancy  
 B. Joyfulness  
 C. HIV/AIDS infection  
 D. Depression
88. "All scripture is inspired by God," means  
 A. God wrote the Bible.  
 B. The writers of the Bible were guided by the Holy Spirit.  
 C. the Bible was written by Jesus Christ.  
 D. the Bible was written by all prophets of God.
89. Which one of the following is the way in which the church is involved in uniting people of different communities?  
 A. By hosting weddings  
 B. By having holy communion  
 C. By having crusades  
 D. By having prayer and fasting
90. The Bible says that we should take care of the needy. Who among the following people gave the best care of the needy?  
 A. Zablou : gave food to the hungry.  
 B. Rose : prayed for the rains to come down  
 C. David : advocated for the government to bring in financial help.  
 D. Melsa : counselled those who were affected.

#### ISLAMIC RELIGIOUS EDUCATION

61. Surah Al-Bayyinah begins with  
 A. Wamaa umiru illa liyaabudullaha  
 B. Lam yakunilladhina kafaru  
 C. Fiyha kutubum Qayyimah  
 D. Liyilafi Quraishin
62. The Christians and Jews were given the books in order to  
 A. prepare them for the coming of our prophet.  
 B. learn only their religion not others.  
 C. know the two religions.  
 D. make them not accept other religions.
63. Which statement is not true about Qaarun?  
 A. He became rich very fast  
 B. He loved and helped the poor  
 C. He became proud and difficult  
 D. many people wanted to be like him
64. Swalatul khusuf is a prayer said during  
 A. the eclipse of the sun  
 B. when it rains heavily  
 C. the eclipse of the moon  
 D. when the prophet's sons dies



65. Which of the following is not in surah Bayyinah?  
 A. Fawaylan lilmusallin  
 B. Rasulun minallahi yathi suhufan  
 C. Lam yakumladhina Kafaru  
 D. Wamaa uminu illa liyaabudulla
66. The main cause of the Battle of uhud is  
 A. the rush for the caravan of Syria.  
 B. the defeat of the Quraish in the battle of Badr.  
 C. because the muslims wanted to crush the Quraish.  
 D. the call for Jihad by the prophet
67. The least way of forbidding evil is by  
 A. using our hands.  
 B. using our tongue.  
 C. writing in the newspapers.  
 D. being annoyed at heart.
68. Which statement is not true about the battle of uhud?  
 A. The prophet lost some of his teeth  
 B. The prophet cursed the Quraish  
 C. The Muslims were winners at first  
 D. Khadhil bini Walead made the Muslim suffer
69. One of these did not take place in muharram  
 A. Imam Hussein was killed  
 B. Nabii Musa was saved from Firaun  
 C. Hijra of the prophet  
 D. The war of Badr
70. Hind hired \_\_\_\_\_ to kill Hamza.  
 A. Wahsi  
 B. Jubair  
 C. Tuaim  
 D. Khahid
71. Muslims move between swafa and marwa during Hajj in memory of  
 A. Ibrahim  
 B. Ismail  
 C. Sarah  
 D. Hajar
72. One of these is not among the miracles of Nabii Issa. Which one?  
 A. Bringing the dead to life  
 B. Making the blind see  
 C. Knowing what a person ate and stored at home  
 D. Making the dumb to talk
73. Nusaibah bint kaab bin Amru  
 A. remained behind to look children.  
 B. was making sure that the prophet was not attacked.  
 C. was nursing the wounds of the prophet.  
 D. killed Hindu Abu sufyani's wife.
74. A table full of food was a miracle of Nabii  
 A. Musa  
 B. Isa  
 C. Ibrahim  
 D. Yunus
75. Nabii Nah was sent to the people of  
 A. Iraq  
 B. Makkah  
 C. Israel  
 D. Yemen
76. A Muslim fighter in uhud did not kill hindu because  
 A. Hindu begged for mercy from him.  
 B. Hindu hid behind another Muslim.  
 C. he felt ashamed to kill her with the sword of the prophet.  
 D. Hindu was the wife of Abu sufyan
77. Which statement is not true about Firaun?  
 A. He was shown miracles by Nabii Musa  
 B. Its magicians defeated Nabii Musa  
 C. He promised his magicians reward if they won  
 D. He brought magicians to challenge Musa
78. The search for knowledge is fardh to Muslim man and woman. The hadith teaches  
 A. men should be given a chance first then woman.  
 B. men should be given a chance before the women.  
 C. Women to be given a chance after the men.  
 D. Both should be given an equal chance to learn.
79. The prophet sent \_\_\_\_\_ archers on top of mount Uhud.  
 A. 50  
 B. 100  
 C. 150  
 D. 200
80. Taqwa means  
 A. praising Allah day and night.  
 B. enjoying good and forbidding evil.  
 C. fear of Allah.  
 D. spending in the cause of Allah.
81. Lynching a thief (burning him to death is )  
 A. against the teachings of Islam  
 B. the right way to teach them a lesson  
 C. is acceptable in Islam  
 D. is part of the teachings of Islam
82. Allah is kind to all the attributes. Referring to this is  
 A. Al-Adhim  
 B. Al-fhafur  
 C. Ash-shakur  
 D. Allahif
83. Makkah was conquered in the month of  
 A. Dhul Hijjah  
 B. Rabiul Awwal  
 C. Rajab  
 D. Rammadhan
84. Just before migration the prophet list two important people  
 A. Abubakar and Umar  
 B. Abu Talib and Khadija  
 C. Abubakar and uthuman  
 D. Khadija and Abdul muttalib
85. Which one of the following does not refer to Allah's mercy?  
 A. Rahim  
 B. Ghafur  
 C. Rahman  
 D. Alim
86. Nisab means  
 A. the right people to receive zakat.  
 B. the things on which zakat is compulsory.  
 C. the minimum amount to have before paying zakat.  
 D. people who are not allowed to receive zakat.
87. Ulul Azmi means prophets who  
 A. were murdered  
 B. were thrown out of their countries  
 C. served Allah never got married  
 D. had strong patience
88. Which is not true about Friday?  
 A. Qivamah will take place on Friday  
 B. Adam was created on Friday  
 C. Hanna was created on friday  
 D. Adam was admitted into Jannah
89. On entering the mosque on Friday we should  
 A. give salaam  
 B. pray two rakaas  
 C. take udhu  
 D. read the quran
90. The leader of the archers was called  
 A. Khalid bin walead  
 B. Abdullah bin Jubair  
 C. Umar bin khattab  
 D. Abu Hudhifah