



STANDARD SEVEN

SOCIAL STUDIES AND RELIGIOUS EDUCATION

2021: 2 hour 15 minutes

DAY 2
8:30am - 10:45am

INSTRUCTIONS TO CANDIDATES (Please read these instructions carefully)

- 1. You have been given this question booklet and a separate answer sheet. The question booklet contains 90 questions.
2. Do any necessary rough work in this booklet.
3. When you have chosen your answer, mark it on the ANSWER SHEET, not in this question booklet.

HOW TO USE THE ANSWER SHEET

- 4. Use only an ordinary pencil.
5. Make sure that you have written on the answer sheet:

YOUR INDEX NUMBER
YOUR NAME
NAME OF YOUR SCHOOL

- 6. By drawing a dark line inside the correct numbered boxes mark your full Index Number (i.e. School Code Number and the three-figure Candidate's Number) in the grid near the top of the answer sheet.
7. Do not make any marks outside the boxes.
8. Keep the sheet as clean as possible and do not fold it.
9. For each of the questions 1-90 four answers are given. The answers are lettered A, B, C and D. In each case only ONE of the four answers is correct. Choose the correct answer.
10. On the answer sheet, show the correct answer by drawing a dark line inside the box in which the letter you have chosen is written.

Example
In the Question Booklet:

- 44. The method used by the Portuguese to administer Mozambique was
A. Assimilation
B. Indirect rule
C. Association policy
D. Direct rule

The correct answer is "D".

On the answer sheet:

4. (A) (B) (C) (D) 14. (A) (B) (C) (D) 24. (A) (B) (C) (D) 34. (A) (B) (C) (D) 44. (A) (B) (C) (D)

In the set of boxes numbered 44, the box with the letter D printed in it is marked.

- 11. Your dark line MUST be within the box.
12. For each question ONLY ONE box is to be marked in each set of four boxes.


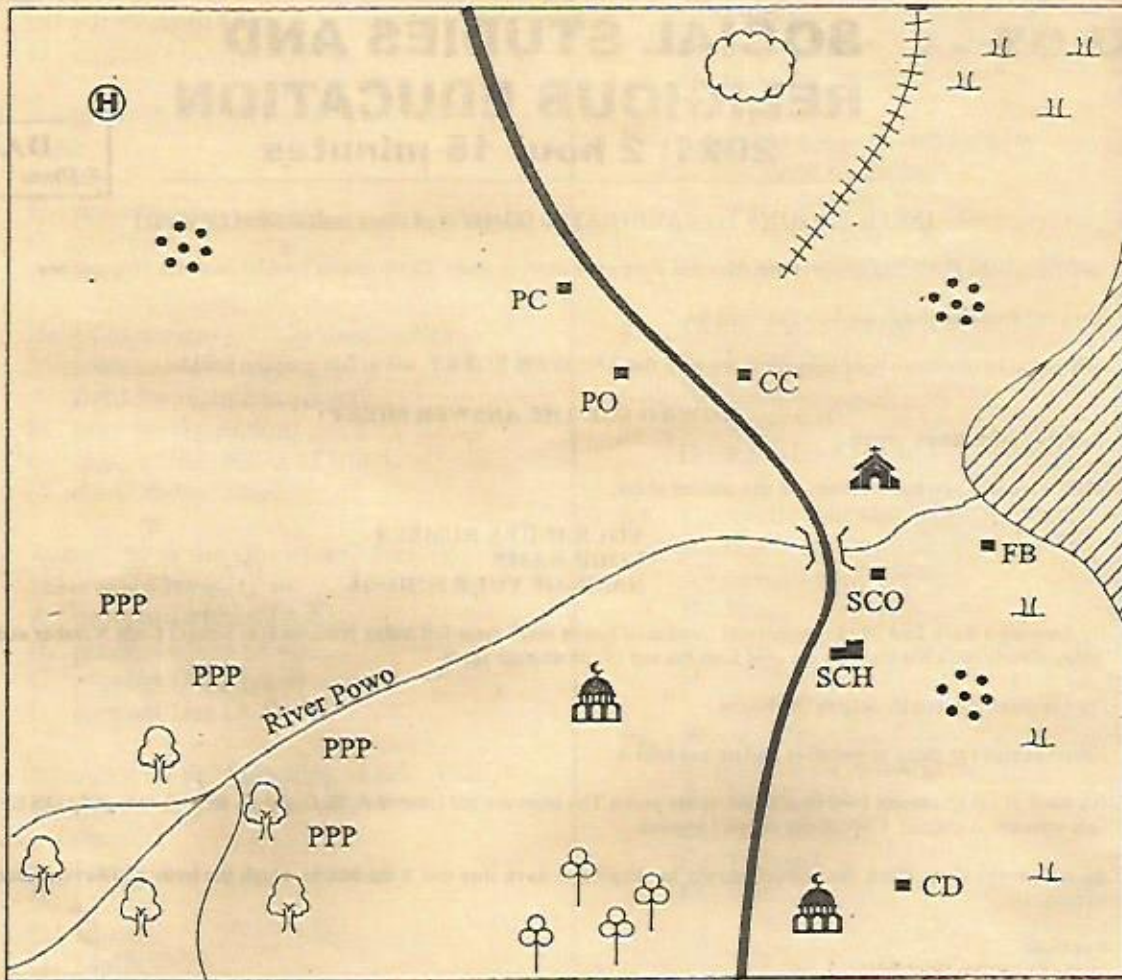
This Question Paper consists of 12 printed pages.



PRE GOLD

TURN OVER

MASUMBI AREA



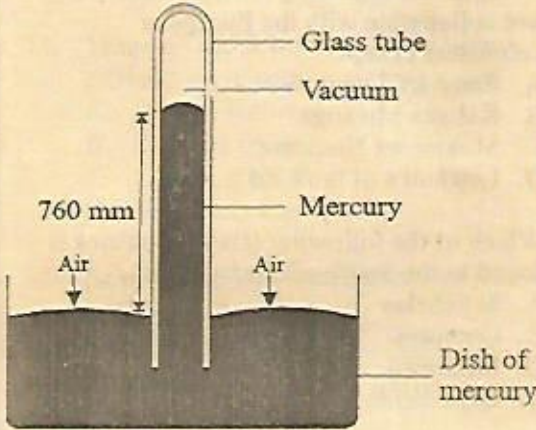
KEY:

	Tarmac Road		Quarry	SCO	Sub-County office
	Settlement		River	PO	Post Office
	Permanent Buildings		Bridge	CD	Cattle Dip
	Church		Forest	PS	Police station
	Mosque		Tea	SH	Slaughter house
	Railway line		Scrubs	CC	Chief camp
				SCH	School
				FB	Fish Bay
				PPP	Pyrethrum farm
				(H)	Health Centre

Study the map of Masumbi area and answer questions 1-7.

1. What is the direction of the cattle dip from the health centre?
 - A. North West
 - B. South East
 - C. North East
 - D. South West
2. Which type of soil is most likely to be found in the South Western part of Masumbi Area?
 - A. Red volcanic soil
 - B. Black cotton soil
 - C. Sandy soil
 - D. Alluvial soil
3. People of Masumbi Area are **mainly**
 - A. Christians
 - B. Muslims
 - C. Traditionalists
 - D. Pagans
4. Three of the following economic activities are carried out in Masumbi area. Which one is **not**?
 - A. Livestock
 - B. Fishing
 - C. Mining
 - D. Lumbering
5. Which settlement pattern is practised in Masumbi area?
 - A. Linear
 - B. Dense
 - C. Clustered
 - D. Sparse
6. Masumbi area is **likely** to be headed by
 - A. Member of County Assembly.
 - B. Senator
 - C. Deputy County Commissioner
 - D. Governor
7. What is the **main** reason for the construction of the railway line in North Eastern part of Masumbi Area?
 - A. To transport minerals.
 - B. To transport livestock product.
 - C. To transport fish.
 - D. To transport cash crops.
8. The **main** economic activity of the Oromo in the pre-colonial period was
 - A. Crop farming
 - B. livestock keeping
 - C. trading activities
 - D. hunting
9. Which one of the following groups of communities consist of Semites?
 - A. Tigreams, Nubians, Arabs
 - B. Burji, Iraqu, Falasha
 - C. Dahalo, Boni, Damakil
 - D. Shilluk, Lugbara, Taposa
10. Three of the following are duties of a certain school administrator:
 - (i) He prepares the school routine.
 - (ii) He supervises the learning process.
 - (iii) He writes minutes during the staff meetings.
 - (iv) He is the head of disciplinary committee

The above administrator is likely to be

 - A. the Senior teacher
 - B. the Headteacher
 - C. the Deputy Headteacher
 - D. the school chairman
11. The diagram below shows a weather instrument.
 

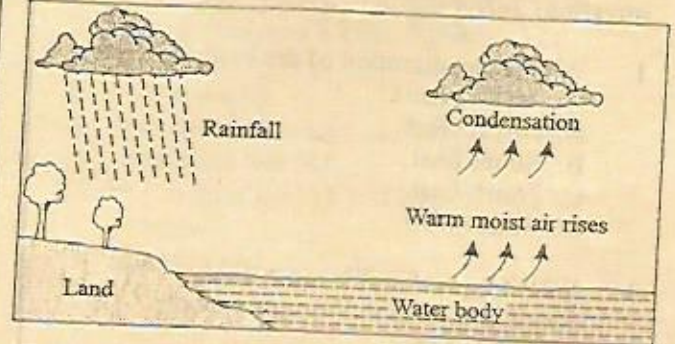
The above weather instrument is used to measure

 - A. Speed of wind
 - B. Strength of wind
 - C. Atmospheric pressure
 - D. Humidity

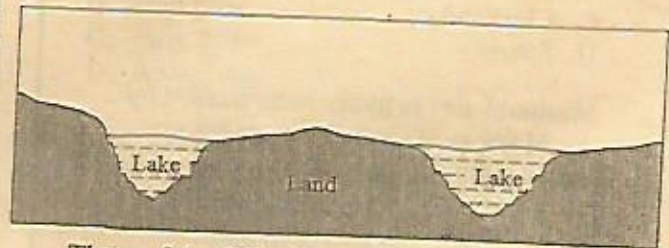
12. The day and night are equal in length in the months of March and September. This is called
- eclipse
 - solstice
 - rotation
 - equinox
13. The following are characteristics of a certain climate:
- Summers are usually hot and dry.
 - rainfall ranges between 500mm and 750mm.
 - Onshore winds that bring rainfall called westerlies.
- The climate described above is
- Equatorial climate
 - Tropical climate
 - Warm continental climate.
 - Mediterranean climate.
14. The time at Asmara at longitude 40°E is 10.00am. What time is it Avijan along longitude 20°W ?
- 6.00 am
 - 2.00 am
 - 6.00 pm
 - 2.00 pm
15. Three of the following African leaders did not collaborate with the European colonisers except
- Samouri Toure
 - Kabaka Mwanga
 - Mukite wa Nameme
 - Lewanika of the Lozi
16. Which of the following Island countries is found to the South of Madagascar?
- Seycheles
 - Comoros
 - Mauritius
 - Cape Verde

4

Use the diagram below to answer questions 17-18



17. The above feature shows the formation of
- sea breeze
 - land breeze
 - relief rainfall
 - conventional rainfall
18. The following towns of Africa experiences the above feature except?
- Addis Ababa
 - Entebbe
 - Accra
 - Dar-es-salaam
19. Who among the following officials in the Buganda Kingdom is **not** correctly matched with the meaning?
- Omulamuzi -Chief Justice
 - Omwanika -Treasurer
 - Lukiiko -Tax officer
 - Katikiro -Prime minister
20. The diagram below shows the formation of a drainage feature:



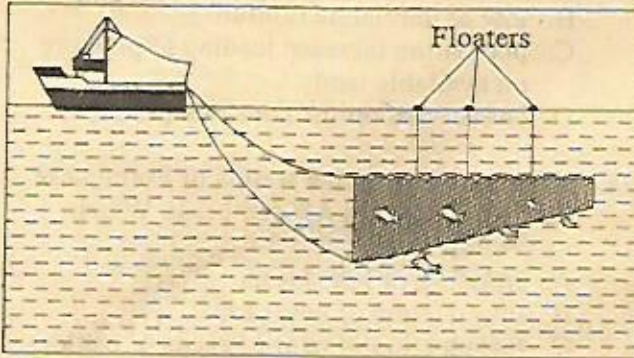
Three of the following lakes were formed through the above process. Which one was not?

- Lake Chad
- Lake Banguelu
- Lake Utange
- Lake Kyoga

21. Which one of the following set of industries consists of service industries **only**?
- Meat canning, baking, motor vehicle assembly
 - Beer brewing, flour milling, fruit caning
 - Motor vehicle repair, transport, shoe mending
 - radio assembly, oil refining, shoe shining.
22. Gulley erosion can be **effectively** controlled by
- building check dams.
 - mulching.
 - constructing terraces.
 - cover cropping.
23. Below are conditions necessary for the growing of a certain crop:
- Adequate rainfall of between 1000mm
 - Cool temperatures of between 15°C - 17°C.
 - Well drained fertile volcanic soils.
- The above conditions favour the growing of the following crops **except**?
- Pyrethrum
 - Sugarcane
 - Tea
 - Coffee
24. Which one of the following tourist attraction is **mainly** found in Zimbabwe?
- Victoria Falls
 - Pyramids of Giza
 - Kruger National park
 - Meroe National park
25. The Aswan High Dam was **mainly** established to
- provide hydro-electric power.
 - control floods at the lower Nile.
 - provide water for irrigation .
 - provide fishing ground in Lake Nasser
26. Which one of the following is **not** a characteristic of planted forests?
- They are made of soft wood trees.
 - The nature fast.
 - They are called exotic trees
 - They are made up of indigenous trees.
27. The following are problems facing pastoral farming in Africa **except**
- attack from parasites and diseases.
 - low or unreliable rainfall.
 - population increase leading to pressure on available land.
 - lack of market for livestock products.
28. The following are the results of Portuguese occupation in East African coast. Which one is **not**?
- Building of Fort Jesus.
 - Introduction of new crops.
 - Introduction of exotic breeds of cattle.
 - Building of Vasco da Gama pillar
29. Which one of the following is the leading producer of cocoa in Africa?
- Cote d'Ivoire
 - Ghana
 - Nigeria
 - Camerroon
30. The philosophy of African socialism was adopted in Kenya in the year
- 1965
 - 1964
 - 1963
 - 1920
31. Three of the following early visitor to East African were missionaries **except**
- Johann Rebman
 - Richard Burton
 - Ludrring Kraft
 - David Livingstone
32. Koobi Fora and Fort Tenan in Kenya are **both**
- Prehistorical sites
 - mining sites
 - historical site
 - national museums
33. A complete rotation of the earth causes
- 24 hours
 - Day and Night
 - Revolution
 - 365 days



34. Which method of fishing is illustrated below?



- A. Trawling
B. Net drifting
C. Purse seining
D. Long lining
35. Who among the following was **not** arrested and detained with Fred Kubai in 1952?
A. Paul Ngei
B. Bildad Kaggia
C. Dedan Kimathi
D. Kurgu Kanumba
36. The following are uses of a certain mineral:
(i) Manufacture of cement.
(ii) Making sulphuric acid
(iii) Manufacture of tooth paste

The above are uses of

- A. limestone
B. soda ash
C. diatomite
D. flourspar
37. The Chief Legal Advisor to the executive government of Kenya is
A. The Chief Justice
B. The Attorney General
C. The Speaker
D. The President
38. The following are descriptions of certain river in Africa:
(i) It carries large volume of water.
(ii) It has the most number of tributaries
(iii) It has an estuary at its mouth

The river described above is likely to be

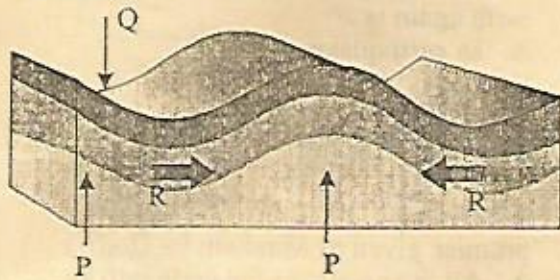
- A. River Niger
B. River Senegal
C. River Congo
D. River Zambezi

- 6
39. Which of the following communities belong to the **kwa speakers** of west Africa?
A. Gas, Bambara, Asante
B. Wassa, Dankyira, Kwahu
C. Kanuri, Ibo, Nzirima
D. Akyem, Susu, Asante
40. The following are achievements and contributions of a certain African leader:
(i) Born in 1892
(ii) He introduced a new constitution in his country.
(iii) He was a founder member of OAU
(iv) He was overthrown and later died in 1975.

The above described leader is

- A. Haile Selassie
B. Menelik II
C. Gamal Abdel Nasser
D. Nelson Mandela
41. The basic unit of any society in Africa is
A. clan
B. family
C. age set
D. school
42. Which of the country is **incorrectly** matched with its capital city?
A. South Africa -Johannesberg
B. Morocco -Rabat
C. Togo -Lome
D. South Sudan -Juba
43. The following factors undermine peace in our country. Which one **does not**?
A. Nepotism
B. Patriotism
C. Ethnicity
D. Racism
44. The white colour in our National flag represents
A. Love for our country.
B. Land of plenty.
C. Beautiful environment.
D. Peace enjoyed by all Kenyans.
45. Which of the following European countries did not have a portion of the 'Somali land'?
A. France
B. Britain
C. Spain
D. Italy

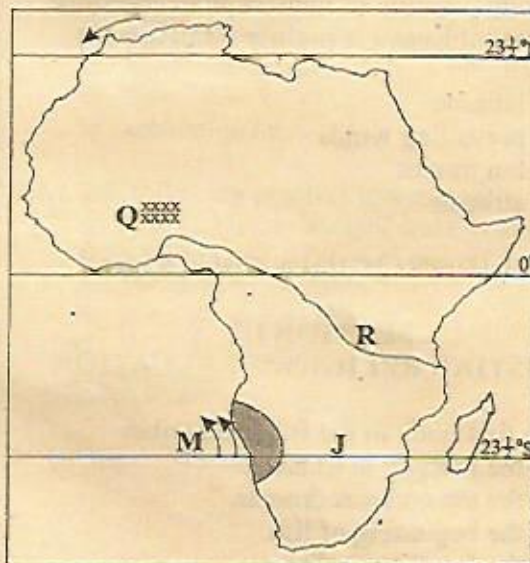
Use the diagram below to answer questions 46 - 47



46. Which forces are represented by Q and R respectively?
- Compressional and syncline
 - Anticline and tensional
 - Sycline and folding
 - Syncline and compressional
47. Which one of the following mountains was formed through the above process?
- Pare mountain
 - Usambara mountain
 - Atlas mountain
 - Ruwenzori mountain
48. In Kenya a citizen may register as a voter at the minimum age of
- 35 years
 - 21 years
 - 18 years
 - 15 years
49. Which one of the following is not the main benefit of democracy in a society?
- There is respect for human rights.
 - The re is respect for people's bill.
 - People are able to elect leaders of their choice.
 - People practice accountability and transparency.
50. The body incharge of election in Kenya is headed by
- The President
 - The Chief Justice
 - The chairman
 - The Attorney General

51. The main reason for the establishment of the Common Market for Eastern and Southern Africa (COMESA) was to
- lower taxes for goods traded in the region.
 - introduce the use of a common currency
 - assist member states to have the same system of education.
 - to improve transport system in the region.
52. The main function of parliament in Kenya is to
- amend and make laws.
 - interpret the laws.
 - implement government policies.
 - announce the election dates
53. Which one of the following crops were introduced by the Europeans in Africa?
- Yams and coffee
 - Cotton and maize
 - Sisal and sorghum
 - Sweet potatoes and tea
54. Which one of the following means of transport is mainly used to transport electricity in the rural areas in Kenya?
- Pipeline
 - Road
 - Air
 - Cables

Use the map of Africa to answer questions 55 - 58



55. The shaded region marked Q is likely to be
- Jos plateau
 - Adamawa Highlands
 - Fouta Djallon plateau
 - Ethiopia Highlands

56. The International Road marked R is
- The Great North Road
 - The Trans Saharan Highway
 - The Trans African Highway
 - The Cotonou- Gao Oudja Highway

57. In which month is the sun overhead in the tropic marked J
- December
 - September
 - June
 - March

58. Which ocean current is represented by M ?
- Warm Benguela current
 - Cold Canary current
 - Cold Benguela current
 - Warm Guinea current

59. Which one of the following skills was not taught through apprenticeship in the African traditional society?
- Harvesting of honey.
 - Herding cattle.
 - Iron work.
 - Medicine

60. The distribution of vegetation on the slope of mount Kenya is mainly influenced by the
- latitude
 - prevailing winds
 - longitudes
 - altitude.

PART II: RELIGIOUS EDUCATION

SECTION I: CHRISTIAN RELIGIOUS EDUCATION

61. The first book in the Bible describes
- the journey to Canaan.
 - the ten commandments.
 - the beginning of life.
 - the Israelites in Egypt.

- 8
62. The sign of the covenant between God and Noah that God would never destroy the earth again is
- an earthquake
 - fire
 - rainbow
 - pillar of clouds
63. Which one of the following was not a promise given to Abraham by God?
- All the people of the earth will be blessed through him.
 - There will be a heir from your family to rule Israel.
 - Your descendants will be as numerous as the stars in the sky.
 - I will bless those who bless you and curse those who curse you.
64. When God called Moses, he was taking care of the sheep of his father-in-law called
- Joshua
 - Aaron
 - Elikanah
 - Jethro
65. When the Israelites were given the ten commandments, God came down to them in form of
- thick cloud
 - an earthquake
 - fire
 - hailstone
66. Which one of the following miracles were performed both by prophet Elijah and Jesus?
- Multiplication of wine.
 - Multiplication of oil.
 - Raising the dead.
 - Cursing the 42 boys.
67. The following are achievements of King David except
- Building the temple.
 - Bringing the Ark of the covenant to Jerusalem.
 - Uniting the tribes of Israel.
 - Defeating the philistines.

68. King Solomon was anointed by
A. Samuel
B. Isaiah
C. Elkanah
D. Zadock
69. Who among the following prophets prophesied about the killing of baby Jesus?
A. Jeremiah.
B. Isaiah.
C. Micah.
D. Hosea.
70. The birth of John the Baptist was prophesied by prophet
A. Jeremiah
B. Hosea
C. Isaiah
D. Ezekiel
71. The gift of gold brought by the wisemen to baby Jesus signified
A. His death
B. Priesthood
C. Inheritance
D. Kingship
72. The most loved disciple of Jesus was
A. Simon Peter
B. John
C. James
D. Andrew
73. "Happy are those who are persecuted because they do what God requires _____" (Matthew 5:10)
A. a great reward is kept for you in heaven.
B. the kingdom of heaven belongs to them.
C. God will be merciful to them.
D. God will call them His children.
74. When Jesus healed a man born blind (John 9:7) he sent him to the pool of
A. Bethesda
B. Siloam
C. Mara
D. Jordan
75. Jesus sent two disciples to go and prepare the Passover meal. They were
A. Peter and Andrew
B. John and James
C. John and Andrew
D. Peter and James
- 9
76. Who among the following witnessed the dedication of Jesus in the temple?
A. Anna and Simeon
B. Simeon and Zachariah
C. Simeon and Mary
D. Elizabeth and Simeon
77. The miracle of healing of the ten lepers teaches Christians to
A. work hard
B. be grateful
C. be honest
D. be kind.
78. The main reason why Jesus chose the twelve Apostles was to
A. begin his work.
B. continue the ministry he had started.
C. finish the work of the pharasees.
D. build a place for him.
79. The following were deacons in the early church. Who was **not**?
A. Nicom
B. Timothy
C. Timon
D. Prochorus
80. Why was Stephen stoned to death?
A. He refused to obey the authority.
B. He looked into heaven.
C. He refused to sell his vineyard.
D. He refused to deny Jesus.
81. The main reason for marriage in traditional African religion was
A. procreation
B. companionship
C. love
D. commitment
82. The following practice is common in traditional African society and Christianity. Which one is it?
A. Performing sacrifice.
B. Praying near river.
C. Reading scripture.
D. Wedding

83. In some traditional African communities, the shedding of blood during circumcision shows that the initiates are
 A. strong and healthy
 B. united with ancestors.
 C. grown further.
 D. got a new name.
84. Which one is a similarity between African traditional religion and Christianity?
 A. Worshipping in the temple.
 B. Use of Bible scripture.
 C. Worshipping God through prayer.
 D. Worshipping by involving sacrifices.
85. The following are ways showing respect for the departed. Which one is **not**?
 A. Naming children after them.
 B. Saying prayer through them.
 C. Pouring libations.
 D. Not giving offerings and sacrifices.
86. On her way home Fridah found her brother together with his friends smoking bhang. As a Christian, what should she do?
 A. Advise him on the dangers of the drugs.
 B. Report him to the parents.
 C. Leave him a lone.
 D. Pray for him.
87. Your classmate James told you that he is suffering from TB. What advice can you give him as a Christian?
 A. Show him love
 B. Avoid sitting near him.
 C. Tell all your friends about it
 D. Stop talking to him.
88. In their missionary work to Africa, Johann Rebman and Ludwig Krapf obeyed Jesus command found in the book of
 A. Romans
 B. Acts
 C. Matthew
 D. Timothy
89. It is important to work, therefore everybody should work
 A. so as to get riches.
 B. in order to be healthy.
 C. In order to earn a living.
 D. because we are co-workers with God.

10

90. On his way to school, William a standard 7, found two standard 5 boys fighting. The best action for him to take was
 A. beat them up.
 B. take them to school and report them to their class teacher.
 C. run to their homes and inform their parents.
 D. separate and guide them.

SECTION II ISLAMIC RELIGIOUS EDUCATION

61. Which one of the following *surahs* teaches that Allah provides food and security?
 A. *Al-Kauthar*
 B. *Al-lahab*
 C. *Al-falaq*
 D. *Al-Quraish*
62. Which one of the following is a teaching from *surah Al-Alaq*?
 A. Orphans should be treated with kindness.
 B. Man has been created from blood clot.
 C. Allah is the day of judgement.
 D. Man is created in the best shape.
63. According to the teachings of the prophet (p.h.u.h) Yarhamukalah should be said when a person
 A. sneezes
 B. stumbles
 C. falls dawn
 D. wakes up
64. The **main** reason why Muslims offer greeting before other utterance is because
 A. it is a way of making friends.
 B. it is a way of showing concern.
 C. it is a dua.
 D. it is a way of drawing attention.
65. the *surah* which **must** be recited by Muslims seventeen times in one day is
 A. *Al - Bayyinah*
 B. *Al - Fatiha*
 C. *Al - Ikhlas*
 D. *Al - Maun*

66. The Prophet (S.A.W) advised Muslims that they are like a single building, each holds the other. He was teaching **mainly** on
- social groupings.
 - praying together.
 - unity of Muslims.
 - unity of Muslim scholars.
67. Which of the following practices is forbidden in *surah al-maun*?
- Slandering other people.
 - Oppressing the weak members of the society.
 - Showing off of wealth.
 - Abusing other people for their faith.
68. Which one of the following attributes of Allah is mentioned in *surah Ikhlas*?
- Al - Ghafur*
 - Al - Swamad*
 - Al - Hakim*
 - Al - Ramim*
69. The sunnah prayer performed before dawn is
- Witr*
 - Taraweh*
 - Tahajud*
 - Dhuha*
70. While performing *wudhu*, Ali was seen:
- Washing both feet
 - Passing wet hands over his head.
 - Washing his hands
 - Washing face and both arms.
- Which of the above activities give the *fardh* parts of the *wudhu*?
- (i) (iii) (iv)
 - (ii) (iii) (i)
 - (iii) (iv) (ii)
 - (i) (ii) (iv)
71. The five prayers were given to Prophet Muhammad (p.h.u.h) during
- Hijatul wid'a
 - journey to Taif
 - his migration to Madina
 - Isa-Wal-Miraj
72. When are *Qabliya* prayers performed?
- Before a fardh prayer.
 - After fardh prayer.
 - In the middle of the night
 - Before midday.
73. Which one of the following is true about *salatul janazah*?
- It has four *takbir*.
 - It has *rukuu*.
 - It has two *khutbah*.
 - It has *sijdat*.
74. Who among the following categories of people is not a recipient of *zakat*?
- The orphans
 - The poor
 - Converts of Islam
 - Travellers
75. Which of the following ritual is common to both *Hajj* and *Umrah*?
- Putting on Ihram
 - Staying at Arafat
 - Spending a night at Muzzdalifa.
 - Stoning the pillar at Mina.
76. During assembly Ahmed has a habit of making noise and interruptions, this is a sign of
- disobedience
 - laziness
 - dishonesty
 - hypocrisy
77. Which one of the following is a sign of hypocrite?
- Telling lies when talking.
 - Using abusive language.
 - Stealing from people.
 - Ignoring the needs of the poor.
78. Which one of the following business practices is prohibited in Islam?
- Making profit.
 - Selling goods on credit.
 - Hoarding of goods.
 - Selling goods at fixed prices.

79. The term Tawheed means
 A. unity of God.
 B. power of God.
 C. attributes of God.
 D. correct worship of God.
80. All prophets of Allah were protected from
 A. sin.
 B. prosecution.
 C. marriage.
 D. death
81. Belief in the day of judgement helps Muslims to
 A. fight for justice in society.
 B. pray for the nation.
 C. observe the pillars of Islam.
 D. think about the poor.
82. According to the Glorious Quran the *suhuf* were revealed to
 A. prophet Ibrahim (A.S)
 B. prophet Musa (A.S)
 C. prophet Daud (A.S)
 D. prophet Issa (A.S)
83. Who among the following angels will blow the trumpet on the day of judgement?
 A. Izrail
 B. Israfil
 C. Jibril.
 D. Malik
84. Nabii Ibrahim was thrown into the fire because he
 A. disobeyed the father.
 B. worshipped the stars.
 C. destroyed the idols.
 D. prayed facing kaaba.
85. Three of the following are names of angels. Which one is **not**?
 A. Ridhwan
 B. Idris
 C. Israfil
 D. Malik
86. Which one of the following activities shows unity among Muslims?
 A. Facing the *kaaba* during prayers
 B. Putting on robes during *Idd*.
 C. Breaking fast with date.
 D. Celebrating *milad-unabi*.
87. Allah has created man so as to
 A. produce children.
 B. make wealth.
 C. worship Him.
 D. control other creation of Allah.
88. The **third** month of Islamic calendar is
 A. Ramadhan
 B. Rajab
 C. Shawwal
 D. Rabi-Ul-Awwal
89. The battle that made Muslims over confident due to their large number was
 A. conquest of Makkah
 B. Uhud
 C. Tabuk
 D. Hunain
90. Which one of the following prayers must be performed in congregation?
 A. Juma
 B. Asr
 C. Tahajud
 D. Witr

THIS IS THE LAST PRINTED PAGE.