

DISTINCTION NATIONAL EXAMINATION PANEL



STANDARD SEVEN SEVENTH TRIAL - 2021



TIME: 2HR 15MINS

SOCIAL STUDIES & RELIGIOUS EDUCATION

READ THESE INSTRUCTIONS CAREFULLY

1. You have been given this question booklet and a separate answer sheet. The question paper contains 90 questions.
2. Do any necessary rough work in this booklet.
3. When you have chosen your answer, mark it on the ANSWER SHEET, not in this question booklet.

HOW TO USE THE ANSWER SHEET

4. Use an ordinary pencil only.
5. Make sure you have written on the answer sheet.
YOUR INDEX NUMBER
YOUR NAME
NAME OF YOUR SCHOOL
6. By drawing a dark line inside the correct numbered boxes mark your full Index Number (i.e. School Code Number and the three-figure Candidate's Number) in the grid near the top of the answer sheet.
7. Do not make any marks outside the brackets []
8. Keep the sheet as clean as possible and **DO NOT FOLD IT**.
9. For each of the questions 1-90 four answers are given. The answers are lettered A,B,C,D. In each case only **ONE** of the four answers is correct. Choose the correct answer.
10. On the answer sheet the correct answer is to be shown by drawing a dark line inside the box in which the letter you have chosen is written.

Example:-

In the question paper.

31. The following are problems facing pastoral farming in Africa. Which one is not?

- A. Tsetse fly infestation
- B. Drought
- C. Population increase
- D. Ranching

The correct answer is D. (revenging).

On the answer sheet

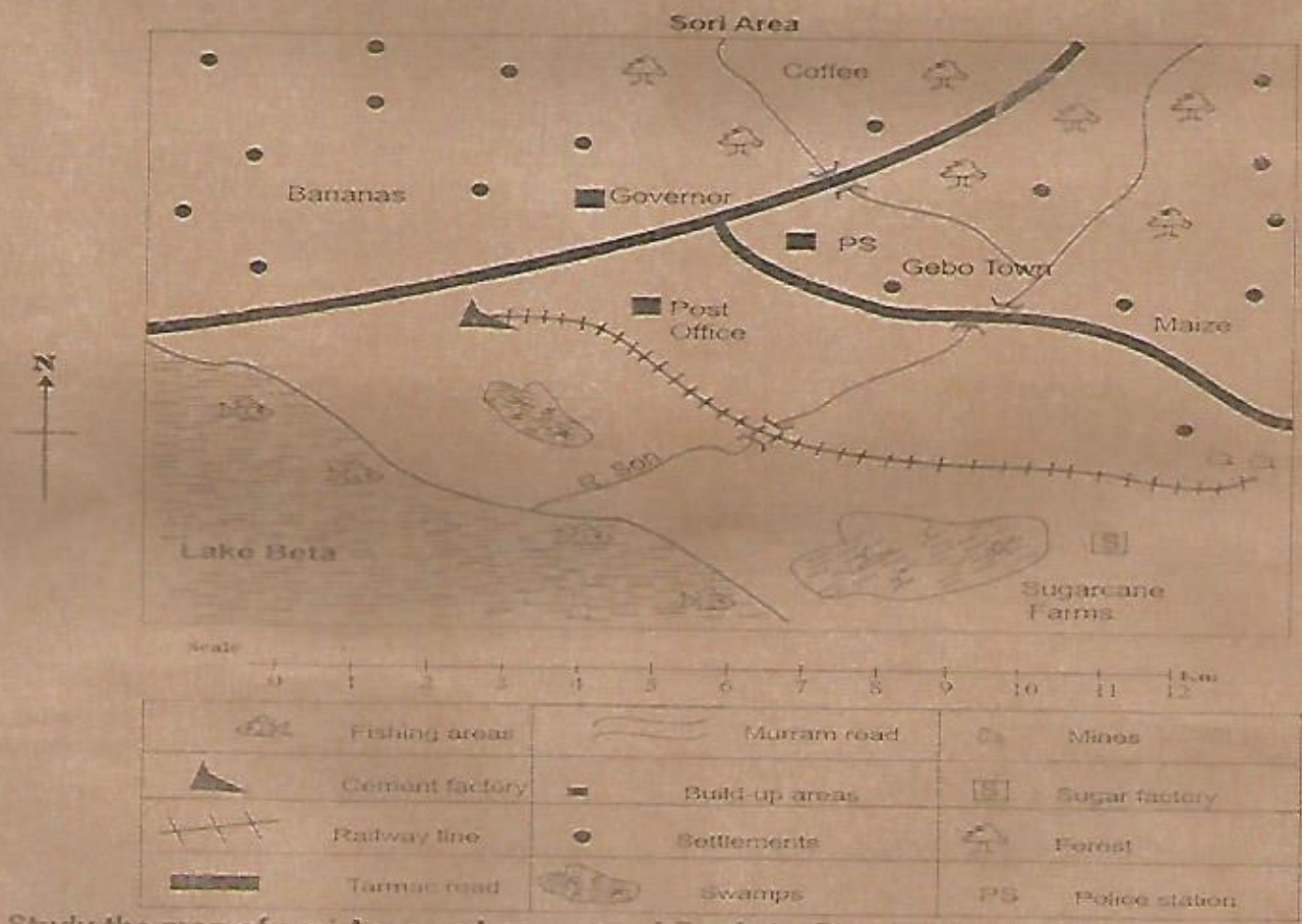
16 [A] [B] [C] [D] **21** [A] [B] [C] [D] **31** [A] [B] [C] [D] **41** [A] [B] [C] [D]

In the third set, the box with the letter D printed in it is marked.

11. Your dark line **MUST** be within the brackets.

12. For each question **ONLY ONE** bracket is to be marked in each of four brackets.

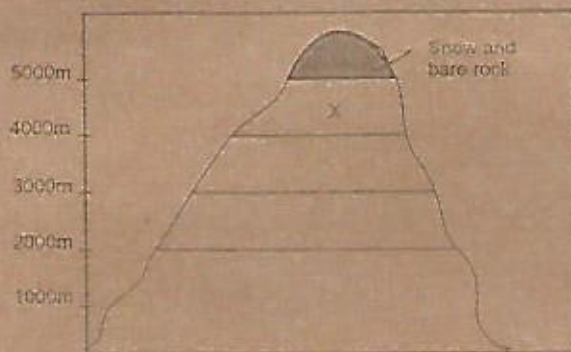




Study the map of Sori Area and answer questions 1 to 7.

- The general flow of River Sori is from
 - North West
 - South West
 - North
 - North East
- Which of the following is transported along the railway line to the factory near the post office?
 - Limestone
 - Bananas
 - Sugarcane
 - Fish
- Which one of the following combinations consist of food crops grown in Sori area?
 - Bananas and maize
 - Maize and coffee
 - Coffee and sugarcane
 - Sugarcane and bananas
- The type of soil in the Northern part of Sori area is
 - alluvial soil
 - volcanic soil
 - sandy soil
 - clay soil
- The location of the sugarcane factory at its present site was **mainly** influenced by
 - nearness to a railway line
 - availability of space
 - availability of market for sugar
 - nearness to source of raw materials.
- Many people have **not** settled around the lake because
 - the area has flat land
 - the area receives low rainfall
 - the area has dense forests
 - the area has swampy conditions
- Lake Beta is important in Sori area because it is
 - a source of fish
 - an inland drainage feature
 - a source of rainfall
 - used for water transport
- The following are characteristic of a climatic region in Africa
 - Hot rainy seasons and cool dry seasons
 - Temperature range between 15°C and 25°C
 - Annual rainfall is between 380mm and 2000mm
 The climatic region described above is
 - equatorial climate
 - Mediterranean climate
 - savannah climate
 - semi-desert climate
- Which one of the following statements about a customary marriage is correct?
 - A marriage certificate is issued
 - It is presided by clan elders
 - A man cannot marry more than one wife
 - dowry is not paid
- The main benefit of petroleum mining in Nigeria is that
 - towns have been established in mining areas
 - it earns the country foreign exchange
 - people have migrated to live in mining areas
 - roads have been built in mining areas

11. The **main** reason for European scramble for colonies in Africa is that they wanted to
- obtain raw materials from the continent
 - open up the continent for development
 - bring christianity to Africa
 - end slave trade in Africa
12. The **best** method of controlling alcoholism among the youth is through
- offering employment to them
 - taking them to rehabilitation centres
 - educating them on effects of alcohol
 - arresting those who abuse alcohol
13. The diagram below show vegetation cover on a mountain




The vegetation marked X consist of

- scattered acacia trees and tall grass
- dense evergreen forests
- dry scrubs and short grass
- tough grass, shrubs and flowers

14. The most development form of transport in Africa is
- railway transport
 - road transport
 - water transport
 - air transport
15. Which one of the following groups is made up of Kwa speaking communities of West Africa
- Malinke, Soninke, Bambara
 - Mossi, Dagomba, Gurma
 - Asante, Nzima, Wassa
 - Wolof, Fulani, Tukolor
16. The headteacher of a primary school performs the following duties **except**
- chaining board of management meetings
 - teaching subjects in class
 - chaining teacher staff meetings
 - keeping school records
17. The following are requirement for growing certain crop
- Well distributed rainfall of 1000mm to 1500m**
 - Cool highland temperatures**
 - High altitude of over 1800metres**
- The requirements listed above favour the growing of
- | | |
|----------|--------------|
| A. cocoa | B. cloves |
| C. sisal | D. pyrethrum |

18. The following factors led to the expansion of the kingdom of old Ghana **except**
- coming of Europeans to West Africa
 - wealth from Trans Saharan trade
 - a strong well- equipped army
 - favorable climatic conditions
19. The most favourable method of catching fish that live in the deep parts of the sea is
- purse-seining method
 - trawling method
 - net drifting method
 - basket method
20. Which one of the following mountains were formed when land between faults was uplifted?
- Mount Egon
 - Atlas mountains
 - Mount Ruwenzori
 - Drakensburg mountains
21. The French used assimilation method to administer their colonies in order to make Africans
- Accept colonial rule
 - acquire jobs in the colonies
 - acquire wealth
 - adopt french way of life
22. Two pastoral communities have a conflict over grazing lands. The **best** method to solve the conflict is
- agree to share the pasture
 - take the case to a court of law
 - one community to move out of the area
 - fight the grazing area
23. Which one of the following was an achievement of the organization of African unity (OAU)?
- It promoted the use of a common language
 - It struggled for independence of African countries
 - It introduced a common currency in Africa
 - It stopped civil wars in Africa
24. Which one of the following game parks is **correctly** matched with the country it is located?
- | Game park | Country |
|----------------|--------------|
| A. Kruger_____ | Tanzania |
| B. Selous_____ | Uganda |
| C. Hwango_____ | Zimbabwe |
| D. Bwindi_____ | South Africa |
25. The factor that discourages high population along the south- West coast of Africa is
- presence of tsetse flies
 - presence of swamps
 - Steep slopes in the area
 - little rainfall in the area

26. Which one of the following reasons caused the Babua and Bushilele uprising in Belgium Congo during the colonial period?
- Forced labour in rubber plantations
 - Lack of employment for Africans
 - High taxation on Africans
 - Inadequate provision of education for Africans
27. Which one of the following is a responsibility of learners in the school management?
- Preparing the school routine
 - Taking care of school property
 - Preparing the school budget
 - Reporting the school progress to education officers
28. Which one of the following is a problem facing forestry in the Democratic Republic of Congo (DRC)?
- Frequent drought in forested areas
 - Over exploitation of the natural forests
 - Long periods that trees take to mature
 - Pests that attack hardwood trees
29. Which one of the following areas in Africa experience desert conditions?
- West coast of Africa
 - Central parts of Tanzania
 - Niger delta in Nigeria
 - Ogaden region in Ethiopia
30. Which one of the following statements about the political organization of the San people in the pre-colonial period is true?
- Decisions were made through general agreement
 - A king was succeeded by his sister's son
 - A council of elders appointed chiefs
 - There was a centralised system of government
31. The introduction of mobile telecommunication in Africa has mainly led to
- movement of people to towns
 - increase in trading activities
 - expansion of towns
 - expansion of road network
32. The diagram below shows a drainage feature.

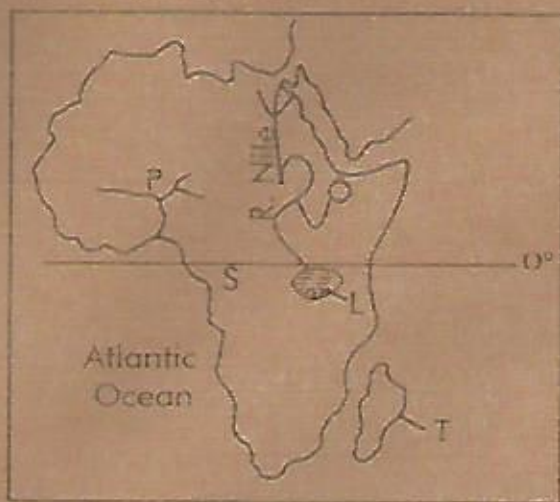


The drainage feature shown above is

- a lava-dammed lake
 - a tarn lake
 - a depression lake
 - an ox-bow lake
33. The following are statements about a town in Africa
- It is centrally located in the country*
 - It has few industries*
 - It is the administrative capital city*
 - It lies along the great North Road*
- The town described above is
- Johannesburg
 - Lagos
 - Dodoma
 - Addis Ababa
34. King Lewanika collaborated with the British during the colonial period because he wanted the Europeans to
- carry out trade with the European
 - offer him a job in the colonial government
 - build railway lines through his kingdom
 - protect his kingdom from enemies
35. Which one of the following communities is correctly matched with the country it is found?
- | Community | Country |
|--------------|------------|
| A. Ovimbundu | Angola |
| B. Yoruba | Algeria |
| C. Yao | Nigeria |
| D. Berbers | Mozambique |
36. Kamau moved from his home in Murang'a country and started a shop in Uasin Gishu county. A month later the local people burnt his shop claiming he does not belong to the area. The people abused his freedom of
- movement
 - expression
 - association
 - privacy
37. A similarity in the systems of government between Kenya and Swaziland is that
- elections are held every five years
 - some members of parliament are nominated
 - political parties are registered by the government
 - the head of state is elected by voters
38. Which one of the following groups of countries is made up of members of the economic community of West Africa states (ECOWAS)?

A. Cameroon Congo Benin	B. Chad Niger Gabon
C. Nigeria Ghana Senegal	D. Togo Cameroon Gabon

39. Different seasons on earth are caused by
 A. changing phases of the moon
 B. deflection of winds
 C. the overhead sun along the tropics
 D. rotation of the earth
40. Which of the following is a problem facing fishing in inland water bodies in Africa?
 A. Poor roads in fishing areas
 B. Presence of plants growing in fishing grounds
 C. Competition from fishing vessels from Europe
 D. scarcity of fish in fishing grounds
41. Which one of the following is a collective responsibility of every citizen in Kenya?
 A. Importing goods into the country
 B. Voting during general elections
 C. Starting a family through marriage
 D. Taking care of the environment
42. The river Nile valley in Egypt is densely populated due to
 A. high rainfall in the area
 B. cool and wet highland conditions
 C. availability of water for irrigation
 D. mining of petroleum in the area
- Use the map of Africa below to answer question 42 to 46



43. Three of the following statements about the river marked P are correct. Which one is not?
 A. It carries the largest volume of water in Africa
 B. Some sections flow through arid areas
 C. it forms a delta at its mouth
 D. it rises in plateau region.
44. Which one of the following communities is found in the area marked S?
 A. Dinka
 B. Balunda
 C. Baganda
 D. Herero
45. The island country marked T was colonised by
 A. Portugal
 B. Britain
 C. Germany
 D. France

46. The **main** economic importance of the lake marked L is
 A. It is a source of fish for export
 B. it is used for inland water transport
 C. it is a source of a river
 D. it is a tourist attraction site
47. Africans in Zimbabwe used armed struggle to demand for independence because
 A. white settlers do not want to leave the country
 B. Africans made their own weapons
 C. Africans had strong leaders
 D. Other countries in Africa helped them
48. Which one of the following factors has favoured industries development in both Kenya and South Africa?
 A. Presence of large population of white people
 B. presence of cheap labour
 C. presence of raw materials
 D. presence of a long coastline
49. Which one of the following is a member of the Board of Management in a school?
 A. Senior teacher
 B. class prefect
 C. deputy headteacher
 D. chair person
50. The interaction of different communities in Africa has **mainly** contributes to
 A. increase in trading activities
 B. movement of people to towns
 C. establishment of slums in towns
 D. establishment of new languages
51. The following are characteristics of mountains
 i) They are rocky
 ii) They are common in plateau regions
 iii) They are formed through erosion
 The types of mountains described above are
 A. block mountains
 B. fold mountains
 C. residual mountains
 D. volcanic mountains
52. Which one of the following dams is correctly matched with the river it is found?

Dam	River
A. aswan _____	Volta
B. Kariba _____	Zambezi
C. Akosombo _____	Tana
D. Kamburu _____	Nile
53. Trees are evergreen in the rainforest vegetation zone because
 A. there is rainfall throughout the year
 B. the trees have long roots
 C. the trees grow close together
 D. the soil on which they grow is fertile.

54. The **MAIN** problem facing pastoral farming in Africa is
 A. Keeping of too many animals
 B. attacks on livestock by wild animals
 C. inadequate pasture in the dry seasons
 D. Inadequate market for beef products
55. Regional trade has benefited African countries through
 A. introduction of common currencies
 B. exchange of cultural practices
 C. learning of new languages
 D. earning of foreign exchange from exports
56. Which one of the following African leaders led the struggle for independence in Ghana?
 A. Leopold Senghor
 B. Gamal Abdel Nasser
 C. Robert Mugambe
 D. Kwame Nkurumah
57. Which one of the following is a way of providing equal opportunities to person with special needs?
 A. Electing physically challenged people to the county assembly
 B. forming political parties for them
 C. resettling landless people
 D. Solving conflicts through negotiation.
58. Which one of the following is a parliamentary election process in Kenya?
 A. Election of the president by voters
 B. swearing in of an elected governor
 C. Marking of ballot papers by voters
 D. appointment of cabinet secretaries
59. A member of the national Assembly loses a seat if the person
 A. is sent out of parliament by the speaker
 B. acquires dual citizenship
 C. is arrested by police officers
 D. goes out of the country
60. It is important for citizen to take part in elections in order to
 A. obey the laws of the country
 B. please their leaders
 C. exercise their democratic rights
 D. make use of free time.

CHRISTIAN RELIGIOUS EDUCATION

61. Which one of the following statements from the Genesis stories of creation shows that human being are special?
 A. "They will have power over all animals"
 B. "Have many children and fill the earth"
 C. "It is not good for the man to live alone"
 D. "And now we will make human beings they will be like us and resemble us"
62. The relative of Abraham who went with him to the land of Canaan was
 A. Lot
 B. Terah
 C. Laban
 D. Ishmail
63. Moses went to live in the land of Median from Egypt because
 A. he wanted to worship God on Mount Sinai
 B. the israelites were slaves in Egypt
 C. he wanted to marry the daughter of Jethro
 D. he was afraid of the king of Egypt
64. When the Israelites reached the Red sea during the exodus they were afraid of
 A. dying from thirst
 B. snakes that were biting them
 C. the Egyptians army following them
 D. presence of God on Mount Sinai
65. Who led the Israelites to defeat the Amalekites during the exodus?
 A. Aaron
 B. Jushua
 C. Gideon
 D. Hur
66. Which one of the following women in Israel solved cases among the people?
 A. Deborah
 B. Jezebel
 C. Ruth
 D. Hannah
67. King Saul wanted to kill David because
 A. people were praising David
 B. David and Jonathan were friends
 C. David as been anointed king
 D. he wanted to take david's wife
68. "I chose you before I gave you life, and before you were born...." God spoke these words to
 A. Isaiah
 B. Joel
 C. Micah
 D. Jeremiah
69. When prophet Elijah went to the town of Zarephath he
 A. multiplied oil and flour of the lady
 B. called for fire from heaven
 C. floated an axe-head
 D. healed Naaman of leprosy
70. The announcement for a census to be taken during the time of the birth of Jesus was made by
 A. Pontious Pilate
 B. King Herod
 C. Caiphas, the high priest
 D. emperor Augustus
71. Zachariah doubted angle Gabriels' message because
 A. it was his first time to speak to an angel
 B. he was old and his wife was barren
 C. he was burning incense in the temple
 D. he was not married
72. "You are my own dear son. I am pleased with you" (Luke 3:22) These words were said when Jesus
 A. died on the cross

- B. was taken to heaven
C. was fasting in the desert
D. was baptised
73. The two men who left their father in a boat and followed Jesus were
A. John and James
B. Peter and Andrew
C. Matthew and Philip
D. Nathaniel and Thomas
74. The parable of Jesus that promotes good relations in the family is
A. the ten young women
B. the lost son
C. the mustard seed
D. the servant in the vineyard
75. When teaching his disciples about who is the greatest Jesus used
A. a fish B. a coin
C. a child D. a sheep
76. Jesus raised Lazarus back to life in
A. Bethsaida B. Bethanage
C. Bethlehem D. Bethany
77. The person who was released during the trial of Jesus before Pilate was
A. Barabbas B. Barsabbas
C. Barnabas D. Bar-Jesus
78. The day Jesus resurrected He first appeared to
A. Cleopas B. Mary Magdalene
C. Peter D. Martha
79. On the day of Pentecost the Jews accused the disciples of Jesus
A. of working on the sabbath
B. of refusing to pay taxes
C. of being drunk
D. of breaking the law of Moses
80. The book of the New Testament that describes the activities of the followers of Jesus after ascension is
A. John B. Mark
C. Luke D. Acts
81. Which one of the following is a gift of the Holy Spirit?
A. Faith B. Humility
C. Kindness D. Faithfulness
82. In traditional African communities shrines are places where
A. priest led people in offering sacrifices
B. marriage ceremonies are conducted
C. ancestors are buried
D. initiation for the youth is done
83. In traditional African communities people give titles to God according to his
A. origin B. nature
C. dwelling place D. presence
84. Ancestors are best remembered in traditional African communities through
A. calling their names during worship
B. visiting their graves
C. naming children after them
D. naming places after them
85. The parents of Cheptoo, a standard eight pupil wants her to get married after KCPE. The **best** action for her to take is
A. obey her parents
B. run away from home
C. marry the man and continue with school
D. inform the chief of the area
86. When Christians donate food to famine victims they demonstrate
A. kindness B. honesty
C. faithfulness D. humility
87. Samuel was given extra money as change by a shopkeeper. After realising he returned the extra money. This shows
A. humility B. patience
C. honesty D. loyalty
88. Which one of the following is a virtue in Christianity?
A. Pride B. Wealth
C. Tame D. Obedience
89. Christians take part in tree planting in order to
A. obey the laws of the country
B. take care of the environment
C. get timber from the trees
D. please their leaders
90. Which one of the following values is the most important in a Christian family?
A. Faithfulness B. Education
C. Wealth D. Prestige

ISLAMIC RELIGIOUS EDUCATION

61. Which one of the following was the first surah to be revealed to prophet Muhammad (s.a.w)?
A. Al-Alaq B. Al-Maun
C. Al-Fil D. Al-Kauthar
62. The surah of the Quran that says man is violent in search for wealth is
A. Maun B. Humaza
C. Aadiyat D. Kauthar
63. Whoever performs Hajj and commits no evil returns home free from sins like
A. a muslim B. a baby
C. an angel D. a prophet
64. Who was the chief of Makkah during the conquest of Makkah?
A. Abu Jahab B. Abu Talib
C. Abu Jahal D. Abu Sufyan
65. Which one of the following places is not mentioned in Suratul Tiin?
A. Makkah B. Egypt
C. Madina D. Jerusalem
66. Ramadhan discovered that his employee was HIV positive. What course of action should he have taken?
A. Report him to the nearest police station
B. Dismiss him from work

- C. Inform all other employees to be careful.
D. Retain him in his position
67. The 24th prophet of Allah (s.w) was _____
A. Isa B. Mohammad
C. Daud D. Nuh
68. Who among the following prophets received Wahyu on mount Sinai?
A. Mohammad B. Suleiman
C. Ibrahim D. Musa
69. Which one of the following statements is not true about Idd prayers?
A. It has two rakaat
B. Two Khufbahs are said before prayers
C. It has neither adhan nor Iqama
D. It is performed after sunrise.
70. The main lesson that we can learn from the story of Nabli Nuh (a.s) is _____
A. humility B. arrogance
C. pride D. love
71. Which of the following sunnah fasts is observed on the 13th, 14th and 15th of every month?
A. Ashura
B. Sitat-Shawwal
C. Ayyamul-baidh
D. Ta'sua
72. The eleventh month of the Islamic calendar is known as _____
A. Dhul-Hijjah
B. Muharram
C. Shawwal
D. Dhul-Qaada
73. How many Takbirahs are said in the first rakaat during Idd prayers?
A. Four B. Seven
C. Three D. One
74. Who among the following prophets used to fast on alternate days?
A. Daud B. Ibrahim
C. Mohammad D. Suleiman
75. Which one of the following is the main pillar of hajj?
A. Tawaaf B. Sa'ay
C. Arafat D. Sharing
76. The main reason why the muslims lost in the battle of Uhud?
A. They disobeyed the prophet (s.a.w)
B. They were few in number
C. The Quraish were well equipped.
D. The muslims has little faith in Allah
77. Who among the following companions of the prophet (s.a.w) advised him to dig a trench around Madina during the battle of Uhud?
A. Salman Al-farsy
B. Abdullah bin ubbay
C. Amr bin Al-nas
D. Zubair bin Awwam
78. Who among the following people killed Hamza during 'the' battle of Uhud?
A. Tuaim B. Ammar
C. Abu Lulua D. Wahsh
79. The prophet of Allah (s.w) who spoke at infancy was _____
A. Mohammad B. Issa
C. Ibrahim D. Daud
80. During which battle was the prophet (s.a.w) seriously injured?
A. Badr B. Khandaq
C. Uhud D. Hunain
81. Who among the following was the leader of the Munafiqun in Madina?
A. Abdullah bin ubbay
B. Abu Quhafa
C. Abdullah bin ubbay
D. Musab bin ummeir
82. How many years did angel Jibril take to reveal the Quran to the prophet (s.a.w)?
A. 13yrs B. 10yrs
C. 23yrs D. 40yrs
83. The first mosque to be built in the history of Islam was _____
A. Kaabah B. Aqsa
C. Nabawi D. Qubaa
84. Who among the following angels of Allah (s.w) records good deeds?
A. Jibril B. Atid
C. Raqib D. Ridhwan
85. Three of the following are rites of Umrah except
A. shaving B. Ihram
C. Tawaaf D. Arafat
86. Who among the following uncles of the prophet (s.a.w) was cursed in the Quran by name?
A. Abulahab B. Hamza
C. Abbas D. Abu Talib
87. Which of the following faradh saiat has no sunnah baadiyah?
A. Maghrib B. Subh
C. Isha D. Dhuhri
88. The best way of caring for our environment is
A. burning all the rubbish
B. throwing all the litter in the river
C. clearing all the bushes around our homes.
D. cutting down all the tall trees
89. Which one of the following is the best to consider when marrying?
A. Beauty B. Wealth
C. Family D. Religion
90. Who among the following noble women was the mother of prophet Isa (a.s)?
A. Maryam B. Khadijah
C. Asiya D. Amina