

# HISTORY AND GOVERNMENT

Dec. 2022 – 2½ hours



Name ..... Index Number .....

Candidate's Signature ..... Date .....

### Instructions to Candidates


- (a) Write your name and index number in the spaces provided above.
- (b) Sign and write the date of examination in the spaces provided above.
- (c) This paper consists of **three** sections; **A**, **B** and **C**.
- (d) Answer **all** the questions in section **A**, **three** questions from section **B** and **two** questions from section **C**.
- (e) **This paper consists of 16 printed pages.**
- (f) **Candidates should check the question paper to ascertain that all the pages are printed as indicated and that no questions are missing.**
- (g) **Candidates should answer the questions in English.**

### For Examiner's Use Only

Section	Question	Maximum Score	Candidate's Score
<b>A</b>	<b>1-17</b>	<b>25</b>	
<b>B</b>		<b>15</b>	
		<b>15</b>	
		<b>15</b>	
<b>C</b>		<b>15</b>	
		<b>15</b>	
<b>Total Score</b>			

509

0201





## SECTION A (25 marks)

Answer **all** questions in this section in the spaces provided.

1. Give the meaning of 'economic history'. (1 mark)  
.....
2. State **two** theories on the origin of the early humans. (2 marks)  
.....  
.....
3. Identify **two** inventions that promoted Agrarian Revolution in Britain. (2 marks)  
.....  
.....
4. Give the **main** reason for the coming of the early visitors to the East African Coast up to 1500 AD. (1 mark)  
.....
5. Identify **two** types of trade. (2 marks)  
.....  
.....
6. Name the invention that was made by the Wright brothers. (1 mark)  
.....
7. Highlight **one** early form of communication. (1 mark)  
.....
8. State **two** uses of electricity during the Industrial Revolution in Europe. (2 marks)  
.....  
.....
9. Name the people who founded the ancient city of Meroe. (1 mark)  
.....

10. Give **two** economic activities of the early humans during the Middle Stone Age. (2 marks)

.....  
.....

11. Name **one** type of constitution. (1 mark)

.....

12. State **two** ways through which direct democracy is exercised in society. (2 marks)

.....  
.....

13. Give **two** countries in West Africa which were colonised by the French. (2 marks)

.....  
.....

14. Name **one** type of spirit among the Shona (1 mark)

.....

15. Identify the political party which led Ghana to independence from Britain. (1 mark)

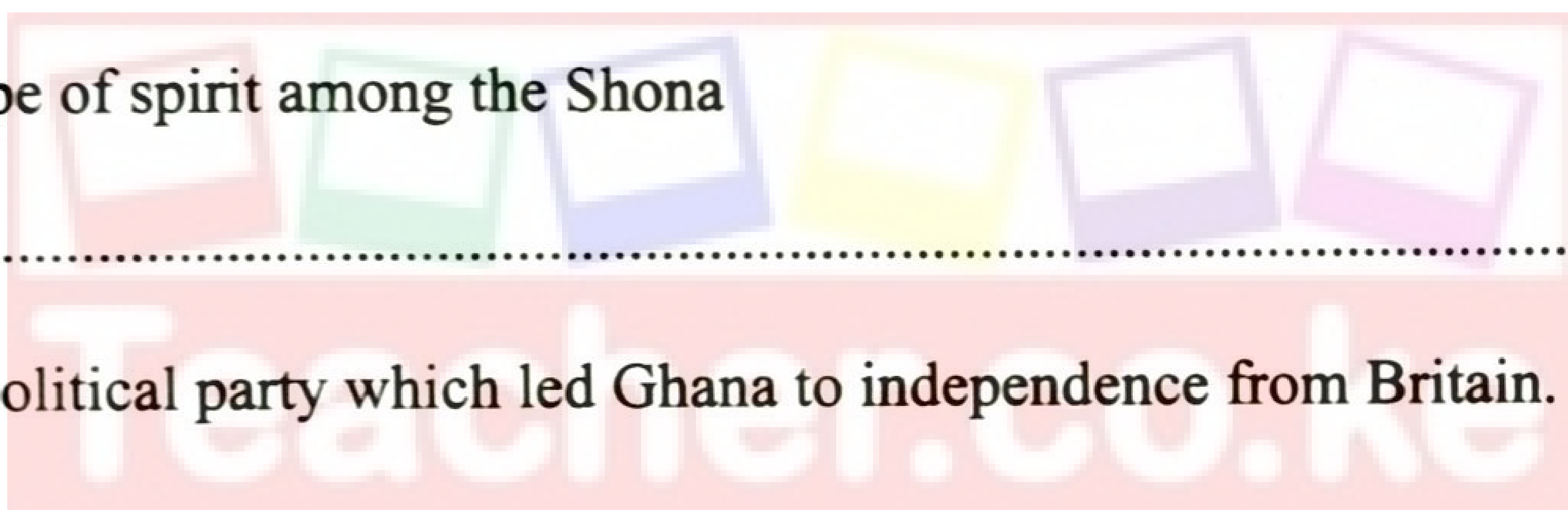
.....

16. State **two** roles which were played by the Council of Ministers in the Organisation of African Unity (O.A.U). (2 marks)

.....  
.....

17. Name the headquarters of the United Nations. (1 mark)

.....





## SECTION B (45 marks)

Answer any **three** questions from this section in the space provided after question 24.

18. (a) Identify **five** forms of written sources of information on History and Government. (5 marks)
- (b) Explain **five** disadvantages of electronic sources of information on History and Government. (10 marks)
19. (a) State **five** uses of domestic animals during the ancient period. (5 marks)
- (b) Describe **five** effects of the early agriculture on people's way of life. (10 marks)
20. (a) Highlight **five** factors which promoted the growth of nationalism in Ghana. (5 marks)
- (b) Explain **five** methods which were used by African nationalists in the struggle for independence. (10 marks)
21. (a) Give **five** disadvantages of using animal transport. (5 marks)
- (b) Explain **five** ways in which television is important as a means of communication. (10 marks)

Teacher.co.ke

## SECTION C (30 marks)

Answer **two** questions from this section in the space provided after question 24.

22. (a) Identify **three** political parties in India. (3 marks)
- (b) Discuss **six** functions of the President of India. (12 marks)
23. (a) Identify **three** categories of persons who are not allowed to contest for a parliamentary seat in Britain. (3 marks)
- (b) Explain **six** functions of the Congress in the United States of America (USA). (12 marks)
24. (a) Give **three** characteristics of human rights. (3 marks)
- (b) Discuss **six** reasons why the United Nations Charter on Human Rights is important. (12 marks)






Handwriting practice lines consisting of 20 horizontal dotted lines.



509

0201



509

0201



**THIS IS THE LAST PRINTED PAGE.**

*Kenya Certificate of Secondary Education, 2022*

**311/2**

317163

Download this and other FREE materials from <https://www.teacher.co.ke/>