



PRECIOUS STAR EXAM SERIES

STANDARD EIGHT - YEAR 2022

{003}

SOCIAL STUDIES & C. R. E

{8}

READ THESE INSTRUCTIONS CAREFULLY TIME: 2HRS 15 MIN

1. You have been given this question paper and a separate answer sheet. The question paper contains 50 questions
2. Do any necessary rough work in this paper.
3. When you have chosen your answer, mark it on the ANSWER SHEET, not in this question paper.

HOW TO USE THE ANSWER SHEET

4. Use an ordinary pencil only.
5. Make sure that you have written on the answer sheet

YOUR INDEX NUMBER

YOUR NAME

NAME OF YOUR SCHOOL

6. By drawing a dark line inside the correct numbered boxes mark your full Index Number (ie. School Code Number and the three-figure Candidate's Number) in the grid near the top of the answer sheet.
7. Do not make any marks outside the boxes.
8. Keep your answer sheet as clean as possible and **DO NOT FOLD IT.**
9. For each of the Questions 1-50 four answers are given. The answers are lettered A, B, C, D in each case only **ONE** of the four answers is correct. Choose the correct answer.
10. On the answer sheet show the correct answer by drawing a dark line inside the box in which the letter you have chosen is written.

Example

In the question booklet

22. The Trans - African High way passes through the following countries except

A. Nigeria B. Sudan C. Cameroon D. Uganda

The correct answer is B

5. [A] [B] [C] [D]

10. [A] [B] [C] [D]

17. [A] [B] [C] [D]

22. [A] [B] [C] [D]

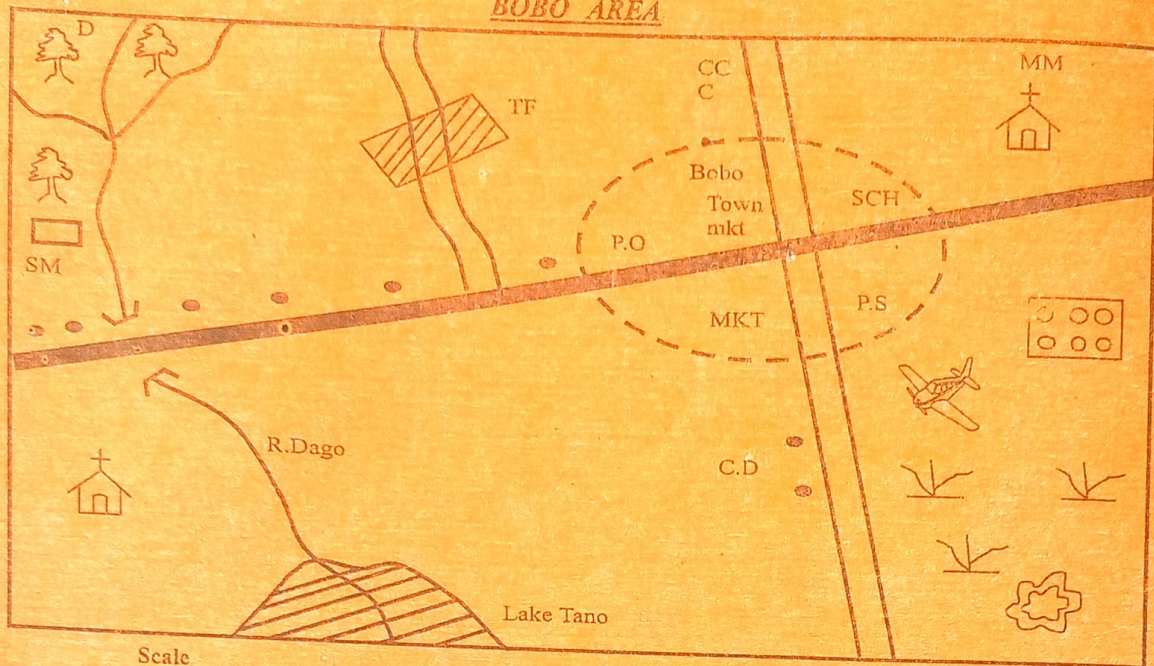
In the set of boxes numbered 17, the box with letter C printed in it is marked

11. Your dark line **MUST BE** within the box.
12. For each question **ONLY ONE** box is to be marked in each set of four boxes.

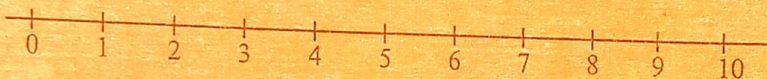
This question paper consists 6 pages

TURN OVER

BOBO AREA



Scale



Key:-

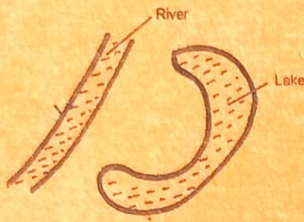
	Murrum road		Game reserve	C.D	Cattle dip
	Tarmac road		Grass	MKT	Market
	Town boundary		Church	SCH	School
	Tea plantation		Forest	P.S	Police station
	Settlement	T.F	Tea factory	C.O	County offices
	Bridge	SM	Saw mill	P.O	Post office
	Quarry	CCC	Coffee	D	Hill
	Airstrip	MMM	Maize		

Study the map of Bobo Area and answer questions 1 - 7.

1. The general flow of river Bobo is
 - A. North to South
 - B. South to North
 - C. North East to South East
 - D. North West to South West
2. The type of settlement pattern found in Bobo area is
 - A. nucleated
 - B. clustered settlement
 - C. sparsely
 - D. linear settlement
3. The people of Bobo area are likely to be
 - A. Christians
 - B. Muslims
 - C. Pagans
 - D. Traditionalists
4. The length of the tarmac road in Bobo area is approximately
 - A. 12km
 - B. 16.5km
 - C. 15km
 - D. 25km
5. The climate experienced in the North Western part of Bobo area has been brought out clearly due to the presence of
 - A. quarry
 - B. forest
 - C. lake
 - D. murrum road
6. The frequent users of the airstrip in Bobo area are likely to be
 - A. Christians
 - B. farmers
 - C. tourists
 - D. fishermen
7. A trader wants to acquire a trading licence at Bobo town. Where is he likely to get the licence?
 - A. Police station
 - B. County offices
 - C. Market
 - D. Post office
8. Which one of the following tourist attractions in Africa is correctly matched with the country where it is found?

A. Sandy beaches	-	Uganda
B. Victoria falls	-	Kenya
C. Gedi ruins	-	South Africa
D. Pyramids	-	Egypt
9. Three of the following are soil conservation measures. Which one is not?
 - A. Building gabions
 - B. Crop rotation
 - C. Contour ploughing
 - D. Mono-cropping

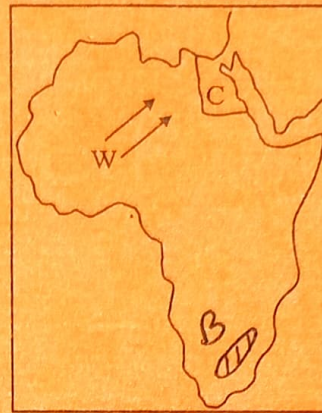
10. The diagram below represents a type of a lake;



The type of lake shown is

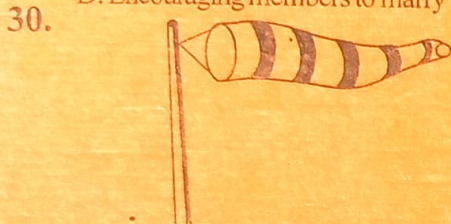
- A. an oasis B. an ox bow lake
C. a crater lake D. a corrie
11. Which one of the following groups of people consists of highland Nilotes of Kenya?
A. Turkana, Tugen, Keiyo
B. Njemps, Kamba, Nandi
C. Maasai, Teso, Marakwet
D. Kipsigis, Nandi, Pokot
12. Which one of the following political parties led Tanganyika to independence?
A. Tanganyika African Association
B. United Tanganyika Party
C. Tanganyika Africa National Union
D. Chama cha Mapinduzi
13. Which one of the following gives the correct order in which the ancestors of the Luo came to Kenya?
A. Joka - Jok, Joka - Omolo, Joka - Owiny
B. Joka - Omolo, Joka - Jok, Joka - Owiny
C. Joka - Owiny, Joka - Omolo, Joka - Jok
D. Joka - Jok, Joka - Owiny, Joka - Omolo
14. The main cause of rural - rural migration in Kenya is
A. lack of water
B. search for land for settlement
C. search for employment
D. outbreak of diseases
15. Below are some functions of a town in Kenya;
(i) It is an administrative centre
(ii) It is an industrial centre
(iii) It is an inland port
(iv) It is a commercial centre
The town described above is
A. Mombasa B. Magadi
C. Kisumu D. Nakuru
16. Below are some conditions necessary for the growth of a crop;
(i) High and well distributed rainfall
(ii) Deep and well drained soils
(iii) An altitude between 1800 and 3000m
The conditions described above are suitable for the growth of
A. cotton B. wheat
C. tea D. cocoa
17. Which form of transport is used to transport horticultural products from the farm to the airport?
A. Air B. Roads
C. Water D. Railway
18. Which one of the following is **not true** about revolution of earth?
A. Revolution causes seasons
B. The earth revolves from West to East
C. Revolution causes day and night
D. The path around the sun is called orbit
19. Which one of the following is a service industry?
A. Carving B. Banking
C. Brewing D. Mining

Use the map below to answer questions 20 - 22



20. Which one of the following is the effect of the winds labelled W in the above map?
A. The winds bring a cooling effect in Tunisia and Algeria
B. The winds bring short rains in West African countries in the months of April and June every year
C. The winds bring dry conditions in some parts of North Africa
D. The Westerlies winds above bring a lot of rain in some parts of West Africa
21. Which one of the following is the capital city of the country marked C?
A. Luanda B. Alexandria
C. Gaborone D. Cairo
22. The physical feature found in the area marked B is
A. Bie plateau B. Kalahari basin
C. Drakensberg D. Semi desert
23. What is the time at Bamako 10°W when it is 10.00am at Cairo 30°E?
A. 7.20am B. 12.40pm
C. 12.40am D. 8.00am
24. The following are impacts of climate change on human activities. Which one is **not**?
A. Effect on agriculture
B. Flooding
C. Effect on health
D. Volcanic eruptions
25. Which one of the following minerals is **correctly** matched with their mining methods?
A. Diatomite - Shaft
B. Limestone - Open cast
C. Oil - Dredging
C. Soda ash - Evaporation
26. Which one of the following is **not** an effect of colonial rule in Africa?
A. Urbanization
B. Introduction of agriculture
C. Destruction of traditional political systems
D. Informal education
27. The following conditions favour the growth of a certain crop in Africa;
(i) Very high temperature
(ii) Very deep fertile soils
(iii) Very high rainfall
(iv) Very high amount of water vapour in the atmosphere
Which crop has the conditions stated above?
A. Pyrethrum B. Sisal
C. Coffee D. Cloves

28. Which season is experienced in Northern hemisphere in the month of June?
 A. Winter B. Spring
 C. Summer D. Autumn
29. Which one of the following was the main function of the clan in the traditional African society?
 A. Forming the warrior group
 B. Organizing trading activities
 C. Settling disputes among members
 D. Encouraging members to marry within themselves



The instrument shown above is used to measure
 A. temperature B. wind direction
 C. humidity D. atmospheric pressure

31. Which one of the following statements describes the political organization of the San during the pre-colonial period?
 A. They lived in caves
 B. They were ruled by chiefs
 C. They kept livestock
 D. They made decisions through consensus

32. Below are statements that describe results of early visitors to Eastern Africa;

- (i) Introduction of stone buildings
 (ii) Introduction of Western education
 (iii) Development of Swahili culture
 (iv) Abolition of slave trade
 (v) Introduction of use of currency

Which one of the following combination of statements describes the results of Arab visitors?

- A. i, iii and v B. i, ii and iv
 C. iii, iv and v D. ii, iii and iv

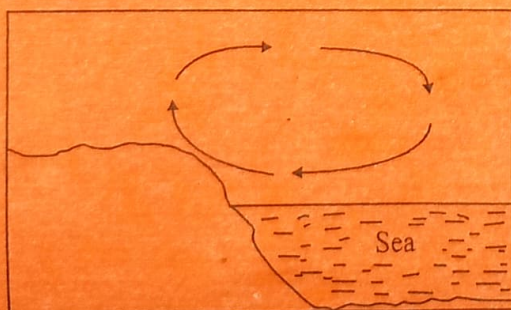
33. Below are statements which describe ways through which communities interact;

- (i) They go to war
 (ii) They go to school together
 (iii) They intermarry
 (iv) They exchange goods
 (v) They compete in modern games

Which combination of statements above described the interaction among traditional African communities?

- A. iii, iv and v B. iv, iii and v
 C. i, ii and iv D. i, iii and iv

34. Study the diagram below and answer the following question



The diagram illustrates the formation of
 A. land breeze B. sea breeze
 C. relief rainfall D. convectional rainfall

35. Which one of the following groups of lakes was formed through volcanic activity?

- A. Lake Chilwe, Lake Benguela, Lake Chad
 B. Lake Kivu, Lake Tana, Lake Nyos
 C. Lake Gambe, Lake Kanyaboli, Lake Utange
 D. Lake Volta, Lake Nasser, Lake Masinga

36. The following European powers colonised Somalia. Which one did **not**?

- A. French B. Germans
 C. British D. Italians

37. Which mineral is correctly matched with the country where it is mined?

Mineral	Country
A. Gold	Zambia
B. Petroleum	Nigeria
C. Soda ash	South Africa
D. Copper	Kenya

38. Which one of the following statements is **true** about the Buganda kings during the pre-colonial period?

- A. They were elected by the council of elders
 B. They were chosen by the wisemen
 C. They inherited the leadership
 D. They were appointed by the people

39. Which of the following Eastern Africa communities is **wrongly** matched with its place of origin?

Community	Place of origin
A. Rendile	Horn of Africa
B. Abaluhya	Congo Basin
C. Arabs	Saudi Arabia
D. Kipsigis	Shungwaya

40. Which one of the following statements is **true** about the Eastern African Community (EAC)?

- A. Rwanda and Burundi were founder members
 B. Its parliament is based in Addis Ababa
 C. The organization collapsed in 1977
 D. Its main objective is agricultural development

41. Who among the following county officials appoints the county executive committee?

- A. County commissioner
 B. County assembly speaker
 C. Sub-county administrator
 D. County governor

42. Which of the following was a result of settler farming in Kenya?

- A. Introduction of crop farming
 B. Introduction of fishing
 C. Introduction of cash crop farming
 D. Introduction of livestock keeping

43. Amina a class 8 candidate has been performing poorly in class because she learnt that her father is HIV positive. Which is the best action for you to help Amina?

- A. Encourage her to look for employment
 B. Advice her to seek guidance and counselling
 C. Encourage her to pray for her father to be healed
 D. Advice her to drop out of the school

44. Which group of pre - historical sites are found in Tanzania?
 A. Olduvai, Gorge, Magosi, Ishango
 B. Awash, Hadar, Axum
 C. Isimila, Ngoloba, Peninj
 D. Kapchi, Songomara, Lalibela
45. Democracy in school may be practised by
 A. involving pupils in electing their leaders
 B. allowing pupils to study subjects of their choice
 C. Involving children in cleaning school compound
 D. Making sure all pupils do their homework
46. The chief legal advisor to the government in Kenya is
 A. high court judge B. attorney general
 C. deputy president D. chief justice
47. Which one of the following is true about the systems of government in both Kenya and Swaziland? In both countries
 A. there are no political parties
 B. president and the king are heads of state
 C. there is no general election after every 5 years
 D. There is a constitution
48. Below are some ways used for predicting the coming of a rainy season;
 (i) *Observing the sky*
 (ii) *Measuring the hotness and coldness of a place*
 (iii) *Using air balloons*
 (iv) *Observing the shape of the moon*
 Which combination listed above consists of modern methods of weather forecast?
 A. iii, iv B. i, iv
 C. ii, iii D. ii, iv
49. Urbanization can be described as the
 A. upgrading of the slum areas
 B. growth and development of towns
 C. construction of by - pass and highways
 D. building of permanent houses in towns
50. Three of the following statements are true about the kingdom of Buganda and the chiefdom of Nyanwezi. Which one is **not**?
 A. Had a strong standing army
 B. They both traded with Arabs
 C. They were attacked by Almoravids
 D. Had powerful and successful rulers
51. The following are ways used to solve conflict in the society. Which one is the best to resolve conflicts among pupils?
 A. Dialogue B. Litigation
 C. Mediation D. Negotiation
52. A foreigner living in Kenya may enjoy the following rights **except**;
 A. right to settle anywhere
 B. right to own property
 C. right to life
 D. right to vote
53. The **main** benefits of Jua Kali industries to the economy of Kenya is
 A. create employment
 B. earn foreign exchange
 C. reduce rural urban migration
 D. control environment pollution

54. Which one of the following function is **not** carried out by Kenya police?
 A. Defend the country against external attack
 B. Maintain law and order
 C. Controlling traffic
 D. Protect property
55. Which one of the following groups of countries comprises of members of IGAD?
 A.

Uganda
South Sudan
Tanzania

 B.

Sudan
Ethiopia
Somalia

 C.

Tanzania
Djibouti
Somalia

 D.

Egypt
Kenya
Ethiopia
56. Which one of the following is **likely** to cause conflict in the society?
 A. Tolerance B. Popular policies
 C. Poverty D. Transparency
57. Which one of the following is **not** an importance of the bill of right?
 A. Preserve human dignity
 B. Promote justice
 C. Offer equal opportunities
 D. Promote discrimination
58. Which one of the following is **not** a function of parliament?
 A. Implementing government policies
 B. Approve budget
 C. Amend laws
 D. Making legislation
59. Which one of the following is **not** a principle of democracy?
 A. Promote equality before the law
 B. Promote injustice to all people
 C. Promote equal opportunities for all citizens
 D. Promote freedom for all citizens
60. Who among the following is a member of IEBC?
 A. Vice chairperson B. Attorney general
 C. President D. Chief justice

SECTION II : CHRISTIAN RELIGIOUS EDUCATION

61. Which of the following is the **main** reason why Adam and Eve hid from God? (**Genesis 3:8**)
 A. They feared God
 B. They realised they had sinned against God
 C. They were ashamed
 D. They had knowledge
62. "**All the animals, birds and fish will live in fear of you**" These words were spoken by God to
 A. Abraham B. Adam
 C. Moses D. Noah
63. Where was Abraham was living when God called him?
 A. Haran B. Mt. Moriah
 C. Canaan D. Ur
64. Who among the following was a son of Amram?
 A. David B. Gerishom
 C. Moses D. Haran
65. The main virtue Christians learn from the story of Joseph and Potiphar's wife is
 A. having self - control B. being patient
 C. having faith D. having courage

66. During the call of Moses, God came on Mt. Sinai in form of
 A. thunder B. fire
 C. blown trumpets D. smoke
67. During the Passover night, the Israelites did all the following **except** ate
 A. roasted meat B. bitter herbs
 C. while standing D. leavened bread
68. Who among the following defeated his enemies with 300 soldiers?
 A. David B. Saul
 C. Solomon D. Gideon
69. Which miracle was performed by both Elijah and Elisha?
 A. Multiplied food
 B. Called fire from heaven
 C. Floated an axe
 D. Walked on water
70. "*I am the Lord's servant*" (Luke 1:38) These words were said by Mary during
 A. naming of Jesus
 B. baptism of Jesus
 C. presentation of Jesus at the temple
 D. annunciation of birth of Jesus
71. Who among the following referred to Jesus as the saviour?
 A. Simon B. Simeon
 C. Isaiah D. John the Baptist
72. Which one of the following parables teaches the value of the kingdom of God?
 A. The mustard seed B. The sower
 C. The pearl D. The prodigal son
73. Which one of the following statements is a teaching of Jesus on the Lord's prayers?
 A. Forgive us the wrongs we have done
 B. Happy are the pure in heart
 C. Seek and you will find
 D. Give to him who asks you
74. A lesson that Christians learn from the healing of the ten lepers is that they should be
 A. tolerant B. thankful
 C. peaceful D. prayerful
75. The parable of the talents teaches Christians to
 A. keep their wealth in safe places
 B. reward those who don't work
 C. use their abilities to create wealth
 D. share their wealth with others
76. "*This is my body which is given for you*" (Luke 22:19) Jesus said those words
 A. during the trial before Pilate
 B. during the crucifixion
 C. during the last supper
 D. during his ascension to heaven
77. Which one of the following events took place when Jesus was resurrected?
 A. There was darkness over the land
 B. The curtain in the temple was torn
 C. A voice was heard from heaven
 D. there was earthquake
78. Who among the following people was a deacon in the early church?
 A. Stephen B. Paul
 C. Peter D. James
79. Which one of the following is a gift of the Holy spirit?
 A. Gentleness B. Healing
 C. Patience D. Humility
80. When Philip met the Ethiopian Eunuch, the Eunuch was reading about
 A. the baptism of Jesus
 B. the transfiguration
 C. the coming of the Holy spirit
 D. the suffering of the Messiah
81. In traditional African communities, people are expected to marry **mainly** to
 A. raise their status B. please the ancestors
 C. become leaders D. get children
82. In traditional African communities children are taught their duties **mainly** through
 A. telling them stories B. singing and dancing
 C. assigning them tasks D. playing games
83. Which of these communities is **correctly** matched with its traditional name of God?
 A. Luhya - Engoro B. Maasai - Ngai
 C. Kamba - Asis D. Turkana - Akuj
84. In traditional African heritage, people reconciled with God **mainly** by
 A. respecting the specialists
 B. offering sacrifices
 C. naming children after the ancestors
 D. going to the sacred places
85. Which one of the following acts of worship is not found in both Christianity and African traditional heritage?
 A. Praying in special places
 B. Saying short prayers
 C. Singing and dancing
 D. Consulting mediums
86. The parents of Anne your classmate wants her to get married to a wealthy man, hoping that through this, their family's standard of living would improve. As a Christian, what is the best action you can take?
 A. tell her to refuse and run away
 B. Report the matter to the local pastor
 C. Tell her to refuse and seek help from neighbours
 D. Tell her to refuse and seek help from the teachers
87. Kamau has noted that his brother has been abusing alcohol. As a Christian what should Kamau do?
 A. Report him to the local elder
 B. Avoid talking with him
 C. Tell him to see a counsellor
 D. Tell his parents to punish him
88. Your friend has been going out of school during class time. You understand that he misses a lot during his absence. As a Christian, you should
 A. report it to the parents to help him
 B. report the matter to the classteacher
 C. show him the importance of obedience
 D. terminate the relationship with him
89. In a class field visit, you saw a one hundred shillings note. What is the **best** thing to do?
 A. Keep the money to help the poor
 B. Share it with your best friends
 C. Give it to the very needy pupil
 D. Find out who the owner is
90. Which one of the following statements is **true** of the early Christian missionaries to Kenya?
 A. They helped in the building of the railway in 1901
 B. They translated the Bible into local language
 C. They helped to colonize Kenya
 D. They taught traditional African religion