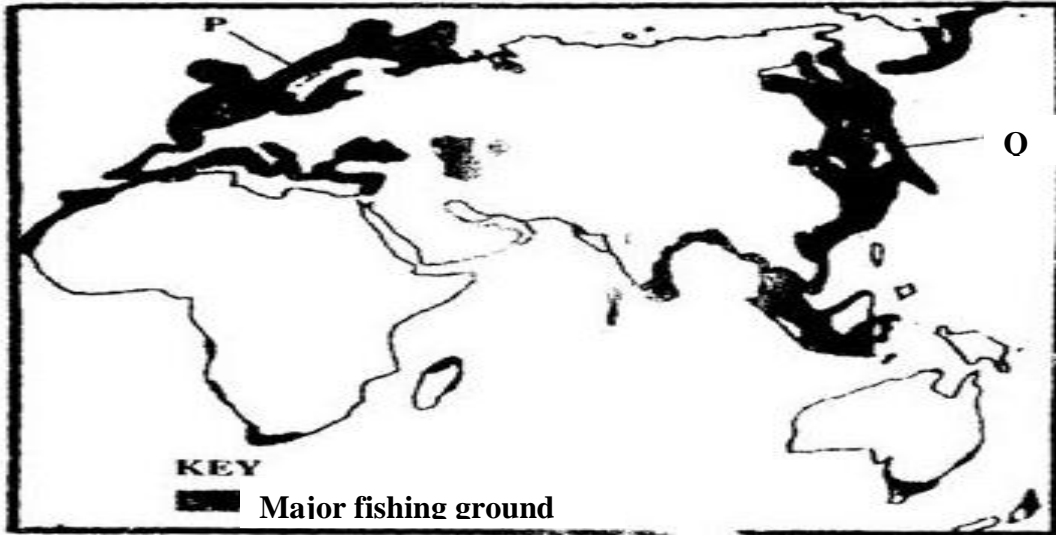


17. FISHING

The topic entails:

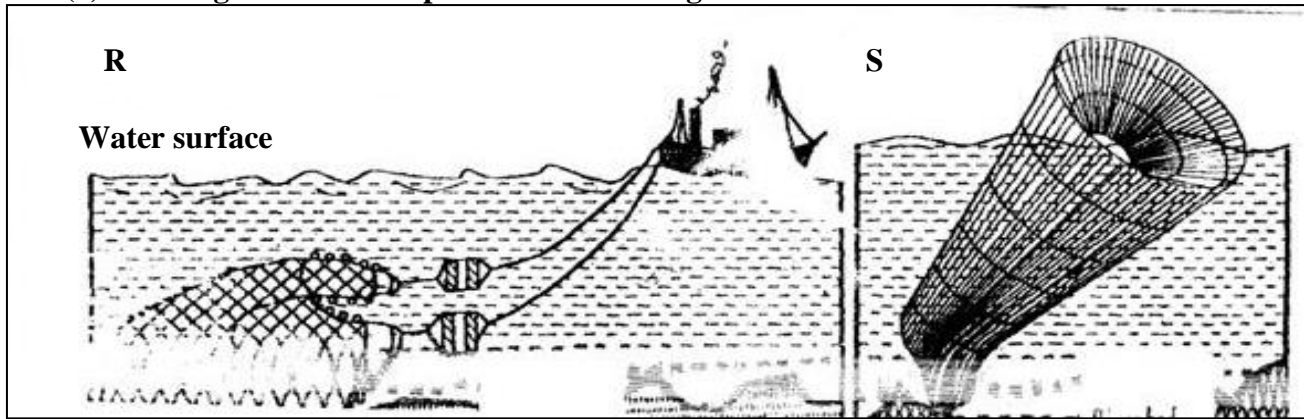
- (i) *Definition of fishing and fisheries.*
- (ii) *Explaining the factors influencing fishing*
- (iii) *Accounting for the location of the major fishing grounds of the world.*
- (iv) *Describing type and methods of fishing*
- (v) *Discussing fresh water and marine fisheries in East Africa*
- (vi) *Assessing the significance of the fishing industry in Kenya*
- (vii) *Discussing problems facing fishing in Kenya and their possible solutions*
- (viii) *Comparing and contrasting fishing activities in Kenya and Japan*
- (ix) *Explaining ways and means of managing and conserving fresh water and marine fisheries.*

The map below shows some major fishing grounds in the world. Use it to answer questions below:




1. (a) (i) Name the countries marked **P** and **Q**
(ii) Explain **four** conditions that favour fishing in the shaded coastal water

2. (a) The diagrams below represent some fishing methods



- (a) (i) Name methods **R** and **S**
(b) Describe how each of the two methods are used in fishing
(c) Explain **three** measures used to conserve fish in Kenya
3. (a) (i) What is fish farming?
(ii) Explain **three** measures that have been undertaken by the government of Kenya to encourage fish farming.
(b) Explain **four** problems which face marine fishing in Kenya.
(c) (i) Name **three** fishing grounds in the Northern Hemisphere.
(ii) Explain **three** physical factors that favour fishing in Japan.
4. (a) Differentiate between veins and lodes.
(b) State the effects of dereliction
5. (a) (i) Name **two** methods of fishing.
(ii) Name **two** types of fish caught along the Eastern Coast of Canada.
(b) Explain how the following factors favour fishing:-
(i) Indented Coastline
(ii) Ocean Currents
(c) Explain **four** ways in which fisheries in Kenya can be conserved.
6. (i) Give **three** methods used to preserve fish.
(ii) Explain **three** problems experienced by fishermen in Lake Victoria.
7. State **four** reasons why marine fisheries in Kenya are under-developed
8. (a) (i) Name **three** types of nets used in modern fishing
(ii) Identify the **two** main fishing grounds of the Pacific Ocean
(b) Explain any **four** problems facing fishing in East Africa
(c) Explain any **four** ways in which fishing is significant to Kenya
(d) Name **four** areas where fish farmers in Kenya can obtain fingerlings
9. a) i) State the **three** categories of fish communities
ii) Explain **four** reasons why North East Atlantic is one of the most extends
iii) State **four** measures taken by the Kenyan government in the management and conservation of fisheries
10. (a) A part from trawling, name **two** other modern methods of fishing
(b) State **two** reasons why the Western Coast of Africa has high concentration of fish than the Eastern Coast.

11. (a) Name **two** commercial fishing methods commonly used in Atlantic fishing ground
(b) State **three** problems Kenyan fishermen face while fishing in Lake Victoria
12. (a) State **two** measures that have been taken to conserve fish in Kenya
(b) Give **three** reasons why Norway is a great fishing nation
13. (a) Name commercial methods of fishing shown in the diagrams below:



- (b) State **three** reasons why marine fisheries in Kenya are underdeveloped
14. (a) Differentiate between **pelagic fish** and **demersal fish**?
(b) Identify **two** problems facing the fishing industry in Kenya.