

312/2

— GEOGRAPHY —

Paper 2



Apr. 2021 – 2¾ hours

Name Index Number

Candidate's Signature Date

Instructions to candidates

- (a) Write your name and index number in the spaces provided above.
- (b) Sign and write the date of examination in the spaces provided above.
- (c) This paper consists of **two** sections; **A** and **B**.
- (d) Answer **all** the questions in section A.
- (e) Answer **question 6** and any other **two** questions from section B.
- (f) Answers **must** be written in the spaces provided at the end of question 10.
- (g) **This paper consists of 20 printed pages.**
- (h) **Candidates should check the question paper to ascertain that all the pages are printed as indicated and that no questions are missing.**
- (i) **Candidates should answer the questions in English.**

For Examiner's Use Only

Section	Questions	Maximum Score	Candidate's Score
A	1–5	25	
B	6	25	
		25	
		25	
Total Score		100	

154

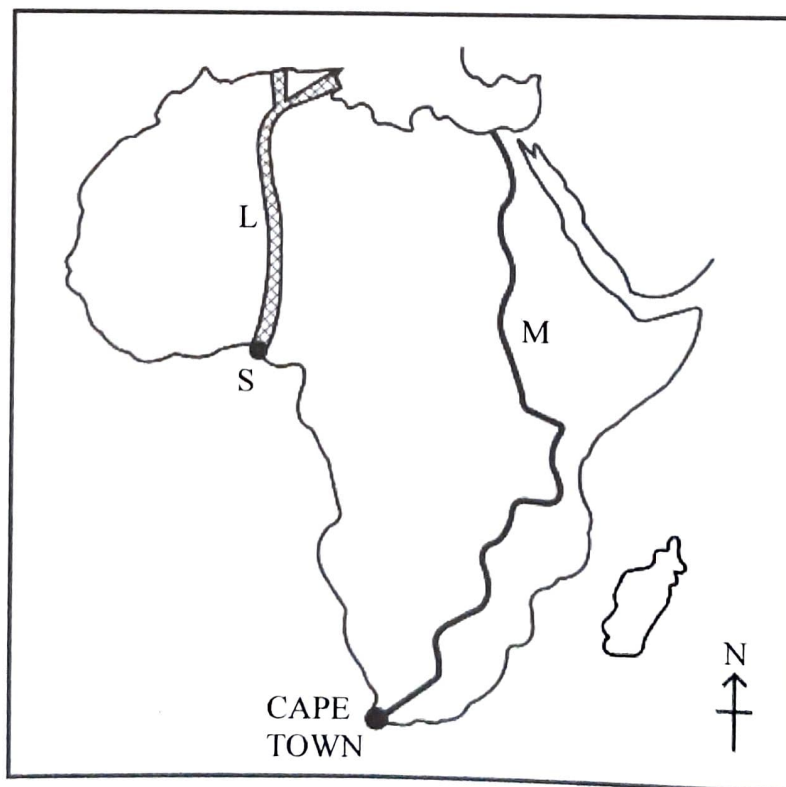
Download Notes & More Free Revision Materials at <https://teacher.co.ke/notes>



SECTION A

Answer **all** the questions in this section.

1. (a) What is dairy farming? (2 marks)
- (b) State **two** physical conditions that favour dairy farming in Kenya. (2 marks)
2. (a) Differentiate between fishing and fisheries. (2 marks)
- (b) Give **three** reasons why fish farming is being encouraged in Kenya. (3 marks)
3. (a) Apart from coal, name **two** other non-renewable sources of energy. (2 marks)
- (b) Give **three** reasons why the use of coal as an industrial fuel has declined. (3 marks)
4. (a) Name **three** agricultural non-food processing industries found in Kenya. (3 marks)
- (b) Give **two** reasons why some industries should be located near the market. (2 marks)
5. Use the map of Africa below to answer question a(i) and (ii).



- (a) Name the:
- (i) transcontinental highways in Africa marked **L** and **M**; (2 marks)
 - (ii) town marked **S**. (1 mark)
- (b) List **three** advantages of road transport. (3 marks)

SECTION B

Answer question 6 and any other two questions from this section.

6. The table below shows estimated production of selected crops in Kenya in 2013. Use it to answer question (a).

Crops	Production (Number of bags)
Maize	38,900,000
Beans	6,100,000
Sorghum	1,800,000
Millet	700,000

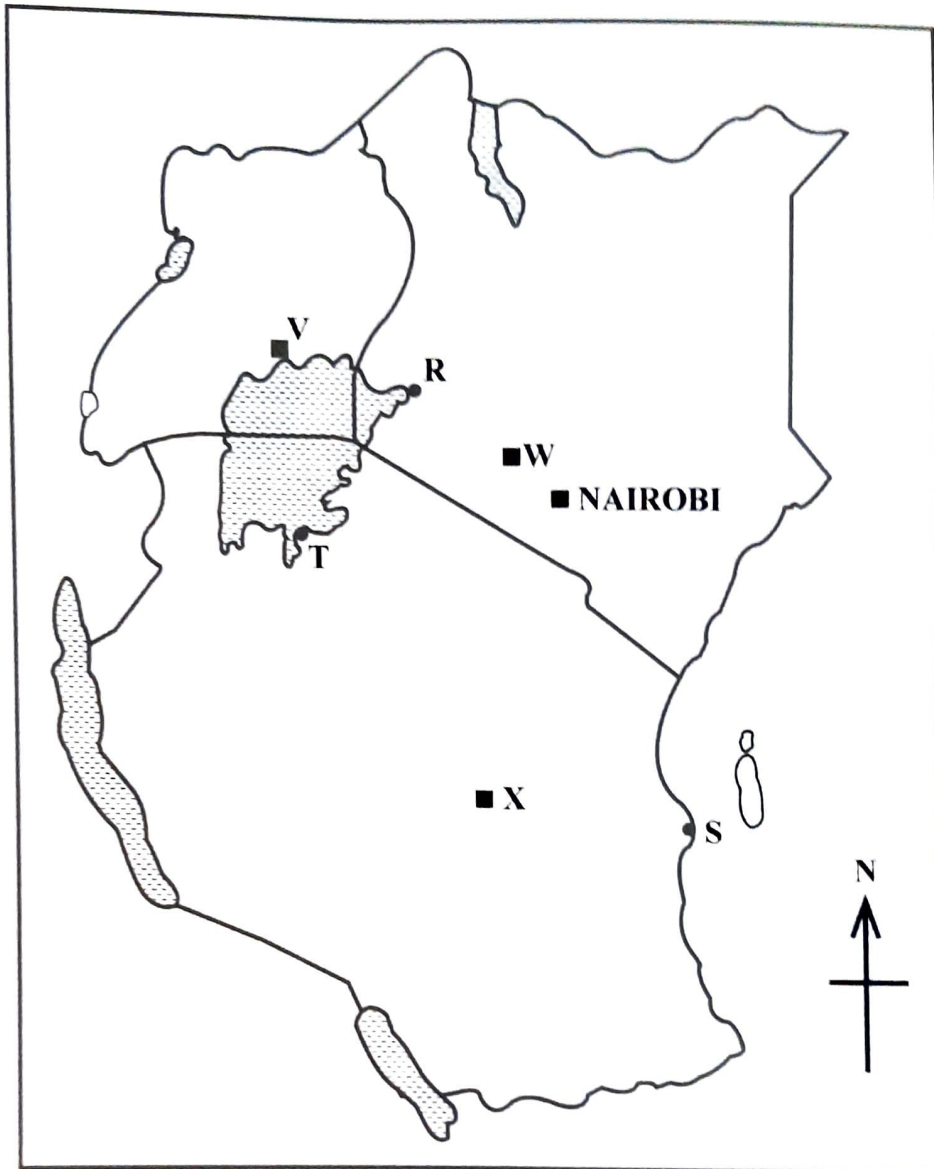
Source: Economic Survey of Kenya, 2014

- (a) (i) Using a radius of 5 cm, draw a pie chart to represent the data in the table above. (9 marks)
- (ii) Apart from pie chart, name **two** statistical methods that can be used to represent the data in the table. (2 marks)
- (b) State **three** disadvantages of using pie charts to represent statistical data. (3 marks)
- (c) Explain how each of the following social factors influence Agriculture:
- (i) Land tenure system; (2 marks)
 - (ii) Traditions; (2 marks)
 - (iii) Religious beliefs. (2 marks)
- (d) Give **five** problems facing plantation farming in Kenya. (5 marks)

7. (a) Differentiate between forest and forestry (2 marks)
- (b) Explain **four** factors influencing distribution of natural forests in Kenya (8 marks)
- (c) (i) Name **three** types of hardwood trees found in Kenya. (3 marks)
- (ii) Give **four** characteristics of Coniferous forests. (4 marks)
- (d) Explain **four** factors that have led to the decline of the area under forest cover in Kenya. (8 marks)
8. (a) (i) Define the term wildlife. (2 marks)
- (ii) Name **three** animals that are members of the Big Five in Kenya. (3 marks)
- (b) Explain **three** ways in which human activities interfere with wildlife. (6 marks)
- (c) Explain **three** effects of adverse climatic conditions on wildlife in Kenya. (6 marks)
- (d) Explain **four** ways in which wild animals are of significance to the Kenyan economy. (8 marks)
9. (a) (i) Name **three** main imports to Kenya. (3 marks)
- (ii) Give **four** measures which Kenya may take to reduce unfavourable balance of trade. (4 marks)
- (b) Explain **three** factors that influence internal trade in Kenya. (6 marks)
- (c) (i) Identify the **two** countries in East Africa that are member states of the Common Market for Eastern and Southern Africa (COMESA). (2 marks)
- (ii) State **four** objectives of Economic Community of West African States (ECOWAS). (4 marks)
- (d) Explain **three** ways in which member states have benefited from the formation of regional trading blocs in Africa. (6 marks)



10. Use the map of East Africa below to answer the question a (i) and a (ii)



- (a) Name the:
- (i) ports marked **R**, **S** and **T**; (3 marks)
- (ii) towns marked **V**, **W** and **X**. (3 marks)
- (b) State **five** functions of Thika town. (5 marks)
- (c) Explain **three** ways in which the port of Mombasa is similar to Rotterdam port. (6 marks)
- (d) Explain **four** positive effects of urbanisation of a country. (8 marks)





Lined writing area with horizontal dotted lines.





154

A104

Download Notes & More Free Revision Materials at <https://teacher.co.ke/notes>





Lined writing area with horizontal dotted lines.

Download Notes & More Free Revision Materials at <https://teacher.co.ke/notes>

154


A104



Handwriting practice lines consisting of multiple horizontal dotted lines across the page.



[Faint, illegible text visible through the paper]



THIS IS THE LAST PRINTED PAGE.

