

TARGETER WINGS
MONITORING LEARNER'S PROGRESS
GRADE 1 - 2021



MATHEMATICAL ACTIVITIES

Name

Gender:

Boy

Girl

School name

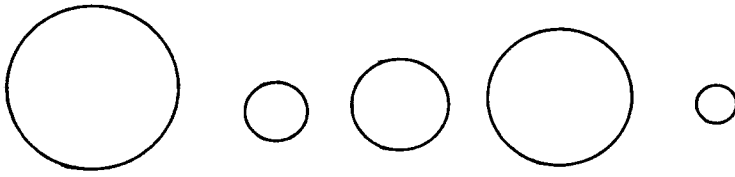
The teacher to fill the grid below after marking the learner's work.

Strand	Numbers	Measurement	Geometry
Question numbers	1 - 11	12 - 15	18
Number of marks	36	10	4
Number of marks scored			

NUMBERS.

(32mks)
(5marks)

1. Arrange from the largest to smallest.



2. Write these numbers in symbols

(5mks)

Fifty _____

Seventeen _____

Forty six _____

Thirty nine _____


Twenty three _____

3. Match the numbers with the objects


(5mks)



10




5



4



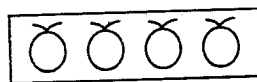
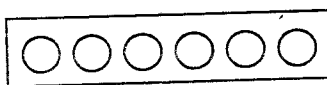


8



3

4. Circle the ones that are the same in numbers.



5. A class has 20 learners. 10 are boys. How many girls are there? _____

6. What is 16 take away 8?

7. 30	40	60
-20	-20	-30
_____	_____	_____
_____	_____	_____

8. A farmer had 20 cows. He bought 10 more cows. How many cows did he have altogether? _____

9. 52	32	18	40
+7	+14	+11	+30
_____	_____	_____	_____
_____	_____	_____	_____

10. Write the missing numbers. (5marks)

10, 15, _____, 25	35, 33, 31, _____
30, 32, _____, 36	40, 45, 50, _____
37, 39, 41, _____	

11. Count and write backward by 5 from 35 to 15 (5marks)

_____, _____, _____, _____, _____

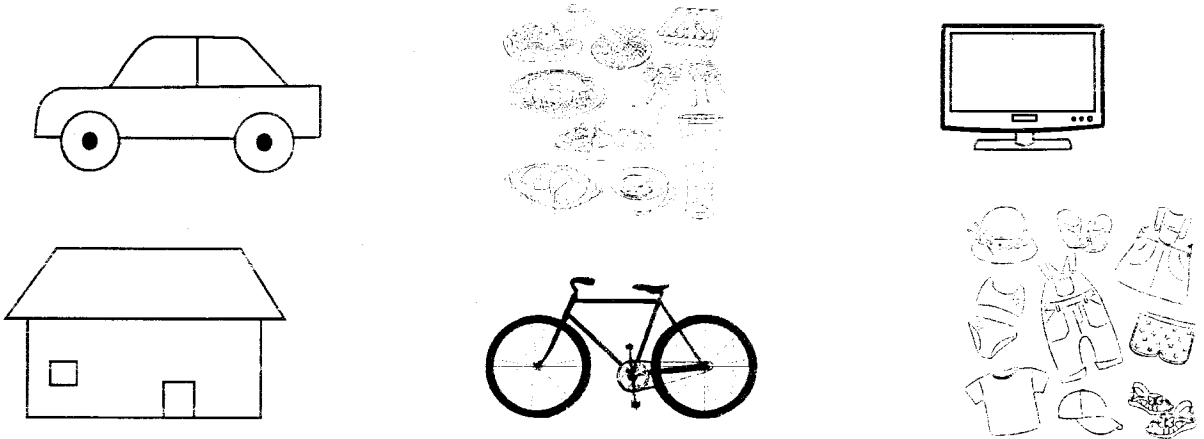
MEASUREMENTS (10mks)

12. There are _____ days in a week. (6, 5, 7)

13. Fill in the missing days (4marks)

Sunday, _____, Tuesday _____, _____,
Friday, _____

14. Circle all the needs (3marks)



15. Price list

(5marks)




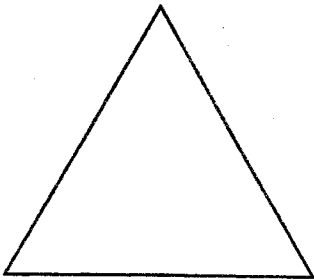
Item	Price
Sugar	100
Pencil	10
Bread	55

How much is the
bread? _____
sugar? _____
pencil? _____

GEOMETRY

(5mks)

16. Name these shapes and lines



TOTAL = 50 Marks