



PREMIUM ASSESSMENT

2021

20210307

EARLY YEARS' ASSESSMENT
MONITORING LEARNER'S PROGRESS
GRADE 2 - YEAR 2021

INTEGRATED LEARNING AREAS

Name: _____

TICK YOUR
GENDER

BOY

GIRL



Name of your school: _____

Your number _____

The teacher to fill in the grid below after marking the learner's work

| Number of Marks scored | | Exceeds Expectations | Meets Expectations | Approaching Expectations | Below Expectations |
|------------------------|--|----------------------|--------------------|--------------------------|--------------------|
| | | | | | |

1. Name three things that can be observed in the sky at night

(3 mks)

(a) _____

(b) _____

(c) _____

2. Name four sources of water

3mks


(a) _____

(b) _____

(c) _____

3. Name the weather symbols

(4mks)



4. Underline domestic animals

snake, dog, cat, lion, zebra,
donkey, hyena, sheep, goat,
buffalo, cow. (6mks)

5. Name two uses of water at home (2mks)

(a) _____

(b) _____

6. List two fruits we buy from the green grocer shop. (2mks)

(a) _____

(b) _____

HYGIENE AND NUTRITION

1. Name three personal items

(a) _____

(b) _____




(c) _____ (3mks)

2. Write two healthy habits (2mks)

(a) _____

(b) _____

3. Draw three types of food (3mks)



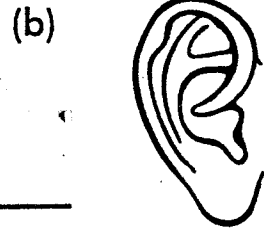
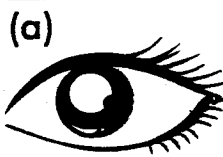
4. Milk is _____ in colour (1mk)

5. We use _____ and _____ to brush our teeth. (2mks)

6. After visiting toilet we should wash our _____ with water and soap (1mk)

7. Dirty toes keeps _____ (1mk)

8. Name the body parts



9. Match the utensils with the words



cup



glass



plate



spoon

CREATIVE ARTS AND PSYCHOMOTOR (3mks)

1. Name the lines


(a)  _____

(b) _____


(c)  _____

2. **Draw the musical instruments**


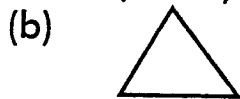
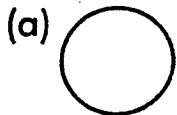
(a) Drum



(b) Shaker



3. **Name the shapes** (4mks)



4. **Name two colours found on the flag** (2mks)


(a) _____

(b) _____

5. We play a guitar by _____
(plucking, blowing) (1mk)

6. Happy songs are sang during _____ moments
(wedding, burial) (1mk)

7. **Draw a flag and colour** 5mks



8. **Name two parts of the body used to sing** (2mks)

(a) _____

(b) _____

C.R.E

1. The story of creation is found in the book of? _____

2. Who created everything _____

3. We read word of God from the? _____
(story book, bible)

4. **Name three God's creation**

(a) _____

(b) _____

(c) _____

5. The first man to be created was _____ and the first woman was _____

6. Satan is our _____
(enemy, friend)

7. The father of Jesus was _____
and the mother was _____

8. David killed a big man called?

9. Name three things we share at home?

(a) _____

(b) _____

(c) _____


10. Name three members of nuclear family

(a) _____

(b) _____

(c) _____


11. This is a _____




I.R.E

1. Draw four Allah creation


Star




moon



sun



tree



2. I am a _____
(Muslim, Christian)

3. Alkaabah is always called

(Baitul Atiq, Baltul ma)

4. The man created was _____
(Hawa, Adam, Idris)

5. Muslim go to _____ to
worship.

6. Muslims read the _____
when in Mosque
(Bible, Quran)

7. We speak to Allah during

(prayers, sleeping, the nig