




MONITORING LEARNER'S PROGRESS GRADE TWO - 2021

MATHEMATICS ACTIVITIES

NAME: _____

Add

1.   +  =

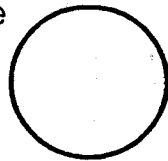
2. $3 \times 5 =$

3. $3 + 9$


4. 17

$+ 6$


5. Name the shape



6. Which one is longer _____



A



B

Write in words

7. 95 _____

8. 64 _____

9. How many legs do 2 chairs have _____

10. $12 \div 4 =$

11. $7 \times 10 =$

12. Which month of the year has 28 or 29 days _____


13. $26 + 261 =$

14. $5 + 5 + 5 =$

15. $24 \div 6 =$

16. $12 - 7 =$

17. What is the time?



18. 18

-18

19. Five girls shared 20 mangos equally. How many mangoes did each girl's get? _____

20. The number before 970 is _____

21. $44 - \square = 22$

23. Sh. Cts

6 35

+ 4 30

24. Ninety take away 19 = _____

25. $8 + 3 + 5 =$

ASSESSMENT RUBRIC

Exceeds Expectations	Meets Expectation	Approaching Expectation	Below Expectation
22 - 25	16 - 21	8 - 15	0 - 7