



COMPETENCY BASED CURRICULUM GRADE THREE 2021



MATHEMATICS ACTIVITIES

Learners name:.....

Learner's Number:

Gender: Boy

Girl

County Name: County Code:

Sub-County Name:..... Sub-County Code:

School Name:..... School Code:

TEACHER'S SCORING GUIDE

ASSESSMENT RUBRICS

EXCEEDS EXPECTATION	MEETS EXPECTATION	APPROACHING EXPECTATION	BELOW EXPECTATION
4	3	2	1

The grid below is to be filled by the teacher after marking the learner's work

	Numbers	Measurements	Geometry
No. of Questions			
No. of Questions Correct			
Performance Level			

Match the months of the year

<u>Month</u>	<u>Position</u>
1. March	third
2. June	twelfth
3. December	sixth

Fill in the missing number

4. 91, 87, 85, 83, _____
5. 470, 472, 474, 476, _____

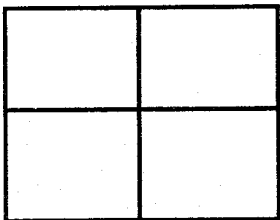
How many Tens and Ones

6. 84 = _____ tens and _____ ones

Write the number

7. thirty six _____

8. Shade a quarter



Add:

$$\begin{array}{r} 9. \quad 347 \\ + 526 \\ \hline \\ \hline \end{array}$$

Subtract

10. $98 - 7 = \square$

11. Mary had 18 pencils. She gave seven to her brother. How many was she left with?

Multiply:

12. $8 \times 5 = \square$ 13. $\begin{array}{r} 10 \\ \times 9 \\ \hline \\ \hline \end{array}$

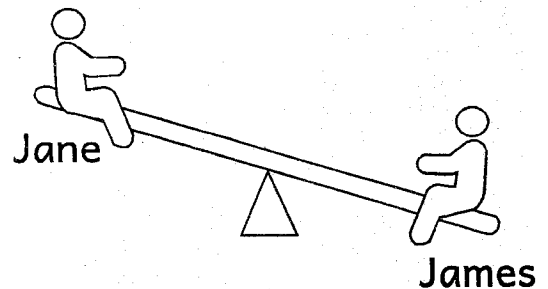
Divide

14. $20 \div 4 = \square$

15. $\square \div 3 = 4$

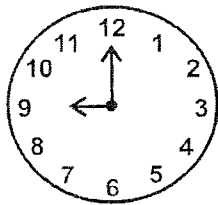
Measurement

16. Who is heavier?



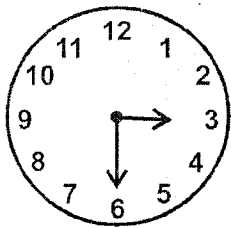
What is the time?

17.



_____ o'clock.

18.




Half past _____ o'clock.

19. John has a sh. 500 note. How many sh. 100 notes will he get? _____

20. Juma had sh. 100. He bought a book at sh. 40. What was his balance? _____


Geometry

21. Draw a curved line.




Draw the following shapes.

22. Triangle



23. Circle



24. Complete the pattern



25. A triangle is made of _____ lines.