



20210208

PREMIUM ASSESSMENT

EARLY YEARS' ASSESSMENT MONITORING LEARNER'S PROGRESS

2021

YEAR 2021: GRADE 4


HOME SCIENCE / P. E / ART CRAFT & MUSIC

Name: _____

Learner's Number

Gender: Boy

Girl



County Name: _____

County Code

Sub-County Name _____

Sub-County Code

School Name: _____

School code

OFFICIAL USE ONLY

ASSESSMENT RUBRICS

Exceeds Expectations	Meets Expectations	Approaching Expectations	Below Expectations

GRADE 4 / HOME SCIENCE / P. E / ART CRAFT & MUSIC

HOME SCIENCE

1. Name four types of food that we eat (4mks)

(a) _____

(b) _____

(c) _____

(b) _____

2. For a child to be healthy he/she needs (3mks)

(a) _____

(b) _____

(c) _____

3. Name four things used to clean shoes (3mks)

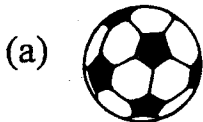
(a) _____

(b) _____


(c) _____

4. At what time do we take lunch _____ (1mk)

5. Name the play items







6. Name three materials to make an improvised ball

(a) _____

(b) _____

(c) _____

7. Write down three materials used to clean a house

(a) _____

(b) _____

(c) _____

PHYSICAL AND HEALTH EDUCATION

1. Name four items found in a first Aid box (4mks)

(a) _____

(b) _____

(c) _____

(d) _____

2. Name three games that can be played by both boys and girls (3mks)

(a) _____

(b) _____

(c) _____

3. List down three lifestyle disease a person may avoid by jumping rope?

(a) _____

(b) _____

(c) _____

4. Name three floating drives from the local environment

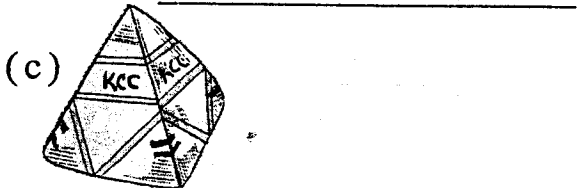
(a) _____

(b) _____

(c) _____

(d) _____

5. Name the food eaten below to make our body healthy (4mks)



6. List three activities in the community for leisure

(a) _____

(d) _____

(c) _____

ART & CRAFT

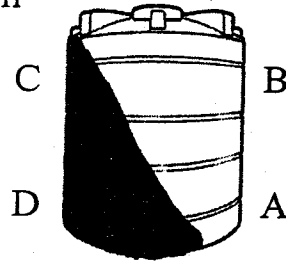
1. Name two materials used when painting (2mks)

(a) _____

(b) _____

2. Draw from observation is called _____ (1mks)

3. Identify where the light is coming from (1mks)



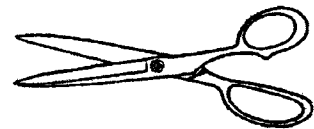

4. Draw and name the shape you know


(a) _____

(b) _____

(c) _____

5. Name the items





6. Name four colours found on rainbow?
(4mks)

(a) _____

(b) _____

(c) _____

(d) _____

7. Draw a tree and colour it green (3mks)

8. _____ soil is used from modelling.

9. Name two items can be modelled

(a) _____

(b) _____

MUSIC

1. Match the song with its occasion

(a) Patriotic song to sooth children

(b) sacred song to tell core for our country

(c) Lullaby to praise God

2. List down three musical instruments
(3mks)

(a) _____

(b) _____

(c) _____

3. Write second stanza of the national anthem in Kiswahili. (5mks)

4. Name the parts of the body that moves when singing

(a) _____

(b) _____

(c) _____

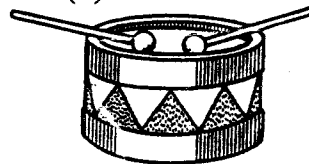
5. Wedding songs makes us _____

6. Name two materials used to make a drum (2mks)


(a) _____ (b) _____

7. What are these

(a)



(b)



(c)

