

FRONTRUNNER EXAMINATION

MONITORING LEARNER'S PROGRESS GRADE 4 - 2021

MATHEMATICS ACTIVITIES

4

Name

Learner's Number

Gender: Boy

Girl

County Name:..... County Code

Sub-county Name:..... Sub county code

School Name:..... School Code

TEACHER'S SCORING GUIDE

Assessment Rubrics

Exceeds Expectations	Meets Expectations	Approaching Expectations	Below Expectations

The grid below is to be filled by the teacher after marking the learner's work.

	Numbers	Measurements	Geometry
Number of questions			
No. of correct questions			
Performance level			

Arrange from the smallest to the largest:

1. 312, 123, 231, 213, 321, _____

2. _____ is the tenth month of _____ the year

3. $\frac{3}{8} + \frac{1}{8} =$ _____

4. 864 = _____ hundred _____ tens _____ ones

5. 5 weeks have _____ days

Add,

6.
$$\begin{array}{r} 746 \\ + 269 \\ \hline \\ \hline \end{array}$$

7.
$$\begin{array}{r} 540 \\ 157 \\ + 102 \\ \hline \\ \hline \end{array}$$

8.
$$\begin{array}{r} 590 \\ + 388 \\ \hline \\ \hline \end{array}$$

9. $389 + 57 + 67 =$ _____

Subtract:

10.
$$\begin{array}{r} 803 \\ - 9 \\ \hline \\ \hline \end{array}$$

11.
$$\begin{array}{r} 987 \\ - 19 \\ \hline \\ \hline \end{array}$$

12. $999 - 66 =$ _____

13. $868 - 31 =$ _____

27. James had 299 goats. He bought one more. How many goats did he have altogether? _____
28. What number comes before 298 _____
29. A school has 300 boys and 250 girls. How many pupils are there in that school? _____
30. Write three thousand and four in figures? _____

Work out:

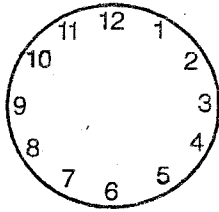
31.

sh	cts
45	37
+ 11	10

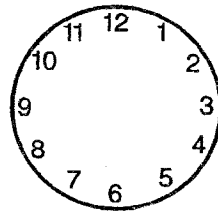
32.

sh	cts
98	77
- 19	12

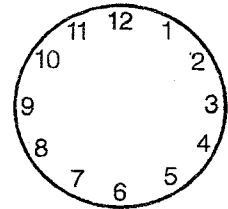
33. Draw the hands to show;



quarter to twelve

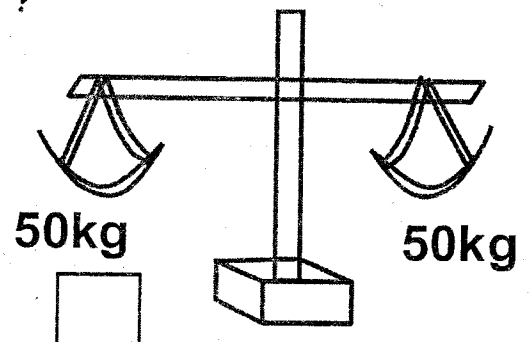
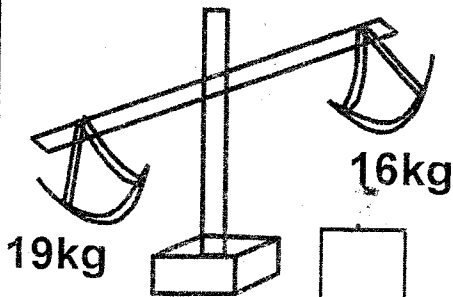


twelve noon



quarter past five

34. Tick the one which is heavier?



ART AND CRAFT Act. (15 marks)


1. A picture has _____ and _____ areas
2. The best soil for modelling is _____
3. Name five items used when drawing


4. List five items that can be u curved from wood

5. The act of making three dimensions forms is called _____
6. Scissors are used to _____

MUSIC Act. (15 marks)

1. Name the instrument below





2. The part of the body used to blow the flutes is _____
3. Which method are used in playing string instrument _____
(i) _____ (ii) _____
4. Which methods are used in playing string instruments
(i) _____ (ii) _____
5. The Kenya National Anthem has _____ stanzas
6. Identify three parts of a percussion instrument _____
7. Name two types of songs ? _____

SOCIAL STUDIES

1. List features found in the environment (2 marks)
(i) _____ (ii) _____
2. Name two things you can see in the sky at night. (2 marks)
(i) _____ (ii) _____
4. A _____ is a place where we can fetch clean water. (1 mark)
5. Soil that is used to make things must be? _____ (1 mark)
6. Loud sounds hurt our _____ (1 mark)
7. _____ protect us from rain and cold. (1 mark)
8. A _____ is a place to live. (1 mark)
9. Is it safe to pick broken glass with bare hands? (yes, no) (1 mark)
10. Name three wild animals. (3 marks)
(i) _____ (ii) _____ (iii) _____
11. Some animals are friendly while others are _____ (1 mark)
12. When we keep our environment clean we keep away _____
13. Shadows are _____ in colour (white, black, bright) (1 mark)
14. We should switch _____ lights when we are not using them. (off, on) (1 mark)
15. The security officer ensures that we are _____ in school. (1 mark)
16. Our _____ is not part of a nuclear family. (aunt, mother) (1 mark)