

K.C.P.E EIGHT TRIAL STANDARD EIGHT 2021

**SOCIAL STUDIES
AND
RELIGIOUS
EDUCATION**

Time: 2 hours 15 minutes

READ THESE INSTRUCTIONS CAREFULLY

1. You have been given this question booklet and a separate answer sheet. The question booklet contains 90 questions.
2. Do any necessary rough work in this booklet.
3. When you have chosen your answer, mark it on the **ANSWER SHEET**, not in the question booklet.

HOW TO USE THE ANSWER SHEET

4. Use an ordinary pencil.
5. Make sure that you have written on the answer sheet:

YOUR INDEX NUMBER

YOUR NAME

NAME OF YOUR SCHOOL

6. By drawing a **dark line** inside the correct numbered boxes mark your full Index Number (i.e. School Code Number and the three-figure Candidate's Number) in the grid near the top of the answer sheet.
7. Do not make any marks outside the boxes.
8. Keep your answer sheet as clean as possible and do not fold it.
9. For each of the questions 1 – 90 four answers are given. The answers are lettered A, B, C and D. In each case only **ONE** of the four answers is correct. Choose the correct answer.
10. On the answer sheet the correct answer is to be shown by drawing a **dark line** inside the box in which the letter you have chosen is written.

Example

In the question booklet:

33. Which one of the following industries is a service industry?

- A. Cement making
- B. Bicycle repair
- C. Motor vehicle assembling
- D. Flour milling

The correct answer is **B** (Bicycle repair)

On the answer sheet:

3 (A) (B) (C) (D) **13** (A) (B) (C) (D) **23** (A) (B) (C) (D) **33** (A) (B) (C) (D) **43** (A) (B) (C) (D)

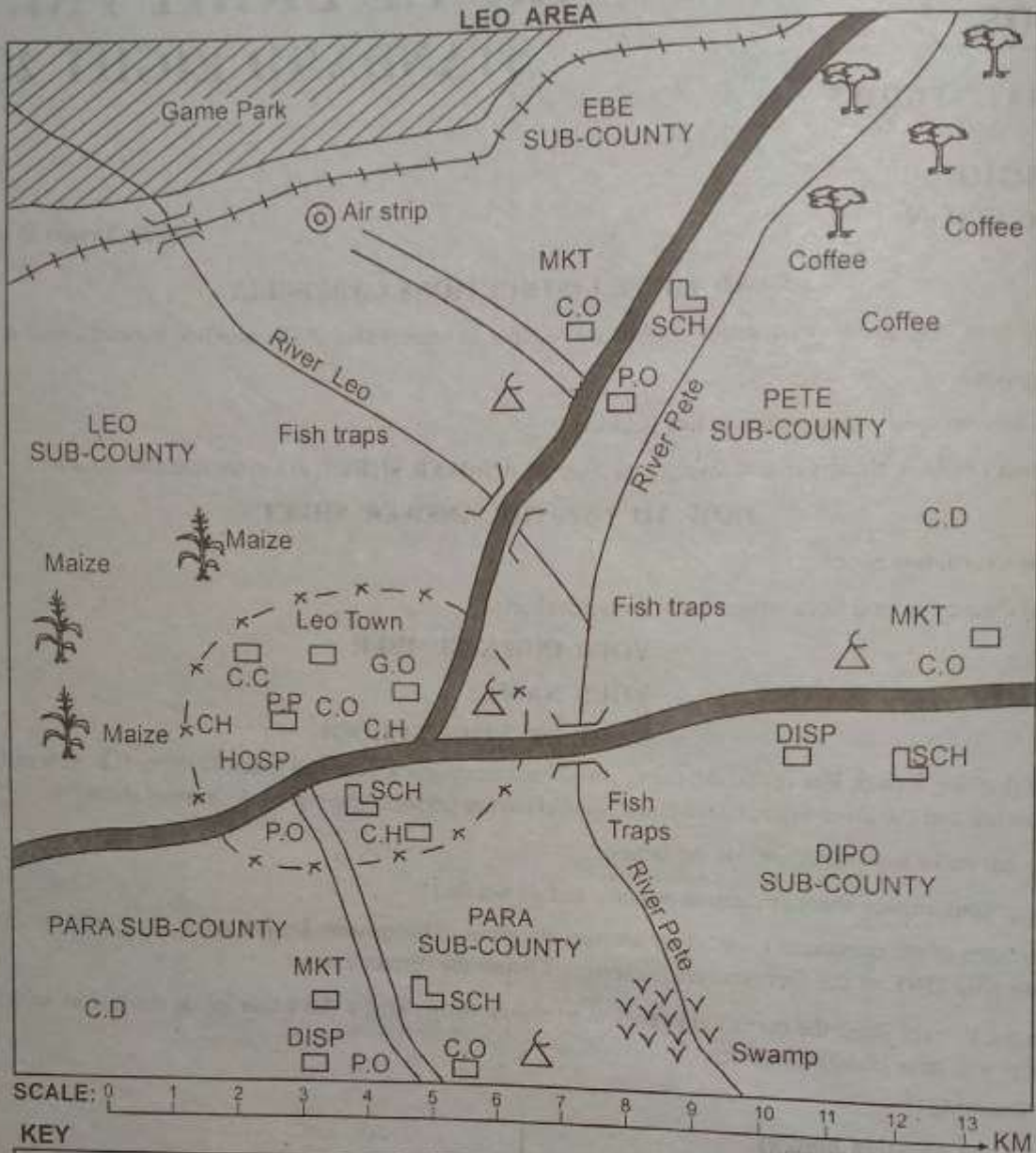
In the set of boxes numbered **33**, the box with the letter **B** printed in it is marked.

11. Your **dark line** **MUST** be within the box.
12. For each question **ONLY ONE** box is to be marked in each set of four boxes.

This question paper consists of 12 printed pages.

Candidates should check the question paper to ensure that all the pages are printed as indicated and no questions are missing.

PART I: SOCIAL STUDIES



KEY

| | | | |
|------|---------------------|-----|---------------------|
| G.O | Governor's office | | Mosque |
| P.P | Police post | | Tarmac road |
| C.C | County Commissioner | | Murram road |
| SCH | School | | Town boundary |
| HOSP | Hospital | | Forest |
| P.O | Post office | | Bridge |
| DISP | Dispensary | C.O | Chief's office |
| C.D | Cattle dip | | Railway line |
| MKT | Market | | Permanent buildings |

Study the map of Leo Area and answer questions 1 - 7.

1. The general direction of flow of River Pete is
 - A. North East to South
 - B. North West to South East
 - C. North to South
 - D. North East to South East
2. The approximate length of the tarmac road from the North East of Ebe sub-county to the junction in Leo town is
 - A. 16km
 - B. 11km
 - C. 13km
 - D. 18km
3. Most of the people in Leo Town are
 - A. Muslims
 - B. Christians
 - C. Pagans
 - D. Hindus
4. Which one of the following sub-counties in Leo area experiences cool and wet climate?
 - A. Pete sub-county
 - B. Para sub-county
 - C. Leo sub-county
 - D. Ebe sub-county
5. Tourists visiting the game park are **LIKELY** to use
 - A. road transport
 - B. railway transport
 - C. water transport
 - D. air transport
6. The head of administration in Leo area is **LIKELY** to be
 - A. The county governor
 - B. The county commissioner
 - C. The chief Kadhi
 - D. A senior chief
7. Which one of the following economic activities is **NOT** carried out in Leo sub-county?
 - A. Crop farming
 - B. Fishing
 - C. Trading
 - D. Livestock keeping
8. In the past, the Akamba and Agikuyu **MAINLY** interacted through
 - A. trading activities
 - B. intermarriage
 - C. cattle rustling
 - D. games and sports

9. The statement below describe a type of vegetation in Africa.
 - (i) The vegetation contains grasses and shrubs.
 - (ii) Trees are of medium height.
 - (iii) Trees have deep roots and thick barks.
 - (iv) Trees are umbrella shaped.

The vegetation described above is **LIKELY** to be

- A. Temperate grassland.
 - B. Mediterranean vegetation
 - C. Tropical grassland vegetation
 - D. Semi-desert vegetation
10. Three of the following were reasons for the decline of the Kingdom of Old Ghana, Which one was **NOT**?
 - A. Succession disputes.
 - B. Overdependence on one source of income
 - C. The kingdom was located in a strategic position.
 - D. Interaction with the Almoravids.
 11. Which one of the following is **NOT TRUE** about succession and inheritance of family wealth?
 - A. Persons with disability have a right to inherit property.
 - B. A surviving spouse has a bigger proportion of the property than the deceased's children.
 - C. Where a deceased person had made a will before death, the process of succession is straight forward.
 - D. Married women and children of the deceased should not share the estate with extended family.
 12. Which one of the following is **NOT** a large-scale fishing method?
 - A. Hook and line method.
 - B. Net drifting method.
 - C. Purse-seining method.
 - D. Trawling.

13. Three of the following were roles of traditional forms of government in the past. Which one was **NOT**?
- A. Providing literacy skills to young members of the community.
 - B. Ensuring the security of the community against their enemies.
 - C. Punishing members of the community who broke the law.
 - D. Settling dispute among members of the community.

14. The following are forms of child abuse **EXCEPT**
- A. forcing a child to go to school.
 - B. use of harsh language against the child.
 - C. bullying by other children.
 - D. early child marriage.

15. Below are uses of a mineral mined in Kenya.
- (i) *Making cans and sufurias.*
 - (ii) *Production of sulphuric acid.*
 - (iii) *Manufacture of cement.*

The mineral with the uses listed above is

- A. soda ash B. limestone
- C. copper D. flourspar

16. Which one of the following weather instruments is **CORRECTLY** matched with its weather element?
- A. Anemometer - Strength of wind
 - B. Windsock - Direction of wind.
 - C. Humidity - Air pressure
 - D. Thermometer - Amount of rainfall
17. The **MAIN** role of the official opposition party in Kenya is to
- A. ensure that the ruling party does not abuse its power.
 - B. apply pressure on the ruling party to ensure that it fulfils its promises to the people.
 - C. promote national unity and democracy through regular and fair election in the country.
 - D. offer people freedom of choice and alternative policies.

18. Who among the following is **NOT** part of the school administration?
- A. The headteacher
 - B. The school committee
 - C. The deputy headteacher
 - D. The Teachers Service Commission

19. The British used the policy of indirect rule in Northern Nigeria **MAINLY** because
- A. The protectorate was large and expensive to rule directly.
 - B. The British lacked enough personnel to run the territory.
 - C. African traditional leaders were ready to work with the British.
 - D. There were poor transport and communication networks.

20. The minimum age for one to vie for presidency in Kenya is
- A. 35 years B. 18 years
 - C. 21 years D. 50 years

21. Seyyid Said and William Mackinnon have one thing in **COMMON**. It is that they
- A. colonised Eastern Africa.
 - B. abolished the slave trade in Eastern Africa.
 - C. Traded in Eastern Africa.
 - D. were missionaries in Eastern Africa.

22. Which one of the following is **TRUE** about age set? It is made up of
- A. people who share a common ancestor.
 - B. two or more age groups.
 - C. people who were born at the same time.
 - D. people who were initiated almost at the same time.

23. The **MAIN** problem facing dairy farming in Kenya is
- A. inadequate milk factories.
 - B. high cost of production.
 - C. low milk prices
 - D. drought.

24. Which one of the following game parks is **CORRECTLY** matched with the country where it is found?

- A. Akagera - Somalia
- B. Lalibela - Tanzania
- C. Tarangire - Rwanda
- D. Queen Elizabeth - Uganda

25. Most of the conflicts between pupils and teachers are caused by

- A. pupils failing to follow school rules.
- B. unpopular school policies.
- C. teachers failing to involve pupils in decision making.
- D. poor performance in examinations.

26. The black colour of the national flag of Kenya represents

- A. our common struggle for independence.
- B. peace and unity that holds Kenyans together.
- C. the Africans living in Kenya.
- D. our fertile land.

27. The following are events that took place in Kenya before 1963

- (i) Declaration of the state of emergency by Governor Baring.
- (ii) Formation of the East African Association (EAA)
- (iii) Formation of Kenya African Union (KAU)
- (iv) Formation of the Legislative Council (LEGCO)

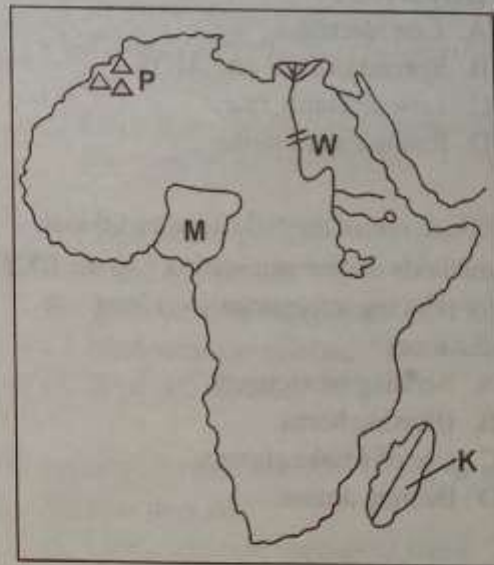
Which of the following shows the **CORRECT** order.

- A. (ii), (iv), (i), (iii)
- B. (iii), (ii), (i), (iv)
- C. (iv), (iii), (ii), (i)
- D. (iv), (ii), (iii), (i)

28. Which one of the following groups of people comprises of people from Angola?

- A. Shona and Ndebele
- B. Mbundu and Ovimbundu
- C. Ovambo and Herero

Use the map of Africa provided below to answer questions 29 to 32



29. The country marked **K** was colonised by the

- A. Germans
- B. French
- C. British
- D. Portuguese

30. The mountains marked **P** are known as

- A. Atlas mountains
- B. Tibesti mountains
- C. Ahaggar mountains
- D. The Drakensberg

31. The mineral obtained from country **M** is **LIKELY** to be

- A. copper
- B. crude oil
- C. gold
- D. soda ash

32. The multi-purpose river project marked **W** was **MAINLY** established in order to

- A. provide water for electricity production.
- B. control floods in the lower Nile.
- C. reduce the importation of coal from South Africa.
- D. provide water for irrigation.

33. Three of the following are factors that lead to slow population growth. Which one **DOES NOT**?

- A. Late marriage.
- B. Spread of HIV and AIDS.
- C. Low mortality rate.
- D. Rising cost of living.

34. Which one of the following traditional methods of communication was the **BEST** for relaying information over long distances?

- A. Sending messengers
- B. Blowing horns
- C. Use of smoke signals
- D. Beating drums.

35. The African socialism philosophy was introduced in Kenya **MAINLY** in order to

- A. promote economic and political development.
- B. encourage togetherness among all citizens.
- C. promote peace, love and unity in the country.
- D. liberate Kenya from colonialism.

36. Below are descriptions of a prominent leader in Kenya.

- (i) *He used the Harambee philosophy to initiate development projects.*
- (ii) *He organised the first multi-party elections.*
- (iii) *He served as a Vice-president.*
- (iv) *He died in 2020.*

The prominent leader described above is **LIKELY** to be

- A. Jomo Kenyatta B. Mwai Kibaki
- C. Oginga Odinga D. Daniel arap Moi

37. The **BEST** way of promoting tourism in Kenya is

- A. diversifying tourist attractions.
- B. advertising Kenya's tourism abroad.
- C. improving security in the country.
- D. reducing the cost of tourist trade.

38. Which one of the following is **NOT TRUE** about horticultural farming in the Netherlands?

- A. Most of the produce is exported.
- B. Vegetables, fruits and flowers are cultivated.
- C. Farming mainly takes place on reclaimed land.
- D. Production is highly mechanised.

39. The **MAIN** reason for the scramble for Africa by Europeans was to

- A. search for markets for their industrial goods.
- B. settle their surplus population.
- C. acquire raw materials from Africa.
- D. end slavery and slave trade in Africa.

40. The statements below describe a method of poultry farming.

- (i) *Traditional type of chickens are kept.*
- (ii) *Farmers keep a few chickens.*
- (iii) *Birds are allowed to move freely in search of food and water.*

The method of poultry farming described above is **LIKELY** to be

- A. Battery cage method
- B. Deep-litter method
- C. Fold method
- D. Backyard rearing method

41. Below are conditions that favour the growing of a certain crop.

- (i) *High temperatures of 21°C to 27°C*
- (ii) *High annual rainfall of between 1400mm and 2000mm.*
- (iii) *A warm dry season before harvesting.*
- (iv) *Gently sloping land*
- (v) *Deep well-drained fertile soils.*

The conditions listed above favour the growth of

- A. wheat B. bananas
- C. maize D. sugarcane

42. Three of the following are ways of assisting learners with special needs. Which one is **NOT**?

- A. Creating a different classroom where they can learn alone.
- B. Providing them with equal opportunities in school.
- C. Creating positive attitudes in them.
- D. Creating friendly environments for them.

43. Which one of the following responsibilities of a Kenyan citizen will ensure that social facilities are built?

- A. Taking care of the environment.
- B. Being fair and honest.
- C. Taking part in development activities.
- D. Being loyal and patriotic.

44. The school routine is important **MAINLY** because it

- A. ensures that all teachers attend lesson in time.
- B. reduces the duties of the head teacher.
- C. ensures that all school activities follow a set pattern and order.
- D. helps to strengthen discipline among pupils and teachers.

45. Which one of the following efforts in solving urban problems in Kenya will reduce congestion in town?

- A. Provision of decent housing.
- B. Construction of bypasses and foot bridges.
- C. Privatisation of garbage collection.
- D. Decentralisation of industries.

46. Below are characteristics of a type of climate in Africa.

- (i) Rainfall is received all year round.
- (ii) Temperatures range from 10°C to 19°C
- (iii) Annual rainfall varies between 400mm and 780mm.
- (v) Winds from the Indian Ocean influence the rainfall in this region.

The type of climate described above is

- A. Equatorial climate
- B. Warm continental climate
- C. Mediterranean climate
- D. Savannah climate.

47. Natural forests are **MAINLY** protected because they are

- A. habitats to rare species of trees.
- B. home for wildlife.
- C. water catchment area.
- D. sources of timber.

48. Which one of the following is **NOT TRUE** about the population structure of Kenya?

- A. Life expectancy is high.
- B. The population is youthful.
- C. There are more females than males.
- D. Infant mortality is high.

49. The Kikuyu Central Association (KCA) was formed **MAINLY** in order to advocate for

- A. reduction of hut and poll tax.
- B. the removal of the Kipande system.
- C. education for Africans in their native languages.
- D. the return of land to Africans.

50. Which one of the following countries is **CORRECTLY** matched with its capital city?

- A. Swaziland - Maseru
- B. Guinea Bissau - Conakry
- C. Comoros - Gaborone
- D. Niger - Niamey

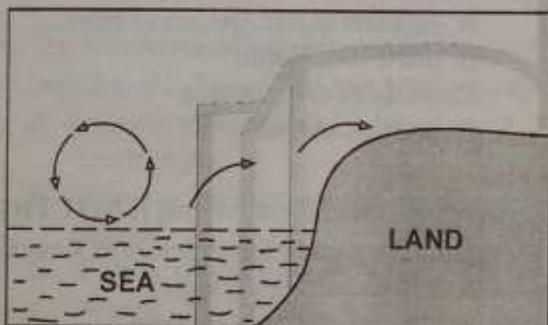
51. Which one of the following groups of final products are made in manufacturing industries **ONLY**?

- A. Paper, cloth, paraffin
- B. Shoes, food additives, cigarettes
- C. Ghee, cheese, butter
- D. Soap, soft drinks, plastics

52. Which one of the following mountains was formed through faulting and uplifting?

- A. Ras Dashan
- B. Mt. Cameroon
- C. Ruwenzori
- D. Homboli mountains

Use the diagram below to answer question 53.



53. The diagram above shows the formation of a

- A. convectional rainfall
- B. land breeze
- C. frontal rainfall
- D. sea breeze

54. If the time in town X 34°E is 11.00a.m, what time will it be at town Z 66°W ?

- A. 5:40p.m
- B. 4:20 p.m
- C. 4:20a.m
- D. 8:52 a.m

55. Lambwe valley and Miombo woodland have low population due to

- A. infertile soils.
- B. natural calamities.
- C. pests and diseases.
- D. harsh climatic conditions.

56. Which one of the following affects national unity in Kenya **MOST**?

- A. Corruption
- B. Tribalism
- C. Nepotism
- D. Unequal distribution of resources.

57. Petroleum is transported from Mombasa to Nairobi using pipelines **MAINLY** because

- A. it reduces theft of oil products.
- B. it ensures a continuous flow of petroleum all the time.
- C. it's cheap and reliable.
- D. it reduces damage of the roads by oil tankers.

58. In Kenya, one may lose a parliamentary seat if he or she

- A. is of unsound mind.
- B. is declared bankrupt by a court of law.
- C. misses eight consecutive sittings in parliament without notifying the speaker.
- D. committed an election offence that has been proved in a court of law.


59. Who among the following is **NOT** a member of the cabinet in Kenya?

- A. The President
- B. Chief Justice
- C. Attorney General
- D. Cabinet secretaries.

60. Which one of the following is a regulatory road sign?



A.



B.



C.



D.

PART II: RELIGIOUS EDUCATION

SECTION A CHRISTIAN RELIGIOUS EDUCATION

61. Which one of the following order of creation is **CORRECTLY** matched?
- A. Day 5→ Sea creatures and birds of the air.
 - B. Day 3→ Sun, moon and stars.
 - C. Day 2→ Dry land, sea and all of kind of vegetation.
 - D. Day 4→ Wild domestic animals.
62. According to Genesis story of creation, which one of the following was **NOT** a result of disobedience of Adam and Eve in the garden of Eden?
- A. Death entered into the world.
 - B. Human beings started suffering.
 - C. Human beings spread all over the world.
 - D. There was enmity between man and the serpent.
63. Which one of the following is the **MAIN** reason why Joseph was sold by his brothers? Because
- A. Joseph was a dreamer.
 - B. they were jealous of him.
 - C. there was famine in Israel.
 - D. they needed money to buy food.
64. Which one of the following statements describes why Abraham is called the father of faith?
- A. He was kind to his nephew Lot.
 - B. He was blessed by God.
 - C. His name was changed from Abram to Abraham.
 - D. He agreed to sacrifice his only son Isaac.
65. Who among the following people were the sons of Moses?
- A. Gershon and Eliezar
 - B. Eliezar and Abinadab
 - C. Gershon and Manasseh
 - D. Manasseh and Eliezar
66. Which one of the following ten commandments given to Moses by God shows that marriage should be honoured?
- A. Do not accuse anyone falsely.
 - B. Observe the Sabbath day and keep it holy.
 - C. Do not commit murder.
 - D. Do not commit adultery.
67. During the night of Exodus the Israelites were to observe the following in preparation for the exodus. Which one was **NOT**? They were
- A. to smear blood on their doorposts.
 - B. supposed to eat boiled meat.
 - C. supposed to eat unleavened bread.
 - D. supposed to eat bitter herbs.
68. Who among the following judges of Israel led by the Holy Spirit to fight the Midianites with only three hundred men?
- A. Samson
 - B. Othniel
 - C. Gideon
 - D. Jephthah
- 69.
- (i) He was the most successful King of Israel.
 - (ii) He brought the ark of covenant to Jerusalem
 - (iii) He united all the tribes of Israel.
 - (iv) He made Jerusalem the centre of worship.
- Who among the following Kings of Israel is described above? King
- A. David
 - B. Saul
 - C. Solomon
 - D. Rehoboam
70. The following were miracles performed by prophet Elisha. Which one was **NOT**? He
- A. unpoisoned the poisonous stew.
 - B. made an axe head to float on water.
 - C. raised the son of the widow of Zarephath.
 - D. cursed the forty two boys who jeered him.
71. Who among the following prophets prophesied the killing of the baby boys in Bethlehem by King Herod during the birth of Jesus? Prophet
- A. Jeremiah
 - B. Isaiah
 - C. Micah
 - D. Joel.
72. According to Luke 1:26-38. Which one of the following is the **MAIN** reason why Angel Gabriel announced that the child would be called the son of the Most High God? Because he would be
- A. born by a virgin.
 - B. born from the lineage of David.
 - C. conceived by the power of the Holy Spirit.
 - D. visited by the three wisemen.
73. According to the Jewish traditions, how old was Jesus when he was circumcised?
- A. 8 years old
 - B. 8 days old
 - C. 8 months old
 - D. 12 years old
74. Which one of the following was John the Baptist's message to the tax collectors? **NOT** to
- A. accuse anyone falsely.
 - B. pretend to be holy than other people.
 - C. take anything from anyone forcefully.
 - D. collect more than what is legal.

75. Which one of the following was Jesus response during His temptation when the devil told him to throw Himself down from the highest point at the temple and Angels would hold him?
 A. Do not put the lord your God into test.
 B. Man cannot live on bread alone.
 C. Worship the lord your God and serve Him only.
 D. Remember the Sabbath day and keep it Holy
76. While he was on earth one of Jesus Ministry was to perform miracles. Who among the following people was his mother-in-law healed by Jesus?
 A. John
 B. James
 C. Peter
 D. Andrew
77. Which one of the following parables of Jesus teaches Christians on praying without ceasing?
 A. Pharisee and the tax collector.
 B. The widow and the unjust judge.
 C. The unmerciful servant.
 D. The good Samaritan.
78. When Jesus approached the towns of Bethphage and Bethany to the Mount of Olives, he sent two of his disciples to a village ahead to bring him a colt. Mark 11:1-11. Who among the following disciples did he send?
 A. John and James
 B. Peter and James
 C. Peter and John
 D. Andrew and John
79. When Jesus was brought before Pilate during His arrest, He was accused of the following EXCEPT
 A. claiming to be the Messiah.
 B. misleading the people.
 C. telling people not to pay taxes.
 D. claiming to be the King of Jews.
80. Jesus told his disciples to wait for the Holy Spirit in the town of
 A. Bethany
 B. Nazareth
 C. Bethlehem
 D. Jerusalem
81. Which one among the following gifts of the Holy Spirit helps one to believe in the things which you can't see?
 A. Prophecy
 B. Faith
 C. Faithfulness
 D. Speaking in tongues
82. Which one of the following is the CORRECT order of the four forms of African existence in African Traditional religion?
 A. Unborn → livingdead → living → ancestors.
 B. Living → livingdead → unborn → ancestors.
 C. Unborn → living → livingdead → ancestors.
 D. Living → livingdead → unborn → ancestors.
83. During initiation, the initiates were isolated from the rest of the community where they were MAINLY taught to be
 A. obedient
 B. courageous
 C. responsible
 D. tolerant
84. According to African traditional communities which one of the following statement about marriage is NOT correct?
 A. Marriage among the same clan members was forbidden.
 B. Marriage without a child was considered incomplete.
 C. Monogamy type of marriage was strictly observed.
 D. The main reason of marriage was procreation.
85. The following are examples of specialists in African Traditional communities. Which one was NOT?
 A. Rainmakers
 B. Prophets
 C. Medicinemen
 D. Witches
86. Ketel a class 8 boy pupil was sent to buy milk by his mother. The shopkeeper gave him more money than he was required to get back as balance. Ketel took the money and kept it to himself. Which one of the following Christian values does Ketel lack?
 A. Obedience
 B. Tolerance
 C. Honesty
 D. Patience
87. Churches continue to support education today by doing three of the following activities EXCEPT
 A. donating money
 B. providing spiritual guidance.
 C. managing some schools.
 D. setting national examinations.
88. The following pupils were asked to mention ways through which a Christian can best spend his or her leisure time. Who among them gave a CORRECT answer?
 A. Martha : Visiting a children orphanage.
 B. Ruth : Attending bible studies.
 C. Mary : Reading the Bible.
 D. Stella : Reciting memory verses.
89. Three of the following statements explains why certain children get involved in child labour. Which one does NOT?
 A. Neglect from home.
 B. Death of the parents.
 C. Excess wealth at home.
 D. Poverty in their homes.
90. Which one of the following was the MAIN work of the early missionaries in Kenya?
 A. Stopping slave trade.
 B. Writing books.
 C. Stopping child labour.

SECTION B
ISLAMIC RELIGIOUS EDUCATION

61. The following are favours of Allah(s.w) upon the prophet(p.b.u.h). All of them are mentioned in Surah Inshiraah EXCEPT one. Which one?
A. Removed burdens from him.
B. Raised his fame.
C. Lifted up his heart.
D. Gave him riches.
62. Which of the following is the MAIN subject matter in the Surah Al-Qadr? The
A. Angelic host led by Jibril(A.S).
B. revelation of the holy Qur'an.
C. prevailing of peace until fajr.
D. rewards equivalent to one thousand months.
63. All the following information is true as mentioned in surah Al-Zilzala EXCEPT
A. men will appear bright with folded faces.
B. the earth will be inspired to give out secrets.
C. the man will question "What's the matter?"
D. the earth will shake with final earthquake.
64. Muslims are not allowed to eat from all these meat EXCEPT one. Which one?
Animals
A. gored by the horns of other animals.
B. that dies after falling from a height.
C. that dies from a hunters hook.
D. partly eaten by wild animals.
65. The army which attempted to destroy the holy Kaaba in the year 570 A.D was destroyed by
A. a flood of water.
B. small stones of backed clay.
C. noise of a thunderstorm.
D. corcked fire.
66. "The curse of Allah befalls the giver, the recipient and the one who acts as a mediator between the two". This hadith teaches us on the effects of
A. virtue and sins. B. righteousness.
C. co-operaiton. D. corruption.
67. According to the Hadith, true and honest business merchants will on the Day of Qiyamah be rewarded as the
A. standard bearers of truth.
B. martyrs.
C. steadfast in Imaan.
D. fathers of Imaan.
68. The prophet(p.b.u.h) one day told a Swahaba who wanted to just leave a camel free, "Tie it first and then rely on Allah" Which lesson was he teaching us?
A. Istiqama. B. Istimraar.
C. Tawakkul. D. Thumaanina.
69. Angel Jibril (A.S) never stopped advising the prophet(p.b.u.h) about his _____ until he thought that Allah will make them heirs of his inheritance.
A. neighbours B. friends
C. relatives D. leaders
70. Any good service you render to your brother Muslim Allah(s.w) will reward you _____ Yaumul Qiyama.
A. beyong imagination.
B. a similar service.
C. another better service.
D. without Hisaab.
71. Which of the following words when uttered last before death, makes one to enter paradise?
A. Laa haula walaa Quwwata illa billah.
B. Inna lillahi wa inna ilaihi raajiun.
C. Hasbunallahu waneemal waqiil.
D. Laa ilah illallah.
72. You feel like there is something strength especially touching on your life or on the life of your people. Which of the following prayers are you advised to perform?
A. Swalatu Istikhaara.
B. Swalatul Khusuf.
C. Swalatu Istisqa-a.
D. Swalatul Khauf.
73. Which one of the following activities MUST one face away from Qibla when performing it, according to Islamic teachings? When
A. praying Swalah.
B. slaughtering an animal.
C. toileting.
D. performing Udhu.
74. Who among the following is NOT mentioned among the recipients of Zakkat? A
A. debtor.
B. matyre.
C. slave.
D. new convert.
75. Which one of the following is classified as a thick Najis?
A. Saliva of a dog.
B. Milk of animals that we do not eat their meat.
C. Urine of an infant baby boy.
D. All faeces.