

THE KENYA NATIONAL EXAMINATIONS COUNCIL  
Kenya Certificate of Secondary Education

443/1 -

**AGRICULTURE**

- Paper 1

**Nov. 2018 - 2 hours**

Name ..... Index Number .....

Candidate's Signature ..... Date .....

**Instructions to candidates**

- (a) Write your name and index number in the spaces provided above.
- (b) Sign and write the date of examination in the spaces provided above.
- (c) This paper consists of **three** sections; **A, B** and **C**.
- (d) Answer **all** the questions in section **A** and **B**.
- (e) Answer any **two** questions in section **C**.
- (f) All answers should be written in the spaces provided.
- (g) **This paper consists of 16 printed pages.**
- (h) **Candidates should check the question paper to ascertain that all the pages are printed as indicated and that no questions are missing.**
- (i) **Candidates should answer all the questions in English.**



**For Examiner's Use Only**

Section	Question	Maximum Score	Candidate's Score
<b>A</b>	<b>1-14</b>	<b>30</b>	
<b>B</b>	<b>15-18</b>	<b>20</b>	
<b>C</b>		<b>20</b>	
		<b>20</b>	
<b>Total Score</b>		<b>90</b>	

055

A190



**SECTION A** (30 marks)

*Answer **all** the questions in this section in the spaces provided.*

1. Name **four** categories of livestock farming. (2 marks)

.....  
.....  
.....  
.....

2. State **four** farming practices that ensure minimum tillage. (2 marks)

.....  
.....  
.....  
.....

3. State **four** factors that determine the choice of water pipes used on the farm. (2 marks)

.....  
.....  
.....  
.....

4. Name **two** sources of underground water. (1 mark)

.....  
.....

055

A190



5. Give **four** reasons why green manure is **not** commonly used in farming. (2 marks)

.....  
.....  
.....  
.....

6. (a) Name **two** types of inventory records kept on the farm. (1 mark)

.....  
.....

(b) State **two** uses of inventory records on a farm. (1 mark)

.....  
.....

7. (a) Name **three** vegetative planting materials used for propagating pineapples. (1½ marks)

.....  
.....  
.....

(b) State **three** qualities of certified seeds. (1½ marks)

.....  
.....  
.....

055

A190



8. State **four** advantages of using polythene sleeves to propagate stem cuttings. (2 marks)

.....  
.....  
.....  
.....

9. State **four** disadvantages of concession land tenure system. (2 marks)

.....  
.....  
.....  
.....

10. Name **four** insect pests of beans in the field. (2 marks)

.....  
.....  
.....  
.....

11. (a) Name **three** legume pastures grown in high altitude areas. (1½ marks)

.....  
.....  
.....

(b) State **four** management practices undertaken to improve natural pastures. (2 marks)

.....  
.....  
.....  
.....

055

A190



12. (a) Name **two** subsidiary books of the journal. (1 mark)

.....  
.....

(b) State **four** item details contained in a sales receipt. (2 marks)

.....  
.....  
.....  
.....

055

13. State **four** roles of Young Farmers Clubs in Kenya. (2 marks)

.....  
.....  
.....  
.....

14. (a) What is meant by the term agroforestry? (½ mark)

.....  
.....  
.....

A190

(b) Name **two** agroforestry practices. (1 mark)

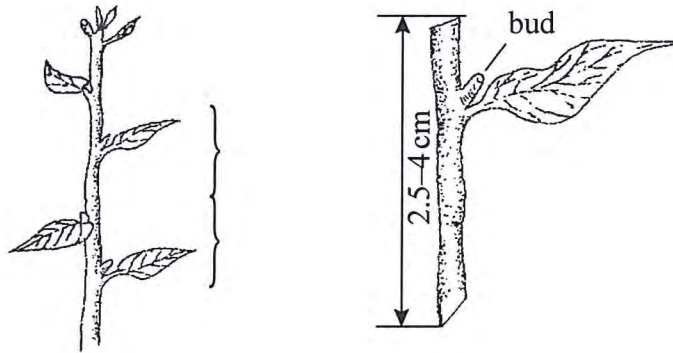
.....  
.....



**SECTION B (20 marks)**

*Answer all the questions in this section in the spaces provided.*

15. The diagram below shows a section of a plant from which the planting material illustrated was obtained.



055

- (a) Identify the planting material illustrated. (1 mark)

.....

- (b) Give **two** reasons why only the middle part of the plant was used to prepare the planting material. (2 marks)

.....

.....

- (c) Apart from using the middle part of the plant, explain **two** precautions that should be observed when preparing the illustrated planting material. (2 marks)

.....

.....

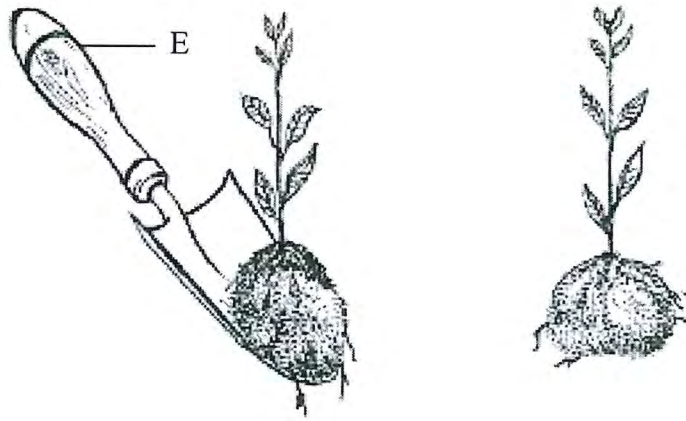
.....

A190





17. The diagram below illustrates a nursery practice.



055

(a) Name the practice (1 mark)

.....

(b) Give a reason why the tool labelled **E** is important in the practice illustrated. (1 mark)

.....

.....

(c) What is the appropriate stage of growth for carrying out the illustrated practice in agroforestry? (1 mark)

.....

.....

A190

(d) Explain **two** activities that ensure that the illustrated practice is carried out successfully. (2 marks)

.....

.....

.....

.....





18. In a maize production enterprise carried out over a period of eight years, a farmer used one hectare of land each time and applied different quantities of DAP fertiliser. DAP fertiliser costs KSh 2 500 per 50 kg bag and the harvested maize is sold at KSh 3 000 per 90 kg bag. The quantities of DAP fertiliser applied and maize harvested are as shown in this table below.

DAP fertiliser input in 50 kg bags	Maize yield in 90 kg bags	Total revenue KSh	Total cost KSh	Marginal revenue KSh	Marginal cost KSh
0	15.0	45 000	0	0	0
1	35.6				
2	52.0				
3	68.5				
4	71.0				
5	71.5				
6	71.5				
7	68.5				

- (a) Complete the table by determining the values of total revenue, total cost, marginal revenue and marginal cost. (2 marks)

- (b) From the information in your table, how can the farmer determine the level of production at which profit is maximum? (1 mark)

.....  
 .....

- (c) At the production level that yielded maximum profit, what was the value of each of the following?

- (i) DAP fertiliser input (1 mark)

.....

- (ii) Marginal revenue (1 mark)

.....  
 .....

055

A190





055

A190








055

A190



A series of horizontal dotted lines spanning the width of the page, providing a guide for handwriting or text entry.





055

A190

**THIS IS THE LAST PRINTED PAGE.**

