

COMPETENCY BASED CURRICULUM

SASON
001

GRADE TWO - YEAR 2021

MATHEMATICAL ACTIVITIES

GD2

Name: _____

Learner's Number:

School Name: _____

Gender: Boy Girl

County Name: _____ County Code:

Sub-County Name _____ Sub-County Code:

School Name: _____ School Code:

ASSESSMENT RUBRICS

The teacher to fill the grid below after marking the learner's work.

SUBJECT	Exceeds Expectations	Meets Expectations	Approaches Expectations	Below Expectations
MATHEMATICS ACTIVITIES				

Write in words or symbols

1. Seventy eight = _____

2. 52 = _____

Add

3. $96 + 3 =$ _____

4.
$$\begin{array}{r} 94 \\ +3 \\ \hline \\ \hline \end{array}$$

5.
$$\begin{array}{r} 9 \\ 2 \\ +6 \\ \hline \\ \hline \end{array}$$

Complete the patterns

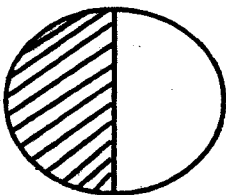
6. 22, 23, 24, _____, _____, _____

7. 37, 36, 35, _____, _____, _____

Complete

8. $64 =$ _____ tens _____ ones

9. 5 tens 4 ones = _____

10.  What fraction is shaded? _____

11. $\square + 5 = 33$

Subtract

12. $10 - 7 =$ _____

13.
$$\begin{array}{r} 65 \\ - 3 \\ \hline \\ \hline \end{array}$$

14.
$$\begin{array}{r} 80 \\ - 30 \\ \hline \\ \hline \end{array}$$

15. $60 - 20 =$ _____

16. $3 \times 2 =$ _____


17. $4 \times 3 =$ _____

Divide

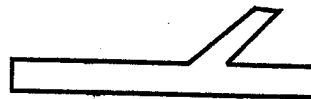
18. $4 \div 2 =$ _____

Use 'longer' or 'shorter'

19. The pencil is _____ than the stick.

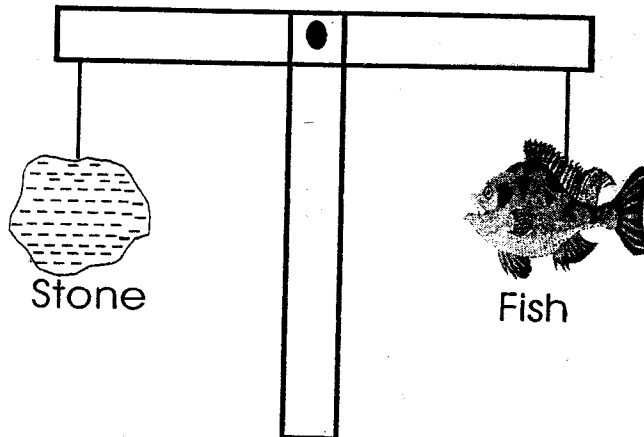


Pencil



Stick

20.

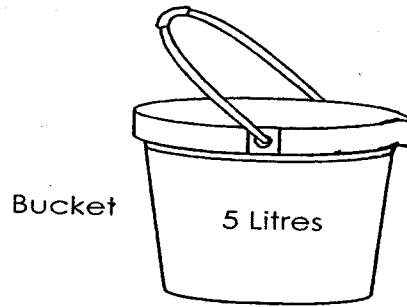



Stone

Fish


The mass of a stone is _____ to the mass of a fish.

21.



Which one holds less? _____

22.



What is the time? _____

24. This is a _____ line.



(straight, curved)

23. The month of April has _____ days. (29, 30, 31)

25. Copy the pattern