

LUBINU / LUSHEYA WARD

EVALUATION TEST STD 8 TERM 1 – 2020

SOCIAL STUDIES & R.E

Time: 2 Hrs 15Mins

READ THE INSTRUCTIONS CAREFULLY;

1. You have been given this question booklet and a separate answer sheet. The question booklet contains 90 questions.
2. Do any necessary rough work in this booklet.
3. When you have chosen your answer, mark it on the answer sheet, NOT in this question booklet.

HOW TO USE THE ANSWER SHEET

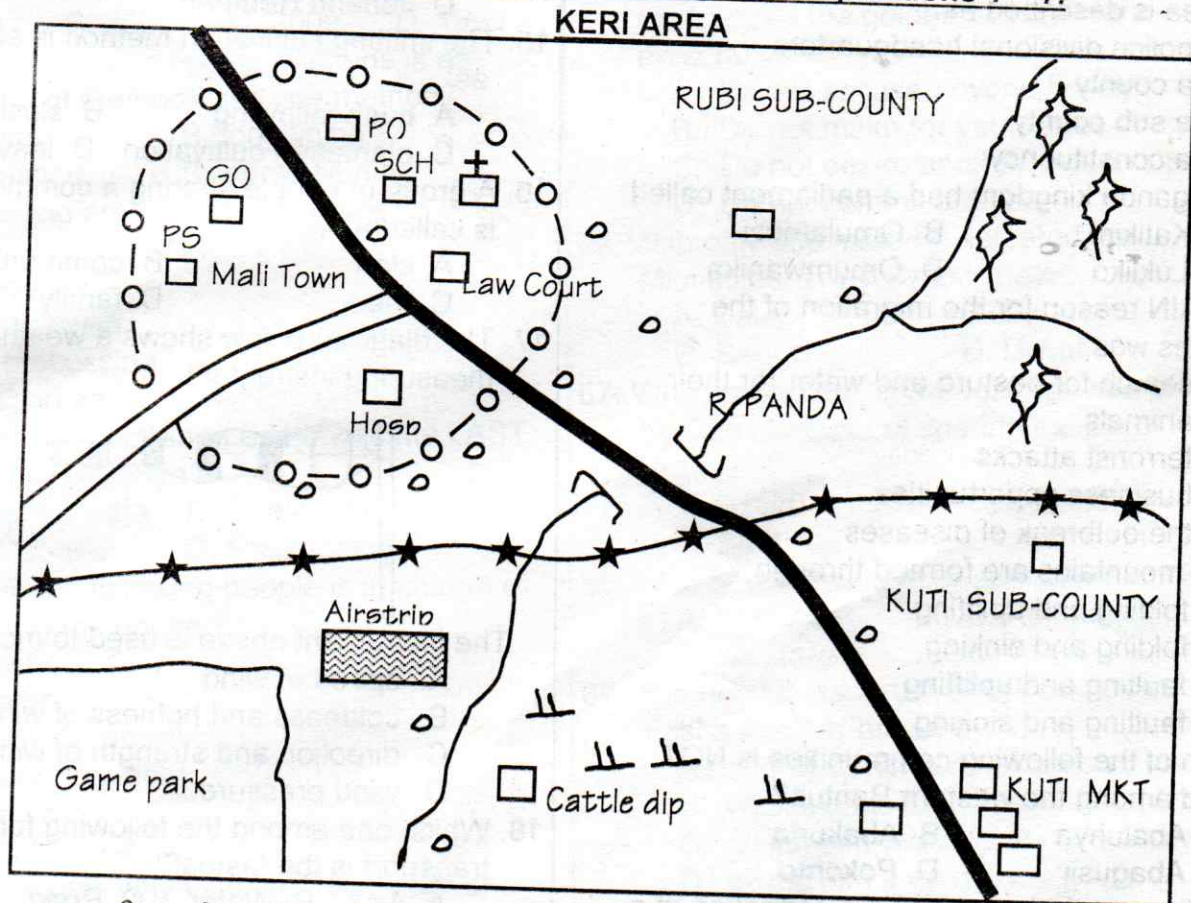
1. Use only an ordinary pencil.
2. Make sure that you have written on the answer sheet:-

(i) YOUR NAME

(ii) YOUR SCHOOL

(iii) YOUR UPI NO.

Study the map of Keri Area below and answer questions 1 – 7.



KEY:

PS – Police Station	GO – Governor's office	PO – School	MKT – Market	Hosp – Hospital
- Permanent buildings	- Church	- Scrub	- Forest	- Bridge
- Settlement	- Town boundary	- Sub county boundary	- River	- Murram road
			- Tarmac road	

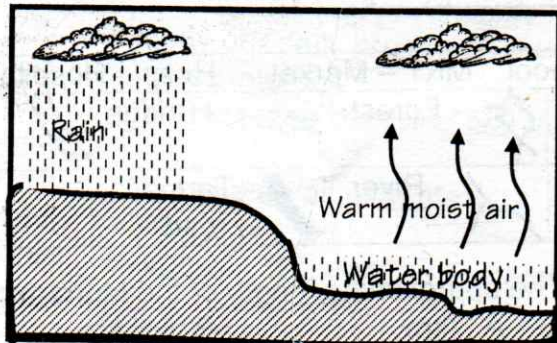
1. The land in Keri area slopes from:

- A. south B. north-east
C. south-west D. east

2. The approximate length of the Murram road is:

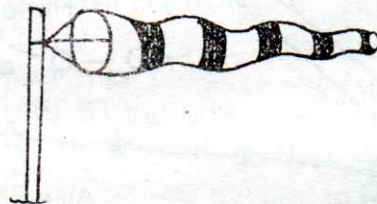
- A. 7km B. 6.5 km
C. 6km D. 4km

3. The climate of the area around the cattle dip is **LIKELY** to be:
 - A. cool and dry
 - B. cool and wet
 - C. hot and wet
 - D. hot and dry
4. The settlement pattern in Keri can be described as:
 - A. linear
 - B. nuclear
 - C. dense
 - D. sparse
5. Which of the following services is **NOT** offered in Mali town?
 - A. medical
 - B. recreation
 - C. spiritual care
 - D. security
6. The following economic activities are practiced in Keri area. Which one is **NOT**?
 - A. Tourism
 - B. Trading
 - C. Beef farming
 - D. Mining
7. Keri area is described as:
 - A. police divisional headquarters
 - B. a county
 - C. a sub county
 - D. a constituency
8. The Buganda kingdom had a parliament called:
 - A. Katikiro
 - B. Omulamuzi
 - C. Lukiiko
 - D. Omumwanika
9. The **MAIN** reason for the migration of the Cushites was:
 - A. search for pasture and water for their animals
 - B. terrorist attacks
 - C. business opportunities
 - D. the outbreak of diseases
10. Block mountains are formed through:
 - A. folding and uplifting
 - B. folding and sinking
 - C. faulting and uplifting
 - D. faulting and sinking
11. Which of the following communities is **NOT** found among the western Bantus?
 - A. Abaluhya
 - B. Abakuria
 - C. Abagusii
 - D. Pokomo
12. The diagram, below shows the formation of a type of rainfall.



The type of rainfall represented in the diagram above is:

- A. relief rainfall
 - B. convectional
 - C. cyclonic rainfall
 - D. frontal rainfall
13. In which one of the following stages of evolution were human beings called 'upright man'?
 - A. Homo erectus
 - B. Homo Sapiens
 - C. Homo Habilis
 - D. Homo Sapiens Sapiens
 14. Who among the following early visitors was a missionary?
 - A. William Mackinnon
 - B. John Speke
 - C. Henry Morton Stanley
 - D. Johann Rebman
 15. The shifting cultivation method is also known as:
 - A. bush fallowing
 - B. slash-and-burn
 - C. plantation cultivation
 - D. leave and go
 16. A group of people sharing a common ancestor is called a:
 - A. clan
 - B. community
 - C. tribe
 - D. family
 17. The diagram below shows a weather measuring instrument.



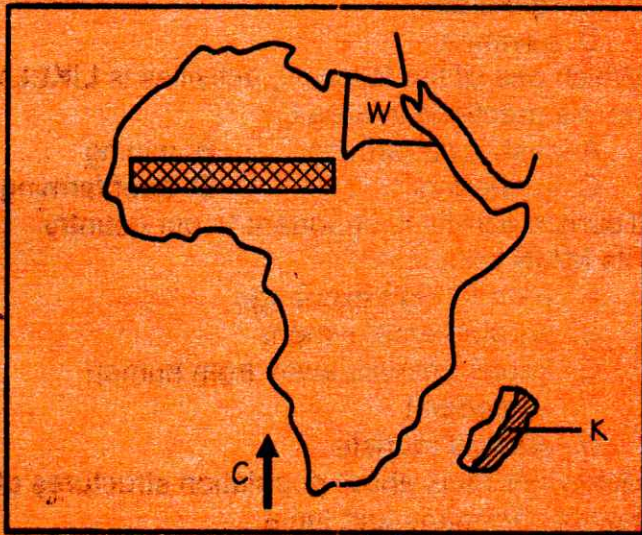
The instrument above is used to measure:

- A. speed of wind
 - B. coldness and hotness of wind
 - C. direction and strength of wind
 - D. wind pressure
18. Which one among the following forms of transport is the fastest?
 - A. Air
 - B. Water
 - C. Road
 - D. Cable
 19. Two neighbours are always quarreling over a boundary. The **BEST** way of solving their conflicts is through:
 - A. taking the case to the chief
 - B. dialogue
 - C. taking the case to court
 - D. beating up the neighbor seriously
 20. The property or money that one receives from someone who has died is known as:
 - A. inheritance
 - B. succession
 - C. will
 - D. dependents

21. Which one among the following European powers did NOT have colonies in Africa?

- A. Netherlands B. Portugal
C. Spain D. Italy

Use the map below to answer questions 22 – 25.



22. The country marked W was colonized by:


- A. Belgium B. France
C. Britain D. German

23. The ocean current marked C has a negative effective on the adjustment land. Which one?

- A. warm the land
B. bring a lot of rainfall
C. increase populations
D. cause desertification

24. The climate experienced in the area marked K is LIKELY to be:

- A. humid sub-tropical B. equatorial
C. warm continental D. Mediterranean

25. The following is the MAIN conditions favouring pastoral community in the area marked . Which one is NOT?

- A. Low population B. Large space
C. Presence of tsetse flies D. Enough rainfall

26. Which of the following is the MAIN economic activity in the semi-desert regions in Africa?

- A. Mining B. Trading
C. Crop farming D. Pastoralism

27. Below are characteristics of a type of vegetation in Africa:

- (i) Trees are tall and have a thick base
(ii) Little or no undergrowth
(iii) The tops of trees form a canopy
(iv) Many species of trees grow together

The type of vegetation described above is the:

- A. Mediterranean B. Mountain
C. Savannah D. Equatorial

28. Three of the following are benefits gained from COMESA trade. Which one is NOT?

- A. Free trade has affected local industries.
B. Created large market
C. Harmony and cooperation
D. Industrial development

29. The BEST way to discourage drug and substance abuse is by:

- A. giving serious punishment
B. educating the public on its dangers
C. reporting them to the police
D. advising sellers to stop selling the drugs

30. The BEST meaning of conflict resolution is:

- A. being obedient to the law
B. leaving our enemies alone
C. re-establishing good relation
D. taking enemies to court

31. The following factors may influence population distribution in Africa EXCEPT:

- A. good climate B. un-reliable rainfall
C. fertile soils D. good drainage systems

32. Which mineral is CORRECTLY matched with its method of mining?

- A. Soda ash – dredging
B. Petroleum – open cast
C. Gold – drilling
D. Copper – dredging

33. Rapid population growth can be managed by:

- A. increasing food production
B. providing better medical care
C. providing family planning services
D. encouraging immigration

34. Which one among the following is NOT a form of child abuse?

- A. Over working the child
B. Insulting the child.
C. Beating the child
D. Forcing the children to go to school.

35. Who among the following prominent leaders in Africa used poems in his country during the struggle for independence in Africa?

- A. Leopold Seddar Senghor
B. Julius Nyerere
C. Jomo Kenyatta
D. Raila Odinga

36. The rules that tell us how roads are used are called traffic rules. They are contained in the:

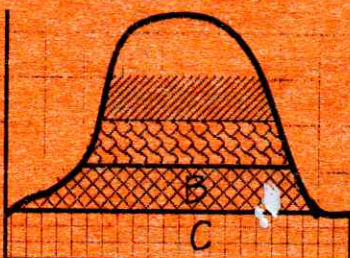
- A. Kenya Gazette B. Highway Code
C. Hansard D. Library

37. All the following are effects of lawlessness EXCEPT:

- A. displacement of people

- B. positive economic growth
C. increased poverty
D. death
38. Which of the following crops is used in the making of insecticides?
A. Cloves B. Cotton
C. Pyrethrum D. Coffee
39. Which of the following towns in Kenya started as an agricultural market centre but grew as an industrial centre?
A. Nairobi B. Nakuru C. Mombasa D. Thika
40. Which of the following factors is **LIKELY** to cause climate change in a given area?
A. Distance from the equator
B. Setting up of industries
C. Nearness to a major longitude
D. Height above sea level
41. Which one among the following prehistoric sites in Eastern Africa is **NOT CORRECTLY** matched with the country where it is found?
A. Olduvai Gorge – Kenya
B. Omo Valley – Ethiopia
C. Olorgesailie – Kenya
D. Chesowanja – Kenya
42. Below are member states of the Common Market for Eastern and Southern Africa (COMESA). Which one is **NOT**?
A. Madagascar B. Libya
C. Egypt D. Tanzania
43. The following are the **MAIN** problems experienced by beef farming in Tanzania. Which one is **NOT**?
A. Shortage of water and pasture
B. Source of meat for food
C. Attacks by wild animals
D. Outbreak of diseases
44. Which of the following minerals is obtained through scooping method?
A. Sand B. Soda ash
C. Diatomite D. Salt
45. The government has three arms used in its daily operations. Which one is **NOT** among the three?
A. The Judiciary B. The Executive
C. The Police Service D. The Legislature
46. The type of vegetation found in the area marked B is:
A. heath and moorland
B. bamboo thicket
C. rainforest
D. savanna
47. Which one of the following activities is **LIKELY** to be practiced in area C?
A. cash crop farming B. mining
C. lumbering D. beef farming
48. Tourism activity is important to our country. Its **MAIN** benefit is:
A. earn foreign exchange
B. created employment
C. keeps animals away from human settlement
D. attracts tourists
49. Below are facts about population structures of Kenya, Germany and India.
(i) High death rate
(ii) High birthrate
(iii) High life expectancy
(iv) More males than females
(v) Low life expectancy
The true facts about Kenya are:
A. (i) (iii) and (iv) B. (i) (ii) and (v)
C. (iii), (iv) and (v) D. (ii), (iv) and (v)
50. The **MAIN** reason for the construction of the Seven Forks Schemes on River Tana was to:
A. generate hydroelectric power
B. increase food production
C. control the flooding of River Tana
D. store water for irrigation
51. Who among the following was the first African in Kenya to join the legislative council?
A. Eliud Mathu B. B.A Ohanga
C. Daniel Moi D. Jomo Kenyatta
52. The following are ways of inclusion of persons with special needs in the society. Which one is **NOT**?
A. Creating positive attitude
B. Creating friendly environment
C. Providing equal opportunities
D. Praying for them
53. Below are statements of an organization in Africa:
(i) It was formed in 1976
(ii) It was formed by three heads of state
(iii) It collapsed in 1977
(iv) It provided common service to member conflicts

Vegetation zone on a mountain:



- The organization described above is:
- the Origination of African Union (OAU)
 - the East African Community (EAC)
 - the Economic Community of West African State (ECOWAS)
 - the Preferential Trade Area (PTA)
54. The speaker of the National Assembly is sworn in by the:
- president
 - members of the National Assembly
 - clerk of the National Assembly
 - Chief Justice
55. The Independent Electoral and Boundaries Commission (IEBC) is headed by the:
- secretary General
 - Chief Justice
 - President
 - chairman
56. The last census in Kenya was carried out in:
- 2019
 - 2020
 - 2009
 - 1999
57. Which of the following fishing methods is an improvement of the hook and line method?
- trawling
 - long lining
 - net drifting
 - purse seining
58. All the following are service industries EXCEPT:
- M-pesa
 - tyre-repairing
 - milk processing
 - transport and communication
59. Who among the following people was the LAST prime minister in Kenya?
- Jomo Kenyatta
 - Daniel Moi
 - Tom Mboya
 - Raila Odinga
60. Who among the following people is in charge of the security in the county?
- Governor
 - Senator
 - County Commissioner
 - Deputy President
61. They had married angels and given birth to giants.
62. They were unfaithful to God.
63. God changed Abram's name to Abraham because he:
- was going to a new country
 - was now living a new life
 - had been chosen by God
 - was going to be the father of a great nation
64. Which one of the following festivals is celebrated by the Israelites to remember their release from Egypt ?
- Easter
 - Pentecost
 - Passover
 - Tabernacles
65. Which one of the following commandments was broken by the Israelites when they worshipped the golden bull calf during the exodus?
- Do not accuse anyone falsely.
 - Do not make for yourselves images.
 - Do not desire another person's property.
 - Do not commit adultery
66. With only 300 men, he defeated the Midianites army. Who is he?
- Caleb
 - Gideon
 - Saul
 - David
67. Who among the following kings was punished by God because of sparing the life of king Agag?
- David
 - Solomon
 - Saul
 - Jeroboam
68. Who built the temple of Jerusalem?
- Solomon
 - Rehoboam
 - Jeroboam
 - David
69. The rich woman from Shunem welcomed Elisha into her house by:
- anointing him with expensive oil
 - washing his feet
 - giving him water to drink
 - giving him a room to stay
70. The annunciation of the birth of Jesus is recorded in the book of:
- Luke
 - John
 - Mark
 - Matthew
71. Who among the following people witnessed the dedication of Jesus in the temple?
- Elizabeth
 - Zechariah
 - Anna
 - Martha
72. When Jesus was tempted by satan in the wilderness, he was able to overcome because:

C.R.E

61. The MAIN reason why God created Adam and Eve was to:
- eat fruits of the garden
 - take care of the gardens of Eden
 - look like God
 - be God's friends
62. Which one of the following is the MAIN reason why God destroyed the earth during Noah's time?
- They had multiple and filled the earth?
 - They had built a higher tower as a sign of pride

- A. he was protected by angels
- B. satan was cunning
- C. he had fasted and prayed for 40 days
- D. he trusted in his father

73. 'Happy are those who are humble' because they:
- A. will see God
 - B. will receive what God has promised
 - C. will be called sons of God
 - D. will be satisfied fully
74. The parable of the friend at Midnight MAINLY teaches Christians to:
- A. be forgiving
 - B. help the needy
 - C. accept others the way they are
 - D. persist in prayer
75. On which occasion did Jesus identify his betrayer?
- A. Last Supper
 - B. Baptism
 - C. Transfiguration
 - D. When praying at Mount Olives.
76. "Surely he was a good man." These words were said during the death of Jesus by:
- A. Peter
 - B. His mother Mary
 - C. The army officer
 - D. James
77. In which of town did the disciples wait upon the Holy Spirit?
- A. Capernaum
 - B. Jerusalem
 - C. Jericho
 - D. Galilee
78. The early believers were first called Christians at a place known as:
- A. Judea
 - B. Cana of Galilee
 - C. Joppa
 - D. Antioch
79. Who was also known as 'the apostle of the Gentiles'?
- A. Paul
 - B. John
 - C. Andrew
 - D. Timothy
80. Which of the following is a gift of the Holy Spirit?
- A. Faithfulness
 - B. Patience
 - C. Love
 - D. Wisdom
81. One of the following statements is NOT found in the Apostle's Creed. Which one?
- A. I believe in God, the Father Almighty.
 - B. Give us today our daily bread.
 - C. He descended into hell.
 - D. He will come to judge the living and the dead.
82. For one to qualify to be an elder in the community, he was to be:
- A. rich
 - B. aged
 - C. wise
 - D. harsh
83. Which of the following is NOT a rite of passage in traditional African society?
- A. Death
 - B. Initiation
 - C. Marriage
 - D. baptism
84. Which of the following traditional African practice is acceptable in Christianity?
- A. Giving farm produce to God.
 - B. Poring libation
 - C. Animal sacrifice
 - D. Calling the names of ancestors
85. Christians take part in community work MAINLY because they:
- A. want to be wealthy
 - B. want to be felt
 - C. want to share with others
 - D. enjoy doing it
86. Your desk mate Koech is fond of making noise when the teacher is not in class. What is the best for you to take as a Christian friend?
- A. Report to the Headteacher.
 - B. Report him to his aprents.
 - C. Leave him alone.
 - D. Talk to him about the effect of his behaviour
87. Which one of the following is a bad use of leisure?
- A. Involving in drug abuse
 - B. Visiting the orphanages
 - C. Reading the bible
 - D. Helping the needy
88. Hellen, a class eight girl refuses to carry out manual work because she feels it is dirty job. How BEST can you advise her as a Christian?
- A. That manual work is not a punishment.
 - B. To request a friend to assist her
 - C. To leave the job for school workers.
 - D. Report the matter to her parents
89. Imran, your friend has joined a group of youths who take drugs. As a Christian, the BEST thing for you to do is to:
- A. report him to the police
 - B. tell Imran to stop the relationship with the youths
 - C. avoid being in his company
 - D. discuss Imran's behaviour with your friends
90. Which of the following was the reason why missionaries introduced formal education in Kenya?
- A. To make Africans self-reliant
 - B. To help them get jobs
 - C. To civilize Africans
 - D. To help them read the Bible.