

# COMPETENCY BASED CURRICULUM

GRADE 2 - YEAR: 2021

## MATHEMATICAL ACTIVITIES

SAISON  
002

Name: \_\_\_\_\_

Learner's Number:

Gender: Boy  Girl

County Name: \_\_\_\_\_ County code

Sub-county Name: \_\_\_\_\_ Sub-county code

School Name: \_\_\_\_\_ School code

The grid below is to be filled by the teacher after marking the learner's work.


	Level 1	Level 2	Level 3	Level 4
Task 1				
Task 2				
Task 3				
Task 4				
Task 5				

1. Count and write.

(3 marks)



= \_\_\_\_\_



= \_\_\_\_\_



= \_\_\_\_\_

2. Write numbers in words.

(2 marks)

a) 20 - \_\_\_\_\_

b) 64 - \_\_\_\_\_

3. Complete the place value.

(3 marks)

a) 82 = \_\_\_\_\_ tens \_\_\_\_\_ ones.



\_\_\_\_\_ tens \_\_\_\_\_ ones.

c) 465 = \_\_\_\_\_ hundreds \_\_\_\_\_ tens \_\_\_\_\_ ones.

4. Add:

(6 marks)

a)  $4 + 5 =$  \_\_\_\_\_

b)  $7 + 1 =$  \_\_\_\_\_

c) 
$$\begin{array}{r} 2 \\ 1 \\ + 3 \\ \hline \\ \hline \end{array}$$

d) 
$$\begin{array}{r} 3 \\ + 2 \\ 4 \\ \hline \\ \hline \end{array}$$

e) 
$$\begin{array}{r} 16 \\ + 3 \\ \hline \\ \hline \end{array}$$

f) 
$$\begin{array}{r} 70 \\ + 20 \\ \hline \\ \hline \end{array}$$

5. Subtract :

(4 marks)

a) 
$$\begin{array}{r} 8 \\ - 3 \\ \hline \\ \hline \end{array}$$

b) 
$$\begin{array}{r} 16 \\ - 3 \\ \hline \\ \hline \end{array}$$

c) 
$$\begin{array}{r} 50 \\ - 10 \\ \hline \\ \hline \end{array}$$

d) 
$$\begin{array}{r} 85 \\ - 4 \\ \hline \\ \hline \end{array}$$

6. John has 6 mangoes. Alice has 3 mangoes. How many mangoes do they have altogether? \_\_\_\_\_ (1 mark)

7. Musau had 28 marbles. He gave Jane 6 marbles. How many marbles did he remain with? \_\_\_\_\_ (1 mark)

8. Which one holds more water? \_\_\_\_\_ (1 mark)



Pot



Bottle

9. Which one is shorter? \_\_\_\_\_ (1 mark)

A

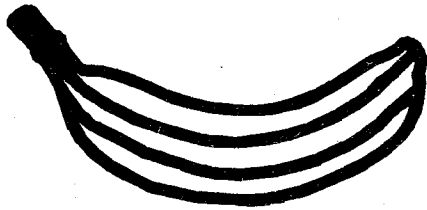
B

10. Fill in the missing days of the week. (3 marks)


Monday
Wednesday
Saturday

(Friday, Tuesday, Thursday)


11. The following is a price list.



Banana  
Sh. 10



Book  
Sh. 15



Pencil  
Sh. 20

a) What is the cost of a banana and a book? (1 mark)


\_\_\_\_\_

b) What is the cost of two pencils? (1 mark)

\_\_\_\_\_

12. Write 'curved' or 'straight'. (2 marks)

a)  \_\_\_\_\_ line.

b)  \_\_\_\_\_ line.

14.  This is a \_\_\_\_\_ (rectangle, triangle) (1 mark)

**Assessment Rubrics - Mathematics**

Level	4	3	2	1
Score	28 - 30	19 - 27	10 - 18	0 - 9