

**COMPETENCY BASED CURRICULUM
GRADE ONE MID TERM 2 2018
MATHEMATICS ACTIVITIES**

NAME

SCHOOL

Write in words.

1. 5 _____

2. 6 _____

3. 8 _____


4. 10 _____

5. 2 _____

Count and write how many.

6.  _____

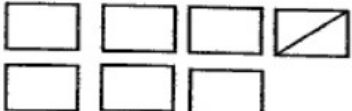
7.  _____

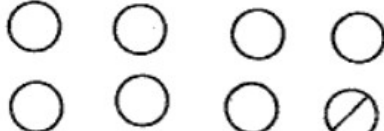
8.  _____


9.  _____

10.  _____

Take away 1 count how many.

11.  _____

12.  _____

13.  _____

14.  _____

15.  _____

Write the next number.

16. 1, 2, 3, 4, _____

17. 10, 11, 12, 13, _____

18. 7, 6, 5, 4, _____

19. 10, 9, 8, 7, _____

20. 20, 21, 22, 23, _____

21. 27

tens	ones

22. 91

tens	ones

23. 77

tens	ones

24. 53

tens	ones

25. 44

tens	ones

Put together

26. $4 + 1 =$ _____

27. $3 + 3 =$ _____

28. $3 + 4 =$ _____

29. $4 + 2 =$ _____

30. $6 + 3 =$ _____

Match equal sums.

31. $4 + 5$ $1 + 1$

32. $1 + 1$ $1 + 2$

33. $2 + 1$ $5 + 4$

34. $4 + 2$ $4 + 3$

35. $3 + 4$ $2 + 4$

Find the missing number.

36. $10 + \underline{\quad} = 10$

37. $9 + \underline{\quad} = 10$

38. $8 + \underline{\quad} = 10$

39. $6 + \underline{\quad} = 10$

40. $5 + \underline{\quad} = 10$

Add

41. $7 + 1 =$ _____

42. $16 + 2 =$ _____

43. $11 + 1 =$ _____

44. $22 + 5 =$ _____

45. $3 + 15 =$ _____

Take away.

46. $13 - 3 =$ _____

47. $47 - 3 =$ _____

48. $59 - 7 =$ _____

49. $93 - 1 =$ _____

50. 17
 $\underline{-6}$
