

GRADE THREE END TERM 2 EXAM, 2018

MATHEMATICS ACTIVITIES

Date:

NAME SCHOOL

Add

1.
$$\begin{array}{r} 14 \\ + 79 \\ \hline \end{array}$$

2.
$$\begin{array}{r} 67 \\ + 17 \\ \hline \end{array}$$

3.
$$\begin{array}{r} 53 \\ + 79 \\ 67 \\ \hline \end{array}$$

4.
$$\begin{array}{r} 412 \\ + 567 \\ \hline \end{array}$$

5.
$$\begin{array}{r} 670 \\ + 315 \\ \hline \end{array}$$

6. _____ is the sixth month of the year.

7. _____ is the last day of the week.

Write in words

8. 100 _____

9. 722 _____

10. 915 _____

11. 157 _____

12. 59 _____

Write in symbols.

13. Two hundred and sixty five

14. Three hundred and seventy

15. Nine hundred and ninety nine

16. Three hundred and thirty two

17. Four hundred and twenty seven

Take away

18. $76 - 4 =$

19.
$$\begin{array}{r} 82 \\ - 30 \\ \hline \end{array}$$

20. $339 - 62 =$

21. $999 - 66 =$

22. $50 - 20 =$

23.
$$\begin{array}{r} 402 \\ - 260 \\ \hline \end{array}$$

24. $\frac{1}{2}$ of 10 = _____

25. $\frac{1}{4}$ of 16 = _____


26. $\frac{1}{8}$ of 32 = _____

27. Half of 16 is _____


28. A quarter of 20 is _____

Name the shapes


29.



30.



31.



32.



33.



34. What is the time?




35.



36. What fraction is shaded?



37. What fraction is not shaded?



38. $6 \times 2 =$ _____

39. $5 \times 3 =$ _____

40. $4 \times 0 =$ _____

41. Arrange from the smallest to the largest

99, 108, 213, 62, _____

42. What is the next number in the pattern?

4, 8, 12, 16, _____

Fill in the missing numbers

43. 120, 130, _____, _____, 160

44. 200, 300, _____, _____, _____

45. 990, 991, _____, _____

46. 90 take away 40 = _____

47. A farmer had 70 cows. 20 cows died. How many was he left with? _____

48. Mr. Kamau has 16 goats. He bought 12 goats. How many goats does he have altogether? _____

49. ○○○○

○○○○

○○○○

____ x ____ = ____

50. ○○

○○

○○

____ x ____ = ____