

# STANDARD ONE

## END TERM 1 EXAM 2018

### MATHEMATICS

NAME :	
SCHOOL :	

1. 30, 31, \_\_\_\_\_ 34 \_\_\_\_\_
2. 60, \_\_\_\_\_ 62, \_\_\_\_\_
3. 5 tens + 4 ones = \_\_\_\_\_
4. 6 hundreds 7 tens + 4 ones = \_\_\_\_\_

Write in words or symbols.

5. 85 \_\_\_\_\_
6. Twenty three \_\_\_\_\_
7. 64 \_\_\_\_\_

$$\begin{array}{r} 8. \quad 6 \\ + 7 \\ \hline \hline \end{array}$$

$$\begin{array}{r} 9. \quad 9 \\ + 8 \\ \hline \hline \end{array}$$

$$\begin{array}{r} 10. \quad 4 \\ + 7 \\ \hline \hline \end{array}$$

$$\begin{array}{r} 11. \quad 1 \\ + 9 \\ \hline \hline \end{array}$$

$$\begin{array}{r} 12. \quad 10 \\ - 8 \\ \hline \hline \end{array}$$

$$\begin{array}{r} 13. \quad 17 \\ - 3 \\ \hline \hline \end{array}$$

$$\begin{array}{r} 14. \quad 15 \\ - 8 \\ \hline \hline \end{array}$$

$$\begin{array}{r} 15. \quad 10 \\ - 6 \\ \hline \hline \end{array}$$

$$16. 4 + \underline{\quad} = 18$$

$$17. \underline{\quad} + 6 = 12$$

$$18. 9 - \square = 7$$

$$19. 5 - \square = 3$$

20. What is the next number in the pattern?

**1, 3, 5, 7, 9, \_\_\_\_\_**

$$21. 3 \times 2 = \underline{\quad}$$

$$22. 5 \times 3 = \underline{\quad}$$

$$23. 6 \times 10 = \underline{\quad}$$

$$24. \begin{array}{r} 8 \\ \times 10 \\ \hline \hline \end{array}$$

$$25. 6 \div 2 = \underline{\quad}$$

$$26. 12 \div 4 = \underline{\quad}$$

$$27. 6 \div 3 = \underline{\quad}$$

$$28. \text{Divide 18 by 6} = \underline{\quad}$$

29. Which one holds more water?



30. 
$$\begin{array}{r} 363 \\ + 281 \\ \hline \end{array}$$

31. 
$$\begin{array}{r} 872 \\ + 94 \\ \hline \end{array}$$

32.  $160 + 90 = \underline{\hspace{2cm}}$

33. 
$$\begin{array}{r} 218 \\ - 7 \\ \hline \end{array}$$

34. 
$$\begin{array}{r} 250 \\ - 40 \\ \hline \end{array}$$

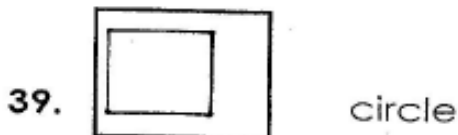
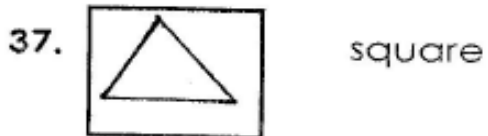
35. 

sh	ct
25	00
+10	50
<hr/>	


36. 

sh	ct
218	00
+150	00
<hr/>	

Match the shapes with the names.



Shopping- price list:-



40. If I buy a bar of soap and a handkerchief, how much will I remain with from Sh 100?  
\_\_\_\_\_

41. Kamau has 200 shillings. How much is he left with after buying a handkerchief?  
\_\_\_\_\_

42. How much money is a padlock? \_\_\_\_\_

43. A bar of soap and a padlock cost how much? \_\_\_\_\_

44. What is the time?



\_\_\_\_\_ o'clock.

45. How many eyes do 4 girls have? \_\_\_\_\_

46. How many legs do 3 cows have? \_\_\_\_\_

Name the shapes.

