

STANDARD TWO

END TERM 1 EXAM 2018

MATHEMATICS

NAME :	
SCHOOL :	

1. 30, 31, _____ 34 _____

2. 60, _____ 62, _____

3. 5 tens + 4 ones = _____

4. 6 hundreds 7 tens + 4 ones
= _____

Write in words or symbols.

5. 85 _____

6. Twenty three _____

7. 64 _____

8.
$$\begin{array}{r} 6 \\ + 7 \\ \hline \end{array}$$

9.
$$\begin{array}{r} 9 \\ + 8 \\ \hline \end{array}$$

10.
$$\begin{array}{r} 4 \\ + 7 \\ \hline \end{array}$$

11.
$$\begin{array}{r} 1 \\ + 9 \\ \hline \end{array}$$

12.
$$\begin{array}{r} 10 \\ - 8 \\ \hline \end{array}$$

13.
$$\begin{array}{r} 17 \\ - 3 \\ \hline \end{array}$$

14.
$$\begin{array}{r} 15 \\ - 8 \\ \hline \end{array}$$

15.
$$\begin{array}{r} 10 \\ - 6 \\ \hline \end{array}$$

16. $4 + \underline{\quad} = 18$

17. $\underline{\quad} + 6 = 12$

18. $9 - \square = 7$

19. $5 - \square = 3$

20. What is the next number in the pattern?
1, 3, 5, 7, 9, _____

21. $3 \times 2 = \underline{\quad}$

22. $5 \times 3 = \underline{\quad}$

23. $6 \times 10 = \underline{\quad}$

24.
$$\begin{array}{r} 8 \\ \times 10 \\ \hline \end{array}$$

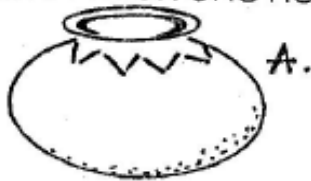
25. $6 \div 2 = \underline{\quad}$

26. $12 \div 4 = \underline{\quad}$

27. $6 \div 3 = \underline{\quad}$

28. Divide 18 by 6 = _____

29. Which one holds more water?



30.
$$\begin{array}{r} 363 \\ + 281 \\ \hline \hline \end{array}$$

31.
$$\begin{array}{r} 872 \\ + 94 \\ \hline \hline \end{array}$$

32. $160 + 90 = \underline{\hspace{2cm}}$

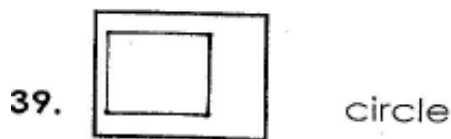
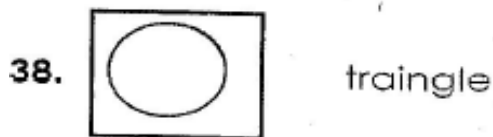
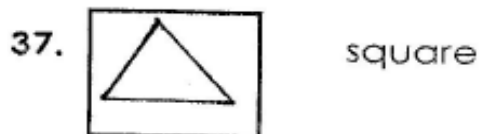
33.
$$\begin{array}{r} 218 \\ - 7 \\ \hline \hline \end{array}$$

34.
$$\begin{array}{r} 250 \\ - 40 \\ \hline \hline \end{array}$$

35.
$$\begin{array}{r} \text{sh} \quad \text{ct} \\ 25 \quad 00 \\ +10 \quad 50 \\ \hline \hline \end{array}$$

36.
$$\begin{array}{r} \text{sh} \quad \text{ct} \\ 218 \quad 00 \\ +150 \quad 00 \\ \hline \hline \end{array}$$

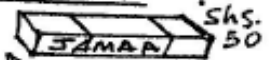
Match the shapes with the names.



Shopping- price list:-



Padlock
Shs 130



Bar of Soap
shs. 30



Handkerchief
shs. 30

40. If I buy a bar of soap and a handkerchief, how much will I remain with from Sh 100?

41. Kamau has 200 shillings. How much is he left with after buying a handkerchief?

42. How much money is a padlock?

43. A bar of soap and a padlock cost how much?

44. What is the time?



 o'clock.

45. How many eyes do 4 girls have?

46. How many legs do 3 cows have?

Name the shapes.

