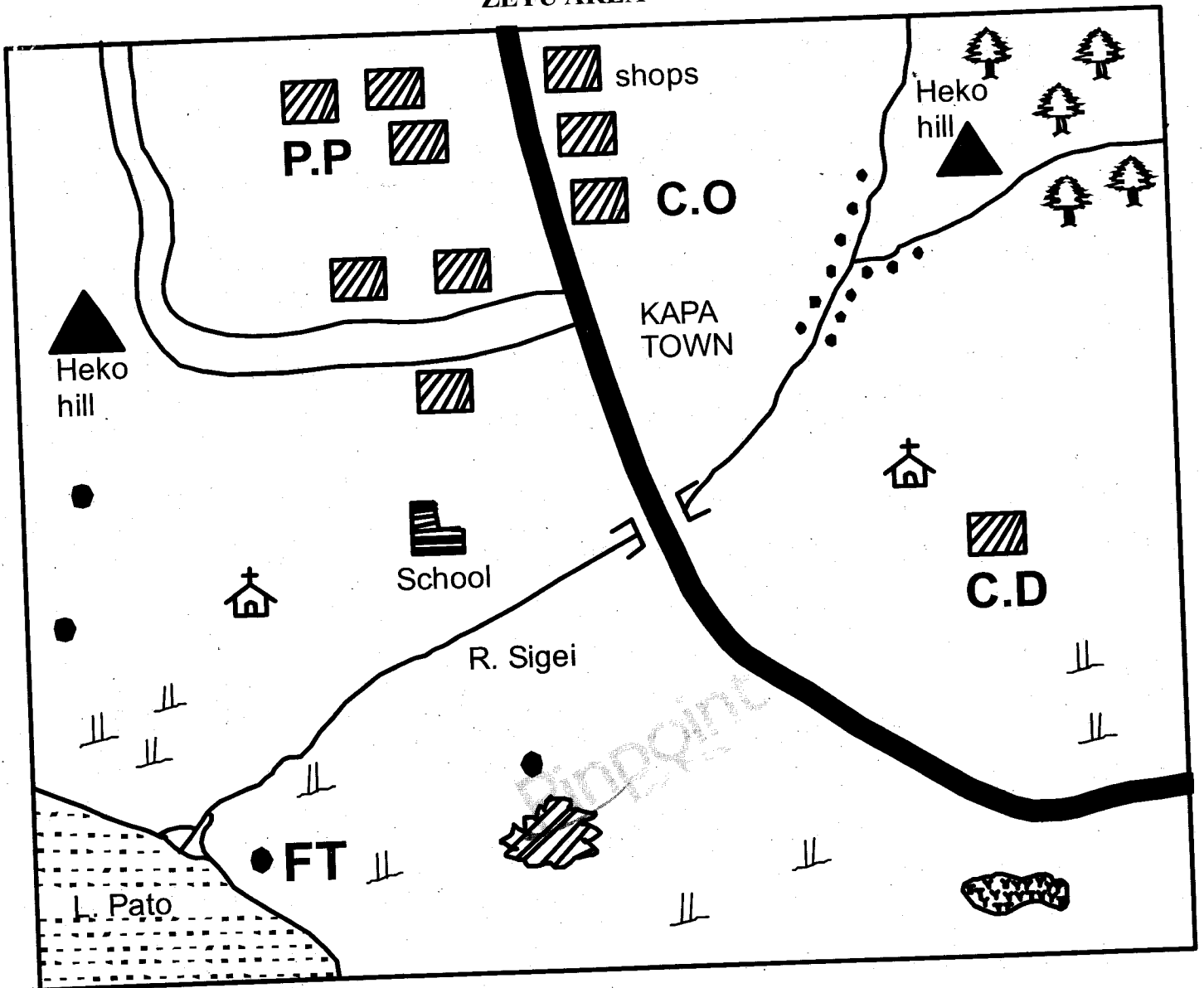












2
SECTION I: SOCIAL STUDIES

ZETU AREA



Key

- | | | | |
|---|--------------------|---|---------------|
|  | Forest |  | Scrub |
|  | Permanent building |  | Tarmac Road |
|  | Settlements |  | Swamp |
|  | Church |  | Hill |
| C.D | Cattle dip |  | School |
|  | Quarry | P.P | Police Post |
| | | C.O | County office |

1. What is the direction of the Lake from Heko hill?
 - A. South East
 - B. North East
 - C. North West
 - D. South West

2. Which evidence shows that some parts of Zetu area receives low rainfall?
 - A. River
 - B. Scrub
 - C. Lake
 - D. Hill

3. The physical feature at the mouth of River Sigei is formed through
 - A. faulting
 - B. downwarping
 - C. deposition
 - D. folding.

4. Traders in Kapa Town get trading licence from?
 - A. County offices
 - B. Police post
 - C. Chief camp
 - D. Church

5. Which economic activity is **not** carried out in Zetu area?
 - A. Fishing
 - B. Cash crop farming
 - C. Mining
 - D. Tourism

6. The **main** factor that has influenced the population distribution in the North Eastern part of Zetu area is
 - A. drainage
 - B. climate
 - C. soil
 - D. swamp.

7. What is evident in Kapa Town that shows that it is an administrative centre?
 - A. Police post
 - B. Governor office
 - C. County office
 - D. Chief's camp

8. Three of the following statements are true about the Tswana pastoralists. Which is **not**?
 - A. They keep large herds of livestock
 - B. They live in wetter parts of Botswana
 - C. They use some of their animals to pay dowry
 - D. They grow food crops around their shelters

9. The following are roles of Njuri Ncheke of the Ameru **except**
 - A. uniting Ameru clans
 - B. initiating initiation ceremonies
 - C. declaring curses on matters of public interest
 - D. safeguarding the religious values of the community.


10. Which one of the following pre-historic sites is **matched correctly** with the country where it is found?
 - A. Gambles cave - Kenya
 - B. Isimila - Uganda
 - C. Peninj - Ethiopia
 - D. Ishango - Tanzania

11. The **main** advantage of fish farming over lake or sea fishing is that
 - A. it is expensive
 - B. only fish of the required age is caught
 - C. fish can be caught any time
 - D. fish can be taken to the market more easily.

12. Which one of the following statements is true about the formation of a clan?
 A. It is made up of many communities
 B. Women belongs to the clan of their parents after marriage
 C. Clan members intermarry
 D. Many communities have a man as their ancestor
13. Which one of the following groups consists of manufacturing industries?
 A. Glass making, leather tanning
 B. Steel rolling, plastic making
 C. Motor vehicle assembling, tourism
 D. Bicycle repair, soap making
14. People who leave their country to go and settle in another country are known as
 A. emigrants
 B. immigrants
 C. delegates
 D. refugees.
15. The **main** tourist attraction in Lake Nakuru is
 A. flamingoes
 B. wildlife
 C. hot springs
 D. waterfalls.
16. The kingdom of Old Ghana was founded by
 A. Mande speakers
 B. Soninke
 C. Almoravids
 D. Tuaregs
17. Which one of the following is a common characteristic of religious and civil marriages?
 A. The ceremony is conducted by a government official
 B. A marriage certificate is issued
 C. Polygamy is allowed
 D. Ceremony is conducted in a worship place
18. The branch of the Rift Valley that runs from Lake Turkana to the North of lake Malawi is known as?
 A. Northern branch
 B. Eastern branch
 C. Ethiopian Rift Valley
 D. The western branch
19. Below are characteristics of a climatic region in Africa.
 (i) Experienced in Mozambique
 (ii) Rainfall ranges between 900mm - 1150mm
 (iii) Both relief and convectional rainfall are received
 (iv) Most rainfall comes in summers
 The climatic region described above is
 A. Mediterranean
 B. Tropical
 C. Warm temperate
 D. Equatorial.
20. The party that led Zimbabwe to independence was
 A. ZANU
 B. ZANU PF
 C. ZAPU
 D. ANC.
21. The type of internal migration that leads to low agricultural output is
 A. urban - rural
 B. rural - urban
 C. urban - urban
 D. rural - rural
22. Which one of the following statements is **true** about the population of Kenya, India and Germany?
 A. There are slightly more females than males
 B. Urban centres are densely populated
 C. Majority of the people live in urban centres
 D. Consists of youthful population

23. Which one of the following is **not** an objective of ECOWAS?
- Promote regional disputes and conflicts
 - Promote unfriendly relations
 - Impose taxes on goods produced in the region
 - Promote free movement of people in the region
24. The position of the midday sun is influenced by
- rotation of the earth
 - titration of the earth
 - revolution of the earth
 - rising and setting of the sun.
25. Which one of the following is an economic right? Right to
- own property
 - life
 - freedom of worship
 - vote.
26. In the law of succession, the authority to manage the estate is known as
- letters of administration
 - a will
 - succession
 - Inheritance.
27. Which season is experienced in North Africa during the month of June?
- Winter
 - Summer
 - Spring
 - Autumn
28. Which one of the following statements describes the political organization of the San during the pre-colonial period?
- They made decision through agreements
 - They lived in caves
 - They were ruled by hereditary chiefs
 - They kept livestock
29. Which one of the following is **not** a cause of soil erosion?
- Monocropping
 - Fallowing
 - Devegetation
 - Overcropping
30. Which one of the following weather instruments is kept in the Stevenson's Screen?
- Rain gauge
 - Barometer
 - Anemometer
 - Hygrometer
31. Rapid population growth in Kenya has **mainly** been influenced by
- lack of family planning
 - government policy
 - improved healthcare
 - better nutrition.
32. Which one of the following factors is likely to cause climate change in Africa?
- Height above sea level
 - Setting up of industries
 - Nearness to large water body
 - Distance from the equator

33. Who takes minutes during staff meetings?
- Headteacher
 - Chairperson
 - Senior teacher
 - Deputy headteacher
34. The following are horst mountains **except**
- Usambara
 - Pare
 - Nyirangongo
 - Danakil Alps
35. Another name for shifting cultivation is
- bush fallowing
 - cash crop farming
 - slash and burn
 - mixed farming.
36. Three of the following are functions of IEBC. Which one is **not**?
- Determines the boundaries of constituencies
 - Registers voters
 - Recruits election officials
 - Nominates members of political parties
37. Nick, who is a standard eight boy on his way to school found a grade two girl who had been raped. What was the **best** action for him to take?
- Report to the headteacher
 - Take the girl to hospital
 - Give the girl first aid
 - Report to the police
38. Below are descriptions of a leader among the African communities
- He was the king of Barotse land
 - He collaborated with the British
 - Was made a paramount chief
- Lenana
 - Samori Toure
 - Lewanika
 - Kabaka Mutesa I
39. The forest conservation measure that involves the growing of crops together with trees is
- afforestation
 - deforestation
 - agroforestry
 - re-afforestation.
40. Which is the quickest and most reliable means of passing information to a large number of people
- mobile phone
 - radio
 - television
 - video.
41. The road sign below means



- entry prohibited
- stop
- bumps ahead
- speed limit

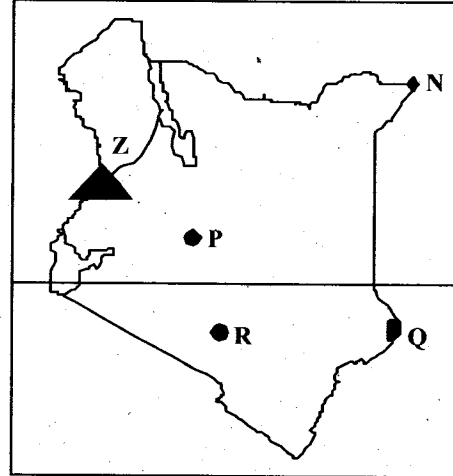
42. The following are description of certain fishing method.
- (i) A net stretched across the rivers or oceans
 - (ii) The net has weights on lower end and floaters at the top
 - (iii) In the ocean , the net can be stretched between two boats

The method described above us

- A. net drifting
 - B. trawling
 - C. purseining
 - D. longlining.
43. The following are uses of flouspar **except**
- A. manufacture cement
 - B. making chalk
 - C. making storage cans
 - D. strengthening of steel.
44. All of the following are members of COMESA **except**
- A. Mauritius
 - B. Tanzania
 - C. Libya
 - D. Sychelles.
45. John and James had a conflict. They decided to go to court to settle their dispute. The method of settling dispute they used is called
- A. mediation
 - B. arbitration
 - C. conciliation
 - D. litigation.

7

Use the map of Kenya below to answer questions 46 - 49.



46. The town marked **R** is likely to be
- A. Eldoret
 - B. Nakuru
 - C. Baringo
 - D. Garissa.
47. The Pre-historic sites marked **P** is
- A. Olorgesaille
 - B. Kariandusi
 - C. Chesowanja
 - D. Peninj
48. The river marked **Z** is
- A. Kerio
 - B. Omo
 - C. Turkwel
 - D. Nyando.
49. The Game reserve marked **Q** is
- A. Arawale
 - B. Boni
 - C. Dondori
 - D. Malka Mari.
50. The British used indirect rule in Northern Nigeria **mainly** because
- A. they did not want trouble
 - B. the country was large
 - C. the existing communities were ready to assist
 - D. they did not have enough administrators.

51. Below are facts about people in the society.
- (i) *People participate in the government*
 - (ii) *There is promotion of peace*
 - (iii) *People are treated fairly and equally*
 - (iv) *There is promotion of freedom*

The above statements refers to

- A. principles of democracy
 - B. factors that promotes peace
 - C. importance of peace
 - D. benefits of democracy.
52. The **main** method of irrigation used at Perkerra Irrigation Scheme is
- A. basin
 - B. canal
 - C. furrow
 - D. sprinkle.

53. The following are contribution of an African leader.
- (i) *Founder member of a youth league*
 - (ii) *Retired voluntarily as a president after ruling for one term*
 - (iii) *Participated in peace talks in many countries*

The leader described above is

- A. Leopold Senghor
 - B. Nelson Mandela
 - C. Kwameh Nkruma
 - D. Julius Nyerere.
54. Below are characteristics of a vegetation in Africa.
- (i) *Trees are conical in shape*
 - (ii) *Trees have deep roots*
 - (iii) *Consists of lavender, thyme, pine and fir*

The vegetation described above is

- A. Equitorial
- B. Mediterranean
- C. Montain
- D. Desert.

55. One can become a Kenyan citizen in three of the following ways **except**
- A. applying for dual citizenship
 - B. registration
 - C. recommendation by government officers
 - D. when one is born by Kenyan parents living abroad.

56. The process where citizens vote for a proposed constitution is known as
- A. referendum
 - B. census
 - C. concensus
 - D. litigation.

57. Three of the following are symbols of national unity **except**
- A. The constitution
 - B. Public seal
 - C. Coat of arms
 - D. National anthem.

58. Three of the following are members of the county executive committee **except**
- A. county representative
 - B. governor
 - C. county secretaries
 - D. deputy governor.

59. Members of the Natonal Police Service are normally present at a political rally so as to
- A. guide motorists on where to park
 - B. maintain law and order
 - C. welcome the guests to the platform
 - D. direct the programme.

60. Parliamentary candidates in Kenya are required by the law to have attained minimum the age of
- A. 55 years
 - B. 18 years
 - C. 35 years
 - D. 21 years.

**SECTION II: CHRISTIAN RELIGIOUS
EDUCATION**

61. The **main** reason why Adam and Eve were thrown out of the Garden of Eden because they
- ate the fruit from the tree of life
 - spoke with the snake
 - disobeyed the ten commandments
 - ate the fruit from the tree of knowledge.
62. Who among the following was the lastborn of Noah?
- | | |
|-----------|---------|
| A. Japeth | B. Shem |
| C. Ham | D. Seth |
63. Who is the founder of the nation of Israel?
- | | |
|----------|------------|
| A. Jacob | B. Abraham |
| C. Saul | D. David |
64. When God called Moses, he was not willing to go back to Egypt **mainly** because
- he was afraid of the king
 - he was not a good speaker
 - there was famine in Egypt
 - the Israelites lacked identity of him.
65. Which one of the following was done by King David?
- Built the temple in Jerusalem
 - Made Jerusalem a centre of worship
 - Defeated the Medianites with 300 soldiers
 - Defeated prophets of Baal on Mt. Carmel
66. What lesson do Christians learn from the story of Elisha making the axe float?
- Not to borrow things
 - Ask for help
 - Taking care of the people's property
 - The joy of constructing temples.
67. What is the **main** lesson that Christians learn from the story of Ahab and Naboth's vineyard?
- To be contested with what they have
 - To work hard
 - It is good to acquire property
 - Be unjust and fair
68. Who among the following sons of Solomon succeeded him as a king?
- | | |
|-------------|-------------|
| A. Jeroboam | B. Rehoboam |
| C. Manasseh | D. Absolom |
69. The prophet of the new covenant is
- | | |
|-------------|-----------|
| A. Isaiah | B. Daniel |
| C. Jeremiah | D. Joel. |
70. Which one of the following is the true prophecy about John the Baptist?
- He is the lamb of God
 - He would prepare the way for Jesus Christ
 - He would be conceived by the power of the Holy Spirit
 - He would be killed like other prophets
71. The angel told Joseph that the child to be born by Mary would be called Jesus because he would be
- God with his people
 - Conceived by the power of the holy spirit
 - The anointed one
 - Saviour of mankind.
72. Another name for the disciple of Jesus known as Bartholomew was
- | | |
|---------------------|-------------|
| A. James the Zealot | B. Philip |
| C. Nathaniel | D. Didymus. |
73. Which miracle of Jesus shows that he has power to forgive sins?
- Healing the blind man
 - Healing the Centurion's servant
 - Healing the paralyzed man
 - Raising Lazarus
74. The parable of Jesus that teaches about persistence in prayer is
- The sower
 - Pearl
 - Friend at midnight
 - Good Samaritan
75. When satan told Jesus to throw Himself down from the pinnacle of a temple, Jesus answered him and said
- man shall not live on bread alone
 - you shall worship the Lord your God
 - Angels will take good care of me
 - you shall not test the Lord your God.

76. *"Happy are you when people insult you and tell all kind of evil lies against you because you are my followers..."*
 A. a great reward is kept for you in heaven
 B. kingdom of heaven belongs to you
 C. God will satisfy you full
 D. God will call you his children."
77. What is the **main** lesson that Christians can learn from the resurrection of Jesus?
 To be
 A. obedient B. hopeful
 C. faithful D. honest.
78. On the day of Pentecost
 A. a lame man walked
 B. Peter preached
 C. a voice was heard from heaven
 D. heaven opened.
79. Who among the following baptised the Ethiopian Eunuch?
 A. Paul B. James
 C. Philip D. Peter
80. Which one of the following activities in the early church shows a gift of the holy spirit?
 A. Performing miracles
 B. Living in joy
 C. Sharing their belongings
 D. Persevering persecutions
81. How did the traditional African communities express love and peace to one another?
 A. Making sacrifices
 B. Shaking hands
 C. Pouring libations
 D. Visiting shrines
82. Which practice in Africa societies is similar to baptism in christianity?
 A. Naming B. Marriage
 C. Initiation D. Burial
83. The children were taught good behaviours in the evenings through
 A. myths B. riddles
 C. legends D. folktales.
84. Which one of the following is **true** about traditional African religious practices and Christianity?
 A. They have founders
 B. They have holy books
 C. They believe in heaven
 D. They have holy places of worship
85. What advice can you give to Jenny who is suffering from a dreaded skin disease?
 A. Eat balanced diet
 B. Go to hospital
 C. Go for prayers
 D. Avoid mixing with others
86. The **best** way for a standard eight to spend her leisure time is
 A. reading the Bible
 B. attending music concert
 C. playing basketball with friends
 D. visiting children's home.
87. Self control best shown when Christians?
 A. help the needy
 B. respect leaders
 C. preach the gospel
 D. tolerate their enemies
88. You have discovered that your friend abuses drugs. As a Christian the **best** action for you to take is to
 A. advise him to stop schooling
 B. advise him to see a counsellor
 C. avoid relating with him completely
 D. tell the mother to your class teacher.
89. What is the **best** way for Christians to use their wealth?
 A. providing help to the needy
 B. building churches
 C. paying school fees to their children
 D. expand their business
90. The **main** reason why Christian are against drug abuse is because it
 A. defiles the body
 B. leads to addition
 C. causes crime in the community
 D. leads to wastage of money.

SECTION II: ISLAMIC RELIGIOUS EDUCATION

61. 'Therefore, when you have finished your daily task, devote yourself to Allah's worship' This verse is from
A. Al-Humaza B. Al-Inshiraah
C. Al-Zilzala D. Al-Alaq
62. Which one of the following is **not** a lesson from surah Al-Inshiraah?
A. Allah is always there for those who serve Him.
B. Allah removes the burden of ignorance.
C. The prophet too faced difficulties.
D. During the day of judgement the earth will shake.
63. Which surah **must** be recited in all prayers?
A. Surah - Al - Ikhlas
B. Surah - Al - Bayyinah
C. Surah - Al-Faliha
D. Surah - Al- Humaza
64. Muslims protect themselves from evil by reciting surah
A. An-Nas B. Al- Masad
C. Al - Falaq D. Al-Zilzalah.
65. In which surah does Allah warns the disbelievers about worshipping idles?
A. Al-Bayyinah
B. Al-Imran
C. Al-Qaariah
D. Al-Qafirun.
66. Complete the hadith,... 'whoever is not thankful to people is not thankful to'
A. parents B. employer
C. friends D. Allah.
67. Three of the following should be done to someone who is about to die **except** one. Which one?
A. Lie on his right side and face Qiblah
B. Gently made to say the shahada
C. His mouth should be closed
D. Place sweet-smelling things around them
68. Which one is **not** among the manners of toileting?
A. Entering with the left leg
B. Speaking while in the toilet
C. Reciting dua while in the toilet
D. Covering of the head
69. Believing in the day of judgement is a pillar of
A. Iman
B. Ihsan
C. Islam
D. Swalat.
70. Three of the following can nullify saum except one. Which one?
A. Fasting without intention (Niyyat)
B. Getting heidh or nifaas for women
C. Vomiting intentionally
D. Swallowing water during wudhu accidentally.
71. Which is the **correct** order in the rituals for the dead?
A. Washing shrouding, burying, praying
B. Shrouding, washing, burying, praying
C. Washing, shrouding, praying, burying
D. Shrouding, praying, washing, burying
72. Omar, a standard eight boy, bullies and beat class four boys. Which is the **best** act you can take against him?
A. Report him to his parents
B. Tell the classteacher
C. Advise him on importance of being kind to others
D. Organise to revenge
73. Islam is trying to curb the spread of HIV and AIDS by the following ways **except** one. Which one?
A. Use of condom
B. Marrying and being faithful
C. Fasting
D. Avoid Zinnah
74. The **main** reason why punctuality is emphasised in Islam is that
A. it makes people finish duties on time
B. it makes people praised
C. it promote a sense of responsibility
D. it promote self-discipline.
75. Which one is **not** a lesson from the story of Nabii Nuh?
A. Allah is All -powerful
B. Only those who heed to Allah survives
C. Floods are as a result of disobedience
D. Allah works in various ways in fulfilling His will.

76. Which two tribes were always in constant disagreement during the pledges of Aqabah?
 A. Aus and Khazraj
 B. Khasraj and Baiduin
 C. Aus and Banu Izrail
 D. Aus and Kureish
77. Which one of the following event took part in Cave Hira?
 A. Revelation of the Quran
 B. The prophet hid from Quraish
 C. Receiving of the five fardh prayers
 D. The farewell speech
78. Which attribute of Allah means the designer?
 A. Al-Baari
 B. Al- Khaliq
 C. Al-Qahhar
 D. Al-Muswawwir
79. Taurat was given to prophet
 A. Issa
 B. David
 C. Musa
 D. Ibrahim.
80. The total fear of Allah is called
 A. Tawakul
 B. Ihsaan
 C. Taqwa
 D. Istiqama
81. The **best** way Fatuma can show appreciation to her deceased parents is by
 A. cementing their graves
 B. offering dua for them
 C. naming her children after them
 D. preserving their pictures.
82. Which one of the following is **not** among the preparations for Friday prayers?
 A. Cutting of the nails
 B. Taking bath (ghusl)
 C. Fasting
 D. Using perfume if possible
83. Which statement about Eddat is **true**?
 A. It takes fourty days
 B. It nullifies saum
 C. During observing Eddat, a woma should not pray
 D. It nullifies wudhu.
84. Most of the communities along the coast of Eastern Africa embraced Islam because
 A. they intermarried with Arabs
 B. they admired the Islamic lifestyle
 C. they traded with Arabs
 D. they were colonised by Arabs.
85. Which one consist of major Najaasaat?
 A. Pig, Stool, Urine
 B. Blood, stool, swine
 C. Urine, stool, swine
 D. Stool, stool, puppy
86. Allah has _____ beautiful known names.
 A. 999
 B. 100
 C. 99
 D. 700
87. When a person dies, all his deeds stops **except** three. Which one is among the three?
 A. His wealth
 B. His family
 C. Continous charity
 D. His ambitions
88. Muslims celebrated Eidul adh-ha month of
 A. Shaaban
 B. Dhul-Hijjah
 C. Ramadhan
 D. Muharram.
89. The **main** reason why Yusuf forgave his brothers was because
 A. they asked for forgiveness
 B. he loved them dearly
 C. Allah told him in a dream
 D. they were suffering
90. Offering sacrifices to the ancestors is a form of
 A. Kafarah
 B. Shirk
 C. Sadaqa
 D. Kalimah.