

MONITORING LEARNERS PROGRESS
PRE-PRIMARY TWO (PP2) - YEAR 2021
NUMBERWORK ACTIVITIES



NAME: _____

SCHOOL: _____

DATE: _____

1. Fill the missing numbers

- (a) 3, _____, _____
 (b) 9, _____, _____
 (c) 15, _____, _____
 (d) 2, _____, _____
 (e) 7, _____, _____

2. Write in words

- 7 - _____
 2 - _____
 5 - _____
 6 - _____
 1 - _____

3. Put together (+)

- $6 + 1 =$ _____
 $2 + 4 =$ _____
 $1 + 5 =$ _____
 $3 + 4 =$ _____

| | | |
|-------|-------|-------|
| 7 | 2 | 4 |
| + 1 | + 8 | + 4 |
| _____ | _____ | _____ |
| _____ | _____ | _____ |

4. Take away (-)

- $6 - 4 =$ _____
 $4 - 2 =$ _____
 $3 - 1 =$ _____
 $9 - 3 =$ _____
 $8 - 4 =$ _____

5. How many? Circle the number

(a)  = 7 3 2

(b)  = 6 8 5

6. Draw the value

- 10 = _____
 6 = _____
 8 = _____
 5 = _____

MONITORING LEARNERS PROGRESS
PRE-PRIMARY TWO (PP2) - YEAR 2021
LANGUAGE ACTIVITIES



NAME: _____

SCHOOL: _____

DATE: _____

1. Dictation

2. Fill the missing sounds to make words

b__g __gg p__t p__n

3. Write in capital letters

tin - _____

ban - _____

bed - _____

hot - _____

4. Draw the pictures

| Log | Tree | Mat | Dot |
|-----|------|-----|-----|
| | | | |

5. Fill the missing sounds

a, _____

j, k, _____, q, r, _____

_____, v, w, x, y, z.

MONITORING LEARNERS PROGRESS
PRE-PRIMARY TWO (PP2) - YEAR 2021
LITERACY ACTIVITIES



NAME: _____

SCHOOL: _____

DATE: _____

1. Read these words:-

| | | | | |
|-----|-----|-----|------|-----|
| cat | boy | at | hen | leg |
| got | pig | an | ball | web |
| bus | bed | rat | bag | van |

2. Read the sentences below:-

a fat cat
six big tins
a red peg
ben has a web

KUSOMA

1. Soma maneno haya:-

| | | | |
|------|------|------|------|
| mate | sisi | kaka | baba |
| ua | ni | miti | hiki |
| moto | | | |

2. Soma sentensi hizi:-

Mama anakula.
Mtoto anasoma.
Huyu ni mama.
Kalamu yangu.
'Hiki ni kitabu.

MONITORING LEARNERS PROGRESS

PRE-PRIMARY TWO (PP2) - MWAKA 2021

SHUGHULI ZA KISWAHILI



JINA: _____

SHULE: _____

TAREHE: _____

1. Imla

2. Kamilisha silabi

Sa, ____, ____, ____, su

__, ____, mi, mo, __

La, ____, li, ____, __

Pa, pe, ____, ____, __

3. Andika kwa herufi

ndogo

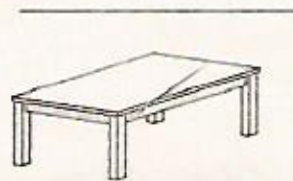
BATA - _____

JANI - _____

MTI - _____

SITA - _____

4. Andika majina ya picha hizi



5. Andika kwa maneno

9 - _____

6 - _____

3 - _____

6. Unganisha silabi hizi kuunda jina

Ki + ti = _____

Me + za = _____

Mo + to = _____

Ba + ba = _____

MONITORING LEARNERS PROGRESS

PRE-PRIMARY TWO (PP2) - YEAR 2021



ENVIRONMENTAL ACTIVITIES & RELIGIOUS ACTIVITIES

NAME: _____

SCHOOL: _____

DATE: _____

1. Draw the classroom objects

| Chair | Book | Table | Rencil |
|--------------|--------------|--------------|--------------|
| | | | |

2. Our school is called _____.

3. Where do pupils learn? _____
(Hospital, School)

4. A hen has _____ legs. (4, 2)


C.R.E

5. Who created all things _____.
(satan, God)

6. Draw and colour

| Church | Sun | Bible | Moon |
|--------------|--------------|--------------|--------------|
| | | | |

7. Colour the weather symbols



MONITORING LEARNERS PROGRESS PRE-PRIMARY TWO (PP2) - YEAR 2021



PSYCHOMOTOR & CREATIVE ACTIVITIES

NAME: _____

SCHOOL: _____

DATE: _____

1. Name the weather symbols







2. Complete the patterns

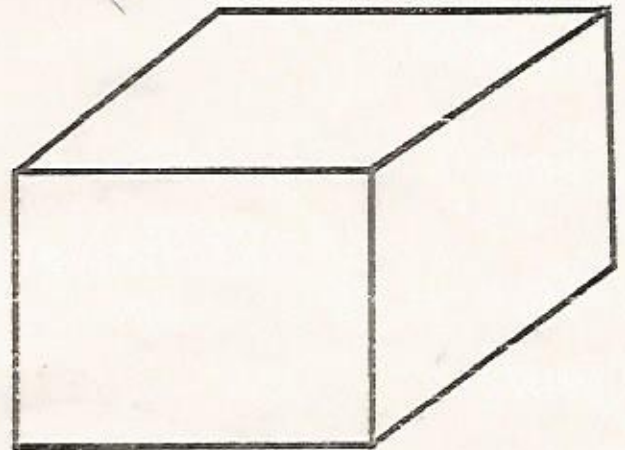
○ ○ × ○ ○ × _____

⊙ △ ≠ ⊙ △ ≠ _____

△ ▽ ||| △ ▽ ||| _____

☺ h 🐔 ☺ h 🐔 _____

3. Colour the box below



4. Draw the following pictures

| Sun | Star |
|-----|------|
| | |