

# STANDARD FOUR END TERM 2 EXAM, 2018

## SCIENCE

Time: 1hrs 40min

1. An adult person has \_\_\_\_\_ teeth in total
- A. 28
  - B. 36
  - C. 32
  - D. 24

2. The leaf below is likely to be of a \_\_\_\_\_ plant



- A. bean
  - B. maize
  - C. pea
  - D. coffee
3. Which one of the following is **not** seen in the sky during the day time?
- A. Clouds
  - B. Sun
  - C. Moon
  - D. Stars
4. \_\_\_\_\_ is the home of plants or animals
- A. Forest
  - B. Habitat
  - C. Wildlife
  - D. House
5. The sun sets in the \_\_\_\_\_ direction.
- A. North
  - B. South
  - C. West
  - D. East

6. The type of teeth below is called



- A. premolar
- B. molar
- C. canine
- D. incisor

7. The following are harmful animals. Which one is **not**?
- A. Rat
  - B. Cat
  - C. Mosquito
  - D. Snake
8. A plant growing where it is **not** wanted is called a \_\_\_\_\_
- A. beans
  - B. maize
  - C. weed
  - D. crop
9. Choose the **wrongly** matched sense organ.
- A. Eye - hearing
  - B. Nose - smelling
  - C. Tongue - taste
  - D. Skin - touch
10. Which food is **not** good for our teeth?
- A. Sugarcane
  - B. Carrots
  - C. Cakes
  - D. Milk
11. The letter A in the word AIDS stands for Acquired. This means \_\_\_\_\_
- A. get from
  - B. immuno
  - C. lack of
  - D. many signs
12. The following are ways of making water safe for drinking **except** \_\_\_\_\_
- A. storing
  - B. adding chemicals
  - C. filtering
  - D. boiling
13. Tooth decay is also known as \_\_\_\_\_
- A. tooth cavity
  - B. dental carries
  - C. gingivitis
  - D. bad breath

Use the chart below to answer questions 14 - 15

Day	Morning	Afternoon
Monday		
Tuesday		
Wednesday		
Thursday		
Friday		

Key

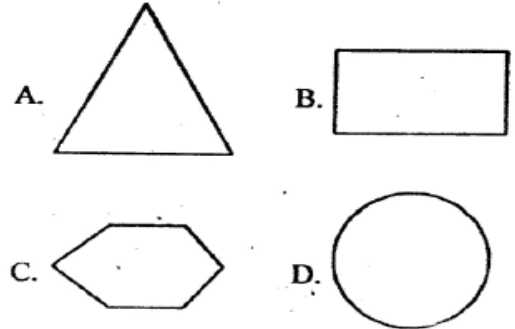
Cloudy	Calm	Windy	Rainy	Sunny

14. Which day was best for washing clothes?
  - A. Wednesday
  - B. Tuesday
  - C. Friday
  - D. Monday
15. Which day did the children carry umbrella to go to school?
  - A. Friday
  - B. Thursday
  - C. Monday
  - D. Tuesday
16. \_\_\_\_\_ is watering of plants.
  - A. Shading
  - B. Mulching
  - C. Uprooting
  - D. Irrigation
17. Which one is **not** a characteristic of animals?
  - A. Reacting to change
  - B. Making food
  - C. Reproduction
  - D. Movement
18. Moving air is called
  - A. wind
  - B. dust
  - C. vapour
  - D. gas
19. \_\_\_\_\_ are chemicals used to kill weeds.
  - A. Pesticides
  - B. Spray
  - C. Herbicides
  - D. Acaricides

20. Which animals hide in their shells when touched?

- A. Millipede and centipede
- B. Centipede and snake
- C. Snail and tortoise
- D. Locusts and cockroach

21. The best shape for a wheel is



22. When biting a banana, we use
  - A. incisors
  - B. canines
  - C. premolars
  - D. molars
23. A healthy person needs three of the following except
  - A. starvation
  - B. food
  - C. sleep
  - D. exercise
24. Which one of the following is not a domestic animal?
  - A. Cat
  - B. Dog
  - C. Lion
  - D. Cow
25. The chisel-shaped teeth are used for
  - A. biting
  - B. chewing
  - C. grinding
  - D. tearing
26. We use the sense of \_\_\_\_\_ to see
  - A. sight
  - B. smell
  - C. touch
  - D. ear

27. The weather shown below is



- A. cloudy
- B. sunny
- C. windy
- D. rainy

28. A chameleon protects itself by

- A. playing dead
- B. changing colour
- C. flying
- D. running away

29. Which one of the following is **not** a poultry?

- A. Chicken
- B. Duck
- C. Goat
- D. Turkey

30. Which one of the following is **not** a use of water in the farm?

- A. Irrigation
- B. Cooking
- C. Mixing chemicals
- D. Cleaning farm tools

31. The word deficiency means

- A. lack of
- B. many signs
- C. give to
- D. got from

32. A snail moves by

- A. swimming
- B. walking
- C. slithering
- D. crawling

33. A doctor who treats our teeth is called

- A. nurse
- B. optician
- C. dentist
- D. surgeon

34. We get \_\_\_\_\_ when bitten by a mosquito.

- A. cholera
- B. malaria
- C. HIV
- D. typhoid

35. The best soil for modelling is

- A. clay
- B. sand
- C. loam
- D. silt

36. The leaves shown below belong to a weed called



- A. pigweed
- B. datura
- C. black jack
- D. oxalis

37. When is the shadow of a tree shortest?

- A. Mid night
- B. Morning
- C. At noon
- D. Evening

38. Which of the following types of teeth is **not** correctly matched with its function?

- A. Molars - grinding
- B. Premolars - crushing
- C. Canines - cutting
- D. Incisors - gripping

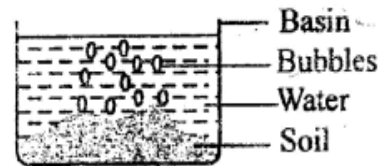
39. The animal shown below moves by




- A. slithering
- B. grinding
- C. walking
- D. hopping

40. Those people who see things far away and not clear are  
 A. long sighted  
 B. short sighted  
 C. deaf  
 D. blind
41. Which one is not part of an insect?  
 A. Head  
 B. Thorax  
 C. Gills  
 D. Abdomen
42. \_\_\_\_\_ soil has the largest particles  
 A. Sand  
 B. Loam  
 C. Clay  
 D. Silt
43. A doctor who looks after our eyes is called  
 A. dentist  
 B. optician  
 C. nurse  
 D. verterinary
44. Three of the following are natural sources of light. Which one is not?  
 A. Sun  
 B. Stars  
 C. Fire  
 D. Glow worms
45. There are \_\_\_\_\_ premolars in an adult person  
 A. 12  
 B. 8  
 C. 6  
 D. 4
46. Which animal is correctly matched?
- | Animal       | Where it lives |
|--------------|----------------|
| A. Mouse     | Water          |
| B. Spider    | Air            |
| C. Fish      | Land           |
| D. Earthworm | Soil           |

47. The bubbles in the water shows that there is \_\_\_\_\_ in the soil.



- A. air  
 B. humus  
 C. living things  
 D. water
48. Which one is not a source of water?  
 A. River  
 B. Tap  
 C. Stream  
 D. Rainfall
49. The rain-bearing clouds are called  
 A. nimbus  
 B. cumulus  
 C. stratus  
 D. cirrus
50. What name is given to the diagram below?



- A. Spider  
 B. Pattern  
 C. Spider web  
 D. Habitat