

MONITORING LEARNERS PROGRESS

S A S O N
0 0 2

GRADE 4 - YEAR: 2021

SCIENCE & TECHNOLOGY / AGRICULTURE / HOMESCIENCE




Time: 1 Hr 40 Min.

SCIENCE & TECHNOLOGY

1. Name **two** plants that grow in your locality. (2 marks)

2. List 3 characteristics of plants. (3 marks)


3. Below are some animals that are found in our locality.



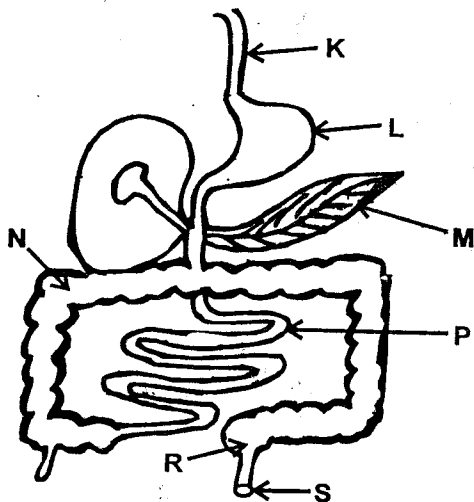
Group the above animals in the table below as either vertebrates or invertebrates. (6 marks)

Vertebrates	Invertebrates

4. Draw a plant in the space below and label any 3 parts. (3 marks)



5. Below is the digestive system of a human being.



Name the above labelled parts.

(7 marks)

K - _____

P - _____

L - _____

R - _____

M - _____

S - _____

N - _____

6. What is pollution? _____ (1 mark)

7. List 3 things that pollute water. _____ (3 marks)

8. List 2 effects of air pollution. _____ (2 marks)

9. List 2 ways of reducing air pollution. _____ (2 marks)

10. We filter water to remove _____ (1 mark)

Assessment Rubrics - Science and Technology

Level	4	3	2	1
Score	28 - 30	19 - 27	10 - 18	0 - 9

AGRICULTURE

1. State the **three** types of soil. (3 marks)

2. List any 4 materials for making compost manure. (4 marks)

3. Outline 2 importance of compost manure in farming. (2 marks)
4. Drip irrigation helps in _____ water. (1 mark)
5. List any 3 uses of water in farming. (3 marks)
6. Draw a scarecrow in the space below. (2 marks)
-
7. List any 4 small wild animals that destroy crops and domestic animals. (4 marks)
8. State any 4 fruit trees that are growing in your locality. (4 marks)
9. What is transplanting? (1 mark)
10. Outline 4 ways of taking care of the young fruit trees. (4 marks)
11. List one product we obtain from each of these domestic animals. (2 marks)
- (a) Goat - _____
- (b) Sheep - _____

Assessment Rubrics - Agriculture

Level	4	3	2	1
Score	28 - 30	19 - 27	10 - 18	0 - 9

HOMESCIENCE


1. List any 4 needs of a child for healthy development. (4 marks)


 2. Outline any 3 qualities to look for when choosing suitable play items for a child. (3 marks)

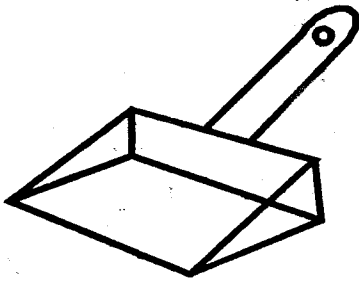
 3. List any 5 common illnesses in the locality. (5 marks)

 4. List 4 healthy practices that prevent illnesses in the locality. (4 marks)

 5. Name the following items. (3 marks)

(a)	(b)	(c)
-----	-----	-----
- 




6. State the 3 types of shoes. (3 marks)

 7. List any 4 materials that can be used to clean shoes. (4 marks)

 8. Give 4 types of fuels used at home. (4 marks)

Assessment Rubrics - Homescience

Level	4	3	2	1
Score	28 - 30	19 - 27	10 - 18	0 - 9