

# JESMA K.C.P.E PREDICTION 2021

010

- SOCIAL STUDIES & RELIGIOUS EDUCATION-



March 2021 - 2 hours 15 minutes



**READ THESE INSTRUCTIONS CAREFULLY**

1. You have been given this question booklet and a separate answer sheet. The question booklet contains 90 questions.
2. Do any necessary rough work in this booklet.
3. When you have chosen your answer, mark it on the **ANSWER SHEET**, not in the question booklet.

**HOW TO USE THE ANSWER SHEET**

4. Use an ordinary pencil.
5. Make sure that you have written on the answer sheet:  
**YOUR INDEX NUMBER**  
**YOUR NAME**  
**NAME OF YOUR SCHOOL**
6. By drawing a **dark line** inside the correct numbered boxes mark your full Index Number (i.e. School Code Number and the three-figure Candidate's Number) in the grid near the top of the answer sheet.
7. Do not make any marks outside the boxes.
8. Keep your answer sheet as clean as possible and do not fold it.
9. For each of the questions 1 – 90 four answers are given. The answers are lettered A, B, C and D. In each case only **ONE** of the four answers is correct. Choose the correct answer.
10. On the answer sheet the correct answer is to be shown by drawing a **dark line** inside the box in which the letter you have chosen is written.

**Example**

**In the question booklet:**

**33.** The rights and freedoms of an individual are protected in a document known as

- A. Bill of rights
- B. Constitution
- C. Charter
- D. Manifesto

The correct answer is **B** (Constitution)

**On the answer sheet:**

**3** | A | B | C | D |    **13** | A | B | C | D |    **23** | A | B | C | D |    **33** | A | B | C | D |    **43** | A | B | C | D |

In the set of boxes numbered **33**, the box with the letter **B** printed in it is marked.

11. Your **dark line** **MUST** be within the box.
12. For each question **ONLY ONE** box is to be marked in each set of four boxes.

**This question paper consists of 12 printed pages. Candidates should check the question paper to ensure that all the pages are printed as indicated and no questions are missing.**



K.C.P.E Prediction

Website: [www.jesmapublishersltd.com](http://www.jesmapublishersltd.com)

E-mail: [jesmapublishers@yahoo.com](mailto:jesmapublishers@yahoo.com)

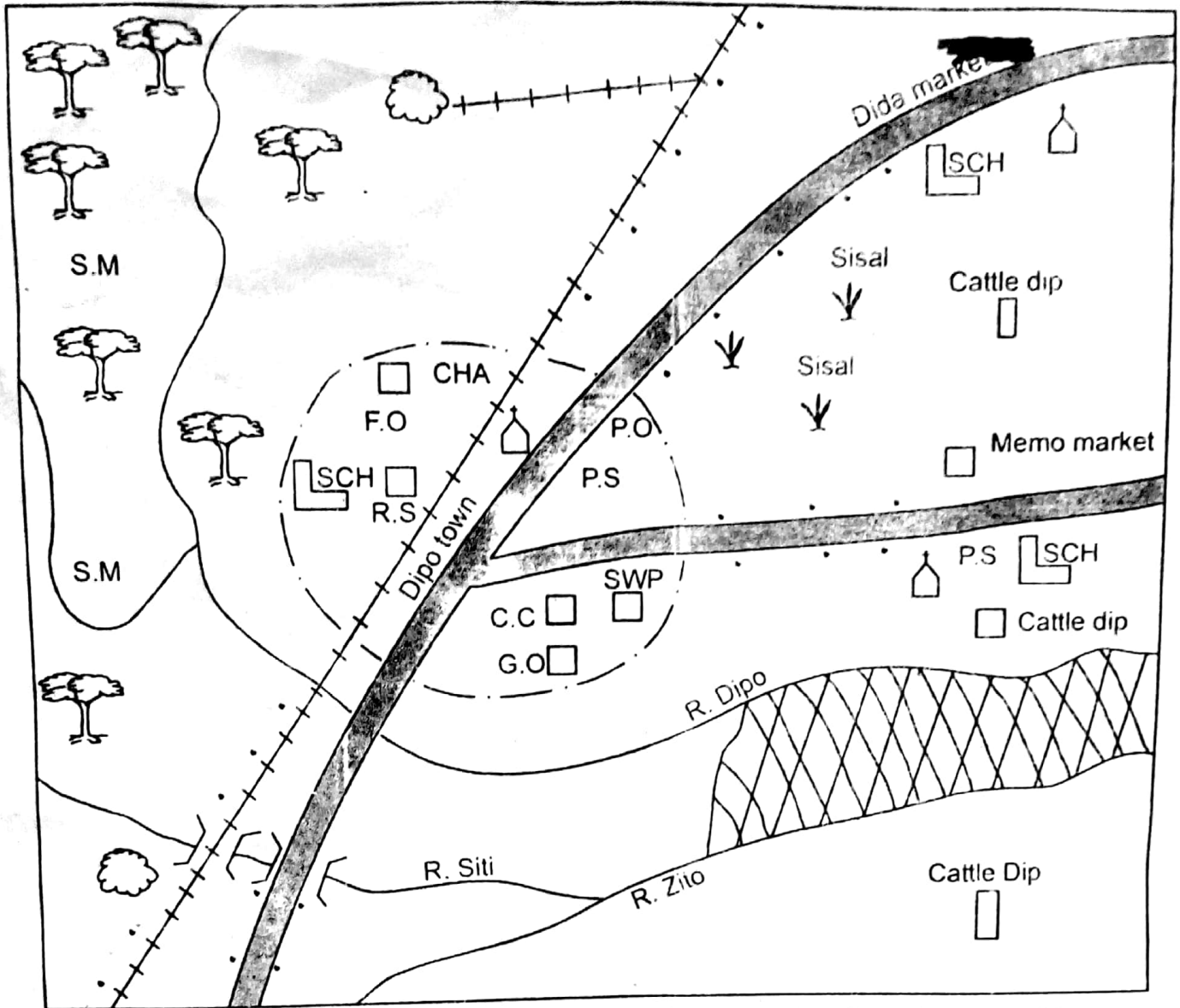
© Jesma Publishers & Education Boosters Ltd. Tel: 2217088/6554346/0701515759/0731207811



Turn Over

# PART I: SOCIAL STUDIES

## DIPO AREA



SCALE: 0 1 2 3 4 5 6 7 8 9 10 11 12 13 14 KM

### KEY

	Quarry
	Permanent buildings
	Railway line
	Human settlement
	Town boundary
	Tarmac road
	Cattle ranch
	Bridge
	Church
<b>R.S</b>	Railway station

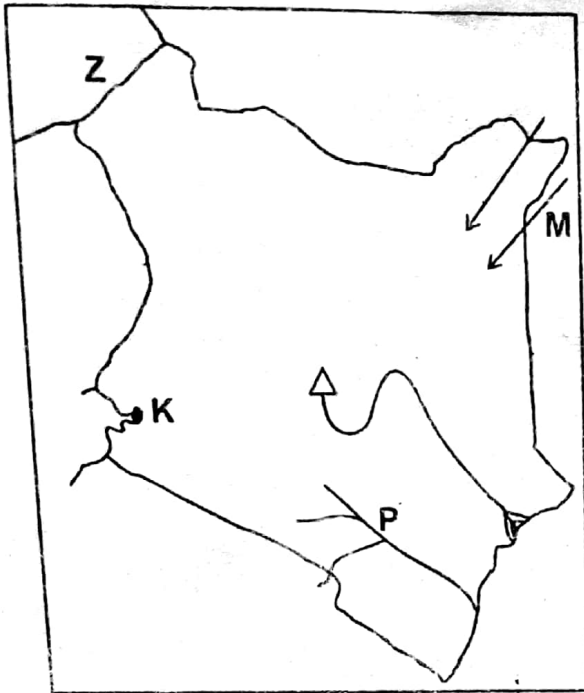
<b>C.C</b>	County commissioner
<b>G.O</b>	Governor's office
<b>P.S</b>	Police station
<b>P.O</b>	Post office
<b>SCH</b>	School
<b>F.O</b>	Forestry office
<b>S.M</b>	Saw mill
<b>CHA</b>	Cinema hall
<b>SWP</b>	Swimming pool

Study the map of DIPO Area provided and answer questions 1-7.

1. The railway line in the area is **LIKELY** to be used to transport
  - A. minerals and passengers.
  - B. passengers only.
  - C. passengers and cattle.
  - D. minerals only
2. What is the approximate length of all the railway lines in Dipo area?
  - A. 18 Km
  - B. 20 Km
  - C. 25 Km
  - D. 22 Km
3. The **MAIN** economic activity in the Eastern part of Dipo area is **LIKELY** to be
  - A. crop farming
  - B. mining
  - C. livestock keeping
  - D. trading
4. What is the direction of the Dida market from Dipo town?
  - A. South West
  - B. North East
  - C. East
  - D. North West
5. The people in Dipo area are **LIKELY** to be
  - A. pagans
  - B. christians
  - C. traditionalists
  - D. muslims
6. The climate experienced on the Southern part of Dida market is **MOST LIKELY** to be
  - A. hot and dry
  - B. hot and wet
  - C. cool and wet
  - D. cool and humid
7. A baby has been born near the forestry office in Dipo town. Which one of the following offices should the new birth be registered?
  - A. Governor's office
  - B. County commissioner's office
  - C. Police station
  - D. Post office
8. The Bantu migrated from the Congo basin **MAINLY** because of
  - A. spirit of adventure.
  - B. the need for fertile soil for cultivation.
  - C. the need for water and pasture for their livestock.
  - D. population pressure.
9. Which one of the following is **TRUE** about revolution and rotation of the Earth?
  - A. Places near the equator receive different amount of heat throughout.
  - B. The Earth rotates from East to West in an anticlockwise direction.
  - C. As the Earth rotates, it also moves around the sun at the same time.
  - D. Rotation of the Earth causes summer, Autumn, Winter and spring seasons.
10. Which one of the following was **NOT** involved in traditional African education in the past?
  - A. Use of wise sayings
  - B. Telling oral stories
  - C. Use of songs and dances
  - D. Reciting poems
11. European countries scrambled for colonies in Africa **MAINLY** in order to
  - A. civilise Africans
  - B. acquire raw materials for their industries.
  - C. get a market from their industrial goods.
  - D. spread christianity in Africa
12. Which one of the following winds are responsible for the dry conditions experienced in the horn of Africa?
  - A. North East trade winds
  - B. South West trade winds
  - C. The Harmattan
  - D. South East trade winds
13. Which one of the following groups of communities belong to the Kwa speakers?
  - A. Hausa, Tuareg, Andarawa
  - B. Wassa, Akwapim, Fanti
  - C. Shona, Ndebele, Yao
  - D. Fulani, Nyamwezi, Xhosa

14. Three of the following are responsibilities of children in a family. Which one is **NOT**? They should
- go to school and work hard.
  - be good role models to their parents.
  - keep family secrets.
  - protect family property.
15. Below are factors that favour the growing of a certain crop
- Cool temperatures
  - High altitude of over 1800 metres above sea level.
  - Well drained and fertile volcanic soils.
  - Well distributed rainfall of between 1000 mm and 1500mm per year.
- The conditions listed above favour the growing of
- tea
  - coffee
  - pyrethrum
  - sugarcane
16. The safest place to cross a busy road in Kenya is a
- sharp bend
  - zebra crossing
  - round about
  - foot bridge
17. Rural to urban migration is **MAINLY** caused by
- good infrastructure in urban areas
  - retirement
  - need for more land for settlement and farming.
  - lack of jobs in rural areas.
18. Maize growing in Kenya and Tanzania is important **MAINLY** because
- it leads to employment in both countries.
  - it is a source of foreign exchange.
  - farmers earn income from maize produce.
  - maize is the staple food in both countries.
19. Which one of the following is a duty of the deputy head teacher in a primary school? He or she
- chairs the school disciplinary committee.
  - writes minutes in a school committee meeting.
  - links the school with the ministry of education.
  - admits new pupils in the school.
20. Which one of the following countries in Africa was **NOT** colonised because her leaders successfully resisted colonial rule?
- Ethiopia
  - Liberia
  - South Africa
  - South Sudan
21. Lake Baringo, Turkana and Naivasha have one thing in **COMMON**. It is that they
- were formed through downwarping.
  - have flamingoes that attract tourists.
  - are all crater lakes.
  - are fresh water lakes in the Rift valley.
22. Conflicts involving pupils in school are **BEST** solved through
- caning
  - corporal punishment
  - dialogue
  - their parents
23. Population distribution in Kenya is **MAINLY** influenced by
- soil fertility
  - climate
  - economic activities
  - urbanisation
24. Which one of the following instrument is **CORRECTLY** matched with the weather element it measures
- speed of wind - wind sock
  - air pressure - aneroid barometer
  - humidity - mercury barometer
  - temperature - anemometer

Use the map of Kenya provided below to answer questions 25 to 28.



25. The town **K** is **LIKELY** to be
- Eldoret
  - Nakuru
  - Kisumu
  - Thika
26. The language group that migrated into Kenya using the route marked **M** is
- Semites
  - Nilotes
  - Bantu
  - Cushites
27. The country marked **Z** is known as
- South Sudan
  - Uganda
  - Ethiopia
  - Sudan
28. The river marked **P** is called
- Tana
  - Athi
  - Ewaso Nyiro
  - Nzoia
29. Which one of the following is **NOT** true about European settler farming in Kenya?
- European settler farming led to creation of African reserves
  - It paved way for settlement schemes in Kenya
  - Europeans introduced crop farming in Kenya.
  - It led to rise of squatter population.

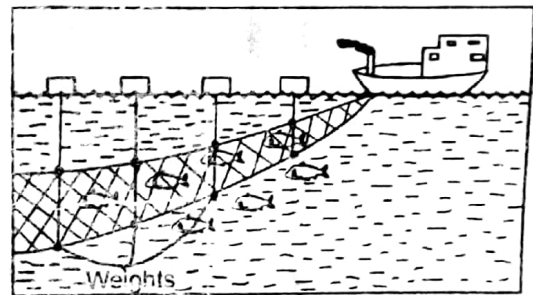
30. Below are statements about a vegetation zone in Africa.

- Scrub vegetation is found in the drier areas.
- Trees have long tap roots to reach underground water.
- Trees are cone shaped and have evergreen leaves.
- The vegetation has a coarse grass species.

The vegetation described above is **LIKELY** to be

- equatorial vegetation
- savannah vegetation
- mediterranean vegetation
- desert vegetation

Use the diagram below to answer question 31



31. The fishing method shown above is **LIKELY** to be
- Net-driftng
  - Purse-seining
  - Trawling
  - Long-lining
32. Natural forests are **MAINLY** conserved because they
- contain rare species of indigenous trees.
  - are sources of timber.
  - are water catchment areas.
  - are home for wildlife
33. Kariba dam was established **MAINLY** in order to
- create a major recreational and tourist attraction.
  - reduce Zambia's reliance on coal from South Africa.
  - increase food production in Zambia and Zimbabwe.
  - create inland water fisheries.

34. A clan is made up of people who
- A. have different ancestors.
  - B. live together in the society.
  - C. were born and initiated at the same time.
  - D. share a common forefather.

35. Which one of the following plateaus is **CORRECTLY** matched with the country where it is found?
- A. Jos - Guinea
  - B. Bie - Nigeria
  - C. Fouta Djallon - Angola
  - D. Jebel Abyad - Sudan

36. Below are descriptions of a prominent leader in Africa.

- (i) He was born in 1906 at Joul.
- (ii) He fought for the French in the Second World war.
- (iii) He led his country to independence in 1960.
- (iv) He voluntarily retired from politics in 1980.
- (v) He was a great poet and author of Francophone literature.

The prominent leader described above is

- A. colonel Gamal Abdel Nasser
- B. Nelson Rolihlahla Mandela
- C. Leopold Sedar Senghor
- D. Julius Kabarage Nyerere

37. The statements below describe a climatic region in Eastern Africa.

- (i) The type of climate is experienced in highland regions.
- (ii) It receives orographic rainfall.
- (iii) Rains are brought by the South East monsoon winds.
- (iv) Rainfall ranges between 1000 mm to 2000 mm annually.

The climatic region described above is **LIKELY** to be

- A. savannah climatic region.
- B. modified tropical climatic region.
- C. modified equatorial climatic region.
- D. mountain climatic region.

38. The **MAIN** imports in Kenya are
- A. petroleum, machinery and electronics
  - B. textiles, soda ash and vegetables
  - C. paper products, oil seeds and gold
  - D. crude oil, livestock products and mobile phones

39. In order to improve and promote the tourism industry in Kenya, the government should
- A. improve roads leading to tourist sites.
  - B. reduce hotel charges
  - C. open new tourist markets
  - D. improve on marketing.

40. Three of the following are reasons as to why Juakali industries are encouraged in Kenya. Which one is **NOT**? To
- A. encourage self-employment.
  - B. absorb school leavers with basic training in carpentry and metal work.
  - C. fulfil the government's policy of making Kenya industrialised.
  - D. increase importation of foreign manufactured goods.

41. The following are rights and freedoms enjoyed by the citizens of Kenya

- (i) Freedom of speech
- (ii) Right to security
- (iii) Right to privacy
- (iv) Right to marry and have children
- (v) Right to life
- (vi) Freedom of association

Which one of the following shows social and cultural rights **ONLY**?

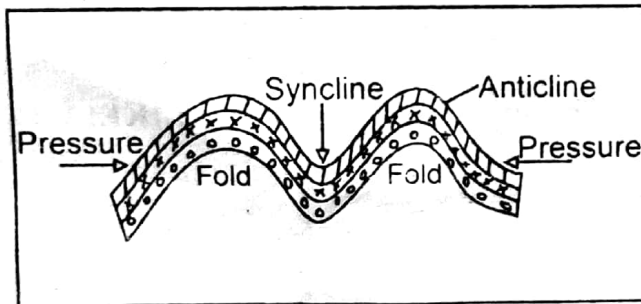
- A. i, iii, iv
- B. ii, iv, v
- C. iv, v, vi
- D. i, iii, iv

42. Mulinge found his brother Kimani drinking alcohol. What would be the right thing for Mulinge to do?
- A. Take Kimani for guidance and counselling
  - B. Take Kimani to the nearest police station
  - C. Pray for Kimani to be saved
  - D. Report Kimani to their headmaster

52. Three of the following are ways through which one may lose Kenyan citizenship if it was acquired through registration. Which one is **NOT**?

- A. If it is discovered that the person was eight years old or less when he/she was found in Kenya.
- B. If the person has, after registration been convicted of treason or an offence and is sentenced to jail.
- C. If the person reveals the secrets of Kenya to enemies of Kenya during war.
- D. If the person acquired Kenyan citizenship by presenting false documents.

Use the diagram below to answer question 53.



53. Which one of the following mountains was formed as a result of the process shown above?

- A. Usambara mountains
- B. Ahaggar mountains
- C. The Great Karas
- D. Drakensburg ranges

54. Which one of the following **DOES NOT** cause conflicts in the society

- A. Poverty
- B. Tolerance
- C. Discrimination
- D. Oppression

55. Which one of the following is **NOT** about Masaku of the Akamba? He

- A. was a great prophet.
- B. resisted the British colonial rule.
- C. was a long distance trader.
- D. relocated from his home to a strange land.

56. Three of the following are true about the African socialism. Which one is **NOT**? It

- A. is based on African traditional values.
- B. was introduced in 1965 as Sessional Paper Number 10.
- C. is based on three pillars of peace, love and unity.
- D. was introduced in parliament by Thomas Joseph Mboya.

57. The Trans-Africa II highway connects all the following countries **EXCEPT**

- A. South Africa
- B. Nigeria
- C. Kenya
- D. Cameroon

58. Which one of the following is **WRONG** about direct democracy?

- A. All individuals are involved in making decisions on their issues.
- B. People become owners of the laws they make.
- C. It applies in small groups of people.
- D. Individuals elect representatives to make decisions on their behalf.

59. The following are sub-ordinate courts in Kenya **EXCEPT**

- A. Industrial court
- B. Kadhi's court
- C. High court
- D. Court Martial

60. During evolution, fire was discovered by the

- A. Homo sapiens
- B. Ramapithecus
- C. Homo erectus
- D. Homo sapiens sapiens

## PART II: RELIGIOUS EDUCATION SECTION A

### CHRISTIAN RELIGIOUS EDUCATION

61. According to Genesis story of creation, God rested on the seventh day and set it as a special day **MAINLY** because?
- A. he was tired after creation.
  - B. he was happy with creation.
  - C. the work of creation was complete.
  - D. he did not want to create anything else.
62. "I heard you in the garden; I was afraid and hid from you because I was naked." Genesis 3:10. These words were said by
- A. Eve
  - B. Adam
  - C. God
  - D. Serpent
63. During the sealing of the covenant between God and Abraham, God's presence was symbolized by
- A. thunder and lightning.
  - B. the pillar of cloud
  - C. the smoking fire and flaming torch
  - D. hailstorm and lightning.
64. The **MAIN** reason why God asked Noah to build the ark was to
- A. separate the righteous from the sinners.
  - B. save his own family.
  - C. to lock in all the sinners.
  - D. assist him move to the mountain.
65. During their last day in Egypt, the Israelites put blood on the door post in order to
- A. keep their enemies away.
  - B. show their suffering.
  - C. mark their houses.
  - D. show that they were in a hurry.
66. What was Moses doing when he saw a burning bush that was not getting consumed by the fire? He was
- A. burning incense
  - B. playing the harp
  - C. looking after Abraham's sheep.
  - D. looking after Jethro's sheep.
67. God gave Moses ten commandments at Mt. Sinai. Which one of the following commandments shows respect for human life?
- A. Do not commit adultery
  - B. Do not commit murder
  - C. Do not accuse anyone falsely
  - D. Worship no other God but me
68. He was the most wicked king of Israel. He led the people of God astray by leading them into worshipping of Baal. He killed Naboth and took his vineyard. Who was he?
- A. Solomon
  - B. David
  - C. Ahab
  - D. Rehoboam
69. Who among the following judges defeated the midianites with three hundred men?
- A. Gideon
  - B. Samson
  - C. Othniel
  - D. Abimelech
70. Who among the following prophets prophesied that the coming, mighty God, eternal father and prince of peace?
- A. Jeremiah
  - B. Micah
  - C. Joel
  - D. Isaiah
71. Which one of the following is the **MAIN** reason why angel Gabriel announced that the child Jesus christ would be called son of the most high God? Because he would be
- A. born by the virgin Mary
  - B. born from the lineage of David
  - C. conceived by the power of the holy spirit
  - D. born in the town of Bethlehem
72. Which one of the following was **NOT** a gift presented to baby Jesus by the three wisemen?
- A. Gold
  - B. Myrrh
  - C. Silver
  - D. Frankincense
73. During the reign of King Herod, an angel appeared to Joseph in a dream and instructed him to flee together with Mary and baby Jesus to a certain place where they became refugees? Which place was that?
- A. Jerusalem
  - B. Egypt
  - C. Jericho
  - D. Nazareth



74. John the Baptist prepared the way for the coming Messiah. What was his **MAIN** message to the people? It was about
- A. repentance                      B. baptism  
C. sharing                            D. sacrifices
75. During his temptation, the devil showed Jesus all the kingdoms of the world and told him if he worshipped him all the kingdoms would be given to him. What was Jesus' response to the devil?
- A. Man does not live on bread alone.  
B. Do not put the Lord your God into test.  
C. Worship the Lord God and serve him only.  
D. Do not covet any worldly kingdom
76. During the incident when Jesus healed the Roman centurion's servant, what is the **MAIN** lesson that Christians learn? Jesus
- A. is the perfect healer.  
B. had come to heal the Romans only.  
C. has power over death.  
D. is a universal saviour.
77. As Jesus was praying his face shone like the sun, his clothes were dazzling white, Moses and Elijah appeared and were talking to him, a shining cloud came over them then a voice was heard from the cloud. Which one of the following events is described above? The
- A. crucifixion                      B. baptism  
C. transfiguration                D. last supper
78. When Pilate learnt that Jesus was from Galilee, he decided to send him to Herod who was in Jerusalem by then. Why was Herod so excited to see Jesus? Because
- A. they were great friends.  
B. Herod expected him to perform a miracle.  
C. they had stayed for a long time without seeing each other.  
D. they had come from the same region.
79. Who among the following people buried Jesus?
- A. Nicodemus and Simon of Cyrene.  
B. Joseph of Arimathea and Nicodemus  
C. Simon of Cyrene and Lazarus  
D. Lazarus and Joseph of Arimathea
80. In which town were the disciples of Jesus instructed to wait for the coming of the Holy spirit?
- A. Galilee                            B. Nazareth  
C. Jerusalem                        D. Jericho
81. The early Christians chose the seven deacons because they wanted to
- A. help Christians sell their property.  
B. witness to the believers in prison.  
C. stop the persecution of believers.  
D. distribute the food to the poor.
82. Which one of the following statements is **NOT** found in the apostles' creed?
- A. Give us this day our daily bread  
B. He will come to judge the living and the dead.  
C. He was conceived by the power of the Holy spirit.  
D. On the third day he rose and ascended into heaven.
83. Which one of the following fruits of the Holy spirit helps Christians to overcome temptations?
- A. Humility  
B. Patience  
C. Self control  
D. Peace
84. Which one of the following was a place of worship in traditional African society?
- A. Cave  
B. Tabernacle  
C. Temple  
D. Cathedral
85. The relationship between people through either blood or marriage called
- A. clan  
B. kinship  
C. genealogy  
D. ancestors
86. In African traditional society why was an expectant woman usually kept in secret during her last months? In order to
- A. protect her against her husband.  
B. give her some time to relax and rest.  
C. protect her against the evil eye.  
D. give her special and plenty of food.
87. Which one of the following is a Christian teaching on the use of wealth? It should be
- A. used for pleasure.  
B. kept in heaven.  
C. used to earn power.  
D. shared with the needy.

- 88.** While Selina was going to school, she picked a hundred shillings note. As a christian, what is the **BEST** thing for her to do?
- A. keep the money and use it later.
  - B. Offer the money at church as an offering.
  - C. Buy food and share with a needy child.
  - D. Give it to the teacher to look for the owner.
- 89.** Kioko a standard eight pupil finds out that his friend Kalekye has not been doing his evening duties. As a christian what should Kioko do?
- A. Report him to the teachers on duty
  - B. Report him to his parents.
  - C. Talk to him on the importance of being responsible
  - D. Cut off the friendship and keep away from him
- 90.** Which one of the following is the **MAIN** reason why the early missionaries came to Kenya? To
- A. build the Kenya-Uganda railway line.
  - B. spread the good news of Jesus Christ
  - C. provide the modern medical care
  - D. translate the Bible into local languages.

## SECTION B