

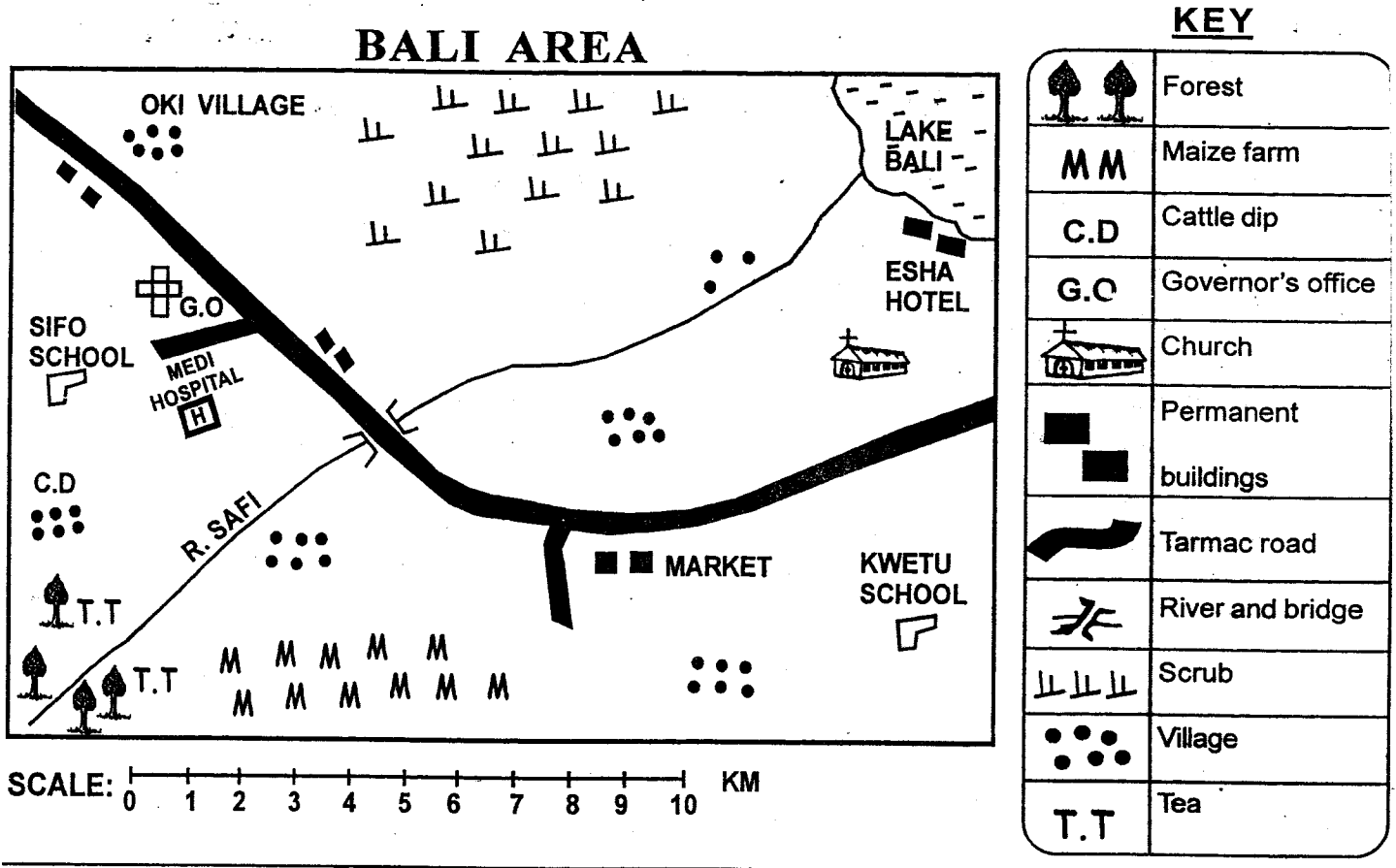
ACADEMIC BREAKTHROUGH SERIES

STD. 7 - YEAR: 2021

SOCIAL STUDIES & C.R.E

SASON
002

Time: 2 Hrs 15 Min.

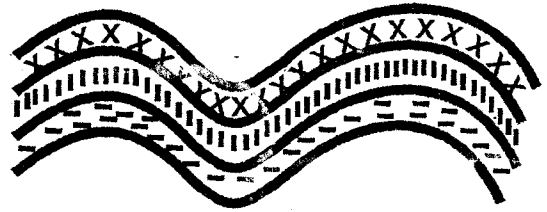


Study the map of Bali Area above and answer questions 1 – 7.

1. The common means of transport in Bali Area is ____
 A. water B. road
 C. air D. railway
2. Which one of the following is **TRUE** about the main administrator of Bali Area/
 A. Is elected by the people
 B. Is appointed by the president
 C. is employed by the government
 D. is a police officer
3. The people of Bali Area are likely to be
 A. Muslims B. Christians
 C. Pagans D. Hindus
4. The climate of the Northern part of Bali Area is ____
 A. cool and wet B. hot and dry
 C. hot and wet D. hot and cool
5. Which one of the following is the main food crop in Bali Area?
 A. Maize B. Coffee
 C. Tea D. Wheat
6. River Safi flows towards ____
 A. North West B. North East
 C. South D. West
7. Which one of the following economic activities is **NOT** practised in Bali Area?
 A. Crop farming B. Livestock keeping
 C. Fishing D. Transportation
8. Which one of the communities in Sudan belong to the River Lake Nilotes?
 A. Acholi, Alur, Luo
 B. Lugbara, Madi, Anuak
 C. Shilluk, Dinka, Nuer
 D. Dinka, Acholi, Lang'o

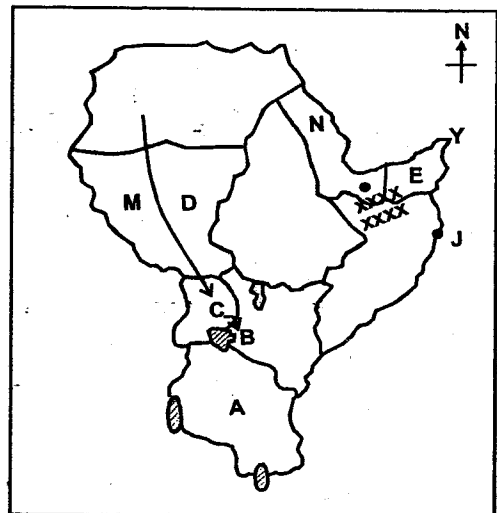
9. The main dairy animal kept in Kenya for milk production is the _____
 A. Jersey B. Fresian
 C. Guernsey D. Aberden Angus
10. Afforestation is _____
 A. planting cash crops on steep slopes
 B. replacing trees that have been cut
 C. planting trees where non-existed before
 D. cutting trees without planting others
11. The Wanga rulers were known as the _____
 A. Orkoiyot B. Laibon
 C. Ntemi D. Nabongo
12. Who among the following people serves a secretary to the school committee?
 A. The deputy headteacher
 B. The headteacher
 C. District education officer
 D. The area chief
13. The mineral exported by TAZARA railway line is _____
 A. copper B. diamond
 C. gold D. soda ash
14. The main problem facing sisal farmers in Kenya is _____
 A. lack of money
 B. competition from synthetic fibres
 C. shortage of labour
 D. poor market
15. Which of the following countries is **NOT** found in Eastern Africa?
 A. Ethiopia B. Malawi
 C. Eritrea D. Somalia
16. The main raw material used in the paper making industry is _____
 A. hard wood trees
 B. lint from cotton
 C. wood pulp from softwood
 D. soda ash from lake Magadi
17. Vegetation that grows along the salty water in the Coast is called
 A. riverine B. scrubs
 C. mangrove D. cactus

Use the diagram below to answer questions 18 - 19.




18. Which pair of mountains have been found through the above process?
 A. Atlas and Longonot
 B. Cape ranges and Khara
 C. Ruwenzori and Usambara
 D. Atlas and Drakensburg
19. The above mountain was formed as a result of _____
 A. faulting B. folding
 C. volcanicity D. tension
20. The main tourist attraction in Kenya is _____
 A. coastal beaches
 B. pre-historic sites
 C. variety of wildlife
 D. tropical climate
21. Nyika is a Kiswahili word that means
 A. dry country / area B. cool place
 C. warm place D. wet place

Use the map of Eastern Africa to answer questions 22 - 26.



22. The type of vegetation found in the area marked XXX is _____
 A. mountain forest B. woodland
 C. rainforest D. mangrove

23. Which one of the following marked **A B C D** was a Germany colony?
 A. A B. B C. C D. D
24. Which European power colonised the country marked **B**?
 A. French B. Germany C. British D. Italy
25. The main economic activity of the people who migrated Southwards from Sudan to Kenya using the route marked **M** were **mainly** _____
 A. livestock herders B. gatherers
 C. hunters D. cultivators
26. The town marked **J** is _____
 A. Shebelle B. Khartoum
 C. Mogadishu D. Juba
27. The first Asian to be appointed was _____
 A. Allibhai Mulla Jevanjee B. Eliud Mathu
 C. Harry Thuku D. B.A. Ohanga
28. The liquid marked **X** in the instrument above is _____

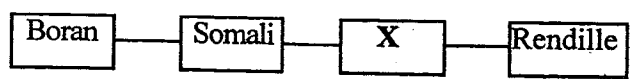


- A. water B. mercury
 C. alcohol D. paraffin
29. The instrument above is known as _____
 A. windvane B. windsock
 C. anemometer D. barometer
30. The instrument above is used to measure _____
 A. pressure of the air
 B. temperature
 C. speed of wind
 D. amount of water in the atmosphere
31. Soda ash is the main mineral export of Kenya, its uses include all the following **EXCEPT**
 A. making fertilisers B. making soap
 C. glass making D. making of medicine
32. The road sign below means _____
 A. round about ahead
 B. sharp right bend ahead
 C. no entry
 D. danger ahead



33. The following are important events in Kenyan History. Which one was the first to take place?
 A. Eliud Mathu was nominated to Legco
 B. Kenya became a British colony
 C. Kenya became a republic
 D. Kenya became fully independent
34. The king of Abawanga who collaborated with the British was called _____
 A. Nabongo Mumia
 B. Orkoiyot Samoei
 C. Mukitawa Nameme
 D. Laibon Lenana
35. The largest physical region in Kenya is _____
 A. lake basin B. highlands
 C. Nyika plateau D. Rift Valley
36. Cultural activities in the past included the following **EXCEPT** _____
 A. music B. playing basketball
 C. oral narrative D. wrestling
37. The growing of flowers for sale is called _____
 A. agriculture B. aqua culture
 C. floriculture D. vegetable farming
38. Which one of the following communities was **NOT** ruled by council of elders before the coming of the Europeans?
 A. Wanga B. Agikuyu
 C. Ameru D. Maasai
39. The most common means of passing information to many people in rural area today is _____
 A. television B. e-mail
 C. radio D. magazines
40. Which one of the following features is **NOT** shared by two or more Eastern African countries?
 A. Lake Victoria B. Gezira Scheme
 C. The Great Rift Valley D. R. Nile
41. Accidents can **BEST** be reduced on our roads by _____
 A. tarmacking all roads
 B. employing more policemen
 C. removing all unroadworthy vehicles
 D. educating the road users
42. Which of the following is the main reason as to why Nairobi is cooler than Mombasa?
 A. Latitude B. Longitude
 C. Altitude D. Distance from large water body

43. An elected member of the county assembly represents an area known as _____
- A. constituency B. county
C. ward D. division
44. Who is the leader of the Judiciary in Kenya?
- A. Chief Justice B. President
C. Speaker D. Attorney General
45. Medicine and blacksmithing are some of the skills that were taught through _____
- A. apprenticeship B. lecture
C. teachers D. reading
46. Which community is represented by letter X in the chart below?



- A. Luo B. Maasai C. Galla D. Agikuyu
47. Which one of the following combinations shows rivers that drain into Lake Victoria?
- A. Malewa, Yala, Kuja
B. Mara, Kerio, Ewaso Nyiro
C. Yala, Nzoia, Sondu Miriu
D. Kerio, Turkwel, Athi
48. The mineral mined at Kariandusi is _____
- A. fluorspar B. diatomite
C. limestone D. salt
49. Examples of fresh water lakes includes _____
- A. L. Magadi and Victoria
B. L. Malawi and Victoria
C. L. Baringo and Elementaita
D. L. Kyoga and L. Nakuru
50. The main cause of conflicts in Kenya today is _____
- A. political differences
B. religious differences
C. cultural differences
D. economic differences
51. One may become a Kenyan citizen through _____
- A. registration B. employment
C. migration D. marriage
52. Three of the following people belong to the Mijikenda group. Which one does **NOT**?
- A. Kauma B. Jibana
C. Pokomo D. Duruma

53. Three of the following are major fishing grounds in Kenya **EXCEPT** _____
- A. L. Naivasha B. L. Baringo
C. L. Bogoria D. L. Victoria
54. L. Tanganyika is the deepest lake in Africa. Which fish is commonly caught here?
- A. Dagaa B. Nile perch
C. Tilapia D. Mud fish
55. Below are statements about the political organization of a community in Eastern Africa during the pre-colonial period.
- i) It was organised into chiefdoms.*
ii) It was ruled by hereditary chiefs
iii) It had a standing army.
- A. Nyamwezi B. The Madinka
C. Baganda D. The Ndebele
56. Who chairs parliamentary debates?
- A. Deputy president
B. Attorney General
C. The president
D. The speaker of the National Assembly
57. Which arm of the law in Kenya implements the policies of the government?
- A. Legislature B. Cabinet
C. Judiciary D. Executive
58. The Independent Electoral and Boundaries Commission carries out the following functions **EXCEPT** _____
- A. registering voters
B. registering candidates
C. punishing law breakers
D. organising elections
59. A vote taken in Kenya to pass a new constitution is called a _____
- A. referendum
B. election vote
C. general election
D. consesus vote
60. Three of the following are members of the extended family. Who is **NOT**?
- A. Grandmother B. Brother-in-law
C. Daughter D. Nephew

C.R.E

61. On which day did God create the heavenly bodies?
A. Second B. Fourth
C. Third D. Sixth
62. Abraham became a friend of God because he was
A. wise B. repentant
C. rich D. obedient
63. Who among the following people was given the name 'Israel' by God?
A. Jacob B. Joseph
C. Laban D. Moses
64. God called Moses while he was _____
A. taking care of Jethro's flock
B. helping Jethro's daughters
C. performing miracles in Egypt
D. offering sacrifices in the temple
65. The festival celebrated by the Israelites to remember their release from Egypt is _____
A. Easter
B. Pentecost
C. Passover
D. Christmas
66. Gideon, the man who led the Israelites into fighting the Midianites was from the tribe of _____
A. Benjamin B. Levite
C. Manasseh D. Judah
67. The king of Israel who was prevented by prophet Nathan from building God's temple was _____
A. Samuel B. David
C. Saul D. Solomon
68. God took kingship from Saul because _____
A. Saul disobeyed Him in war
B. the Israelites had been defeated in war
C. he wanted Israel to have no king
D. Saul did not know how to rule
69. The priest in the temple when Samuel was called to serve God was _____
A. Elkanah B. Aaron
C. Zechariah D. Eli
70. Which one of the following people did NOT celebrate the birth of Jesus Christ?
A. The Angels
B. King Herod
C. The wisemen
D. The shepherds
71. Which one of the following is NOT true about John the baptist?
A. He walked on water
B. He prepared the way for Jesus
C. He was beheaded
D. His father was Zechariah
72. 'Man shall not live by bread alone ...' Jesus said these words during _____
A. baptism
B. transfiguration
C. the last supper
D. his temptations
73. The sermon on the mount is also known as _____
A. The Lord's prayer
B. The communion
C. Beatitudes
D. Commandments
74. The parable of the Good Samaritan teaches Christians to _____
A. forgive others
B. help the needy
C. preach the gospel
D. pray always
75. Which one of the following events in the life of Jesus brought hope to the world?
A. Birth
B. Temptation
C. Resurrection
D. Naming
76. During the Last Supper, Jesus washed the feet of His disciples to _____
A. make them clean
B. teach them service
C. prepare them to eat
D. show peace

77. On the day of Pentecost the disciples _____
- were filled with the Holy spirit
 - got drunk with wine
 - ate bread and fish
 - were baptised by John
78. Which book was the Ethiopian Eunuch reading from when he met Philip?
- Jeremiah
 - Matthew
 - Acts
 - Isaiah
79. Who among the following people heard God's voice on his way to Damascus?
- Stephen
 - Philip
 - Saul
 - Matthew
80. Which one of the following is **NOT** a gift of the Holy spirit?
- Wisdom
 - Love
 - Healing
 - Speaking in tongues
81. The **main** work done by girls in traditional African society was _____
- hunting
 - cooking
 - looking after animals
 - fishing
82. Initiation in the African traditional religion was a sign of _____
- maturity
 - strength
 - wealth
 - long life
83. In traditional African society, people believed that there was _____
- hell fire for bad people
 - death in life
 - life after death
 - heaven for good people
84. The Abaluhya of Western Kenya call their God _____
- Were
 - Ngai
 - Enkai
 - Engoro
85. An elderly woman is carrying a heavy bag and wants to cross through a busy road. What should you do as a Christian?
- Mind your own business
 - Tell her to walk faster
 - Assist by taking her bag and help her cross
 - Stand aside and watch how she crosses
86. You have just seen a friend picking money from the teacher's bag. What should you do as a Christian?
- Ask him to share the money with you
 - Call your classmates to witness
 - Tell him to return the money
 - Stop being his friend
87. David played the harp for king Saul during leisure time. This teaches Christians that leisure time should **BEST** be used for _____
- visiting friends
 - watching movies
 - helping others
 - playing games
88. Group work among Christians help them to _____
- create unity
 - get friends
 - make more money
 - become famous
89. Your classmate Pendo is lazy and does not complete her class work. What is the **BEST** advice to give her?
- Tell her to copy your work
 - Pay her friend to do the work
 - Encourage her to work hard
 - Tell her to hide from teachers
90. Jesus gave power to His disciples to do the following **EXCEPT** _____
- cast out demons
 - heal the sick
 - preach the gospel
 - punish sinners