


# DISTINCTION SCHOOL BASED ASSESSMENT TEST



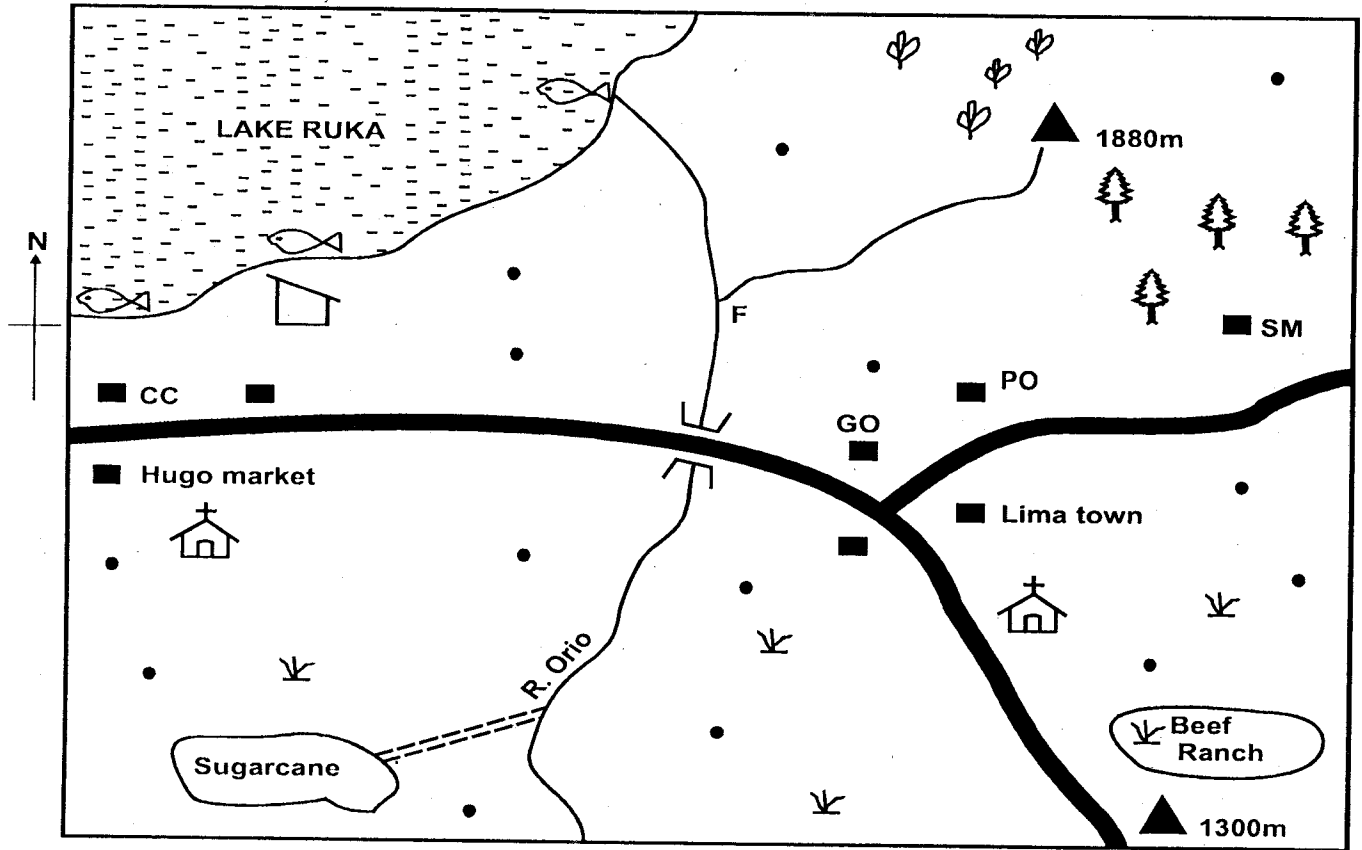
## STANDARD SEVEN - 2021

## SOCIAL STUDIES & C.R.E



Time: 2hrs 15mins

### DANO AREA



Scale 0 1 2 3 4 5 6 7 8 9 10 Km				
<b>KEY</b>	Fish market	Built-up areas	Water canals	Grass
Fishing areas	Settlement	Coffee	Chief's camp	Governor's office
Hill tops	Planted forest	Sawmill	Post office	
Tarmac road	Church	River & bridge		

**Use the map of Dano area above to answer questions 1 to 7.**

- Three of the following statements about Lake Ruka are correct. Which one is **not**?
  - It has a river draining into it.
  - It is a source of fish
  - It has fresh water
  - It is a source of a river
- The **main** religion in Dano area is
  - Christianity
  - Islam
  - Hinduism
  - Paganism
- The **highest** part in Dano area is a round
  - the sugarcane farm
  - Hugo market
  - the coffee plantation
  - the beef ranch
- The location of the sawmill was mainly influenced by
  - nearness to a road
  - nearness to a forest
  - nearness to cheap labour
  - nearness to market for timber
- Which one of the following economic activities is **not** carried out in Dano area?
  - Lumbering
  - Trading
  - Fishing
  - Mining
- The general direction of the sugarcane farm from the church in Lima area is
  - South East
  - North West
  - South West
  - North East

7. The economic benefit of River Orio in Daño area is that
- it is used for water transport
  - it provides water for irrigation
  - it is a source of fish
  - it has been dammed to produce electricity

8. The following are requirements for growing a certain crop.

(i) **High rainfall between 1500mm and 2000mm.**

(ii) **High temperatures between 27°C and 30°C.**

(iii) **High humidity throughout the year.**

The requirements listed above favour the growing of

- |              |          |
|--------------|----------|
| A. pyrethrum | B. tea   |
| C. flowers   | D. cocoa |

9. The institution of marriage is important **mainly** because

- married people are respected
- through marriage wealth is created
- families get dowry
- children born ensure the continuity of the family

10. Which one of the following communities is found in Northern Africa?

- Berbers
- Xhosa
- Igbo
- Dinka

11. The Hehe people resisted German colonial rule in Tanganyika **mainly** because

- they had a strong leaders
- the Hehe people had a large army
- the Germans treated them cruelly
- the Germans were building a railway line

12. The following are characteristics of a climate region in Africa.

(i) **Summers are hot and dry.**

(ii) **Annual rainfall is between 500mm and 750mm.**

The climatic region described above is

- Mediterranean climate
- Equatorial climate
- Semi desert climate
- Mountain climate.

13. Which one of the following dams is **correctly** matched with the main reason why it was built?

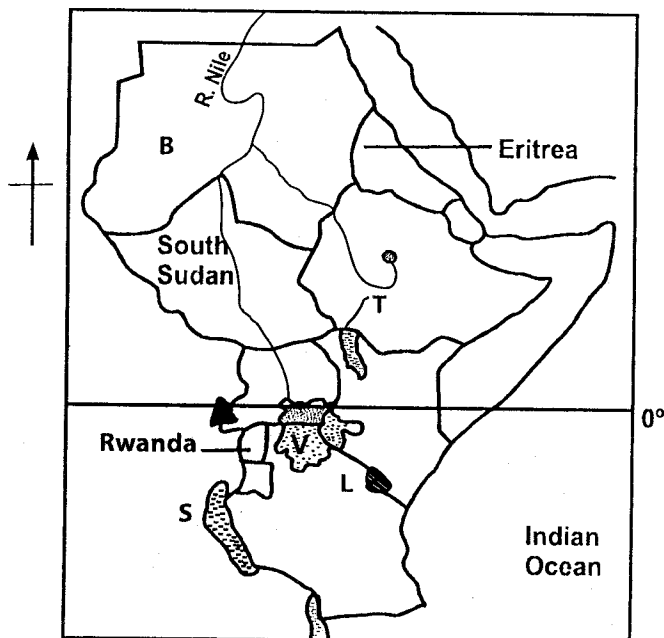
<b>Dam</b>	<b>Reason</b>
------------	---------------

- |               |                               |
|---------------|-------------------------------|
| A. Masinga →  | To create a fishing ground    |
| B. Aswan →    | To store water for irrigation |
| C. Kariba →   | To attract tourist            |
| D. Akasombo → | To create an Inland waterway  |

14. When Vasco da Gama came to Eastern Africa in 1498 he

- built Fort Jesus in Mombasa
- signed several treaties with chiefs
- he collected taxes during trade
- built a pillar in Malindi

**Use the map of Eastern Africa below to answer questions 15 to 18.**



15. The river market T is

- River Omo
- River Turkwel
- River Juba
- River Kerio

16. Which one of the following statements about the lake marked V is **not** correct?

- It is shared by several countries
- It is a major fishing lake
- It formed when water collected in faults
- It was formed through down warping

17. Which one of the following communities settle in the area marked L during the migration period?

- |             |           |
|-------------|-----------|
| A. Abagusii | B. Taita  |
| C. Turkana  | D. Pokomo |

18. Which one of the following crops is grown in large plantations in the country marked B?

- |              |            |
|--------------|------------|
| A. Sugarcane | B. Coffee  |
| C. Tea       | D. Bananas |

19. Which one of the following is a contribution of the community to learning in a school?

- Buying books for a school
- Providing resource persons to teach pupils
- Preparing the school routine
- Employing teachers in a school

53. Which one of the following mountains is **correctly** matched with its formation?
- Atlas Mountains → erosion of soft rocks
  - Mount Meru → folding and twisting
  - Pare highlands → faulting and uplifting
  - Hoboli mountains → volcanic activities
54. Which one of the following is a benefit of interaction among communities in Africa?
- It leads to conflicts
  - New ideas and skills are exchanged
  - It causes scarcity of trade goods
  - It leads to increase of population
55. The defeat of the Hehe rebellion was **mainly** caused by
- diseases that killed Hehe fighters
  - famine that affected the Hehe people
  - lack of good forms of transport
  - death of their leader
56. The **best** way to ensure that pupils obey school rules is through
- involving them in making the rules
  - sending away disobedient pupils
  - pushing pupils who break school rules
  - appointing prefects to enforce rules
57. A candidate for a country assembly seat should **not**
- be less than thirty five years old
  - be an independent candidates
  - be a holder of a public office
  - not be of sound mind
58. The head of the body incharge of elections in Kenya is appointed by
- parliament
  - political parties
  - voters
  - the president
59. In a civil election, registered voters elect
- members of the national assembly
  - members of the county assembly
  - members of the cabinet
  - members of the senate
60. On a polling day in Kenya, a voter is supposed to
- campaign for candidates
  - count votes
  - mark a ballot paper
  - announce election results.

## SECTION II

### CHRISTIAN RELIGIOUS EDUCATION

61. Dry land and plants were created on the
- |               |               |
|---------------|---------------|
| A. third day  | B. second day |
| C. fourth day | D. fifth day  |
62. The father of Noah was
- |          |               |
|----------|---------------|
| A. Enock | B. Methuselah |
| C. Terah | D. Lamech     |
63. God called Abraham when he was living in
- |          |           |
|----------|-----------|
| A. Haran | B. Midian |
| C. Ur    | D. Goshen |
64. The action by the Israelites on the Passover night that showed their days of slavery is when they
- killed Egyptians first born males
  - ate bitter herbs
  - smeared blood on door posts
  - ate unleavened bread
65. During the exodus God led the Israelites at night using
- |                      |                     |
|----------------------|---------------------|
| A. a cloud           | B. the covenant box |
| C. a pillar of light | D. a bright star    |
66. When an angel appeared to Gideon he was
- taking care of his father's sheep
  - sleeping in the temple
  - fighting the Midianites
  - threshing wheat
67. Which one of the following Kings of Israel planned the murder of Uriah?
- |            |         |
|------------|---------|
| A. David   | B. Saul |
| C. Solomon | D. Ahab |
68. Which one of the following was done by Solomon when he was the King of Israel?
- He made the covenant box
  - He built a temple in Jerusalem
  - He made Jerusalem the capital city
  - He made a golden bull calf for worship
69. Which one of the following people complained he was too young to become a prophet?
- |             |           |
|-------------|-----------|
| A. Ezekiel  | B. Isaiah |
| C. Jeremiah | D. Jonah  |
70. When angel Gabriel appeared to Zechariah he told him that
- he would name his son John
  - his Kingdom would never end
  - he would protect him from his enemies
  - he would live for a long time
71. Which one of the following statements from the Bible shows that Jesus is the son of God?
- He will not drink wine
  - He would walk a head strong like Elijah
  - He would deliver people from sin
  - The Holy Spirit will come upon you

72. When Jesus was fasting in the desert the devil told him to  
 A. bow down and worship him  
 B. change a stone into bread  
 C. throw himself down  
 D. change water into wine
73. When Jesus changed water into wine he had gone to Cana to  
 A. raise Lazarus  
 B. drive traders from the temple  
 C. attend a wedding  
 D. preach in the Synagogue
74. The parable of the mustard seed teaches Christians about  
 A. growth of the Kingdom of God  
 B. the second coming of Jesus  
 C. being kind to the needy  
 D. the value of prayer
75. In the teaching of who is the greatest Jesus used a  
 A. a fish  
 B. a child  
 C. bread  
 D. a coin
76. Which one of the following was done by Jesus during the last supper?  
 A. Jesus pointed out his betrayer.  
 B. Jesus walked on water  
 C. Jesus healed a paralysed man  
 D. Jesus ate in the house of Zacchaeus
77. Which one of the following accusations was brought against Jesus before Pilate?  
 A. Working on a Sabbath.  
 B. Claiming to be the King of Jews.  
 C. Healing a paralysed man.  
 D. Forgiving sins of the people.
78. After the ascension of Jesus his disciples to stay in Jerusalem to  
 A. preach the gospel  
 B. drive traders from the temple  
 C. attend of wedding  
 D. wait for the Holy Spirit
79. Stephen was stoned to death by the Jews because  
 A. he forgave a man his sins  
 B. he mixed with sinners  
 C. he refused to pay taxes  
 D. he refused to deny Jesus
80. When Peter visited the town of Joppa he  
 A. raised Eutychus  
 B. raised Tabitha back to life  
 C. healed a lame beggar  
 D. healed Aeneas
81. Which one of the following is a gift of the Holy Spirit?  
 A. Faith.  
 B. Faithfulness.  
 C. Patience.  
 D. Humility.
82. Which one of the following is a common practice in both Traditional African and Christian Communities?  
 A. Tattooing the body  
 B. Performing libations  
 C. Reciting prayers  
 D. Baptizing new converts
83. In Traditional African Societies people reconcile with God by  
 A. reading the scriptures  
 B. singing songs  
 C. baptizing people  
 D. offering sacrifices
84. Which one of the following is an act of charity in traditional African communities?  
 A. Shaving the hair  
 B. Giving food to strangers  
 C. Meeting together to pray  
 D. Making body marks
85. The **main** reason why marriage is important in Traditional African communities is to  
 A. get companionship  
 B. get dowry  
 C. get children  
 D. get recognized
86. In the Lord's prayer Christians pray to God to  
 A. forgive them their sins  
 B. punish their sins  
 C. give them long lives  
 D. sit with God in heaven
87. Husbands are advised to love their wives as  
 A. they love themselves  
 B. their wives love them  
 C. they love their enemies  
 D. Christ loved the church
88. The church has established school in Kenya **mainly** to  
 A. create jobs in the country  
 B. offer free primary education  
 C. get money to build churches  
 D. support literacy in the country
89. The **best** way in which Christians can support street children is by  
 A. establishing schools for them  
 B. praying for them  
 C. preaching to them  
 D. giving them money
90. The element of prayer when a person prays for himself or herself is  
 A. intercession  
 B. petition  
 C. confession  
 D. adoration