

KCPE EXAMINER SERIES 2021 PREDICTION TWO Standard Eight

SOCIAL STUDIES AND RELIGIOUS EDUCATION

Time: 2 hour 15 minutes

READ THESE INSTRUCTIONS CAREFULLY

1. You have been given this question booklet and a separate answer sheet. The question booklet contains 90 questions.
2. Do any necessary rough work in this booklet
3. When you have chosen your answer, mark it on the ANSWER SHEET, not in the question booklet.

HOW TO USE THE ANSWER SHEET

4. Use only an ordinary pencil
5. Make sure that you have written on the answer sheet:

YOUR INDEX NUMBER
YOUR NAME
NAME OF YOUR SCHOOL

6. By drawing a dark line inside the correct numbered boxes mark your full index number (I.e school code number and the three- figure candidate number) in the grid near the top of the answer sheet.
7. Do not make any mark outside the boxes
8. Keep the sheet as clean as possible and do not fold it
9. For each of the questions 1-90 answers are given. The answer are lettered A,B,C,D in each case only ONE of the four answers is correct. Choose the correct answer.
10. On the answer sheet the correct answer is to be shown by drawing a dark line inside the box in which the letter you have chosen is written.

Example

31. The headquarters of the African Union is based in:-

- A. Gaborone - Botswana
- B. Abuja - Nigeria
- C. Lusaka - Zambia
- D. Addis Ababa - Ethiopia

The correct answer is "D"

- [A] [B] [C] [D] [A] [B] [C] [D] [A] [B] [C] [D] [A] [B] [C] [D] [A] [B] [C] [D]
11. Your dark line MUST be written in the box 31 32 33 34 35

12. For each question ONLY ONE box is to be marked in each set of four boxes.

© Booster Education Publishers 2021

P. O. Box 00300-7803, Tel: 0202225440, Cell: 0721819069/0722163391/0722163392

Mombasa Office, Tel: 0721132623


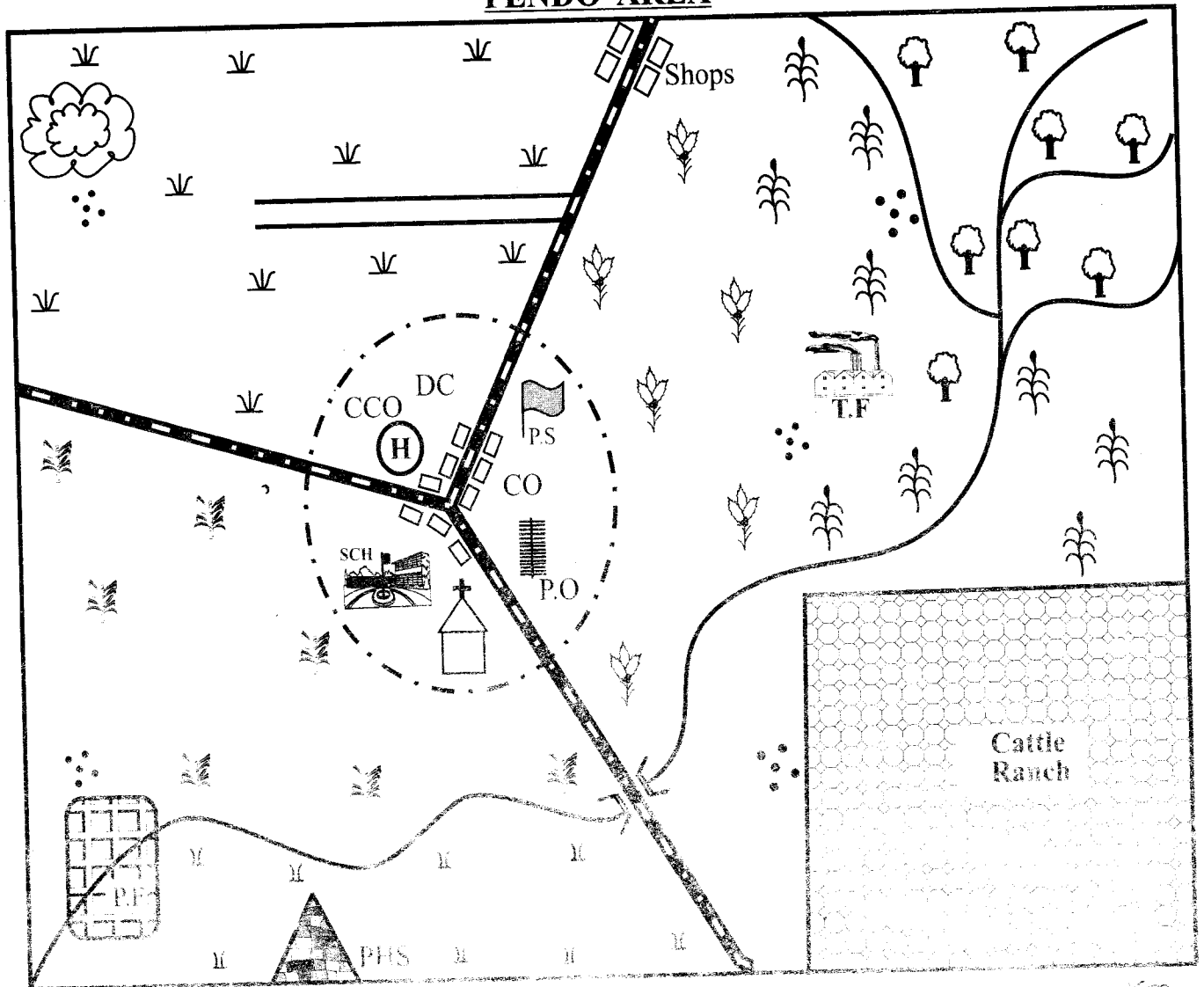
Email: boosterpublishers@yahoo.com

PR 002

TURN OVER

Ex2021/PR2/SS/RE 8

PENDO AREA



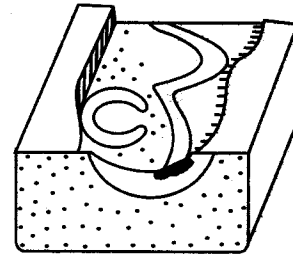
	Forest		Permanent buildings		School
	Paddy field		Tarmac road		Post office
	Coffee		Murrum Road		District commissioner
	County offices		River and bridge		Scrubland
	Police station		Tea farm		Settlement
	Grassland		Quarry		County commissioner offices
	Maize		Cattle ranch		Tea factory
	Pre-historic site				Town boundary
					Chapel
					Health care

Study the map of Pendo area and use it to answer questions 1-7.

1. The officer in charge of security in Pendo area is **likely** to be the:-
A. governor
B. county commissioner
C. district commissioner
D. police officer
2. Which one of the following crops is **likely** to do well in the area where there is a paddy field?
A. Sugarcane
B. Sisal
C. Rice
D. Coffee
3. What is the approximate area of the cattle ranch?
A. 30 Km²
B. 41 km²
C. 45 km²
D. 38 km²
4. The population distribution in Pendo area is **mainly** influenced by:-
A. availability of water
B. presence of good transport
C. availability of jobs
D. nearness to the town
5. Which one of the following economic activities is **not** carried out in the Northern region?
A. Mining
B. Tourism
C. Trading
D. Farming
6. Which is the **main** religion of the people in Pendo area?
A. Christianity
B. Traditional
C. Islamic
D. Paganism
7. What is the direction of the tea factory from the Pre-historic site?
A. South East
B. South West
C. North West
D. North East

8. The **main** reason for teaching moral laws to the youth is:-
A. to enable them to learn their tradition and culture
B. to encourage them to support their parents when aged
C. to enable the youth to acquire responsible behaviour
D. to guide them in choosing their marriage partners.
9. Which one of the following is **not** a fault lake?
A. Lake Tanganyika
B. Lake Kyoga
C. Lake Natron
D. Lake Baringo

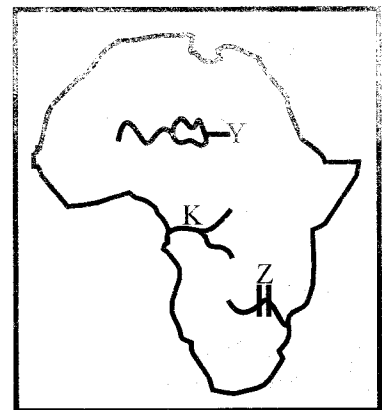
Use the physical feature below to answer questions 10 and 11.



10. Which one of the following is **not true** about the feature?
A. It's formed in the flood plains in the old stage of a river
B. The lake formed through this process is called an ox-bow lake
C. The lake is formed after a river develops curves called meanders
D. The lake was formed during the formation of the Rift Valley
11. Which of the following is **not** a correct match of a river and its ox-bow lake?
A. Rufiji - Utange
B. Yala - Kanyamboli
C. Turkwel - Turkana
D. Tana - Gambi
12. Which one of the following traditional weather observation techniques was used to signify drought?
A. Trail of ants
B. Appearance of stars in the sky
C. Croaking of frogs
D. Appearance of toads

13. The following are impacts of climate change on human activity. Which one is positive?
 A. High rainfall in the highlands
 B. Incidence of epidemics
 C. Presence of floods
 D. Dry conditions
14. In which of the following periods did the early man get involved in making iron tools and domesticating animals?
 A. Man stone age period
 B. Early stone age period
 C. Middle stone age period
 D. Late stone age period
15. Which one of the following factors leads to slow population growth?
 A. Sex preference
 B. Improved medical facilities
 C. Late marriages
 D. Practising polygamy
16. Which problem is Germany likely to face in future if it continues experiencing low population growth?
 A. Wider market
 B. Shortage of labour
 C. High dependency
 D. High crime rate
17. Which one of the following is **not** a function of the District Education Board?
 A. Appointing the head teacher
 B. Inspecting the schools
 C. Organizing school competitions
 D. Paying teachers' salaries
18. Which one of the following combinations of exotic crops was introduced by Indians?
 A. Bananas, rice, sugarcane
 B. Tea, coffee, pyrethrum
 C. Sorghum, millet, peas
 D. Maize, cassava, kales
19. Three of the following are ways in which the colonial government assisted the white settlers **except**:-
 A. helping them to acquire land in the highlands
 B. forcing the Africans to sign treaties
 C. giving settlers money to buy land
 D. evicting Africans from the highlands
20. Which one of the following methods of irrigation is **mainly** practised in Ahero irrigation scheme?
 A. Sprinkler method
 B. Canal method
 C. Furrow method
 D. Overhead method
21. Fish farming in Kenya faces the following challenges **except**:-
 A. insufficient supply of water
 B. limited market
 C. lack of adequate funds
 D. lack of fishing grounds
22. The following minerals are extracted in the African continent. Which one is mined through drilling method?
 A. Oil
 B. Gold
 C. Copper
 D. Diatomite
23. Which one of the following African countries has the largest planted forest cover?
 A. Congo
 B. Egypt
 C. Swaziland
 D. South Africa
24. The process by which soil loses mineral salts is referred to as:-
 A. soil erosion
 B. leaching
 C. weathering
 D. withering

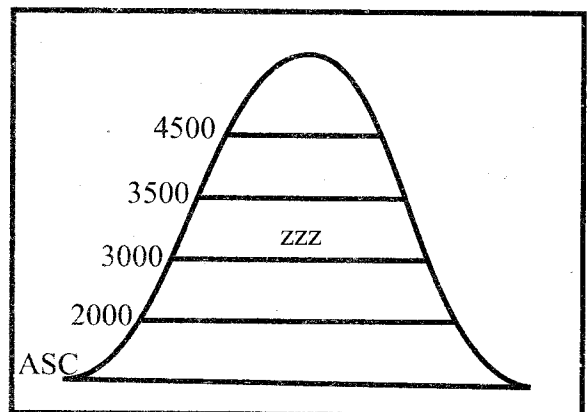
Use the map of Africa below to answer questions 25 to 27.



25. Which physical feature is **likely** to be found in the area marked **Z**?
 A. Victoria falls
 B. Kariba dam
 C. Aswan High dam
 D. Lake Malawi

26. The lake marked Y was formed as a result of:-
 A. rift valley
 B. volcanicity
 C. down-warping
 D. erosion
27. Which one of the following statements is **not true** about the river marked K?
 A. It is the second largest river in Africa
 B. It drains into the Atlantic ocean
 C. It has the largest volume of water in Africa
 D. It has a delta on its mouth
28. Three of the following are uses of soil. Which one is **not**?
 A. Soil is used in carpeting of roads
 B. Soil is used in glass making
 C. Soil is used to make bricks and tiles
 D. Soil is used to make baskets and plastics
29. Which one of the following game parks is **correctly matched** with the county it is located in?
 A. Maasai Mara - Narok
 B. Marsabit - Nakuru
 C. Mwea Game reserve - Meru
 D. Rahole - Kirinyaga
30. The **main** reason that influenced the location of the oil refinery in Mombasa county is:-
 A. presence of good means of transport
 B. availability of raw material
 C. presence of enough water
 D. availability of market
31. Below are facts of a certain town.
 (i) It is the third largest in the country
 (ii) It is a major communication centre
 (iii) It is a major inland town
 (iv) It was originally known as Port Florence
 The described town above is:-
 A. Mombasa
 B. Arusha
 C. Kisumu
 D. Kampala
32. Which one of the following African countries **does not** have a railway line?
 A. Somalia
 B. Uganda
 C. Egypt
 D. Nigeria
33. The **main** reason for administering first aid is to:-
 A. reduce pain and suffering
 B. to promote recovery
 C. take the affected person into the hospital
 D. save life
34. Which one of the following forms of communication is the fastest and cheapest?
 A. Newspaper
 B. Electronic mail
 C. Writing letters
 D. Radio
35. Which one of the following economic activities in Kenya is **mainly** affected by the presence of Al-shaabab in the region?
 A. Tourism
 B. Mining
 C. Agriculture
 D. Livestock rearing
36. Which one of the following political associations was Eliud Mathu affiliated to during his time in the LEGCO?
 A. KANU
 B. KCA
 C. KAU
 D. EAA
37. During the election that took place in 1957, who among the following Africans was elected to represent Nairobi constituency?
 A. Masinde Muliro
 B. Oginga Odinga
 C. Ronald Ngala
 D. Tom Mboya

Use the diagram below to answer questions 38 and 39.



38. The type of vegetation shown alongside is **mainly** influenced by:-
 A. high rainfall
 B. soil fertility
 C. altitude
 D. government policy

39. The type of forest that is **mainly** found in the area marked **ZZZ** is:-
 A. rain forest
 B. heath and moorland
 C. savannah vegetation
 D. bamboo forest
40. Which one of the following political party **did not** participate in the 1992 multi-party election?
 A. NARC
 B. KANU
 C. FORD-ASILI
 D. D.P
41. Which one of the following organs of the United Nations Organisation deals with maintaining peace and unity in the world?
 A. The General Assembly
 B. The Security Council
 C. The Secretariat
 D. The International Court of Justice
42. Three of the following are responsibilities of a good citizen. Which one is **not**?
 A. Caring for the environment
 B. Participation in National elections
 C. Hoarding goods in trade
 D. Paying taxes on time
43. Which one of the following activities undermines National unity?
 A. National celebrations
 B. Participating in games and sports
 C. Encouraging trading activities
 D. Participating in tribalism
44. Which one of the following may **not** lead to a by-election in the constituency?
 A. When a court of law nullifies the election
 B. If a sitting MP is jailed for more than six months
 C. If a Member of parliament misuses the CDF funds
 D. If a member of parliament is declared bankrupt
45. Which one of the following is **not** a function of the electoral body in Kenya?
 A. Announcement of results
 B. Conducting elections
 C. Buying election materials
 D. Nomination of Mps
46. Among the following officials, who takes the minutes during parliamentary debates?
 A. The Sergeant-at-arm
 B. The National Assembly clerk
 C. A cabinet secretary
 D. The speaker of the house
47. Which one of the following courts in Kenya is **not** a special court?
 A. Court of Appeal
 B. Kadhi's court
 C. Juvenile court
 D. Court martial
48. The **main** source of funds for the government's development projects is :-
 A. taxation
 B. court fines and charges
 C. grants and Aid
 D. rates and rent
49. The department of the National defence that protects citizen in the airspace is the:-
 A. Kenya army
 B. Kenya police
 C. Kenya navy
 D. Kenya airforce
50. Which one of the following is the **last** stage of a bill to become a law?
 A. Presidential assent
 B. First reading
 C. Committee stage
 D. Report stage
51. Internal self government is celebrated on:-
 A. 12th December
 B. 1st June
 C. 20th October
 D. 1st May
52. During the pre-colonial period, major decisions among the Sans were made:-
 A. by council of elders
 B. through general agreement
 C. through voting
 D. by the area chiefs
53. Which one of the following drugs is **not** illegal in Kenya?
 A. Alcohol
 B. Cocaine
 C. Heroine
 D. Bhang

54. Which one of the following is **not** a way of helping physically impaired learners?
 A. Pushing their wheelchairs for them
 B. Providing them with crutches
 C. Offering white canes for walking
 D. Creating enough space for them
55. Three of the following statements are **true** about Nelson Mandela **except**:-
 A. he founded the ANC party
 B. he was jailed for 27 years
 C. he formed *umkhonto we sizwe*
 D. he led South Africa to independence
56. Which one of the following is **not** a function of the National Assembly?
 A. Discussing and passing bills
 B. Electing the speaker of the house
 C. Allocating fund to various government ministries
 D. Formulating government policies
57. The **main** reason that led to the collapse of the Imperial British East Africa company (IBEAC) is:-
 A. lack of skilled labour
 B. poor leadership
 C. lack of enough funds
 D. attack by the colonialists
58. The title given to the head of government in Swaziland is:-
 A. Nabongo
 B. Ngwenyama
 C. Mutemi
 D. Kabaka
59. Which one of the following was a positive effect of colonialism?
 A. Loss of African independence
 B. Loss of African culture
 C. Neglect of craft industries
 D. Introduction of Western Education
60. The officer in charge of justice in the Buganda kingdom was known as:-
 A. Katikiro
 B. Ssebataka
 C. Omulamuzi
 D. Omwanika

C.R.E

61. Which one of the following is a reason man is special? He was:-
 A. created last
 B. put in charge of other creations
 C. placed in the garden of Eden
 D. created from soil
62. The following statement is found in Genesis chapter one. Which one is it?
 A. All animals will live in fear of you.
 B. You came from soil.
 C. Do not eat fruits from the tree of knowledge.
 D. Have many children.
63. Abraham is known as a friend of God **mainly** because he:-
 A. sacrificed his son for God
 B. moved from Haran to caanan
 C. had faith in him
 D. built an alter for God
64. Which of the following is a reason why Noah built the ark?
 A. To hide his family.
 B. To fulfill the will of God.
 C. To save the animals.
 D. To save his life.
65. The following were rituals performed by the israelities during passover **except**:-
 A. ate boiled meat
 B. ate bitter herbs
 C. slaughtered lambs
 D. ate while standing
66. Moses was not willing to go back to Egypt to deliver the Israelites **mainly** because he:-
 A. was a stammerer
 B. young
 C. came from the least clan
 D. had committed a crime
67. Who among the following prophets was from Tishbe?
 A. Elijah
 B. Jeremiah
 C. Samuel
 D. Elisha

68. The following description fits one of the Old Testament prophets.
- He purified bitter water.*
 - Was given double portion of Elijah's anointing.*
 - Cursed the 42 boys.*
 - Helped a widow.*
- Who is he?
- Samuel
 - Elisha
 - Isaiah
 - Hosea
69. One of the following is a prophesy of prophet Isaiah regarding the-messiah. Which one is it?
- The messiah would set captives free.
 - Jesus would be born in Bethlehem.
 - The messiah would entre Jerusalem while riding on a donkey.
 - The messiah would be called the lamb of God.
70. One of the following activities **best** shows that christians are disciples of Jesus christ. Which one is it?
- Speaking in tongues.
 - Laying of hands.
 - Preaching the gospel.
 - Giving tithes and offerings.
71. Which one of the following towns in the Bible is referred to as the city of David?
- Jerusalem
 - Nazareth
 - Bethlehem
 - Jericho
72. The parable of the lamp under a bowl **mainly** teaches christians that they should:-
- do good to others
 - always be happy
 - avoid living in darkness
 - be good examples to others
73. The miracles of Jesus teaches christians all the following **except**:-
- Jesus was the son of God
 - Jesus had come to conquer evil
 - Jesus had a lot of power
 - Jesus had authority from God
74. After feeding the 5000 people 12 baskets of left overs were collected. What is the significance of number 12 in the Bible?
- 12 tribes of Israel.
 - 12 days of christmas.
 - 12 disciples of Jesus.
 - 12 days of suffering of Jesus.
75. Who among the following people were present during the presentation of Jesus in the temple?
- A prophetess and priest.
 - A fisherman and a priest.
 - A tax collector and a prophet.
 - A teacher of law and a fisherman.
76. Christians attract people to Jesus **mainly** by:-
- being selfish
 - not mixing with sinners
 - showing love to all people
 - condemning those who sin
77. Which of the following statements is **true** about Phillip?
- He was from Bethsaida.
 - He baptised the Eunuch.
 - His father was Simon.
 - He doubted anything good would come from Nazareth.
78. All the following were co-workers of apostle Paul **except**:-
- Simon Peter
 - Barnabas
 - Titus
 - Phillip
79. The **main** duty of the deacons during the early church was to:-
- preach the gospel
 - baptise believers
 - convict sinner
 - help widows
80. A belief found in the apostles creed about God is that he is:-
- our saviour
 - the messiah
 - a judge
 - omnipotent

81. Offerings were given in Traditional African Religion in order to:-
 A. ask for forgiveness
 B. honour God
 C. please others
 D. remember the dead
82. A belief found in christianity and African Religion is that:-
 A. there is life after dead
 B. God lives in heaven
 C. Jesus is the son of God
 D. there is holy trinity
83. The following are specialists in Traditional Africa society. Who is **not**?
 A. priest
 B. seer
 C. sorcerer
 D. oviner
84. People prayed while facing a mountain in Traditional society **mainly** because:-
 A. God lived there
 B. mountains brought rain
 C. it was a command
 D. mountains were source of life
85. Which of the following statements **best** describes leisure time?
 A. Time spent when idling.
 B. Free time after any meaningful activity.
 C. Time to play with friends.
 D. Time to visit relatives and friend.
86. Afforestation refers to:-
 A. cutting down trees
 B. planting trees after cutting
 C. using forests to make money
 D. planting trees where non existed
87. Christians pay taxes in order to:-
 A. avoid being arrested
 B. to obey God
 C. support the government run its projects
 D. to show that they are rich
88. Everyone is expected to show respect for leaders and authority **mainly** because:-
 A. leaders are always right
 B. leaders are powerful
 C. leaders represent God on earth
 D. they can be punished for disobedience
89. The **best** way to spend 1000 shillings note given to John by his uncle is to:-
 A. donate the money for a church project
 B. save the money for future use
 C. buy a story book
 D. share with friends
90. Missionaries came to Kenya in order to:-
 A. rebuke sinners
 B. build schools
 C. construct hospitals
 D. convert them to christians

IRE

61. Which of the following surahs condemn the vice of pilling up wealth for worldly gains?
 A. Takathur, Maun
 B. Kauthar, Asr
 C. Humazah, Takathur
 D. Nas, Nasr
62. The surah that was revealed to conclude the mission of prophet Mohammed S.A.W was:-
 A. Nasr
 B. Nas
 C. Dhuha
 D. Alaq
63. Mountains are likened to carded during the judgement day as described in surah:-
 A. Zilzala
 B. Qariah
 C. Quraish
 D. Adiyat
64. The doers of good will have endless rewards in paradise. The surah bearing this message is:-
 A. Tiyā
 B. Falāq
 C. Ikhlās
 D. Inshirah
65. Indeed difficulties come with ease. The message is conveyed from surah:-
 A. Alaq
 B. Dhuha
 C. Quraish
 D. Inshirah

66. "What will mostly take people to paradise will be the fear of Allah(S.W) and good behaviour" The hadith is meant to teach on:
 A. Tawakkul
 B. Ihsaan
 C. Taqwa
 D. good deeds
67. Which of the following historic events is regarded as a milestone in Islam?
 A. Isra-wal Miiraj
 B. Conquest of Makkah
 C. Hijra to Madinah
 D. Hijattul Widaah
68. Which is the **correct** direction of the earliest Qibla?
 A. Jerusalem
 B. Habash
 C. Iraq
 D. Kuwait
69. The **FUNDAMENTAL** pillar of hajj is:
 A. Arafat
 B. Sa'ay
 C. Ihraam
 D. Tawaf
70. One of the following is **not** a sign of hypocrisy. Which one is it?
 A. Telling lies
 B. Betraying the trust
 C. Fornicating
 D. Failing to fulfill a promise
71. Which of the following parts are common in **both** udhu and tayammum?
 A. Head and legs
 B. Face and mouth
 C. Ears and hands
 D. Face and arms
72. The prayer conducted during an eclipse of the moon is:-
 A. Istikhara
 B. Tahajjud
 C. Kusuf
 D. khusuf
73. Four pupils were asked to list the order of the rites of the dead. The following are their responses.
 • Ali - Dafan, ghusul,kafan,swalatul janazah,
 Ahmed - ghusul, dafan,swalatul janazah, kafan.
 Bilaal - kafan, swalatul janazah,dafan, ghusul.
 Baid - ghusul, kafan, swalatul janazah, dafan.
 Which pupil gave the **correct** response?
 A. Ahmed
 B. Said
 C. Ali
 D. Bilaal
74. The meal taken before muslims begin their fast is termed as:
 A. white rice
 B. Iftaar
 C. Suhuur
 D. Mas-hurin
75. Which one the following months is among the **ASH-HURUL-HURUM**?
 A. Muharram
 B. Safar
 C. Shaaban
 D. Rabiul awwal
76. The attribute of Allah S.W that means the **AL -Mighty** is:
 A. AL - Khaaliq
 B. AL - Baari
 C. AL - Qahhaar
 D. AL - Aliim
77. After the first pledge at Aqabah the prophet S.A.W deployed one of the following to teach Islam in Yathrib. Who was he?
 A. Ali
 B. Umar
 C. Abubakar
 D. Mus-ab
78. Which is **untrue** about the angels of Allah?
 A. They were created from light
 B. They have no sex
 C. They can assume any form
 D. They offend Allah S.W

79. Which of the following is a commonality among muslims?
 A. Mosque plan
 B. Mode of dressing
 C. Qibla
 D. Iftaar meals
80. All the following were agents of spreading islam along the East African coast **except:-**
 A. madrasa
 B. mosques
 C. crusades
 D. intermarriages
81. Who among the following angel is in charge of hell fire?
 A. Malik
 B. Mikail
 C. Izrail
 D. Israfil
82. The main distinction between Iddul-fitr and Iddul-adh-ha prayers is:
 A. the number of rakaah
 B. the time of prayer
 C. the number of sermons
 D. the time of breakfast
83. Which of the following names refers to the holy Kaabah?
 A. Baitu Maqdis
 B. Masjidul Aqswah
 C. Baitul Attiq
 D. Masjid qiblatein
84. The day of judgements has different names. Which one of them means the resurrection day?
 A. Yaum Mah-shar
 B. Yaumul Qiyamah
 C. Yaumul Baath
 D. Yaumul Hukmu
85. When a person dies all his "Ammal" are closed **except** for three things. Which one is **not** among the three things?
 A. Useful knowledge
 B. A pious child
 C. His house
 D. continuous charity
86. During Isra-wal-miiraj all the following happened **except**:
 A. the eyes of the prophet being removed and cleaned.
 B. The prophet being given a special drink
 C. The prophet being taken to heaven
 D. The prophets chest being opened
87. The first Muadh in the Islamic calendar was:-
 A. Abdallah
 B. Ali
 C. Abubakar
 D. Bilaal
88. Which of the following battles taught muslims obedience?
 A. Badr
 B. Uhud
 C. Khandaq
 D. Tabuk
89. The pillar of hajj that reminds us of hajar is:-
 A. sa'ay
 B. Tawaf
 C. Ihraam
 D. Arafah
90. The islamic practice of putting something sweet on the lips of a baby at birth is called:-
 A. lipsticking
 B. Tat-yub
 C. Tabaruk
 D. Tahnik