

**SOCIAL STUDIES
AND
RELIGIOUS
EDUCATION**

Time: 2 hours 15 minutes

READ THESE INSTRUCTIONS CAREFULLY

1. You have been given this question booklet and a separate answer sheet. The question booklet contains 90 questions.
2. Do any necessary rough work in this booklet.
3. When you have chosen your answer, mark it on the **ANSWER SHEET**, not in the question booklet.

HOW TO USE THE ANSWER SHEET

4. Use an ordinary pencil.
5. Make sure that you have written on the answer sheet:

YOUR INDEX NUMBER

YOUR NAME

NAME OF YOUR SCHOOL

6. By drawing a **dark line** inside the correct numbered boxes mark your full Index Number (i.e. School Code Number and the three-figure Candidate's Number) in the grid near the top of the answer sheet.
7. Do not make any marks outside the boxes.
8. Keep your answer sheet as clean as possible and do not fold it.
9. For each of the questions 1 – 90 four answers are given. The answers are lettered A, B, C and D. In each case only **ONE** of the four answers is correct. Choose the correct answer.
10. On the answer sheet the correct answer is to be shown by drawing a **dark line** inside the box in which the letter you have chosen is written.

Example

In the question booklet:

33. Which one of the following industries is a service industry?

- A. Cement making
- B. Bicycle repair
- C. Motor vehicle assembling
- D. Flour milling

The correct answer is **B** (Bicycle repair)

On the answer sheet:

3 A B C D **13** A B C D **23** A B C D **33** A B C D **43** A B C D

In the set of boxes numbered **33**, the box with the letter **B** printed in it is marked.

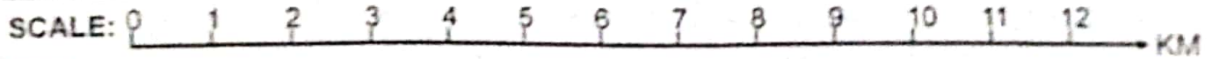
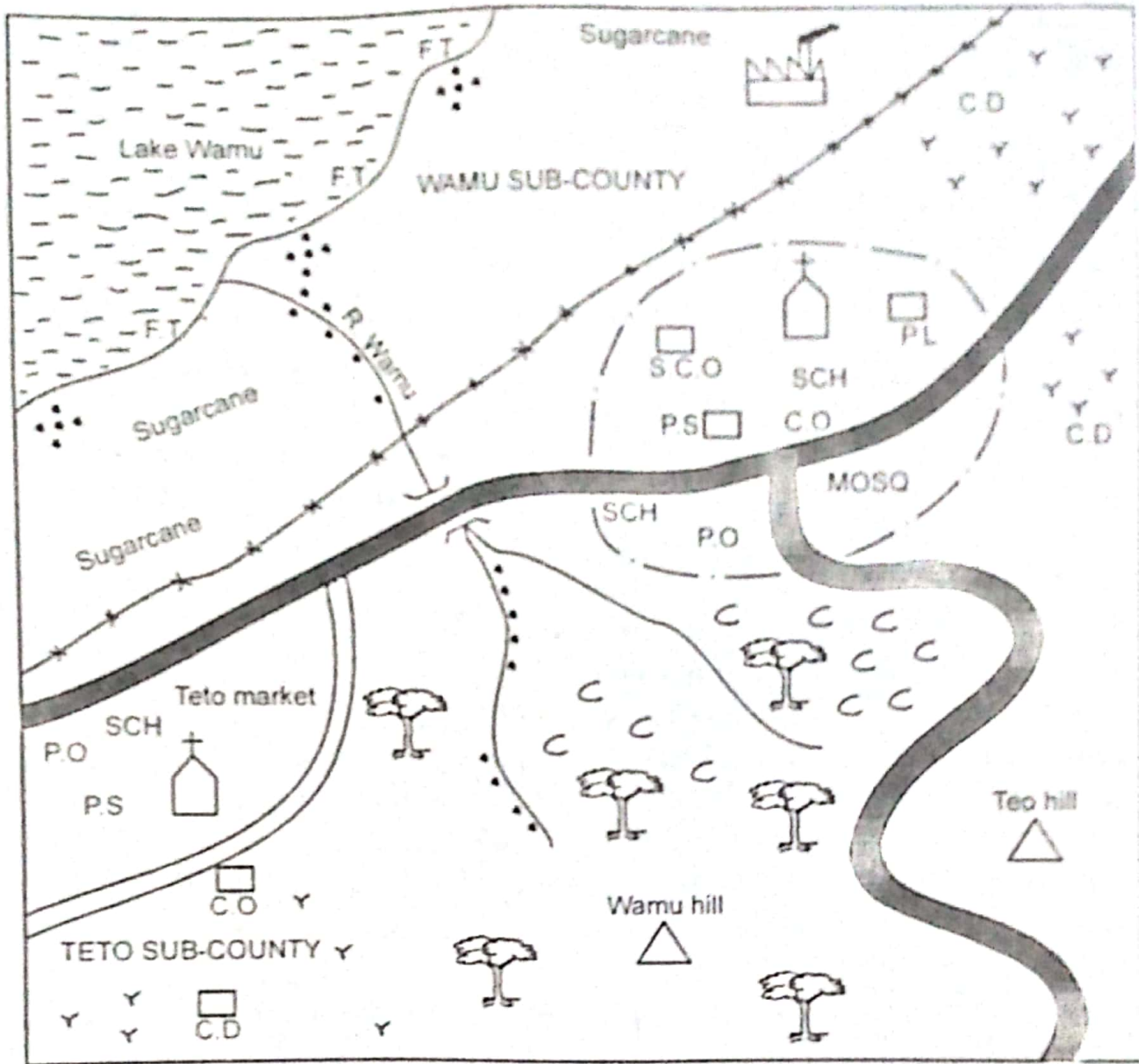
11. Your **dark line** **MUST** be within the box.
12. For each question **ONLY ONE** box is to be marked in each set of four boxes.

This question paper consists of 12 printed pages.

Candidates should check the question paper to ensure that all the pages are printed as indicated and no questions are missing.

PART I: SOCIAL STUDIES

WAMU AREA



KEY

MOSQ	Mosque
S.C.O	Sub-county offices
P.O	Post office
SCH	School
P.S	Police station
C.D	Cattle dip
C C	Coffee farms
P.L	Public library
F.T	Fish trap

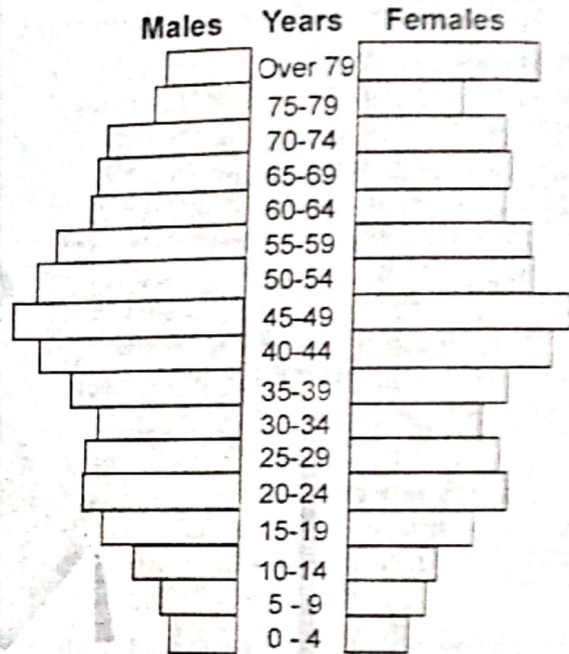
C.O	Chief's office
	Factory
	Church
	Forested area
	Tarmac road
	Murram road
	Town boundary
	Sub-county boundary
	Human settlement

Study the map of Wamu area and use it to answer questions 1 to 7

- The land in Wamu area slopes towards
 - North West
 - North
 - North East
 - South East
- The approximate length of the tarmac road from the junction at the town to the South East end is?
 - 16km
 - 8km
 - 12km
 - 20km
- The climate experienced in Wamu sub-county is **LIKELY** to be
 - hot and dry
 - hot and wet
 - cool and wet
 - cool and dry
- Human settlement and distribution in Wamu area is **MAINLY** influenced by
 - transport and communication
 - climate
 - economic activities
 - drainage
- Wamu area is **LIKELY** to be
 - location
 - sub-county
 - district
 - county
- The growth and development of the town in Wamu area is **MOSTLY** influenced by
 - the administrative offices.
 - a rich agricultural neighbourhood.
 - road junction
 - fishing activities
- Which one of the following social services is **NOT** offered in Wamu area?
 - Education
 - Health
 - Security
 - Religious services
- Three of the following are functions of the board of management in a primary school. Which one is **NOT**?
 - Employing all teachers required in the school.
 - Ensuring the safety of pupils, teachers and school workers.
 - Ensuring that school funds are managed effectively.
 - Promoting peaceful coexistence in the school.

- The following groups of people consist of Nilotes **EXCEPT**
 - Jie, Acholi and Karamajong
 - Japadhola, Dinka and Turkana
 - Luer, Njemps and Iteso
 - Sandawe, Aweera and Afar

The diagram below shows a country's population structure. Use it to answer question 10



- From the diagram, it is **TRUE** to say that
 - those under 4 years are more than those who are over 45 years of age.
 - birth rate is very high
 - there are more males than females above 79 years of age.
 - young people are fewer than those in the working population.
- Which one of the following is **NOT** an island country in Africa?
 - Comoros
 - Mauritania
 - Cape Verde
 - Seychelles
- The **BEST** way of encouraging citizens in Kenya to obey the law is by
 - educating Kenyans on the importance of observing the laws.
 - rewarding all Kenyans who maintain law and order.
 - employing very many police officers to enforce the law.
 - arresting all law breakers and taking them to prison.

13. Malindi is hotter than Nairobi MAINLY because
- Malindi is nearer to the Arabuko Sokoke forest than Nairobi.
 - Nairobi is at a higher altitude than Malindi.
 - Malindi is nearer to the Equator than Nairobi.
 - Nairobi is at a lower altitude than Malindi.

14. Copper mining in Zambia is important MAINLY because it
- is a raw material for many industries.
 - promotes international trade.
 - generates foreign exchange.
 - creates job opportunities.

15. The following are members of a family.
- | | |
|----------------|------------------|
| (i) uncles | (iv) grandmother |
| (ii) daughters | (v) mother |
| (iii) father | (vi) nephew |

Which one of the following show members of a nuclear family ONLY?

- (ii), (iii), (v)
- (i), (ii), (iii)
- (i), (iii), (vi)
- (ii), (iv), (vi)

16. Which one of the following is TRUE about the Khoikhoi of Southern Africa?
- Decisions affecting the community were reached through a consensus.
 - Their nomadic life enabled them to develop a strong political system.
 - Their main economic activity was to trade with the Dutch.
 - The head of the senior clan became the king of the community.

17. The statements below describe an early visitor to Eastern Africa.
- His mission in Eastern Africa was to look for David Livingstone.
 - He confirmed that the Unalaba had no connection with Lake Tanganyika.
 - He opened the door for Christian missionaries in Bagamla.
 - He died in 1804 in England.

The statement above describe

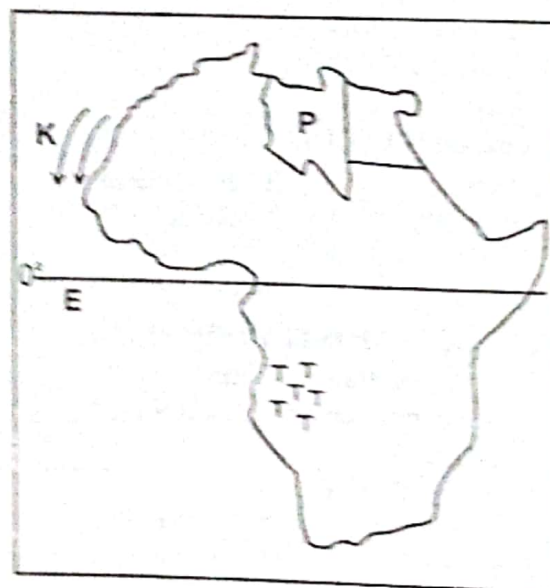
- Sir Henry Morton Stanley
- Seyyid Said
- John Speke
- William Mackinnon

18. The MAIN types of fish reared in fish farms in Kenya are
- Nile perch, daga and tuna
 - Tilapia, trout and cat fish
 - Oyster, mudfish and mullet
 - Tilapia, Nile perch and omema

19. The MOST populated country in Africa is
- Ethiopia
 - South Africa
 - Nigeria
 - Algeria

20. In order to ease congestion in Major towns in Kenya, the government should
- decentralise industries
 - improve security
 - provide decent housing
 - construct bypasses

Use the map of Africa provided to answer questions 21 to 24



21. The ocean currents marked K are called
- Warm canary currents
 - Cold canary currents
 - Warm Benguela currents
 - Cold Mozambique currents

22. The MAIN language group found at area marked T is likely to be
- Bantu
 - Cushites
 - Khoisan
 - The West Atlantic

23. The country marked **P** is known as

- A. Tunisia
- B. Egypt
- C. Chad
- D. Libya

24. The line of latitude marked **E** crosses all the following countries **EXCEPT**

- A. Gabon
- B. Rwanda
- C. Congo Republic
- D. Uganda

25. The following are symbols of national unity. Which one is **NOT**? The

- A. court of arms
- B. national language
- C. national flag
- D. national anthem

26. Who among the following is allowed to acquire dual citizenship in Kenya?

- A. The deputy president of the Republic of Kenya.
- B. The Chief Justice
- C. The head of all pastors in the country.
- D. The attorney general

27. The statements below describe a prominent leader in Kenya

- (i) *He attended Thogoto Mission school.*
- (ii) *He was a champion of African freedom.*
- (iii) *He encouraged reconciliation between Africans and Europeans.*
- (iv) *He opposed majimboism.*

The leader described above is **LIKELY** to be

- A. Mzee Jomo Kenyatta
- B. Daniel Toroitich arap Moi
- C. Oginga Odinga
- D. Professor Wangari Maathai

28. Which one of the following combinations of pre-historic sites are found in Tanzania?

- | | | | |
|----|---|----|--|
| A. | <div style="border: 1px solid black; padding: 5px; display: inline-block;">Olorgesailie
Magosi
Kobi Fora</div> | B. | <div style="border: 1px solid black; padding: 5px; display: inline-block;">Nsogezi
Ishango
Sango Bay</div> |
| B. | <div style="border: 1px solid black; padding: 5px; display: inline-block;">Omo valley
Olduvai Gorge
Laetoli</div> | D. | <div style="border: 1px solid black; padding: 5px; display: inline-block;">Peninj
Kalambo
Isimila</div> |

29. Below are uses of a mineral in Kenya

- (i) *It is used in the manufacture of cement.*
- (ii) *It is used in making telescope and camera lenses.*
- (iii) *It is used in making cans.*
- (iv) *It is used in making sulphuric acid.*

The mineral with the above uses is **LIKELY** to be

- A. Diatomite
- B. Soda ash
- C. Fluorspar
- D. Limestone

30. The following are ways of interaction among communities

- (i) *birthday celebrations*
- (ii) *migrations*
- (iii) *trade*
- (iv) *the social media*
- (v) *games and sports*

Which of the following combinations shows ways in which communities interacted in the past as well as in modern times?

- A. (i) and (ii)
- B. (iv) and (v)
- C. (iii) and (v)
- D. (ii) and (iv)

31. The **BEST** way of solving conflicts involving two or more countries is

- A. leaving God to solve the conflict
- B. reporting the conflict at the international court of Justice
- C. involving a mediator who will talk to the disagreeing parties
- D. taking arms against one another by involving their armed forces.

32. In Kenya, human rights are found in

- A. courts of law
- B. the constitution
- C. the national assembly
- D. all police stations

33. The **MAIN** problem facing trade in Eastern Africa is

- A. production of similar goods
- B. poor transport and communication networks.
- C. political instability and insecurity
- D. inadequate capital to invest in trade.

34. The MAIN reason that makes the print media to be widely used in towns is
- that there are more people who have money to buy them.
 - availability of more printing presses in towns.
 - the cheapest way of communication
 - high literacy levels in towns.

35. Which one of the following is the MAIN cause of accidents on Kenyan roads?
- unroadworthy vehicles.
 - carelessness of road users.
 - overspeeding
 - bad weather

36. Three of the following are roles of political parties in Kenya. Which one is NOT?
- Ensuring that constituency and ward boundaries are drawn.
 - Respecting and promoting human rights and freedoms.
 - Opening up the democratic space
 - Informing citizens about important issues through the media.

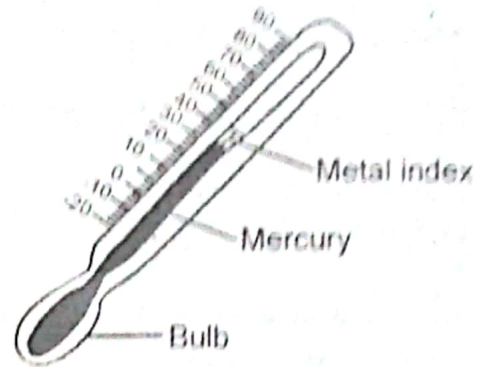
37. The following are conditions favouring the growing of a crop in Kenya.
- A wide range of relief.
 - Rainfall of between 400mm to 2000mm annually.
 - moderate temperatures with the lowest at 19°C and the highest at 28°C.
 - Well drained productive soils such as loam soils.

The conditions listed above favour the growing of?

- | | |
|-----------|----------|
| A. Coffee | B. Maize |
| C. Tea | D. Wheat |

38. The MAIN problem that was initially faced during the establishment of the Aswan High Dam is
- siltation
 - inadequate funds.
 - water-borne diseases
 - displacement of people

Use the diagram drawn below to answer question 39



39. The weather instrument shown above is known as
- Minimum thermometer
 - Hygrometer
 - Maximum thermometer
 - Mercury thermometer

40. Which one of the following is TRUE ABOUT forestry in Africa?
- Planted forests are mostly found in highlands.
 - The main type of forests are the extensive tropical rain forests.
 - Mangrove forests are continuous along the coasts of Africa.
 - There is a mixture of hardwoods and softwoods in Mediterranean forest.

41. Three of the following are TRUE about slash-and-burn agriculture. Which one is NOT?
- Farming activities were mainly done by hand.
 - Farmers practised crop rotation instead of plot rotation.
 - People mainly grew food crops for home use.
 - It was possible where there was plenty of land.

42. Three of the following leaders were present during the formation of the Kenya African National Union (KANU) IN 1960. Which one was not?
- Daniel Moi
 - Tom Mboya
 - James Gichuru
 - Arthur Ochwada
43. Which one of the following factors **LEAST** explains why the Nandi resisted the British occupation of their land?
- The Nandi feared losing their land to the Europeans.
 - The Nandi did not want to convert into Christians.
 - The Nandi did not want to be ruled by outsiders.
 - They did not want the railway to pass through their land.
44. Which one of the following is an economic right?
- Right of life
 - Right to work
 - Freedom of speech
 - Right to clean water
45. The **MOST** efficient and expensive method of preserving fish is
- | | |
|-------------|---------------|
| A. canning | B. smoking |
| C. freezing | D. sun-drying |
46. Which one of the following is the **MAIN** problem facing wildlife in Kenya today?
- pollution
 - drought
 - pests and diseases
 - population increase
47. Kabaka Mutesa I and Waiyaki wa Hinga have one thing in **COMMON**. It is that they
- were kings in their communities.
 - led their people to independence.
 - resisted the British rule in Eastern Africa.
 - agreed to work with the British colonialists.

48. In Eastern Africa, pipelines are **MAINLY** used to transport
- petroleum products
 - liquid petroleum gas.
 - crude oil
 - water
49. Which one of the following is a natural factor that influences climate change?
- Volcanic eruptions
 - Warming due to the green house effect.
 - Desertification
 - Damage to the O-zone layer
50. The following are sources of government revenue.
- Entertainment taxes.*
 - Grants and donations from donors.*
 - Sales of business permits*
 - Sale of government licences.*
 - Petroleum levy*
- Which one of the following combinations shows sources of revenue for county governments only?
- (i), (ii), (iii)
 - (ii), (iii), (iv)
 - (iii), (iv), (v)
 - (i), (iii), (v)
51. Who among the following are **NOT** members of the National Assembly?
- 12 nominated members.
 - 47 elected women, each representing a county.
 - 290 members elected from 290 constituencies.
 - 16 women members nominated by political parties.
52. The kingdom of Old Ghana was founded by the
- people of Ghana
 - Agikuyu people
 - Soninke people
 - Nyamwezi people

53. In order to effectively colonise their colonies in West Africa, the French used a system known as
- Association
 - Assimilation
 - Direct rule
 - Paternalism
54. Ndeti would like to start a poultry farm for commercial purposes. The **MAIN** factor that he should consider is
- Availability of capital for a start.
 - Availability of market for poultry products.
 - Availability of poultry feeds and clean water.
 - Nearness to a good transport and communication network.
55. Which one of the following trade blocs is **CORRECTLY** matched with its headquarters?
- ECOWAS - Lusaka, Zambia
 - COMESA - Lagos, Nigeria
 - SADC - Gaborone, Botswana
 - EAC - Nairobi, Kenya
56. The **MAIN** function of the Kenya Navy is to
- defend the country's air space against attacks
 - restore peace in any part of the country.
 - keep watch over the Kenyan beaches.
 - guard the country's water bodies
57. The chief administrator of the judiciary is the
- chief registrar of the judiciary
 - met justice
 - senior chief justice
 - judicial service commission
58. Which one of the following agencies of the United Nations (UN) distribute food in refugee camps?
- Food and Agriculture Organization.
 - World Food Programme.
 - United National High Commission for Refugees.
 - The World Bank.
59. Road transport is the mostly used form of transport in Kenya **MAINLY** because
- Most people in the country prefer to use road transport.
 - It is the safest form of transport in the country.
 - It is most improved form of transport in the country.
 - It is the cheapest form of transport in the country.
60. The officer in-charge of elections at the constituency level is the
- presiding officer
 - polling clerk
 - returning officer
 - chairperson of the Independent Electoral and Boundaries Commission.

**JESMA K.C.P.E PREDICTION WILL BE OUT ON 8TH MARC. 2021
DONT MISS!!!**

PART II: RELIGIOUS EDUCATION

SECTION 1.

CHRISTIAN RELIGIOUS EDUCATION

61. According to Genesis story of creation, Adam and Eve were created by God. Which one of the following statements is TRUE?
- A. Eve was created to be Adam's companion.
 - B. Eve named all the creatures on the earth.
 - C. Eve was created to bear children for Adam.
 - D. Both Adam and Eve were created at the same time.
62. "Will you sweep away the righteous with the wicked?" What if there are fifty righteous people in the city?" Gen 18:23-24. Who among the following people pleaded with God for the cities of Sodom and Gomorrah?
- A. Noah
 - B. Abraham
 - C. Lot
 - D. Moses
63. Which one of the following places was the original home of Abraham before he was called by God?
- A. Caanan
 - B. Ur
 - C. Haran
 - D. Egypt
64. Which one of the following is the MAIN reason why Pharaoh the King of Egypt had ordered his soldiers and midwives to kill every Israelite male child that was born?
- A. The boy children were so many in Egypt.
 - B. The Israelites had failed to follow his commands.
 - C. He wanted the Israelites to go back to their country.
 - D. He feared the Israelites would increase and become a threat.
65. When King Pharaoh refused to set the Israelites free, God commanded Moses to use his staff to cause the plagues that would force Pharaoh to let them go. Which one of the following plagues made Pharaoh let the Israelites go? The
- A. plague of blood.
 - B. plague of frogs.
 - C. death of Egyptians firstborns.
 - D. plague of boils.
66. According to Numbers 27:18, Who among the following people was chosen as Moses' successor?
- A. Caleb
 - B. Aaron
 - C. Joshua
 - D. Jethro
67. Which one of the following statements is NOT true about the judges in Israel?
- A. Samuel was the last judge in Israel.
 - B. Othniel was the first judge in Israel.
 - C. Judges were appointed by Kings
 - D. Samson was the strongest judge
68. Which among of the following people was BOTH a judge and a prophetess in Israel?
- A. Jael
 - B. Abigail
 - C. Esther
 - D. Deborah
69. The boy that was raised to life by prophet Elisha was the son of the
- A. widow of Nain.
 - B. Shunamite woman
 - C. widow of Zarephath
 - D. the man called Jairus
70. The following prophecies concerning Jesus was made by one of the prophets.
- (i) He will bring good news to the poor.
 - (ii) He will recover sight to the blind.
 - (iii) He will set free the oppressed.
- Who among the following prophets made the above prophecy?
- A. Joel
 - B. Micah
 - C. Isaiah
 - D. Jeremiah
71. According to Luke 2:21-40 when Joseph and Mary took baby Jesus to the temple for dedication they found the following people. Who were they?
- A. Simeon and Anna
 - B. Zachariah and Elizabeth
 - C. Simeon and Elizabeth.
 - D. Zachariah and Anna
72. From the incident when Jesus attended the passover festival at the age of twelve, Christians learn that children should
- A. obey their parents.
 - B. be taken for passover festival.
 - C. always accompany their parents for events.
 - D. always remain at the temples with teachers.
73. Which one of the following events did NOT take place during the baptism of Jesus?
- A. The heavens were opened.
 - B. A voice was heard from heaven.
 - C. The curtain was torn into two.
 - D. The Holy Spirit came down in form of a dove.

74. Blessed are those who are persecuted for righteousness of Jesus in the Kingdom of God. Matthew 5. These words were spoken by Jesus
- A. during his baptism.
 - B. during the sermon on the mount.
 - C. when choosing the twelve disciples.
 - D. during his temptations in the wilderness.
75. Which one of the following parables of Jesus teaches Christians that God always give us a second chance? The
- A. two men and Samaritan.
 - B. unmerciful servant.
 - C. unfruitful fig tree.
 - D. good Samaritan.
76. When Jesus was on earth, He performed many miracles. Which one of the following was not supposed to have happened to receive such a miracle?
- A. Leprosy
 - B. Paralysis
 - C. Fever
 - D. Blindness
77. Which one of the following is the MAIN reason why Jesus asked his disciples to pray at the Mount of Olives? He wanted them to
- A. save him from his enemies.
 - B. avoid falling into temptation.
 - C. be ready to fight their enemies.
 - D. watch over which direction the enemy would come.
78. Which one of the following activities was done by Jesus in preparation for his coming death?
- A. Feeding of the five thousand people.
 - B. visiting the blind Bartimaeus.
 - C. sharing the last meal with them.
 - D. giving them a sermon on the mount.
79. Which one of the following is the MAIN lesson that Christians learn from the resurrection of Jesus Christ? Christians should be
- A. hopeful
 - B. patient
 - C. obedient
 - D. faithful
80. The following are Christian values. Which one is NOT?
- A. Purity
 - B. Humility
 - C. Mercy
 - D. Fame
81. Who among the following people taught that faith without action is dead?
- A. Paul
 - B. James
 - C. Peter
 - D. Timothy
82. In the early church the disciples agreed to choose men who were filled with the Holy Spirit and wisdom in order to assist in the work of distributing food to the widows. The following people were chosen EXCEPT
- A. Philip
 - B. Timothy
 - C. Prochorus
 - D. Nicanor
83. Which one of the following is NOT a rite of passage in African Traditional Society?
- A. Baptism
 - B. Initiation
 - C. Death
 - D. Birth
84. Which one of the following activities is found in BOTH Christian and African Traditional practices during weddings?
- A. Feasting of gifts.
 - B. Feasting of sacrifices.
 - C. Offering of sacrifices.
 - D. Praying for the couple.
85. Which one of the following activities in Traditional African Culture is NOT started out by an elder?
- A. Circumcision
 - B. Naming the newborn.
 - C. Offering sacrifices.
 - D. Naming children.
86. One boy from your classroom is writing from another paper. As a Christian what is the BEST action to take?
- A. Report him to the class teacher.
 - B. Give him a thorough beating.
 - C. Report him to the headmaster.
 - D. Discourage him and ask him to return what he had stolen.
87. Four pupils spent their leisure time as follows. Who among them spent his leisure time BEST as a Christian?
- A. Raju. attended bible study.
 - B. Nelson. visited the sick.
 - C. John. participated in all school sports.
 - D. Leo. watched Christian movies.
88. Mike found himself in the company of drunkards. As a Christian what is the BEST thing for him to do?
- A. Play for them.
 - B. Join them in drinking.
 - C. Report them to the nearest police station.
 - D. Advise them about the dangers of getting alcohol.
89. Which one of the following is a fruit of Holy Spirit?
- A. Peace
 - B. Fear
 - C. Envy
 - D. Hatred
90. Which one of the following acts by missionaries had a NEGATIVE effect on Africans? They
- A. brought Christianity.
 - B. explained the Bible.
 - C. enslaved Africans.
 - D. taught Africans how to read and write.