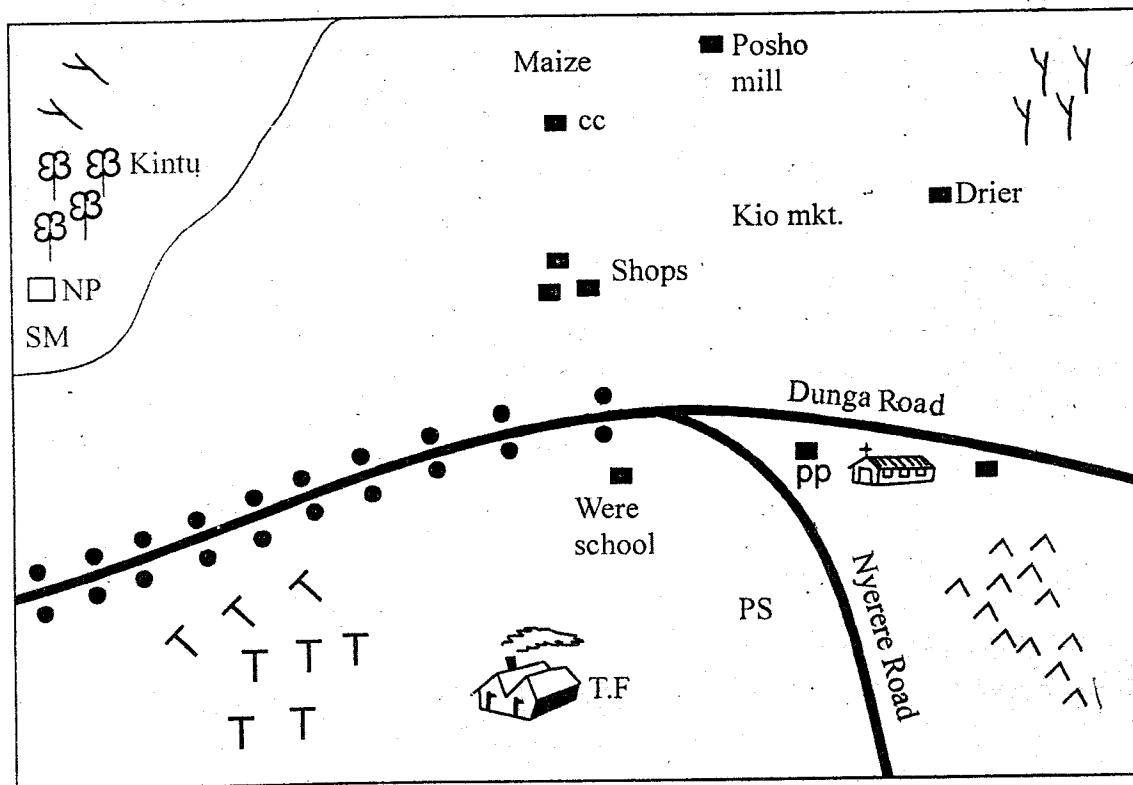
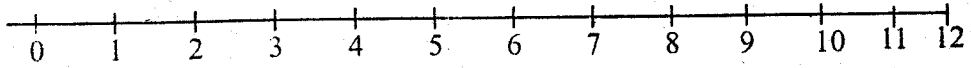


PART I: SOCIAL STUDIES

MATI AREA



Scale



KM

KEY

SM - Saw milling	Church	Settlement
Forest	Coffee	P.P Police Post
Tarmac road	Wheat	C.C Chief Camp
Pyrethrum	N.P National Park	Tea Factory
		PS - Police Station
		Mkt - Market

Study the map of MATI area and answer questions 1 - 7

1. What is the climate of the North Western parts of Mati Area
 - A. cool and wet
 - B. hot and warm
 - C. hot and wet
 - D. hot and dry

2. Which statement among the following is true about the population distribution in Mati Area?
 - A. Most people live near the pyrethrum farms
 - B. Most people live around Kio market
 - C. Most people live along Dunga road and Nyerere road
 - D. Most people live around the tea farms

3. What is the **main** economic activity practised in Kintu Area?
 - A. Trading.
 - B. Farming.
 - C. Fishing.
 - D. Poaching.

4. Which one of the following food crop is **mainly** grown in Mati Area?
 - A. Wheat.
 - B. Tea.
 - C. Pyrethrum.
 - D. Maize.

5. What is the direction of the tea factory from the posho mill?
 - A. North East
 - B. South East
 - C. South West
 - D. North West

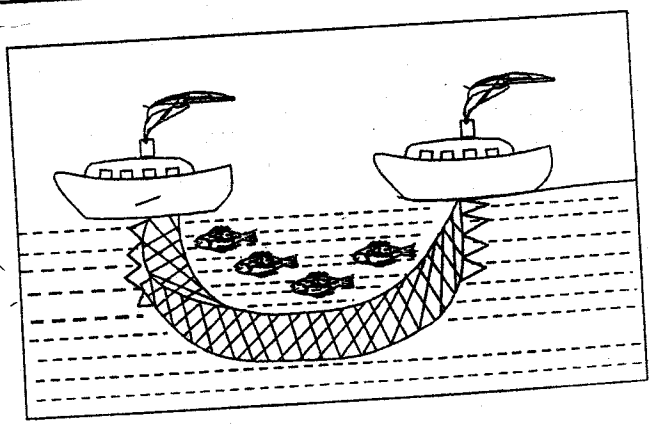
6. Which one of the following social services is lacking in Mati Area?
 - A. School.
 - B. Market.
 - C. Church.
 - D. Hospital.

7. A thief was caught stealing books from Were school. Where should the headteacher report the matter? At the
 - A. Forest warden's office.
 - B. National park.
 - C. Police station.
 - D. Chairman of Kio market's office.

8. Who among the following African leaders collaborated with the British?
 - A. Koitalel Samoei
 - B. Laibon Lenana
 - C. Mukite wa Namene
 - D. Mekatilili wa Menza

9. The following were functions of clans during the pre-colonial period **except**;
 - A. Offering guidance on the clan's religion
 - B. Assisting members in times of need
 - C. Allocating clan land to members
 - D. Defending members in a court of law.

Use the diagram below to answer question 10.



10. The fishing method illustrated above is;
 - A. Drifting method.
 - B. Long lining.
 - C. Purse seining.
 - D. Trawling.

11. Which of the following factor undermines law and order in the society?
 - A. Nepotism.
 - B. Equality.
 - C. Faithfulness.
 - D. Patriotism.

12. Which group of communities below belong to the Nilo-Saharan speakers?

A. Songhai Dendi Kanuri Zandi	B. Zandi Fulani Yao Kanuri
--	-------------------------------------

C. Berers Ndembele Zulu Sotho	D. Shona Ngoni Kru Fulani
--	------------------------------------

13. The statements below show the conditions necessary for the growth of a certain crop in Africa

- (i) Deep, fertile and well drained soils
- (ii) High rainfall above 1000mm that is well distributed
- (iii) Temperature ranges of between 21°C to 26°C
- (iv) Protection from strong wind
- (v) A short dry period to allow ripening

The conditions above, favour the growth of

- A. maize
- B. tea
- C. bananas
- D. cloves

14. Which one of the following was a way through which communities in the past traced their origin?

- A. Through marriage
- B. Through the female ancestors
- C. Through the male ancestors
- D. Through the mother's clan

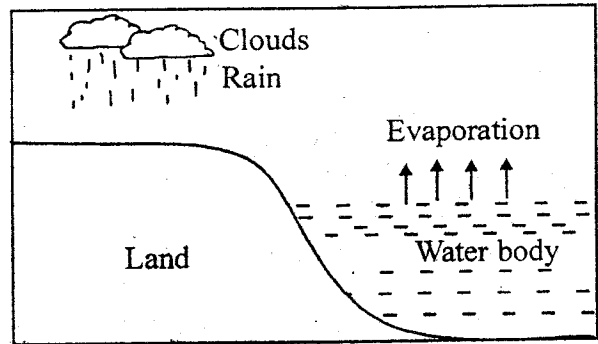
15. Which is the **main** tourist attraction in Kenya?

- A. Coastal beaches.
- B. Tropical climate.
- C. Variety of wildlife.
- D. Cultural activities.

16. The **main** reason of conserving forests in Kenya is to;

- A. protect sources of water.
- B. provide areas for recreation
- C. protect medicinal plants
- D. provide timber for building and construction.

Use the diagram to answer questions 17.



17. The diagram above shows the formation of

- A. a sea breeze
- B. relief rainfall
- C. convectional rainfall
- D. a land breeze

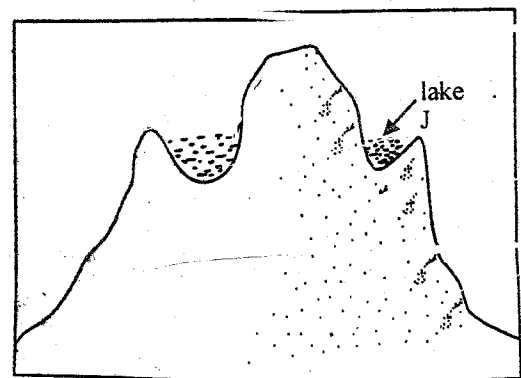
18. Kenya was declared a British colony in the year;

- A. 1920
- B. 1915
- C. 1896
- D. 1925

19. Who is responsible for day to day running of a public school in Kenya? The

- A. Deputy headteacher.
- B. Headteacher.
- C. Senior teacher.
- D. Teacher on duty.

20. Use the diagram below to answer question 20 and 21



The lake marked J was formed due to;

- A. glacial action
- B. human activities
- C. blockage of a river channel by lava
- D. wind action on the mountain.

21. The lake marked J is known as a
 A. An oxbow lake
 B. A depression
 C. A lava - dammed lake.
 D. A conrie lake.
22. The swamp in which River Ewaso Nyiro drains its water is known as
 A. Ewaso Nyiro swamp
 B. Lorian swamp
 C. Yala swamp
 D. Turkwel swamp.
23. The following are causes of conflict in the society **except**
 A. Religious differences.
 B. Poverty.
 C. Not taking part in decision making.
 D. Fairness.
24. Which one of the following was **not** a function of the kabaka in the traditional Buganda government?
 A. He had judicial duties.
 B. He had religious duties.
 C. He was commander in chief of the army.
 D. He was the treasurer of the kingdom.
25. The headquarters of COMESA are at;
 A. Nairobi
 B. Addis Ababa
 C. Lusaka
 D. Dar-es-salaam.
26. When does equinox occur
 A. March 21st and 22nd September
 B. June 21st and December 22nd
 C. Fbruary 22nd and 22nd July
 D. My 18th and December 23rd
27. Which of the following pairs of rivers are used for the production of Hydro Electric Power in Africa?
 A. Limpopo, Omo.
 B. Congo, Gambia.
 C. Senegal, Volta.
 D. Tana, Zambezi.
28. Three of the following are responsibilities of children at home **except**?
 A. Respecting family values.
 B. Respecting the elderly.
 C. Providing the basic needs.
 D. Assisting household work.
29. What are the **main** factors that influence pastoralism in Kenya?
 A. Cool and wet climate
 B. Water and pasture land
 C. Grazing land and market
 D. Pasture land and market.
30. Most of the early visitors to Eastern Africa were
 A. traders and hunters
 B. gathers and missionaries
 C. traders and explorers
 D. explorers and slave traders
31. Which group among the following, contains crater lakes found in Africa?
- | | |
|---|---|
| A. Lake Chala
Lake Ngozi
Lake Katwe
Lake Nyos | B. Lake Naivasha
Lake Nakuru
Lake Nyos
Lake Kariba |
| C. Lake Nyos
Lake Malawi
Lake Tana
Lake Victoria | D. Lake Nasser
Lake Nyos.
Lake Naringo
Lake Naivasha |

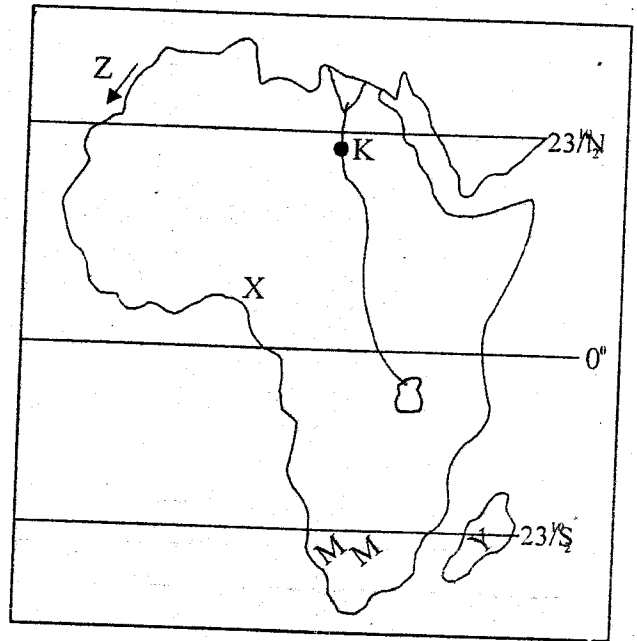
32. The time at town K which is 30°E is 02.00pm. What will be the time in town Y which is 30°W ?
- A. 10.00pm.
 - B. 12.00 am.
 - C. 1200 pm.
 - D. 10.00 am.

33. Which group of trees among the following contains soft woods only?

A. Mahogany Oak Iroko Mvule	B. Teak Mvule Iroko Ebony
C. Ekuone Ebony Heart wood Rosewood	D. Pine Cypress Eucalyptus Cedar

34. What is the role of the headteacher during the school management committee meeting?
- A. Taking minutes.
 - B. Chairing meetings.
 - C. Advising the committee.
 - D. Controlling the meeting.
35. Which one of the following is the main reason for respecting human rights?
- A. Promotion of social justice.
 - B. Freedom from discrimination.
 - C. Preservation of human dignity.
 - D. Making democracy to succeed.

Use the map of Africa below to answer questions 36 - 39.



36. The man made lake marked K on the map is;
- A. Lake Swan
 - B. Lake Volta
 - C. Lake Nasser
 - D. Lake Kariba.
37. The island marked Y was colonised by;
- A. France
 - B. British
 - C. Germany
 - D. Portuguese.
38. Which of the following factor is mainly responsible for the low population in the area marked MM?
- A. Very steep relief.
 - B. Low birth rate.
 - C. Swampy conditions.
 - D. Low rainfall.
39. The ocean current marked Z is;
- A. Canary current
 - B. Guinea current
 - C. Agulhas current
 - D. Benguela current.

40. Which group of early visitors in Africa among the following came to look for the source of River Nile?
- | | |
|--|--|
| A. John Speke
David Livingstone
Joseph Thomsoson | B. Seyyid Said
Vasco da Gama
John Speke |
| C. Florence Baka
Joseph Baka
Seyyid Said | D. William-Mackinon
Captain Lugard
Carl Peters |
41. Which one of the following European countries was **not** involved in the scramble for Africa?
- A. Britain
B. Portugal
C. Russia
D. Belgium.
42. Which one of the following is the **best** method of controlling drug abuse in Kenya?
- A. Making anti-drug rules
B. Educating people on effects of drugs abuse
C. Banking of drugs in the country
D. Arresting the drug-users
43. The major contribution of the Tana River Development Project to the economy of Kenya is;
- A. Irrigation
B. Kenya's is main source of electricity
C. Earns Kenya foreign exchange
D. Fishing.
44. A part from introducing new crops and Islam at the East African Coast the Arabs also
- A. introduced new types of marriage
B. introduced slavery
C. introduced new methods of building houses
D. set up industries
45. The crop grown as a raw material for production of insecticides is;
- A. Pyrethrum
B. Cloves
C. Sisal
D. Flowers.
46. Which one of the following statements is **true** about Ethiopia?
- A. It borders Uganda.
B. It has no railway link to Kenya.
C. It's capital city is Khartoum.
D. It was colonised by Britain.
47. Who among the following leaders was **not** a member of the LEGCO in 1958?
- A. Tom Mbaya.
B. Daniel Arap Moi.
C. Oginda Odinga.
D. Jomo Kenyatta.
48. Below are statements about a river found in Africa
- (i) *It is the longest river*
(ii) *It has floating vegetation*
(iii) *It flows North wards*
(iv) *It has few tributaries*
- The river described above is
- A. River Nile
B. River Niger
C. River Zambezi
D. River Limpopo
49. Three of the following are factors that influence climatic changes **except**
- A. Afforestation.
B. Pollution.
C. Deforestation.
D. Industrialization.

50. Which of the following would be the best effective way of reducing the spread of H.I.V/AIDS.
- Encouraging people to change their sexual behaviours.
 - Encouraging the youth to marry early.
 - Putting the rapists in jail for a long time.
 - Encouraging men to marry only one wife.
51. Three of the following are good social habits, in a school environment. Which is the odd one ?
- Truancy.
 - Punctuality.
 - Orderliness.
 - Cleanliness.
52. Three of the following countries are found to the west of the Prime Meridian. Which one is **not**?
- Morocco.
 - Sudan.
 - Liberia.
 - Senegal.
53. Below are statements about a certain mountain found in Africa
- It was formed due to volcanic activity*
 - It forms part of an international boundary*
 - It has no snow at the top*
 - It is a source of some rivers flowing into a lake*
- Which one of the following mountains is described above?
- Mount Kenya
 - Mount Kilimanjaro
 - Mount Elgon
 - Mount Meru
54. The fastest means of sending a written message to Lagos from Nairobi is by;
- E-mail
 - Air
 - Telegraph
 - Road.
55. One of the functions of the prisons department is to
- ensure suspected criminals are judged and sentenced to imprisonment
 - ensure suspected criminals are prevented from committing offences
 - ensure the safe and secure custody of convicted criminals
 - ensure convicted criminals are rehabilitated and trained before being released
56. Which was the **main** way of interaction among the African communities during the pre colonial period
- Trade.
 - Migration.
 - Intermarriages.
 - Games and sports.
57. Railway transport is **not** used in one of the countries in Africa. Which country is it?
- Kenya.
 - Ethiopia.
 - Somalia.
 - Uganda.
58. An election petition against a member of parliament is launched;
- after election
 - before election
 - during elections
 - during nominations.
59. Which one of the following is **not** a main function of the school management committee?
- Raising funds for the school
 - Ensuring that the school funds are properly used
 - Planning for the physical development of the community
 - Carrying out development programmes for the school
60. Which one of the following is **not** a function of the legislature in Kenya?
- To make the laws that govern the country
 - To hold the executive accountable to the people
 - To represent citizens and the interests of the constituencies
 - to hear and determine cases affecting presidential elections.