



KCPE REVEALED

Pinpoint Publishers
Enriching your knowledge

KENYA NATIONAL EXAMINATIONS

PREDICTION MASTER

206506

- SOCIAL STUDIES & RE - 2021

2 hr 15 min

READ THESE INSTRUCTIONS CAREFULLY

1. You have been given this question paper and a separate answer sheet. The question paper contains 90 questions.
2. Do any necessary rough work in this paper.
3. When you have chosen your answer, mark it on the **ANSWER SHEET**, not in this question paper.

HOW TO USE THE ANSWER SHEET

4. Use an ordinary pencil only.
5. Make sure that you have written on the answer sheet

YOUR INDEX NUMBER

YOUR NAME **TAS**

NAME OF YOUR SCHOOL

6. By drawing a dark line inside the correct numbered boxes mark your full Index Number (ie. School Code Number and the three-figure Candidate's Number) in the grid near the top of the answer sheet.
7. Do not make any marks outside the boxes.
8. Keep your answer sheet as clean as possible and **DO NOT FOLD IT**.
9. For each Questions 1 - 90, four answers are given. The answers are lettered **A, B, C, D** in each case only **ONE** of the four answers is correct. Choose the correct answer.
10. On the answer sheet show the correct answer by drawing a dark line inside the box in which the letter you have chosen is written.

Example

In the question booklet

11. Which one of the following is the best means of transporting horticulture products?

A. Air

B. Road

C. Pipeline

D. Railways

The correct answer is A

11. [A] [B] [C] [D]

In the set of boxes numbered 11, the box with letter A printed in it is marked

11. Your dark line **MUST BE** within the box.
12. For each question **ONLY ONE** box is to be marked in each set of four boxes.

Pinpoint

This question paper consists of 12 printed pages

Email: pinpointpublishers10@gmail.com

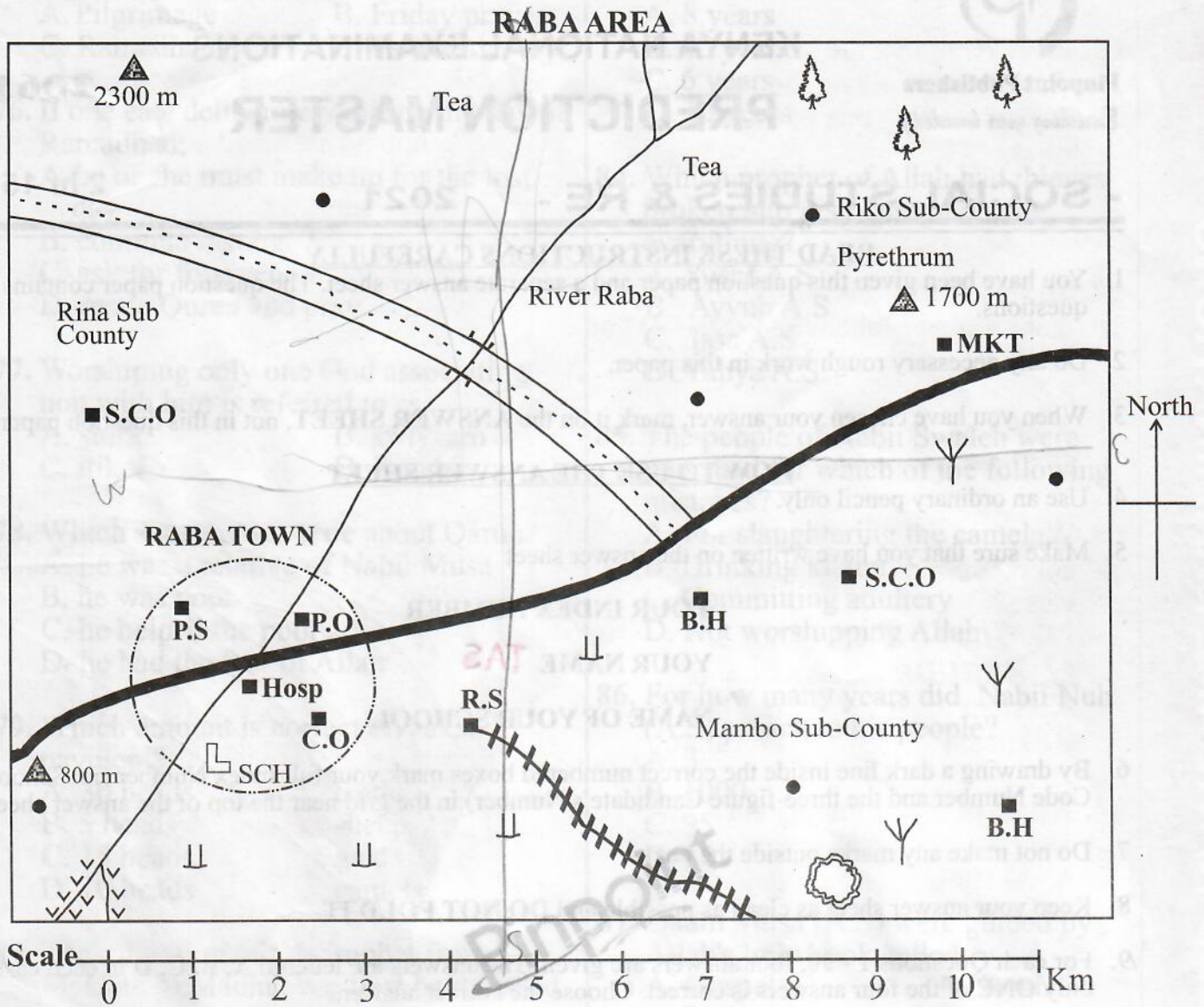


TURN OVER

Covid -19 Always practice social distancing

KCPE REVEALED NATIONAL EXAMINATIONS

SECTION I: SOCIAL STUDIES



KEY

- | | | | | | |
|--|------------------------------|--|-----------------------------|--|--------------------------|
| | Forest | | Settlements | | Hill |
| | Tarmac road <i>Transport</i> | | Railway line | | P.O Post Office |
| | Town boundary | | Market <i>-Trading</i> | | Permanent buildings |
| | Scattered trees | | Hospital <i>Health</i> | | B.H Borehole |
| | R.S Railway Station | | SCH School <i>Education</i> | | R.S Railway station |
| | Murrum road | | Quarry - <i>Mining</i> | | C.O County office |
| | Swamp | | Scrub | | S.C.O Sub-county offices |

Study the map of Raba area and answer questions 1 - 7.

1. The general direction of flow of River Raba is
 - A. South West to North East
 - B. North West to South East
 - C. North East to South West
 - D. North to South East

2. The following activities are carried out in Raba area **except**
 - A. farming → Pyrethrum
 - B. mining - Quarry
 - C. trading - Mkt
 - D. fishing. -

3. Population distribution in Raba area can be described as
 - A. dense
 - B. scattered
 - C. linear
 - D. clustered.

4. The lowest point in Raba area is
 - A. near Raba Town
 - B. Riko Subcounty
 - C. near the borehole
 - D. near the forest.

5. The main source of water for Raba Town is
 - A. river
 - B. swamp
 - C. borehole
 - D. dam.

6. What evidence shows that Raba town is an administrative centre
 - A. police station
 - B. county offices
 - C. school
 - D. post office

- 3
7. The approximate length of the murrum road is
 - A. 12 km
 - B. 18 km
 - C. 6 km
 - D. 9 km

 8. Below are facts about a traditional form of government in Africa.
 - (i) It was ruled by a council of elders
 - (ii) Leadership was based on cyclic age-set system
 - (iii) The leadership was not hereditary
 - (iv) Handing over ceremony of power was known as Ntuiko

The form of government described above was that of

 - A. Nyamwezi
 - B. Ameru
 - C. Baganda
 - D. Abawanga

 9. Which one of the following is a responsibility of children in a family
 - A. keeping family secrets
 - B. sharing out resources
 - C. teaching positive values
 - D. ensuring family protection.

 10. Lake Maghra was formed as a result of
 - A. folding
 - B. action of wind
 - C. downwarping
 - D. volcanicity.

 11. Three of the following are Plain Nilotic speaking groups. Which one is **not**?
 - A. Samburu
 - B. Karamajong
 - C. Kunam
 - D. Dadog

12. The following are importance of a social institution.
- (i) Ensures the continuity of the society
 - (ii) Provides a sense of belonging
 - (iii) Fosters unity among people
- The social institution described above is
- A. family
 - B. school
 - C. marriage
 - D. clan.

13. Below are statements describing activities of early human beings.
- (i) Made advanced speech
 - (ii) Lived in caves
 - (iii) Organised hunting expeditions
 - (iv) Ate cooked food

Which one of the following stone age periods did the early human described above belong?

- A. Middle
- B. Early
- C. Late
- D. Old stage age

14. The following are characteristics of early visitor to Eastern Africa.
- (i) Was a Scottish trader
 - (ii) Owned British India steam navigation company
 - (iii) A town is named after him between Mombasa and Voi
 - (iv) Was a founder of a trading company

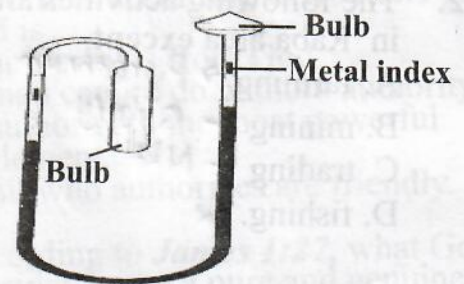
The early visitor described above is

- A. Vasco Da Gama
- B. Seyyid Said
- C. William Mackinon
- D. Carl Peters

15. Which one of the following crops was **not** grown in traditional agriculture?
- A. Arrow roots
 - B. Sweet potatoes
 - C. Beans
 - D. Irish potatoes

16. Which one of the following statements is **not** true about age-groups in traditional African societies? Members
- A. lived in the same village
 - B. were from different clans
 - C. played together
 - D. were born almost at the same time.

17. The diagram below shows a weather instrument.



The above instrument is used to measure

- A. air water
- B. atmospheric pressure
- C. coldness or hotness of a place
- D. nature of wind

18. The following are characteristics of horticultural farming.
- (i) Farming is done in small scale only
 - (ii) Crops depend on favourable climate
 - (iii) Farming is done in coastal areas
 - (iv) Farming is highly mechanized
 - (v) There is adequate labour supply
- Which of the combination above belongs to horticultural farming in Netherlands?
- A. i, ii, iii
 - B. ii, iii, v
 - C. i, iii, iv
 - D. i, v, iii

19. Which one of the following statements **best** describes the importance of peace? It promotes
- A. freedom of movement
 - B. national unity
 - C. good governance
 - D. good citizenship.

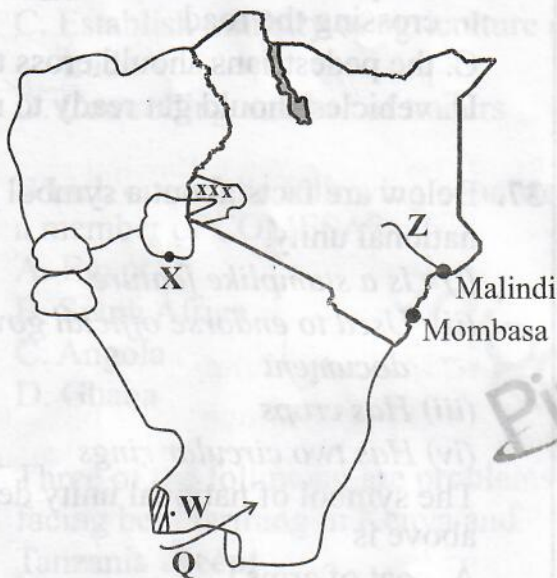
20. In case the deceased died intestate, the manner in which the estate should be distributed is done through

- A. law of succession
- B. a will
- C. public trustee
- D. relatives of the deceased.

21. Which one of the following is a strategic reason why European nations scrambled for colonies in Africa?

- A. To spread Christianity
- B. To gain national prestige
- C. For geographical knowledge
- D. Search for raw materials

Use the map of East Africa provided and answer questions 22 - 25.



22. The lake port marked X is

- A. Majanji
- B. Mwanza
- C. Bukoba
- D. Jinja

23. Which one of the following communities used route W during their migration?

- A. Ngoni
- B. Nyamwezi
- C. Fipa
- D. Wachagga

5

24. Which one of the following types of forests is found in the region marked xxx?

- A. Tropical highland
- B. Tropical rain forest
- C. Tropical lowland forest
- D. Mangrove forest

25. The river marked Z has its source at

- A. Mt. Kenya
- B. Ngong Hills
- C. Abadares
- D. Mau Hills

26. Settlement schemes were established in Kenya due to the following reasons **except** to

- A. settle the landless
- B. reduce congestion in densely populated areas
- C. increase rate of land ownership in Kenya
- D. put more land into use.

27. Below are characteristics of a type of vegetation in Africa:

- (i) Continuous grass cover
- (ii) Buffaloe grass
- (iii) Few trees along river valleys
- (iv) Grass turns yellowish brown during winter

The type of vegetation described above is the

- A. savanna
- B. veld
- C. mountain
- D. mediterranean.

28. Which one of the following United Nations agency promotes literacy?

- A. United Nations High Commission for Refugees (UNHCR)
- B. United Nations Education on Science and Culture Organization (UNESCO)
- C. United Nations Development Programme (UNDP)
- D. United Nations Children Emergency Fund (UNICEF)

29. Three of the following are circumstances under which citizenship can be revoked in Kenya. Which one is not?
- Denouncing the country
 - Committing treason
 - Obtaining citizenship using false pretence
 - Obtaining dual citizenship
30. Which one of the following is a cause of conflicts in the society?
- Competing for scarce resources
 - Economic interactions
 - Cultural differences
 - Differences in opinion
31. The **main** factor influencing population distribution in Kenya is
- drainage
 - economic activities
 - climate
 - relief.
32. The following are uses of a certain mineral
- Making alloys
 - Making T.V. screens
 - Making utensils
- The **main** method of mining the above mineral is
- | | |
|-----------|--------------|
| A. shaft | B. stripping |
| C. placer | D. dredging |
33. Which one of the following is a modern way of interaction?
- Schooling
 - Birthdays
 - Wars and raids
 - Intertribal conflicts
34. Which one of the following is **not** a benefit of direct democracy? The people
- have powers to make decisions
 - choose leaders to make decisions
 - vote for certain laws
 - are involved in making policies.

- 6
35. The following are statements about a leader in Africa.
- Promoted pan Africanism
 - Promoted unity in Africa
 - Introduced free education from primary to university
 - brokered for peace in some African countries
- The leader described above is
- Abdel Nasser
 - Haile Selassie
 - Leopold sedor sengor
 - Julius Nyerere.
36. The green sign of a person in traffic lights indicates
- the vehicle to continue moving
 - the pedestrians to wait before crossing the road
 - the pedestrians should cross the road
 - vehicles should get ready to move.
37. Below are facts about a symbol of national unity.
- Is a stamplike feature
 - Used to endorse official government document
 - Has crops
 - Has two circular rings
- The symbol of national unity described above is
- coat of arms
 - public seal
 - national anthem
 - national flag.
38. Which one of the following statements is **not** true about white settler farmers in Kenya?
- They introduced crop farming among Africans
 - They led to urbanization
 - Led to the problem of squatters
 - They introduced exotic breeds of cattle.

39. Which one of the following statements is **true** about Nairobi Town. It is
 A. an inland container depot
 B. an agricultural centre
 C. a mining centre
 D. a headquarter for international organizations.
40. Which one of the following factors is likely to cause climate change?
 A. Irrigation farming
 B. Global warming
 C. Distance from the sea
 D. Acidic rain
41. Which one of the following is **not** a role of government in promoting trade?
 A. Providing currency
 B. Establishment of market centres
 C. Establish ministry of agriculture and trade
 D. Controlling number of traders
42. Which one of the following countries is a member of COMESA?
 A. Egypt
 B. South Africa
 C. Angola
 D. Ghana
43. Three of the following are problems facing beef farming in Kenya and Tanzania **except**
 A. pests and diseases
 B. inadequate market
 C. high cost of feeds
 D. overstocking.
44. Which one of the following pre-historic sites is **correctly** matched with the country where it is located?
 A. Gambles Cave, Chesowanjo - Kenya
 B. Isimila, Ngoloba - Tanzania
 C. Sango Bay, Magosi - Ethiopia
 D. Hadar, Harer - Sudan
45. Which one of the following is the **most** effective way of conserving forests in Kenya?
 A. Employing more forest guards
 B. Controlling cutting of trees
 C. Using alternative sources of energy
 D. Recycling of paper
46. Okapi bought a pen. Later he found that two pens had been packed. He returned the extra pen to the shopkeeper. Okapi showed
 A. loyalty B. fidelity
 C. obedience D. honesty.
47. The population structure of India is similar to that of Germany in that
 A. there is a large youthful population
 B. there is high infant mortality rate
 C. urban areas are densely populated
 D. majority of the people live in urban centres.
48. Which one of the following is **true** about tourism in Switzerland?
 A. Most of the tourists come from Asia.
 B. Main tourists attraction is winter sports.
 C. Major tourist attraction is the varied glacial scenes.
 D. Main tourists attraction is the big five.
49. Which one of the following is not a soil conservation method?
 A. Use of trashlines
 B. Use of cut-off drains
 C. Planting one type of crop in a farm for many years
 D. Contour ploughing
50. Kariba Dam River Project was established **mainly** to
 A. create an inland water way
 B. settle the landless
 C. promote industrial development
 D. regulate the river flow.

51. Three of the following are roles played by early political associations in the struggle for independence in Kenya **except**
- demanding African representation in LEGCO
 - promoting unity among Africans
 - demanding release of political prisoners
 - educating Africans about injustices done to them by colonial government
52. Which one of the following statements describes mediation as a way of solving disputes in Kenya?
- Discussing the matter with one another
 - Taking the matter to court
 - Asking for forgiveness
 - Involving a third party
53. One of the achievements of Organisation of African Unity was that it
- promoted peace in the continent
 - eliminated all forms of colonialism in the continent
 - lacking adequate funds to carry out its activities
 - fought HIV and AIDS pandemic in the continent
54. One of the roles of political parties in democracy is to
- revise the voters register
 - create a parallel government
 - prepare voting materials
 - keep the government on its toes.
55. Which one of the following factors influenced the location of a milk factory at Dandora in Nairobi?
- Demand for milk
 - Availability of raw materials
 - Government policy
 - Good means of transport and communication
56. A member of county assembly may lose his/her seat through three of the following ways **except**
- being declared bankrupt
 - conviction of an election offence by the court
 - visiting a foreign country
 - being elected a speaker of the county assembly.
57. Meda was beaten by a group of youth for supporting a different political party in their region. Which one of the following freedoms was he denied?
- Expression
 - Movement
 - Association
 - Worship
58. Who among the following was a founder member of KADU?
- Paul Ngei
 - James Gichuru
 - Masinde Muliro
 - Oginga Odinga
59. In Kenya, the prison service is headed by the
- commander
 - commissioner of prisons
 - the president
 - the inspector general of police.
60. In Kenya, the senior civil servant in a state department is appointed by
- the head of public service
 - the president
 - the judicial service commissioner
 - the Attorney general.

SECTION II: CHRISTIAN RELIGIOUS EDUCATION

61. From the sufferings that Adam and Eve experienced after disobeying God according to the book of Genesis chapter 3, Christians learn that
- sin is unavoidable
 - snakes are very cunning animal
 - sin separates man from God
 - temptations are unacceptable.
62. Which one of the following creatures was sent by Noah to see whether the floods had receded and came with a fresh olive leaf?
- Dove
 - Raven
 - Pigeon
 - Duck
63. Which one of the following was **not** a promise of God to Abraham?
- He would die at a ripe age.
 - He will bless him with a son.
 - Many nations will be blessed through him.
 - Everlasting dynasty.
64. Which one of the following families moved to Egypt because God wanted to protect them against hunger?
- Jacob and his sons
 - Isaac and Rebecca
 - Abraham and his family
 - Hannah and Elikanah
65. When God called Moses, he was living in
- Haran
 - Ur
 - Midian
 - Canaan.
66. Which one of the following shows the **correct** order of the first four plagues in Egypt?
- Blood, gnats, frogs, flies
 - Frogs, gnats, flies, blood
 - Blood, flies, frogs, gnats
 - Blood, frogs, gnats, flies
67. Which one of the following forms of worship was done by the Israelites immediately after crossing the red sea?
- Offering sacrifices
 - Burning incense
 - Singing hymns to God
 - Reciting the ten commandments
68. Who among the following kings of Israel made Israel a wealthy nation?
- King
- Solomon
 - David
 - Saul
 - Rehoboam
69. Who among the following people was sent by prophet Elijah to go and ask king Ahab to meet him?
- Naboth
 - Obadiah
 - Jeroboam
 - Elisha
70. The prophet who foretold the escape and return of Jesus to Egypt and Israel respectively was
- Isaiah
 - Hosea
 - Jeremiah
 - Amos.
71. The **main** reason why the Angel of the Lord appeared to the shepherds at night that Jesus was born was to
- warn them against Herod.
 - show them the power of God.
 - instruct them to warn Joseph to escape to Egypt.
 - tell them good news about their saviour who had been born.
72. What lesson did John the baptist teach the crowd that came to listen to him? *Luke 3:7 - 11*
- The importance of forgiving those who wronged us.
 - The importance of praying to God.
 - The importance of sharing.
 - The importance of Abraham to the Jews.
73. Jesus showed that he was a universal Messiah by doing one of the following miracles, which one is it?
- Healing the blind Bartimaeus
 - Healing the daughter of a Caananite woman in Tyre
 - Calming the sea
 - Raising Jairu's daughter.
74. A lesson that Christians can learn from the parable of unforgiving servant is to be
- thankful
 - repentant
 - forgiving
 - prayerful.

- 75. **"It is written, worship the Lord your God and serve him only."** Luke 4:8. These words were said by Jesus during his temptation. The incident teaches Christians that they should
 - A. read the scriptures to the sinners.
 - B. resist the devil with scriptures.
 - C. realize that temptations is part of their life.
 - D. fast and pray in the desert to overcome temptations.
- 76. To teach his disciples on the importance of service to others, Jesus did one of the following. Which one is it?
 - A. Healing ten lepers
 - B. Washing disciples' feet
 - C. Sharing a meal with them
 - D. Raising Jairus daughter
- 77. Who among the following disciples of Jesus became angry when Jesus asked whether he loves him for the third time?
 - A. John
 - B. James
 - C. Thomas
 - D. Peter
- 78. During the day of Pentecost
 - A. the lame walked.
 - B. there was an earthquake.
 - C. the disciples shared the last meal.
 - D. many believers were baptised.
- 79. Who among the following sold all his parcel of ancestral land and brought all the money to the disciples?
 - A. Annanias and Saphirah
 - B. Barbanas
 - C. Saul
 - D. Barsabas
- 80. Three of the following are fruits of the Holy Spirit **except**
 - A. faith
 - B. faithfulness
 - C. patience
 - D. peace.
- 81. Which one of the following African Traditional society beliefs is **not** compatible to Christianity?
 - A. Belief in life after death
 - B. Respect for life
 - C. Response to God through worship
 - D. Sacrificing to the ancestors
- 82. The **main** duties of diviners in traditional African communities was to
 - A. tell the cause of calamities and their solutions
 - B. bless warriors
 - C. pray for the sick
 - D. forgive sins.
- 83. In some traditional African communities, the initiates lived in seclusion in order to be
 - A. punished
 - B. taught their duties
 - C. married
 - D. made elders.
- 84. Which one of the following is a rite of passage in traditional African communities?
 - A. Engagement
 - B. Courtship
 - C. Death
 - D. Burial
- 85. The **main** reason why we should obey authorities according to **Romans 13: 1 - 5** is
 - A. authority is from God.
 - B. man cannot do without authority.
 - C. authority is the most powerful element.
 - D. all who authorizes are friendly.
- 86. According to **James 1:27**, what God considers to be a pure and genuine religion is
 - A. going to church and keeping the Sabbath holy.
 - B. helping the aged.
 - C. visiting the prisoners.
 - D. taking care of the orphans and widows.
- 87. Which one of the following activities is the **best** use of leisure time?
 - A. Used for entertainment
 - B. Used to develop the community
 - C. Used to buy power when necessary
 - D. Saved and used when necessary
- 88. Judy is a committed Christian, her friend is in hospital. What is the **best** thing for her to do to her friend?
 - A. Pray to God for her
 - B. Tell her to stop fearing
 - C. Take her to a magician
 - D. Tell her to read the Bible
- 89. The **main** reason why Christian condemn prostitution is because it leads to
 - A. unwanted pregnancies
 - B. spread of HIV and AIDS
 - C. expulsion from school
 - D. misuse of sex.
- 90. Which one of the following **best** promotes love among Christians?
 - A. Going to church
 - B. Praying with others
 - C. Caring for the hungry
 - D. Visiting one another

SECTION II: ISLAMIC RELIGIOUS EDUCATION

61. In an event that the imam prostrates directly from qiyam, he was likely that he was reciting one of the following surahs;
A. Takathur B. Alaq
C. Tiyn D. Aala
62. The surah that talks about the great help that prophet Muhammad (PBUH) got while he was wandering is likely to be
A. Maun B. Qureish
C. Shamsu D. Dhuha
63. Which of the following is the **correct** completion of the following verse?
"WAMAA UMIRUU ILLA LIYAABUDU"
A. Allah B. mukhuluswina
C. kitaaab D. kafaruu
64. Which of the following **correctly** describes the other names of the Quran?
A. Al Huda - guidance
B. Tadhkirah - warner
C. Rahma - tidings
D. Bashi - criterion
65. What is the **main** theme learnt in surah Kafirun?
A. Seeking of knowledge
B. Worshipping Allah alone
C. Freedom of worship
D. Kindness to none Muslims
66. Which of the following statement is **true**?
A. Hadith does not explain the religion's obligations
B. Sunnah is the obligations that the prophet performed
C. Swalah begins with taslim and ends with takbir
D. Imam makes the call for prayer
67. The hadith of the prophet that stresses on the importance of fearing Allah teaches us
A. to fear Allah alongside the prophet
B. to follow up a bad deed with a good one
C. not during a bad act while fasting
D. fearing Allah most while I the mosque.
68. The prophet (SAW) discouraged the mixing of good items with the bad ones in an act termed as
A. hoarding of items
B. adulteration of items
C. ribaa
D. usury.
69. Among the four sources of Islamic law, which one is a combination of Muslim scholars?
A. Hadith B. Quran
C. Qiyas D. Ijmaa
70. Nabii Muhammad (SAW) said that the pleasure of Allah is in the pleasure of the following. Which one?
A. Parents B. Relatives
C. Neighbours D. Guests
71. Who among the following is an exemption in observing the fourth pillar of Islam?
A. An adult man B. Traveller
C. Maskin D. Orphan
72. Upon meeting his teacher, Zulekha greeted him. How many thawwab did she achieve?
A. 30 B. 5
C. 100 D. 90
73. Which day do angels of Allah raise our deeds?
A. Saturday B. Monday
C. Friday D. Thursday
74. To believe that something good or bad happening is a pillar of Faith called
A. Tawaf B. Qadar
C. Ikhlas D. Iman

75. Which event marks the completion of the Islamic calendar?
 A. Pilgrimage B. Friday prayer
 C. Ramadhan D. Tarawaach
76. If one eats deliberately during the day of Ramadhan;
 A. he or she must make up for the lost day
 B. continue fasting
 C. ask for forgiveness
 D. recite Quran and pray.
77. Worshipping only one God associating non with him is referred to as
 A. shirk B. swiyaam
 C. itikaf D. ibaadah.
78. Which statement is **true** about Qarun?
 A. he was a relative of Nabii Musa
 B. he was poor
 C. he helped the poor
 D. he had the fear of Allah
79. Which amount is correct on zakat payment?
 A. 30 heads - cattle
 B. 5 heads - sheep
 C. 15 heads - goats
 D. 10 heads - camels
80. The migration of the prophet from Makkah to Madiyah can **best** be described as
 A. Miiraj B. Israi
 C. Talaal badru D. Hijra.
81. Who among the following women was the first to embrace Islam?
 A. Amina binti Wahab
 B. Aisha binti Abuakr
 C. Khadijah binti Khuweilid
 D. Fatuma binti Muhammad
82. What was the reason behind Caliph Abubakar holding a name Aswiddiiq?
 A. He was the first caliph
 B. He testified the truth on ascension of the prophet
 C. He had a lot of wealth
 D. The prophet married his daughter
83. How old was the prophet (SAW) when Amina binti Wahab died?
 A. 8 years
 B. 40 years
 C. 6 years
 D. 10 years
84. Which prophet of Allah had thieves broken into his house and stole everything?
 A. Yusuf A.S
 B. Ayyub A.S
 C. Issa A.S
 D. Yahya A.S
85. The people of Nabii Swaleh were punished for which of the following mistakes?
 A. For slaughtering the camel
 B. Drinking khamr
 C. Committing adultery
 D. Not worshipping Allah
86. For how many years did Nabii Nuh (A.S) preach to his people?
 A. 3
 B. 1000
 C. 95
 D. 50
87. Qaum Musa (A.S) were guided by Allah's holy book called
 A. Gospel B. Torah
 C. Psalms D. Furqan.
88. Most of the prophets of Allah worked as
 A. shepherds B. carpenters
 C. traders D. hawkers.
89. Who was Imran?
 A. Prophet Yusuf (A.S) father
 B. Mariam's father (A.S)
 C. Muhammad's uncle (S.A.W)
 D. Nabii Yahya's brother
90. Where is Allah?
 A. Everywhere around us
 B. Above the sky on His Throne
 C. In holy places
 D. In the Kaabah in Makkah