

## APRIL HOLIDAY ENGLISH HOMEWORK – CLASS 5

Read the passage below. Fill in the blank spaces with the correct words from the choices given below.

When things \_\_\_\_\_ (1) not \_\_\_\_\_ (2) the way you \_\_\_\_\_ (3) do you complain too \_\_\_\_\_? (4) If \_\_\_\_\_ (5) answer is yes, then you are \_\_\_\_\_ (6) people call a cry baby.

Judy is in \_\_\_\_\_ (7) in a boarding school. It is opening day and \_\_\_\_\_ (8) has \_\_\_\_\_ (9) her mother to supermarket \_\_\_\_\_ (10) some back-to-school shopping. Her mother can only \_\_\_\_\_ (11) to buy \_\_\_\_\_ (12) things for Judy. But Judy wants to \_\_\_\_\_ (13) the \_\_\_\_\_ (14) with many things she can do without including biscuits \_\_\_\_\_ (15) margarine and cakes.

A	B	C	D
1. Aren't	are	is	was
2. Go	gone	going	goes
3. Want	wanting	wants	wanted
4. Many	more	few	much
5. A	the	an	then
6. Which	whose	why	what
7. Standard Five	Standard five	standard Five	standard five
8. He	it	she	her
9. Acompanied	accompanied	acompanied	accompanied
10. With	on	by	for
11. Afford	affect	effect	attempt
12. Useless	unimportant	essential	unnecessary
13. Feel	filled	file	fill
14. Trolley	trolley	trolley	troey
15. !	,	?	.

Write the past tense of the underlined words in questions 16 - 18

16. Douglas forget his books at home. \_\_\_\_\_

17. The hunters creep towards the bush. \_\_\_\_\_

18. The thieves carry the box. \_\_\_\_\_

Choose the correct word to fill the blank spaces 19-21

19. He is suffering \_\_\_\_\_ malaria.

- a. for                      b. from                      c. With                      d. Of

20. Share the bananas \_\_\_\_\_ the two children.

- a. Among                      b. Along                      c. Between                      d. Across

21. The boy passed \_\_\_\_\_ the window.

- a. Art                      b. Into                      c. Over                      d. Through

**Choose the correct word to complete the sentences in questions 22-24**

22. These books belong to Jane, they are \_\_\_\_\_

- a. Janes                      b. Janes'                      c. Jane's                      d. Jane

23. The bags belong to the girls, they are \_\_\_\_\_

- a. Girls'                      b. Girl's                      c. Girls                      d. Girl

24. The \_\_\_\_\_ cars are new.

- a. Ladies                      b. Ladies'                      c. Ladys'                      d. Lady's

**Choose the correct words to complete the sentences in questions 25-27**

25. We walked \_\_\_\_\_ through the mud.

- a. Careful                      b. Carefully                      c. Carefull                      d. Carefully

26. The boy did the sum \_\_\_\_\_

- a. Easy                      b. Easilyly                      c. Easily                      d. Easely

27. We chattered \_\_\_\_\_ with other pupils.

- a. Happily                      b. Happly                      c. Happyly                      d. Happy

**Choose the plural of the underlined words in questions 28-30**

28. The speeding car landed in a ditch.

- a. Ditchies                      b. Ditches                      c. Ditch                      d. Ditchs

29. One traveler had a box.

- a. Boxes                      b. Boxies                      c. Bozen                      d. Boxess

30. A fox almost killed the goat.

- a. Foxen                      b. Foxies                      c. Foxens                      d. Foxes

**Choose the correct conjunctions for the questions 31-33**

31. \_\_\_\_\_ He was punished, he did not cry.

- a. But                      b. Although                      c. And                      d. Since

32. James did not do well in his exams \_\_\_\_\_ he was unwell.

- a. After                      b. Before                      c. Because                      d. While

33. We did not know \_\_\_\_\_ to go \_\_\_\_\_ not.

- a. Whether, or                      b. Either, or                      c. Very, but                      d. As, as

**For questions 34, choose the odd one.**

34. a. Swarm                      b. Litter                      c. Shoal                      d. Furniture

35. A bouquet of \_\_\_\_\_.

- a. Trees
- b. Chicks
- c. Cigarette
- d. Flowers
- e.

36. A troop of \_\_\_\_\_.

- a. Lions
- b. Monkeys
- c. Thieves
- d. Bees

**Complete the following question tags.**

37. Jane can run very fast, \_\_\_\_\_

38. He lives here, \_\_\_\_\_

**Choose the opposite of the underlined words in questions 39 and 40.**

39. The actor pleased everyone.

- a. Actress
- b. Princess
- c. Actors
- d. Hostess

40. My cousin is a monk.

- a. Brother
- b. Sister
- c. Nun
- d. Heroine

**Choose the correct tense to fill in the blank spaces in questions 41, 42 and 43.**

41. Have you \_\_\_\_\_ my books?

- a. See
- b. Saw
- c. Seen
- d. Sees

42. She has \_\_\_\_\_ her work.

- a. Began
- b. Begun
- c. Begin
- d. Begins

43. Someone has \_\_\_\_\_ my pencil.

- a. Took
- b. Take
- c. Takes
- d. Taken

**For questions 44-45 choose the correctly spelt words.**

44. a. adress      b. address      c. matress      d. unconcious

45. a. occured      b. woolen      c. receive      d. recieve

**For questions 46-47 choose the correct order.**

46. Tom was bought \_\_\_\_\_ bag.

- a. Expensive, brown, polythene
- b. Brown, expensive, polythene
- c. Polythene, brown, expensive
- d. Expensive, polythene, brown

47. It was a \_\_\_\_\_ day.

- a. Cloudy, cold, exam
- b. Cold, exam, cloudy
- c. Cold, cloudy, exam
- d. Exam, cloudy, cold

**For questions 48-50 choose the correct word.**

48. a. cyied      b. cries      c. cring      d. crys

49. a. stays      b. staid      c. stayes      d. staing

50. a. transfered      b. transfferred      c. transferred      d. transferring

## **KAZI YA LIKIZO YA APRILI KISWAHILI – DARASA LA TANO**

**Chagua jibu sahihi kati ya yale uliopewa kukamilisha kifungu hichi.**

Hapo awali \_\_\_\_\_ (1) ya \_\_\_\_\_ (2) wageni wowote katika bara \_\_\_\_\_  
(3) la Afika, Watoto walikuwa na tabia \_\_\_\_\_ (4) sana. Sasa kwa nini tuache mkondo  
\_\_\_\_\_ (5) Asilia na \_\_\_\_\_ (6) mambo yaliyo kuja na wageni \_\_\_\_\_  
(7) hayatufai? Sikatai mabadiliko lakini tuchukue yanayofaa na tuyabeze yanayo tuangamiza.

Hakika \_\_\_\_\_ (8) mujibu wa utamaduni \_\_\_\_\_ (9), kwa nidhamu mwafrika  
alikuwa akiongoza. Mtoto \_\_\_\_\_ (10) mkubwa na mkubwa \_\_\_\_\_ (11)  
alimheshimu mdogo. Mtoto mdogo \_\_\_\_\_ (12) mtu mzima hata asiyemjua \_\_\_\_\_  
\_\_\_\_\_ (13) ya tofauti ya umri wao. Mdogo alisimama na \_\_\_\_\_ (14) mkubwa  
kwa unyenyekevu huku macho ame yaangusha chini kusema, “ \_\_\_\_\_ (15)  
baba/mama/babu/nyanya/kaka/dada”.

A	B	C	D
1. Mbele	nyuma	kabla	mbali
2. Kuja	kukuja	hawajaja	waje
3. Hii	huu	hili	hapa
4. Jema	mwema	mzuri	njema
5. Hiyo	huo	huyo	hilo
6. Kuomba	kuiga	kuigiza	kupata
7. Ambayo	ambao	ambazo	ambaye
8. Na	kwa	wa	mwa
9. Yetu	zetu	letu	wetu
10. Aliheshimu	aliheshima	alimheshimu	alimheshima
11. Aitha	aidha	idha	adha
12. Alikomwona	alimwona	aliona	alipomwona
13. Kwa sabu	kwasaababu	kwa sababu	kuwasababu
14. Akasalimia	kusalamia	kusalimia	kumsalimia
15. Marahaba	hujambo	shikamoo	habari

16. Toa ngeli mwafaka za nomino ilizopewa.

- a) Majira \_\_\_\_\_
- b) Maarifa \_\_\_\_\_
- c) Maradhi \_\_\_\_\_

17. Majuto ni mjukuu huja kinyume ni \_\_\_\_\_

(methali, tashbihi) kitendawili)

18. Kitu kizima kina sudusi ngapi? \_\_\_\_\_

19. **Kitendawili:** nyama nje Ngozi ndani, jibu ni? \_\_\_\_\_
20. **Kanusha:** Miti imeanguka. \_\_\_\_\_
21. Mtoto mdogo ameanguka vibaya. **Onyesha kivumishi** katika sentensi uliyopewa.
22. Jina langu jingine ni bombo. Mimi ni vazi gani? \_\_\_\_\_
23. Chora maumbo haya:

**Tao**

**Pia**

**Mehe**

24. **Andika wingi:** Mtoto ameanguka vibaya.

\_\_\_\_\_

25. Kifungu kimoja cha shairi huitwa \_\_\_\_\_

26. **Andika kwa wingi:** Mfuko uliraruka.

\_\_\_\_\_

27. Ugonjwa wa kutapika na kuendesha ni \_\_\_\_\_

28. Jina jingine la sidiria ni \_\_\_\_\_

**Tumia kiulizi “-pi”.**

29. Mzee \_\_\_\_\_ aliyekuita?

30. Mkono \_\_\_\_\_ uliovunjika?

**APRIL HOLIDAY MATHEMATICS HOMEWORK – CLASS 5**

1. What is the place value of digit 4 in the sum of 3262 and 235?
2. **Write the following in figures.** Three Hundred and fifty four Thousand, seven Hundred and seventy one.
3. Round off 48762 to the nearest thousands.
4. Divide 2744 by 56.
5. Find the L.C.M. of 36 and 24.
6. What is the G.C.D. of 18, 12 and 24.
7. Work out:

	M	CM
	26	92
+	44	56
	<hr/>	
	<hr/>	
8. Marvin had 200 shillings note. He wanted Sh. 40 coins. How many coins did he get?
9. 25 shirts cost Sh. 1800. What is the cost of one shirt?
10. Write 48 in Roman numbers.  

---
11. **Work out:** 484 X 26
12. Change  $\frac{16}{15}$  into mixed fraction.
13. The mass of a tin is 16kg. what is the mass of 215 such tins?
14. The sum of two numbers is 1000. If one of the numbers is 665, what is the other number?
15. Express 48 as a product of its prime factors.

16. Find the perimeter of the square whose side is 30cm.

17. There are 480 sweets in a packet. How many sweets are there in 27 packets?

18. A butcher slaughters 29 cows a day. How many days will it take to slaughter 377 cows?

19. Find the next number in this series.

1, 3, 5, 7, 9, 11, \_\_\_\_\_, \_\_\_\_\_

20. Write 0.004 as a fraction in its simplest form.

21. Express  $\frac{23}{7}$  as a mixed fraction.

22. Find the value of X in;

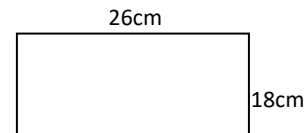
$$\frac{4}{5} = \frac{X}{10}$$

23. What is the next multiple of 8 after 32?

24. Write  $\frac{18}{24}$  in simplest form.

25. Juliet cut 5 oranges into two pieces each. She also cut each of the pieces into two. How many pieces did she have altogether?

26. What is the perimeter of the rectangle below?



27. There are 3482 pupils in a school. If 1984 are girls, how many boys are in the school?

28. Write  $2\frac{3}{10}$  as an improper fraction.

29. What is the sum of all prime numbers between 10 and 25?

30. Divide 2639 by 13.

31. Chege bought a packet of sweets to share equally with 25 friends. How many sweets were left if the packet had 435 sweets?

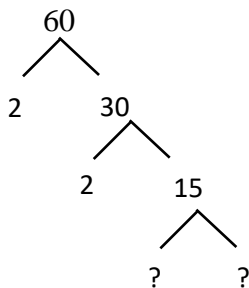
32. Work out:

$$6 \overline{) 20\text{hr } 30\text{ min}}$$

33. How many half litres are there in 4 litres?

34. Ngaru is 11 years old. His mother is three times older. What is their total age?

35. Complete the factor tree.

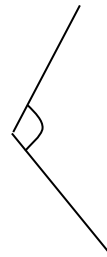


36. Mama Mboga had 408 potatoes. She arranged them in groups of four. How many groups did she make?

37. How many minutes are there in 2hrs 15 minutes?

38. Find the sum of the L.C.M. and G.C.D. of 9, 24, 36.

39. Name the angle shown below.



40. Divide 1404 by 9.

41. What is the sum of prime numbers in the numbers less than 20?



42. Cherop drinks  $\frac{1}{2}$  litre of water every day.  
How many litres does she drink in ten days?

47. What is the total value of digit 3 in 23467?

43. Thirty four pupils were to contribute a total of Sh. 1768. If they contributed equally, how much did each contribute?

48. Express 72 as a product of its prime factors.

44. Kibet has 25 hens and Karanja has 24.  
Write the total number of hens in Roman numerals.

49. Work out:

$$18987 + 20 + 398400$$

45. Write 0.75 as a fraction to its simplest form.

50. What is the sum of odd numbers between 20 and 30?

46.  $4036 \div 34$

**APRIL HOLIDAY SCIENCE HOMEWORK – CLASS 5**

1. Which is the best soil for farming? \_\_\_\_\_
2. Which soil easily becomes waterlogged when it rains? \_\_\_\_\_
3. The best soil for modelling pot is? \_\_\_\_\_
4. The roughness and smoothness of soil is known as? \_\_\_\_\_
5. List two characteristics of loam soil.
  - i.) \_\_\_\_\_
  - ii.) \_\_\_\_\_
6. Fish breath through \_\_\_\_\_
7. Name three examples of fish.
  - i.) \_\_\_\_\_
  - ii.) \_\_\_\_\_
  - iii.) \_\_\_\_\_
8. Name a reptile that changes its colour. \_\_\_\_\_
9. A rain gauge measures the amount of \_\_\_\_\_
10. Name the three main parts of a wind vane.
  - a) \_\_\_\_\_
  - b) \_\_\_\_\_
  - c) \_\_\_\_\_
11. Write five materials required when making a simple wind vane.
  - a) \_\_\_\_\_
  - b) \_\_\_\_\_
  - c) \_\_\_\_\_
  - d) \_\_\_\_\_
  - e) \_\_\_\_\_
12. Name four conditions necessary for plants to make food.
  - i.) \_\_\_\_\_
  - ii.) \_\_\_\_\_
  - iii.) \_\_\_\_\_
  - iv.) \_\_\_\_\_
13. Plants loose excess water through small holes on their leaves called \_\_\_\_\_
14. The main function of the roots of a plant is to \_\_\_\_\_
15. Name five external parts of a plant:
  - i.) \_\_\_\_\_
  - ii.) \_\_\_\_\_
  - iii.) \_\_\_\_\_
  - iv.) \_\_\_\_\_
  - v.) \_\_\_\_\_
16. The process by which green plants make their own food is called \_\_\_\_\_

17. Name two none-flowering plants:

a) \_\_\_\_\_

b) \_\_\_\_\_

18. Mushroom reproduce through the \_\_\_\_\_

19. Name two examples of fungi:

i.) \_\_\_\_\_

ii.) \_\_\_\_\_

20. Name plants that reproduce through cones.

i.) \_\_\_\_\_

ii.) \_\_\_\_\_

21. Letter 'A' in the abbreviation AIDS stands for **Acquired** which means

\_\_\_\_\_

22. The date after which medicine should not be used is called the \_\_\_\_\_

23. The second stage of HIV infection is the \_\_\_\_\_

24. Name two signs of AIDS:

i.) \_\_\_\_\_

ii.) \_\_\_\_\_

25. The third stage of HIV infection is known as \_\_\_\_\_

26. Name two ways in which HIV cannot be transmitted.

i.) \_\_\_\_\_

ii.) \_\_\_\_\_

27. The other name for the incubation stage is \_\_\_\_\_

28. HIV can be passed from a mother to a baby in two ways. Which ones?

a) \_\_\_\_\_

b) \_\_\_\_\_

29. Some animals can be infected by HIV. True or false. \_\_\_\_\_

30. Name two fluids that transmit HIV.

i.) \_\_\_\_\_

ii.) \_\_\_\_\_

31. AIDS in full is \_\_\_\_\_

32. The letter 'I' in the abbreviation HIV stands for \_\_\_\_\_

33. Name two chemicals used at home.

i.) \_\_\_\_\_

ii.) \_\_\_\_\_

34. Give a reason why we should not spray chemicals against the wind.

\_\_\_\_\_

35. Name two places where medicine should be stored.

i.) \_\_\_\_\_ ii.) \_\_\_\_\_

36. Medicines used to relieve pain are called \_\_\_\_\_

37. What is a dosage? \_\_\_\_\_

38. The movement of air in and out of the body is called \_\_\_\_\_

39. Auma chewed a piece of meat for some time and then swallowed it. In what part of the digestive system did the digestion of the meat start? \_\_\_\_\_

40. Proteins are digested in the? \_\_\_\_\_

41. The breakdown of food begins in the \_\_\_\_\_

42. Name two support organs of the gut that produce digestive juices.

i.) \_\_\_\_\_ ii.) \_\_\_\_\_

43. What is the function of hydrochloric acid in the digestion of food? \_\_\_\_\_

\_\_\_\_\_

44. The part of the breathing system that separates the lungs from the abdomen is called the

\_\_\_\_\_

45. Name two gases involved in breathing.

i.) \_\_\_\_\_ ii.) \_\_\_\_\_

46. List three functions of the nose in the breathing system.

i.) \_\_\_\_\_

ii.) \_\_\_\_\_

iii.) \_\_\_\_\_

47. The two substances found in foods that keep the body healthy are called?

\_\_\_\_\_

48. The amount of rainfall is measured in \_\_\_\_\_

49. Animals that feed on vegetable materials only are called the \_\_\_\_\_

50. A rain gauge should be dug 15cm underground in order to \_\_\_\_\_

\_\_\_\_\_

**APRIL HOLIDAY SOCIAL STUDIES HOMEWORK – CLASS 5**

1. Give three uses of soil.
  - i.) \_\_\_\_\_
  - ii.) \_\_\_\_\_
  - iii.) \_\_\_\_\_
2. Define soil erosion. \_\_\_\_\_  
\_\_\_\_\_
3. Which soil encourages development of a swamp? \_\_\_\_\_
4. Write down three examples of hard wood trees.
  - i.) \_\_\_\_\_
  - ii.) \_\_\_\_\_
  - iii.) \_\_\_\_\_
5. Hills that are found in the Nyika plateaus and have resisted erosion are called? \_\_\_\_\_  
\_\_\_\_\_
6. Planting of trees where they have never been planted before is called \_\_\_\_\_
7. Lotikipi plains are located in \_\_\_\_\_ region.
8. Which is the largest lake in Kenya? \_\_\_\_\_
9. A high flat land is called? \_\_\_\_\_
10. Chicken kept for meat are called? \_\_\_\_\_
11. The movement of goods and people from one place to another is described as?  
\_\_\_\_\_
12. Iraaw, Dahalo and Gabbra have one thing in common. These communities listed above are?  
\_\_\_\_\_
13. A set of rules used to govern a country are called? \_\_\_\_\_
14. Kenya got independence in \_\_\_\_\_
15. A location is headed by a? \_\_\_\_\_
16. The climate conditions of the desert can be described as \_\_\_\_\_  
\_\_\_\_\_
17. Which country neighbours Kenya to the East? \_\_\_\_\_
18. The side of the mountain that experiences a lot of rainfall is called? \_\_\_\_\_  
\_\_\_\_\_
19. Nyika is a Kiswahili word meaning? \_\_\_\_\_
20. On 1<sup>st</sup> May every year in Kenya we celebrate? \_\_\_\_\_
21. The imaginary lines used to determine time are called? \_\_\_\_\_
22. The type of vegetation found along the coastal parts of Kenya is \_\_\_\_\_  
\_\_\_\_\_
23. A group of people with the same forefather is known as \_\_\_\_\_

24. Name the salty water lakes in Kenya.

- i.) \_\_\_\_\_ iii.) \_\_\_\_\_  
ii.) \_\_\_\_\_ iv.) \_\_\_\_\_

25. Which weather instrument is used to measure the atmospheric pressure? \_\_\_\_\_

26. Name the four cardinal points of a compass.

- i.) \_\_\_\_\_ iii.) \_\_\_\_\_  
ii.) \_\_\_\_\_ iv.) \_\_\_\_\_  
v.) \_\_\_\_\_

27. Which colour of our National flag indicates that Kenyans fought for independence?

\_\_\_\_\_

28. The second vice president of Kenya was? \_\_\_\_\_

29. The traditional God of the Agikuyu community is? \_\_\_\_\_

30. Name the lakes that are found along the Rift Valley.

- i.) \_\_\_\_\_ iii.) \_\_\_\_\_  
ii.) \_\_\_\_\_ iv.) \_\_\_\_\_

31. People who were initiated almost at the same time belonged to the same \_\_\_\_\_

32. The weather instrument that is used to measure the direction of wind is \_\_\_\_\_

\_\_\_\_\_

33. The biggest swamp in Kenya is \_\_\_\_\_

34. A governor is in charge of a \_\_\_\_\_

35. Define weather. \_\_\_\_\_

\_\_\_\_\_

36. The biggest language group in Kenya is \_\_\_\_\_

37. Give four importance of vegetation.

- i.) \_\_\_\_\_  
ii.) \_\_\_\_\_  
iii.) \_\_\_\_\_  
iv.) \_\_\_\_\_

38. State 4 main language groups in Kenya.

- i.) \_\_\_\_\_ iii.) \_\_\_\_\_  
ii.) \_\_\_\_\_ iv.) \_\_\_\_\_

39. The Cushites are divided into two groups. These are:

- i.) \_\_\_\_\_ ii.) \_\_\_\_\_

40. Where did the ancestors of the Luo migrate from? \_\_\_\_\_

41. Name the three Nilotic language groups.

- i.) \_\_\_\_\_ iii.) \_\_\_\_\_  
ii.) \_\_\_\_\_

42. Which type of soil is best for tea and coffee? \_\_\_\_\_

43. Name three coastal Bantus in Kenya.

- i.) \_\_\_\_\_ iii.) \_\_\_\_\_  
ii.) \_\_\_\_\_

44. What is the main economic activity of the plain Nilotes. \_\_\_\_\_

45. Rivers that flow throughout the year are called? \_\_\_\_\_

46. Name three rivers that drain their water into Lake Turkana.

- i.) \_\_\_\_\_ iii.) \_\_\_\_\_  
ii.) \_\_\_\_\_

47. Who was the first Prime Minister in Kenya? \_\_\_\_\_

48. Kenya became a republic in? \_\_\_\_\_

49. The most northerly point of Kenya is a town called? \_\_\_\_\_

50. Name two drainage features.

- i.) \_\_\_\_\_ ii.) \_\_\_\_\_

51. Give two reasons for migration of communities in the past.

- i.) \_\_\_\_\_  
ii.) \_\_\_\_\_

52. Which is the homeland of the River-lake Nilotes? \_\_\_\_\_

53. The most expensive means of transport in Kenya is? \_\_\_\_\_

54. Which mountain in Kenya is covered by snow on the top? \_\_\_\_\_

55. Name three factors that affect climate.

- i.) \_\_\_\_\_ iii.) \_\_\_\_\_  
ii.) \_\_\_\_\_

56. Small rivers that feed the main one are called? \_\_\_\_\_

57. The instrument used to measure humidity is? \_\_\_\_\_

58. The love of one's country is called? \_\_\_\_\_

59. River Ewaso Nyiro North drains its water into the \_\_\_\_\_

60. Keeping of large numbers of animals in a small area is called? \_\_\_\_\_  
\_\_\_\_\_

**APRIL HOLIDAY C.R.E. HOMEWORK – CLASS 5**

1. The laws of God are called? \_\_\_\_\_
2. God gave Moses His law on Mount \_\_\_\_\_
3. List the Ten commandments in the order in which they were given.
  - a) \_\_\_\_\_
  - b) \_\_\_\_\_
  - c) \_\_\_\_\_
  - d) \_\_\_\_\_
  - e) \_\_\_\_\_
  - f) \_\_\_\_\_
  - g) \_\_\_\_\_
  - h) \_\_\_\_\_
  - i) \_\_\_\_\_
  - j) \_\_\_\_\_
4. The Ten Commandments are written in the book of \_\_\_\_\_
5. The story of creation is told in which book in the Bible. \_\_\_\_\_
6. Name the commandment that has the promise added.  
\_\_\_\_\_
7. Who is your neighbour? \_\_\_\_\_
8. List two commandments that David broke.
  - a) \_\_\_\_\_
  - b) \_\_\_\_\_
9. Name three commandments which king Ahab and queen Jezebel broke.
  - a) \_\_\_\_\_
  - b) \_\_\_\_\_
  - c) \_\_\_\_\_
10. \_\_\_\_\_ united the people of Israel with God on Mt. Sinai.
11. List the order of days of creation from day one.
  - a) \_\_\_\_\_
  - b) \_\_\_\_\_



- c) \_\_\_\_\_
- d) \_\_\_\_\_
- e) \_\_\_\_\_
- f) \_\_\_\_\_
- g) \_\_\_\_\_

12. Jesus performed His first miracle in? \_\_\_\_\_

13. Which prophet foretold the New Covenant which will be written on people's hearts?

\_\_\_\_\_

14. Israelites were slaves in the land of? \_\_\_\_\_

15. Jesus said to His mother "He is your son" John 19: 26. Who was Jesus referring to?

\_\_\_\_\_

16. Why are human beings special in the eyes of God? \_\_\_\_\_

\_\_\_\_\_

17. Life starts as a \_\_\_\_\_ in the mother's womb.

18. List five effects of irresponsible boy/girl relationship. (5mrks)

- a) \_\_\_\_\_
- b) \_\_\_\_\_
- c) \_\_\_\_\_
- d) \_\_\_\_\_
- e) \_\_\_\_\_

19. The injured person in the story of the Good Samaritan was travelling from \_\_\_\_\_ to \_\_\_\_\_

20. List five fruits of the Holy Spirit.

- |          |          |
|----------|----------|
| a) _____ | d) _____ |
| b) _____ | e) _____ |
| c) _____ |          |

21. The special meal Jesus shared with His disciples is called? \_\_\_\_\_

22. An agreement between God and man is called? \_\_\_\_\_

23. God gave man the responsibility to? \_\_\_\_\_

24. Jesus told the story of the Good Samaritan to teach about? \_\_\_\_\_

\_\_\_\_\_

25. List three children of Noah.

a) \_\_\_\_\_

b) \_\_\_\_\_

c) \_\_\_\_\_

26. List three miracles performed by Elisha.

a) \_\_\_\_\_

b) \_\_\_\_\_

c) \_\_\_\_\_

27. The first five books of the Bible are called? \_\_\_\_\_

28. Our bodies are the \_\_\_\_\_ of the Holy Spirit.

29. List the two greatest commandments.

a) \_\_\_\_\_

b) \_\_\_\_\_