

# COMPETENCY BASED CURRICULUM

## MONITORING LEARNER'S PROGRESS

GRADE 2 - YEAR 2021

2



### MATHEMATICAL ACTIVITIES

LEARNER'S NAME:

LEARNER'S ADMISSION NO.

GENDER

BOY

GIRL

#### INSTRUCTIONS TO LEARNERS

1. This paper consists of 25 Questions.
2. Answer all the questions by circling / ticking the correct answer.

#### FOR OFFICIAL USE ONLY

#### SCORING GRID (25 Marks)

QUESTION	1	2	3	4	5	6	7	8	9	10	11	12	13	14	15	16	17	18	19	20
Mark (s)	1	1	1	1	1	1	1	1	1	1	1	1	1	1	1	1	1	1	1	1
Score																				

QUESTION	21	22	23	24	25	TOTAL SCORE
Mark (s)	1	1	1	1	1	25
Score						


#### Assessment Rubric

Exceeds expectation	Meet expectation	Approaching expectation	Below expectation
4	3	2	1

Fill in the missing numbers.

- 42, 40, 38, 36, \_\_\_\_\_, 32
- 24, 26, 28, 30, \_\_\_\_\_, 34
- 64, 69, 74, 79, \_\_\_\_\_

Which is a quarter.

4. 
- A.                      B.                      C.

Add

- $15 + 14 =$  \_\_\_\_\_
- $27 + 6 =$  \_\_\_\_\_
- $\begin{array}{r} 37 \\ +6 \\ \hline \end{array}$                       8.  $\begin{array}{r} 33 \\ +9 \\ \hline \end{array}$
- Amina has 15 books. Jane has 6 books. How many books do they have altogether? \_\_\_\_\_

Subtract


- $50 - 30 =$  \_\_\_\_\_
- $70 - 50 =$  \_\_\_\_\_


Complete the number family

- $8 + 5 =$
- $13 - 5 =$
- $8 + 6 =$
- $14 - 8 =$
- 5 = 8

17.  $19 - \square = 12$

Multiply


18.   $3 \times 5 =$  \_\_\_\_\_

19.   $3 \times 4 =$  \_\_\_\_\_

Divide

20.  $21 \div 3 =$                       21.  $18 \div 3 =$

22. What is the time?



Write need or want

- | Item                      | need or want |
|---------------------------|--------------|
| 23. Radio                 | _____        |
| 24. Food                  | _____        |
| 25. Which one is lighter? |              |

